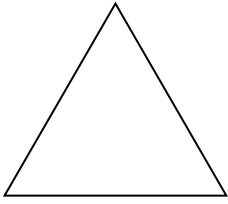


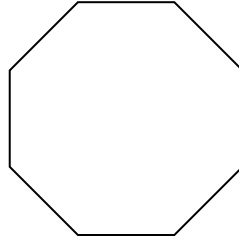


Identifiziere die Art der gezeigten Form.

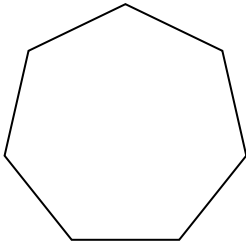
1)



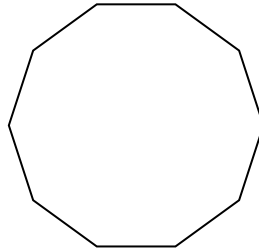
2)



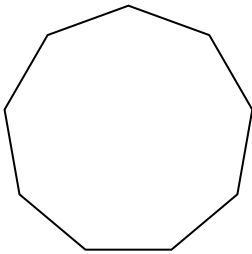
3)



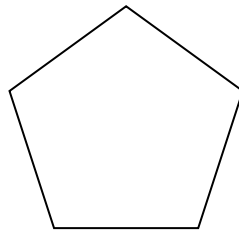
4)




5)



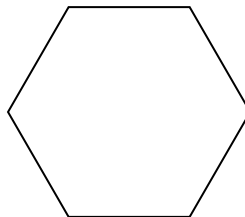
6)



7)



8)



Antworten

1. _____

2. _____

3. _____

4. _____

5. _____

6. _____

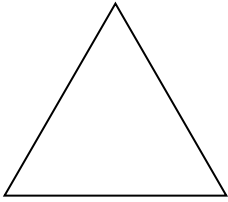
7. _____

8. _____

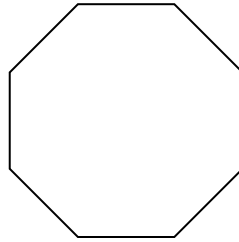


Identifiziere die Art der gezeigten Form.

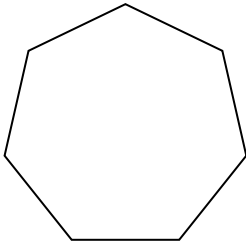
1)



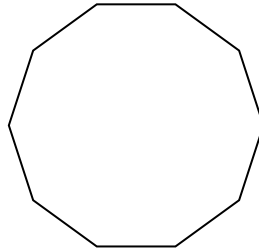
2)



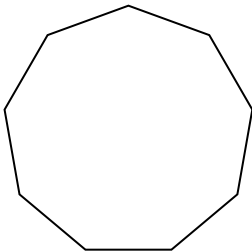
3)



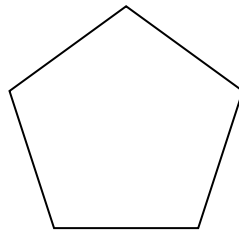
4)




5)



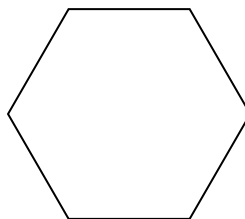
6)



7)



8)

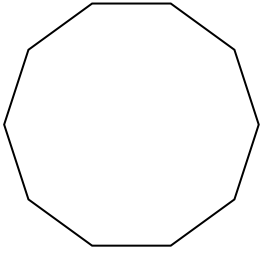
Antworten

1. Dreieck
2. Achteck
3. Siebeneck
4. Zehneck
5. Neuneck
6. Fünfeck
7. Viereck
8. Sechseck

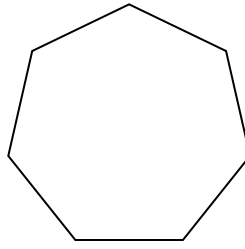


Identifiziere die Art der gezeigten Form.

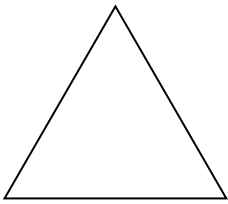
1)



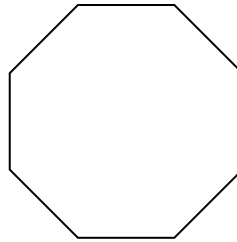
2)



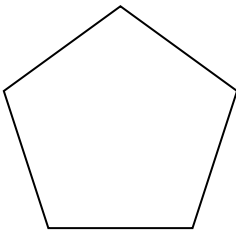
3)



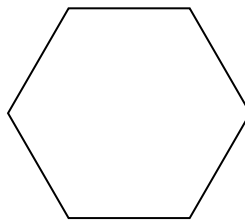
4)




5)



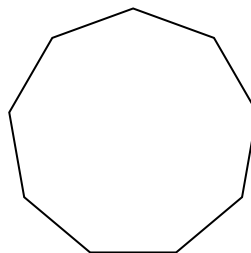
6)



7)



8)



Antworten

1. _____

2. _____

3. _____

4. _____

5. _____

6. _____

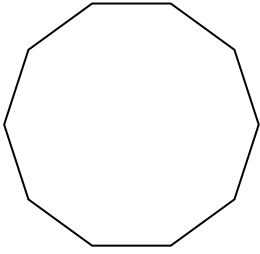
7. _____

8. _____

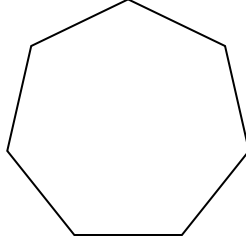


Identifiziere die Art der gezeigten Form.

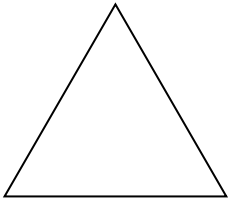
1)



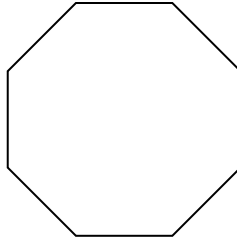
2)



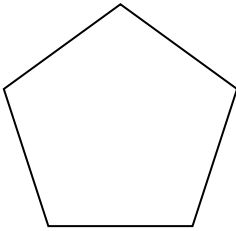
3)



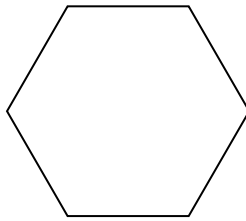
4)




5)



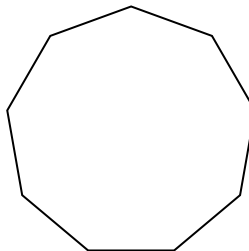
6)



7)



8)



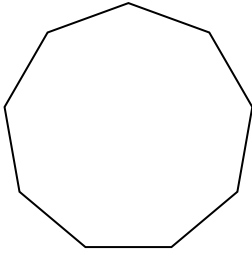
Antworten

- 1. Zehneck
- 2. Siebeneck
- 3. Dreieck
- 4. Achteck
- 5. Fünfeck
- 6. Sechseck
- 7. Viereck
- 8. Neuneck

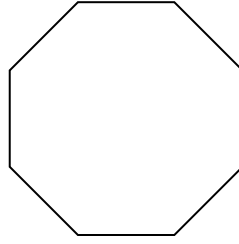


Identifiziere die Art der gezeigten Form.

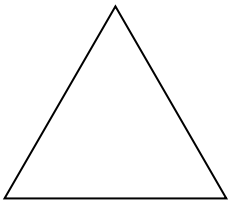
1)



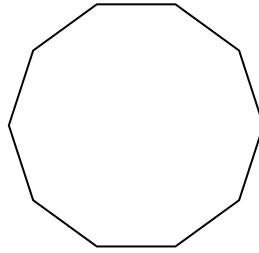
2)




3)



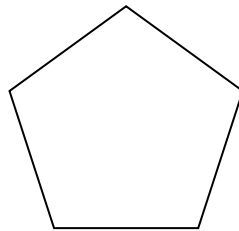
4)



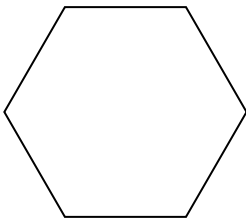
5)



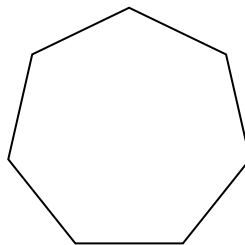
6)



7)



8)



Antworten

1. _____

2. _____

3. _____

4. _____

5. _____

6. _____

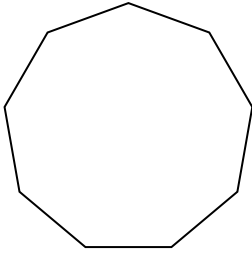
7. _____

8. _____

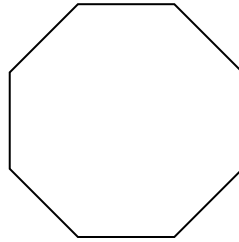


Identifiziere die Art der gezeigten Form.

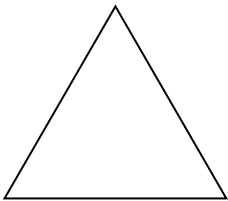
1)



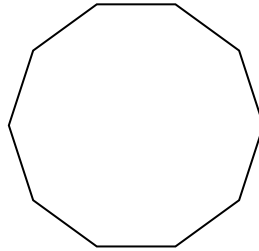
2)




3)



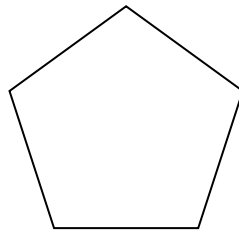
4)



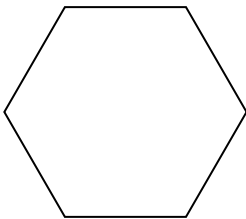
5)



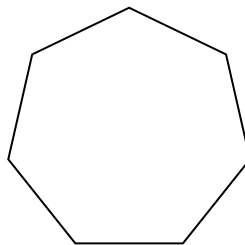
6)



7)



8)



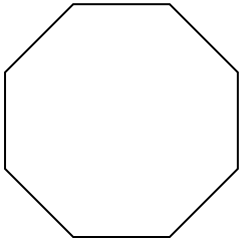
Antworten

- 1. Neuneck
- 2. Achteck
- 3. Dreieck
- 4. Zehneck
- 5. Viereck
- 6. Fünfeck
- 7. Sechseck
- 8. Siebeneck

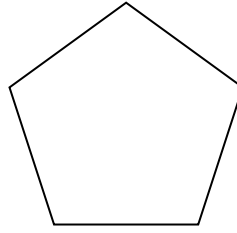


Identifiziere die Art der gezeigten Form.

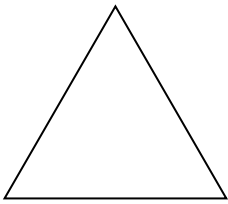
1)



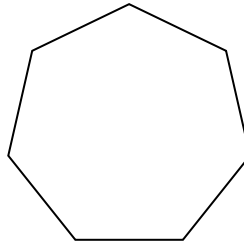
2)




3)



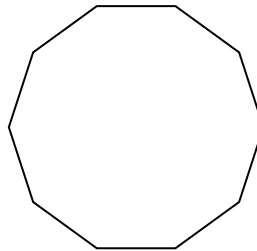
4)



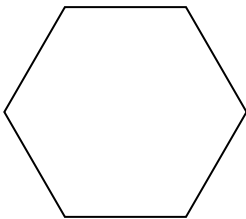
5)



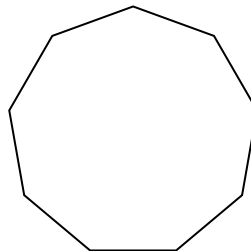
6)



7)



8)



Antworten

1. _____

2. _____

3. _____

4. _____

5. _____

6. _____

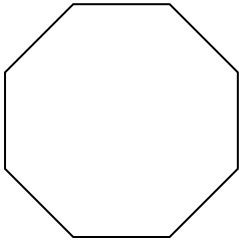
7. _____

8. _____

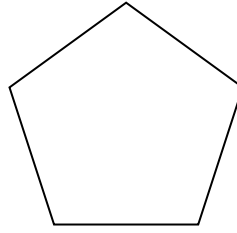


Identifiziere die Art der gezeigten Form.

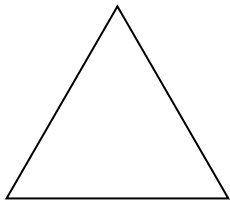
1)



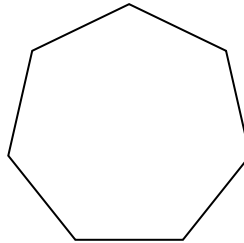
2)




3)



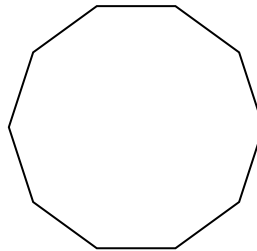
4)



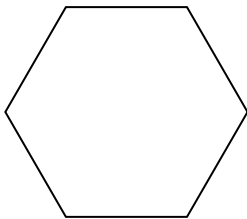
5)



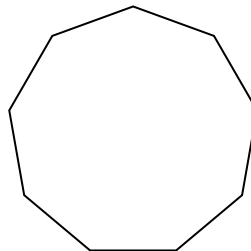
6)



7)



8)

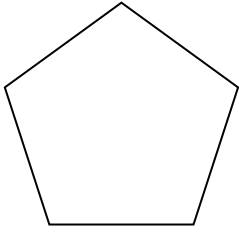
Antworten

1. Achteck
2. Fünfeck
3. Dreieck
4. Siebeneck
5. Viereck
6. Zehneck
7. Sechseck
8. Neuneck

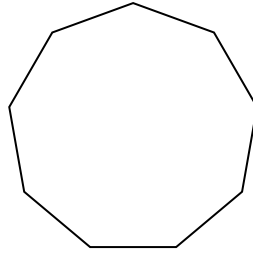


Identifiziere die Art der gezeigten Form.

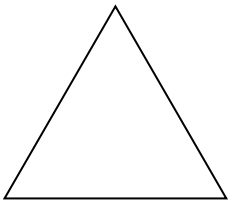
1)



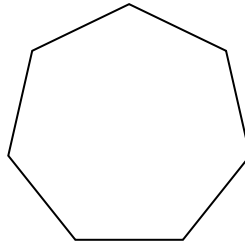
2)



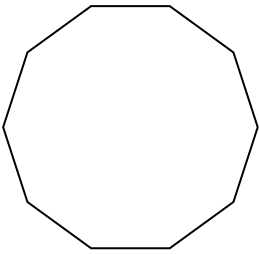
3)




4)



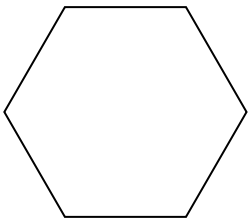
5)



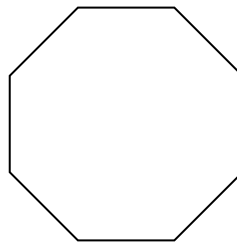
6)



7)



8)



Antworten

1. _____

2. _____

3. _____

4. _____

5. _____

6. _____

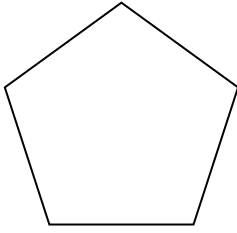
7. _____

8. _____

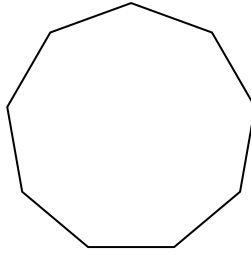


Identifiziere die Art der gezeigten Form.

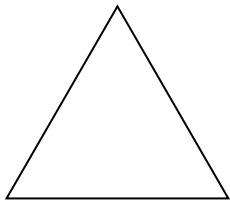
1)



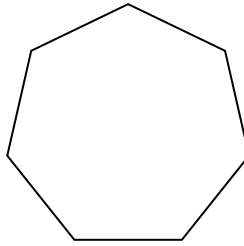
2)



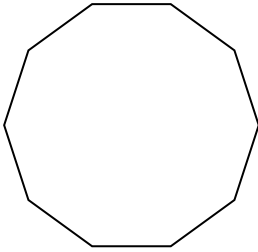
3)




4)



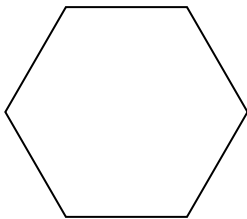
5)



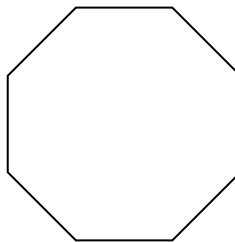
6)



7)



8)

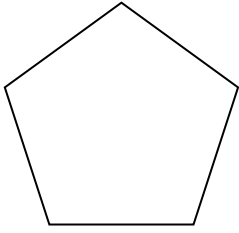
Antworten

1. Fünfeck
2. Neuneck
3. Dreieck
4. Siebeneck
5. Zehneck
6. Viereck
7. Sechseck
8. Achteck

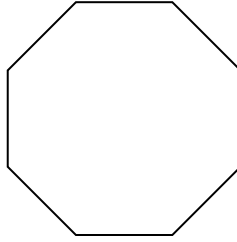


Identifiziere die Art der gezeigten Form.

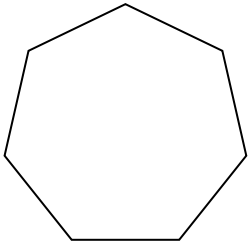
1)



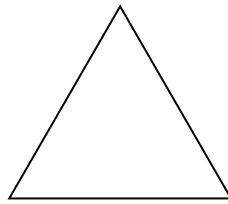
2)



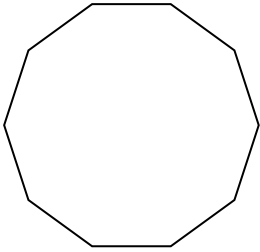
3)




4)



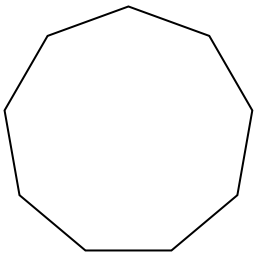
5)



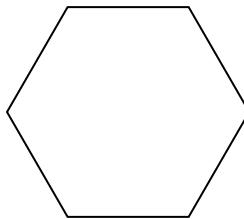
6)



7)



8)



Antworten

1. _____

2. _____

3. _____

4. _____

5. _____

6. _____

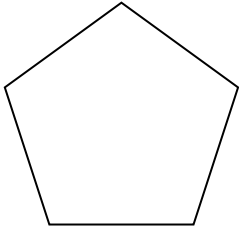
7. _____

8. _____

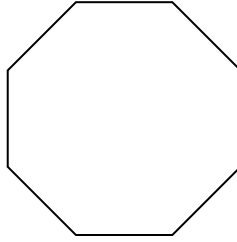


Identifiziere die Art der gezeigten Form.

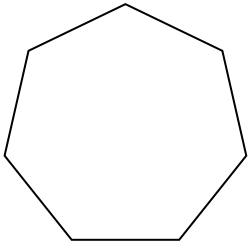
1)



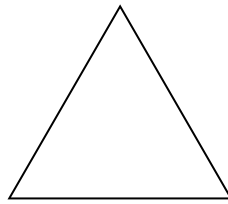
2)



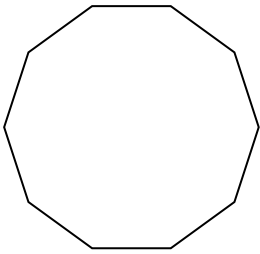
3)




4)



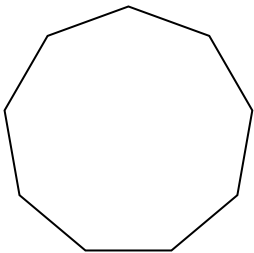
5)



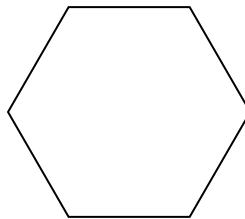
6)



7)



8)

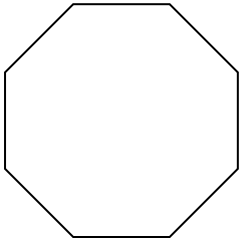
Antworten

1. Fünfeck
2. Achteck
3. Siebeneck
4. Dreieck
5. Zehneck
6. Viereck
7. Neuneck
8. Sechseck

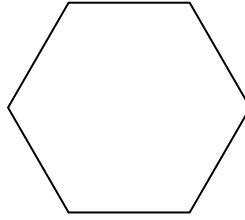


Identifiziere die Art der gezeigten Form.

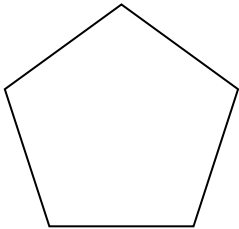
1)




2)



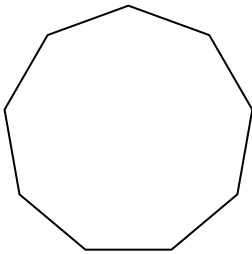
3)



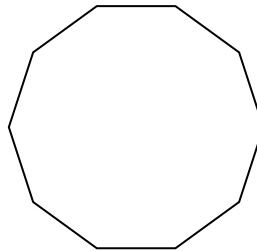
4)



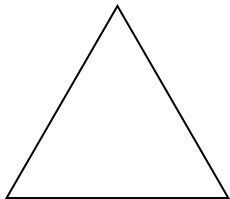
5)



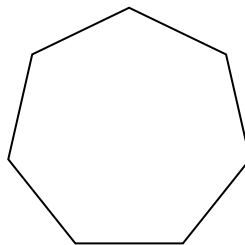
6)



7)



8)



Antworten

1. _____

2. _____

3. _____

4. _____

5. _____

6. _____

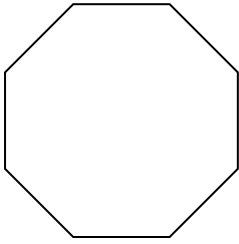
7. _____

8. _____

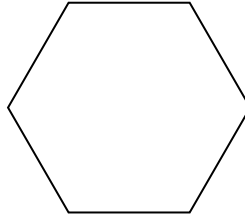


Identifiziere die Art der gezeigten Form.

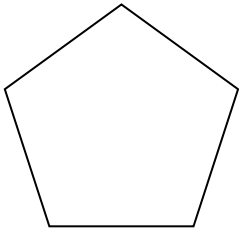
1)




2)



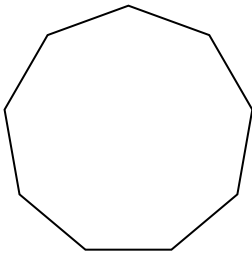
3)



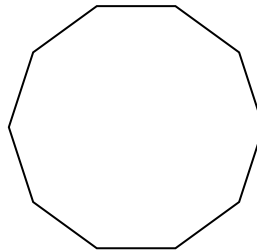
4)



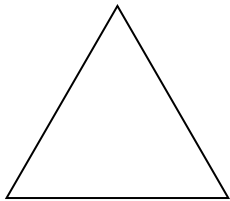
5)



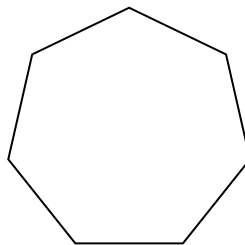
6)



7)



8)



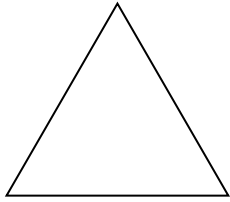
Antworten

1. Achteck
2. Sechseck
3. Fünfeck
4. Viereck
5. Neuneck
6. Zehneck
7. Dreieck
8. Siebeneck

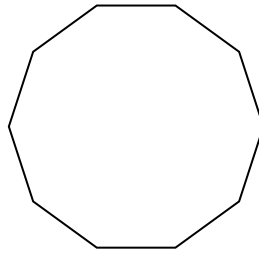


Identifiziere die Art der gezeigten Form.

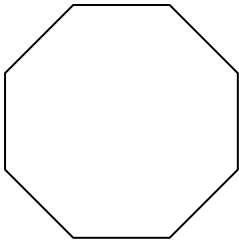
1)



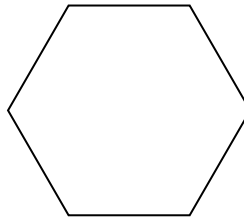
2)



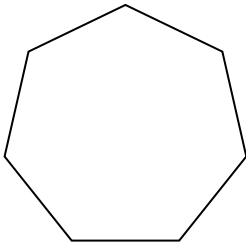
3)



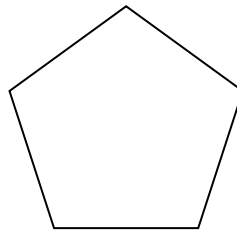
4)




5)



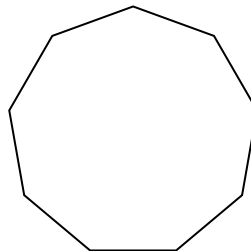
6)



7)



8)



Antworten

1. _____

2. _____

3. _____

4. _____

5. _____

6. _____

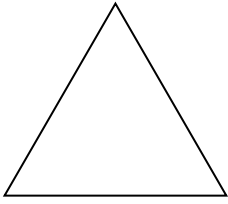
7. _____

8. _____

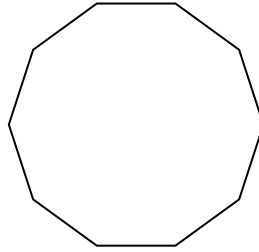


Identifiziere die Art der gezeigten Form.

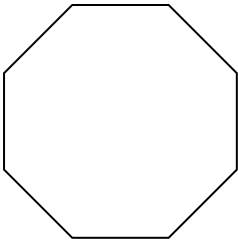
1)



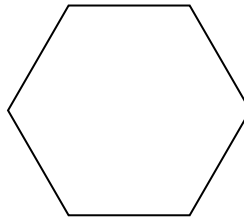
2)



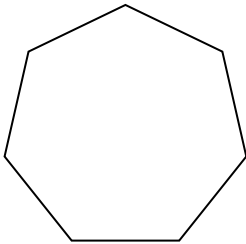
3)



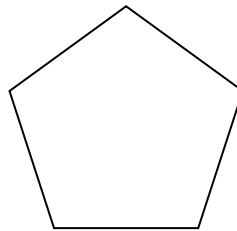
4)




5)



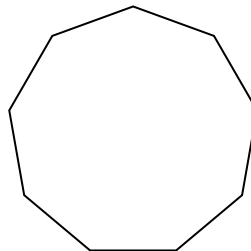
6)



7)



8)

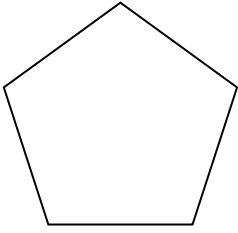
Antworten

1. Dreieck
2. Zehneck
3. Achteck
4. Sechseck
5. Siebeneck
6. Fünfeck
7. Viereck
8. Neuneck

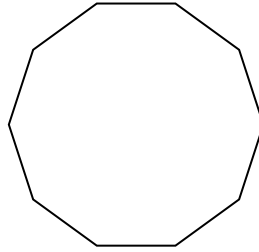


Identifiziere die Art der gezeigten Form.


1)



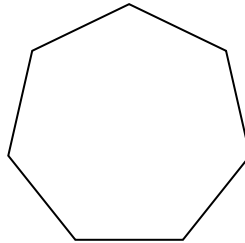
2)



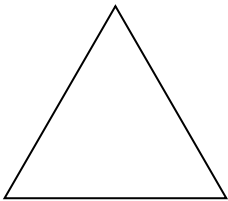
3)



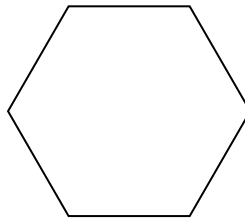
4)



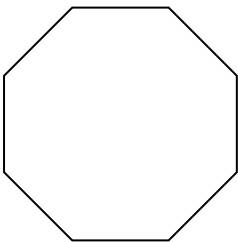
5)



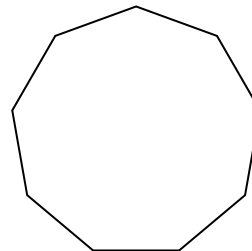
6)



7)



8)



Antworten

1. _____

2. _____

3. _____

4. _____

5. _____

6. _____

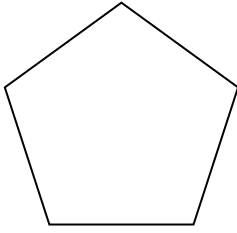
7. _____

8. _____

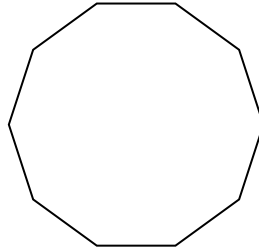


Identifiziere die Art der gezeigten Form.


1)



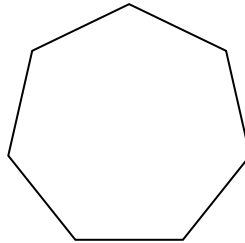
2)



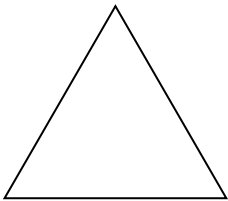
3)



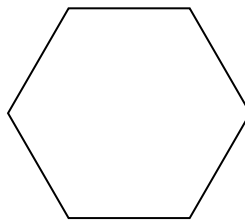
4)



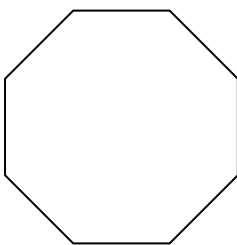
5)



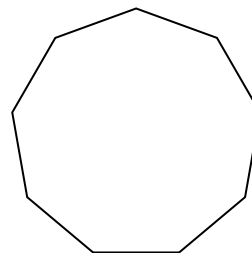
6)



7)



8)

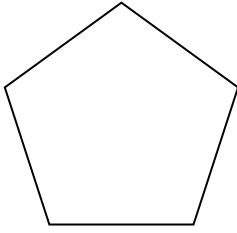
Antworten

1. Fünfeck
2. Zehneck
3. Viereck
4. Siebeneck
5. Dreieck
6. Sechseck
7. Achteck
8. Neuneck

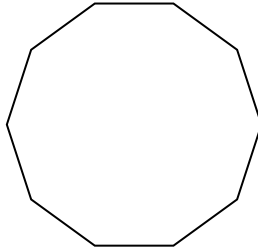


Identifiziere die Art der gezeigten Form.

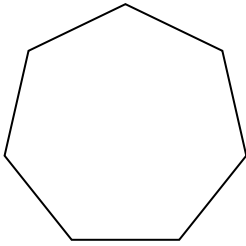
1)



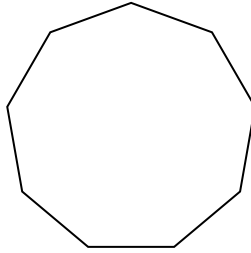
2)



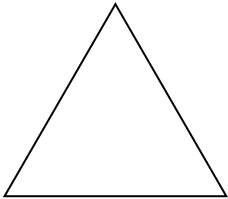
3)



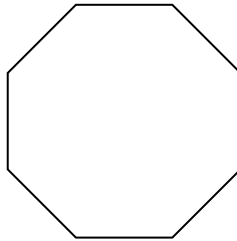
4)




5)



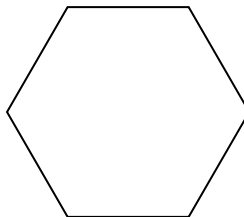
6)



7)



8)



Antworten

1. _____

2. _____

3. _____

4. _____

5. _____

6. _____

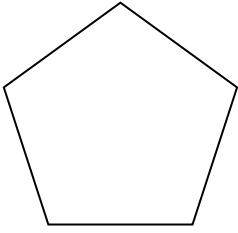
7. _____

8. _____

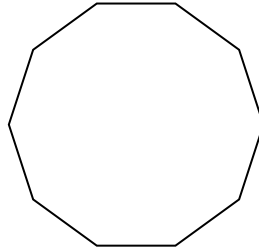


Identifiziere die Art der gezeigten Form.

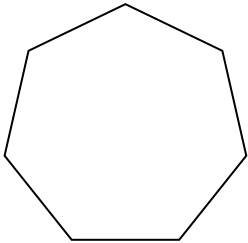
1)



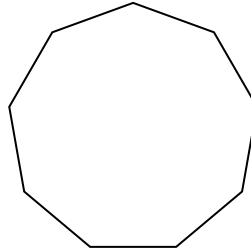
2)



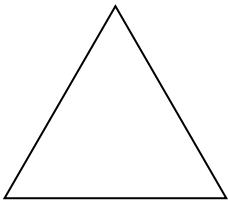
3)



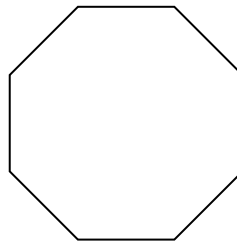
4)




5)



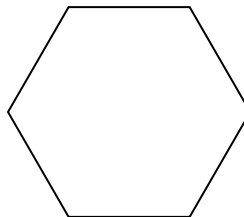
6)



7)



8)

Antworten

1. Fünfeck
2. Zehneck
3. Siebeneck
4. Neuneck
5. Dreieck
6. Achteck
7. Viereck
8. Sechseck