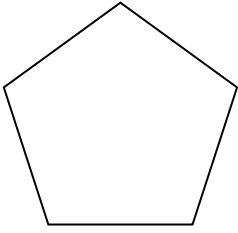


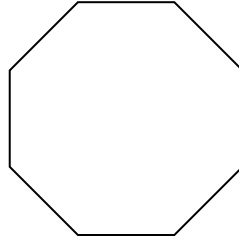


Identifiziere die Art der gezeigten Form.

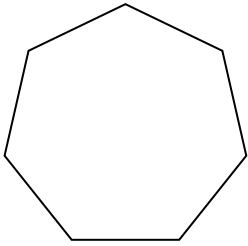
1)



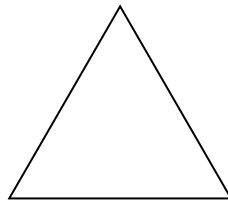
2)



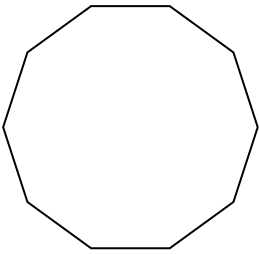
3)




4)



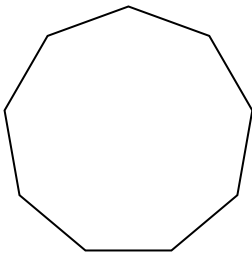
5)



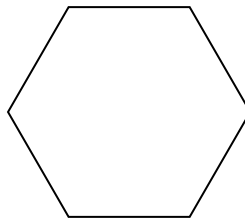
6)



7)



8)



**Antworten**

1. \_\_\_\_\_

2. \_\_\_\_\_

3. \_\_\_\_\_

4. \_\_\_\_\_

5. \_\_\_\_\_

6. \_\_\_\_\_

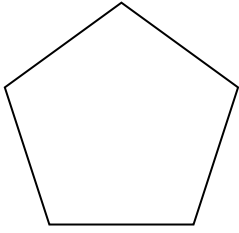
7. \_\_\_\_\_

8. \_\_\_\_\_

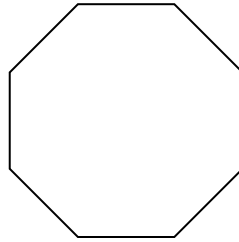


Identifiziere die Art der gezeigten Form.

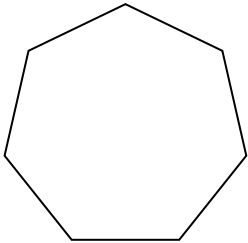
1)



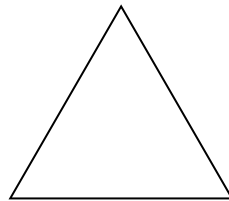
2)



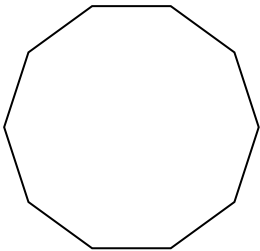
3)




4)



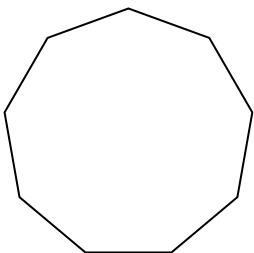
5)



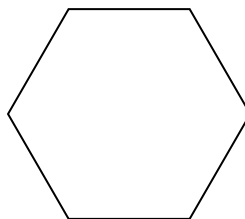
6)



7)



8)



Antworten

- 1. Fünfeck
- 2. Achteck
- 3. Siebeneck
- 4. Dreieck
- 5. Zehneck
- 6. Viereck
- 7. Neuneck
- 8. Sechseck