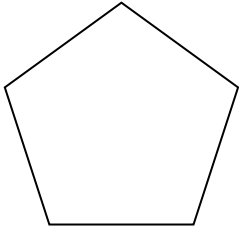


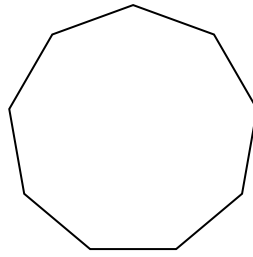


Identifiziere die Art der gezeigten Form.

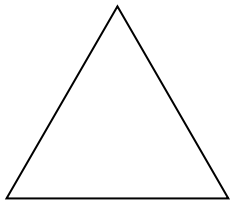
1)



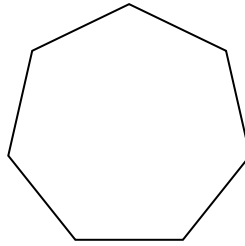
2)



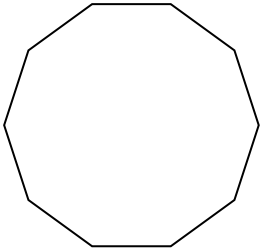
3)




4)



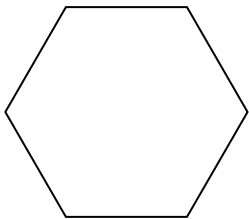
5)



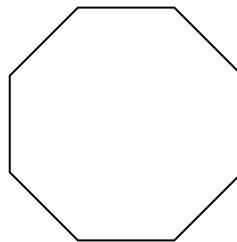
6)



7)



8)



Antworten

1. _____

2. _____

3. _____

4. _____

5. _____

6. _____

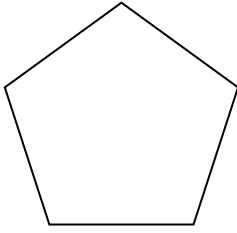
7. _____

8. _____

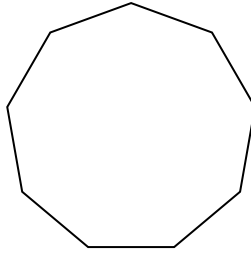


Identifiziere die Art der gezeigten Form.

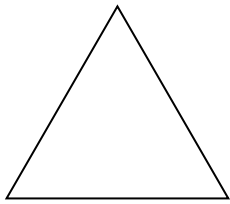
1)



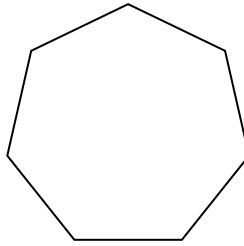
2)



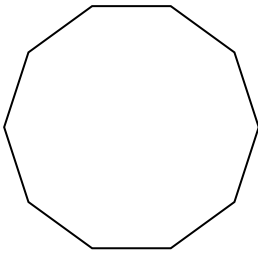
3)




4)



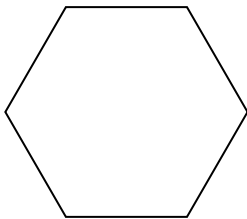
5)



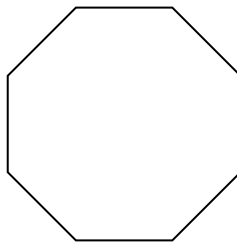
6)



7)



8)

Antworten

1. Fünfeck
2. Neuneck
3. Dreieck
4. Siebeneck
5. Zehneck
6. Viereck
7. Sechseck
8. Achteck