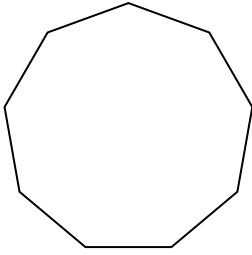


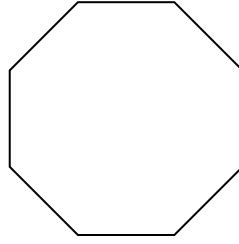


Identifiziere die Art der gezeigten Form.

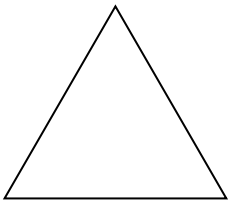
1)



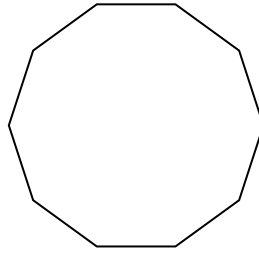
2)




3)



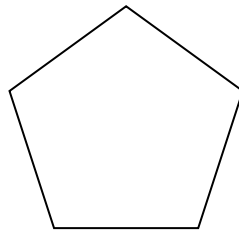
4)



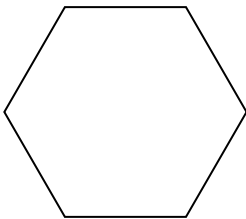
5)



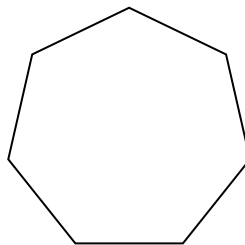
6)



7)



8)



Antworten

1. _____

2. _____

3. _____

4. _____

5. _____

6. _____

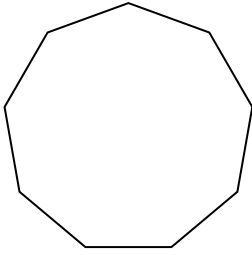
7. _____

8. _____

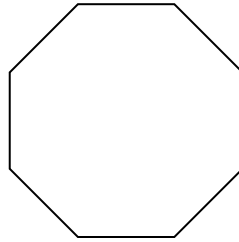


Identifiziere die Art der gezeigten Form.

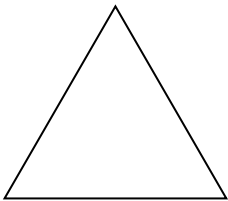
1)



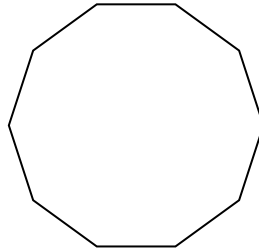
2)




3)



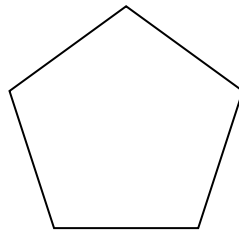
4)



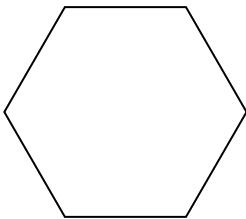
5)



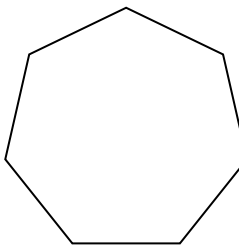
6)



7)



8)

**Antworten**

1. Neuneck
2. Achteck
3. Dreieck
4. Zehneck
5. Viereck
6. Fünfeck
7. Sechseck
8. Siebeneck