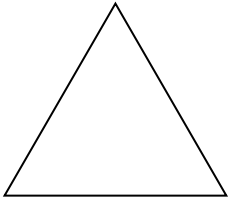


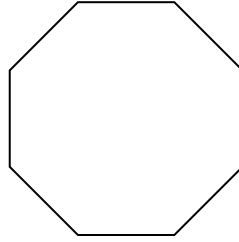


Identifiziere die Art der gezeigten Form.

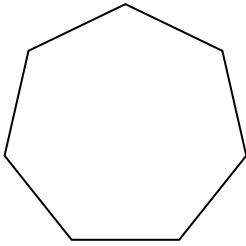
1)



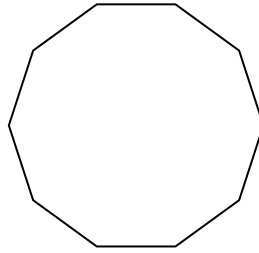
2)



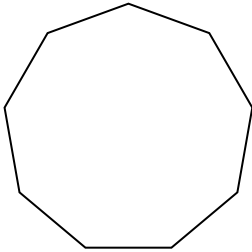
3)



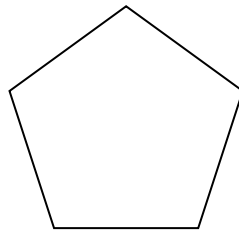
4)




5)



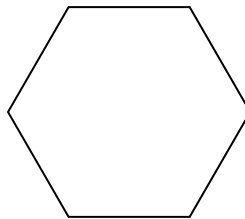
6)



7)



8)



Antworten

1. _____

2. _____

3. _____

4. _____

5. _____

6. _____

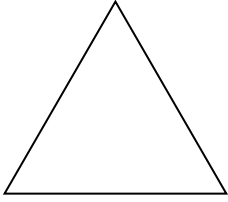
7. _____

8. _____

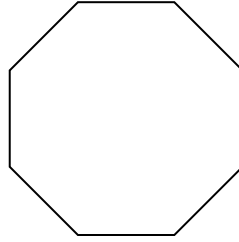


Identifiziere die Art der gezeigten Form.

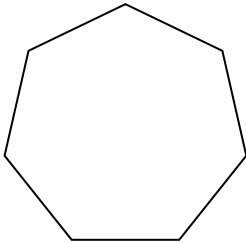
1)



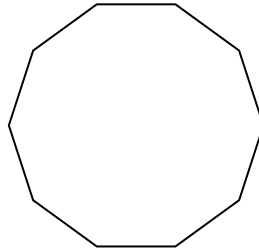
2)



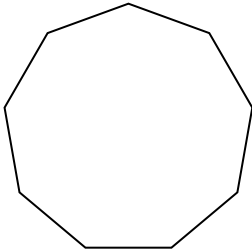
3)



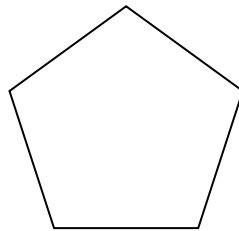
4)




5)



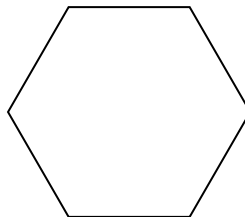
6)



7)



8)



Antworten

- 1. Dreieck
- 2. Achteck
- 3. Siebeneck
- 4. Zehneck
- 5. Neuneck
- 6. Fünfeck
- 7. Viereck
- 8. Sechseck