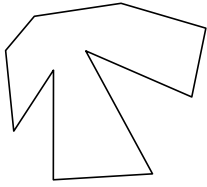




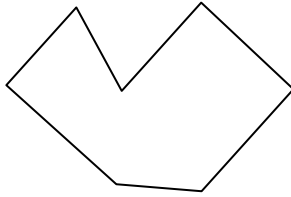
Identifiziere jede gezeigte Form.

Antworten

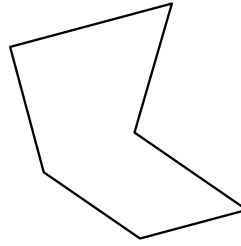
1)



2)



3)

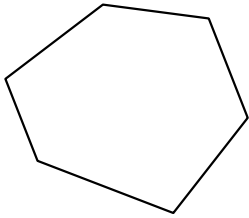


1. _____


2. _____

3. _____

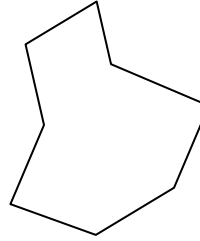
4)



5)



6)

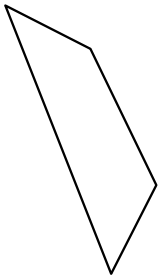


4. _____

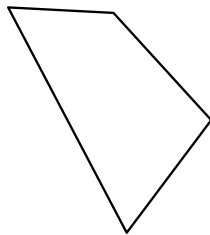
5. _____

6. _____

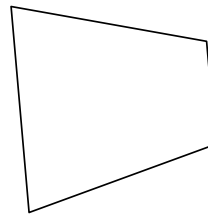
7)



8)



9)




7. _____

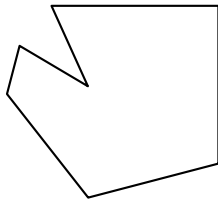
8. _____

9. _____

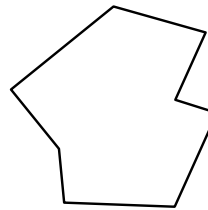
10)



11)



12)



10. _____

11. _____


12. _____

13. _____

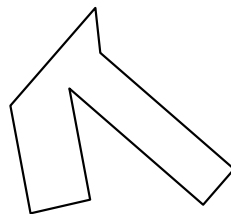
14. _____

15. _____


13)



14)




15)



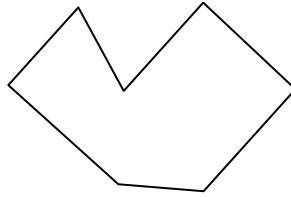


Identifiziere jede gezeigte Form.

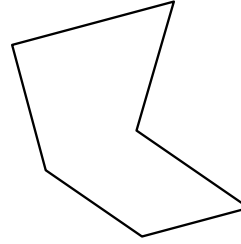
1)



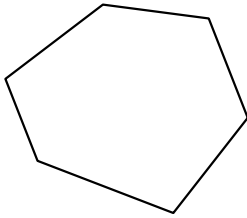
2)




3)



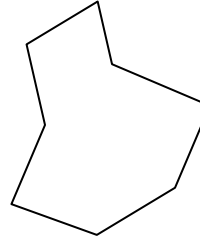
4)



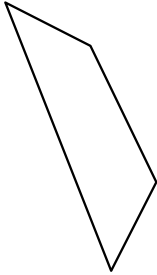
5)



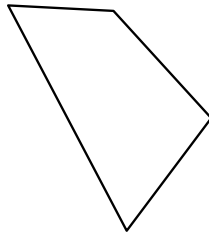
6)



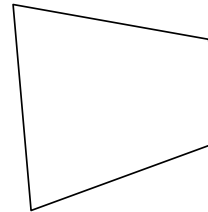
7)




8)



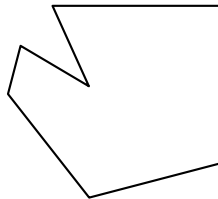
9)



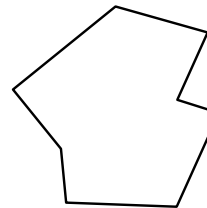
10)



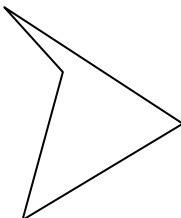
11)



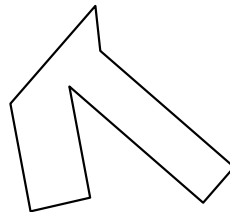
12)




13)



14)



15)



Antworten

1. Zehneck

2. Siebeneck

3. Sechseck

4. Sechseck

5. Neuneck

6. Achteck

7. Viereck

8. Viereck

9. Viereck

10. Zehneck

11. Siebeneck

12. Achteck

13. Viereck

14. Achteck

15. Zehneck