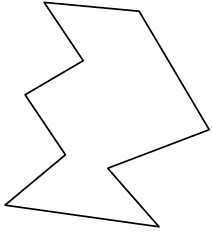




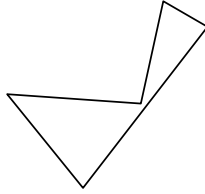
Identifiziere jede gezeigte Form.

Antworten

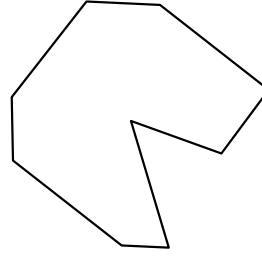
1)



2)



3)

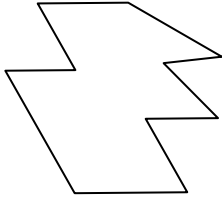


1. _____


2. _____

3. _____

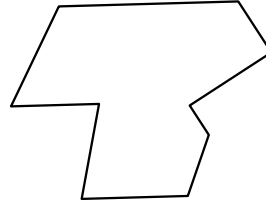
4)



5)



6)




4. _____

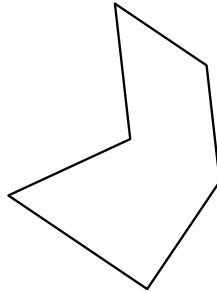
5. _____

6. _____

7)



8)



9)



7. _____

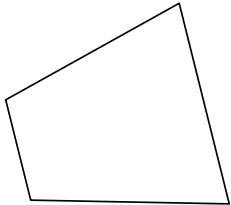
8. _____

9. _____


10. _____

11. _____


10)



11)



12)



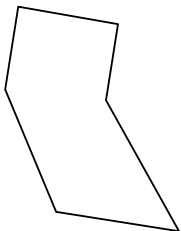
12. _____

13. _____

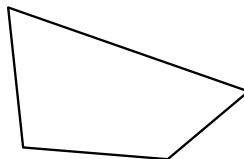
14. _____

15. _____

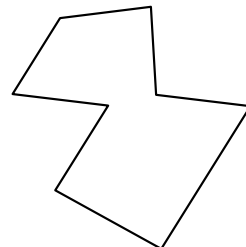
13)



14)

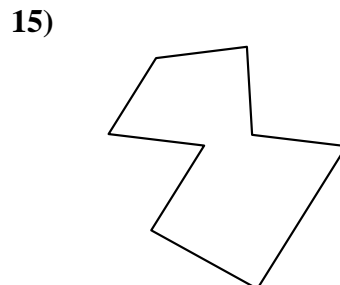
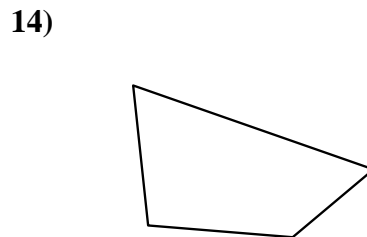
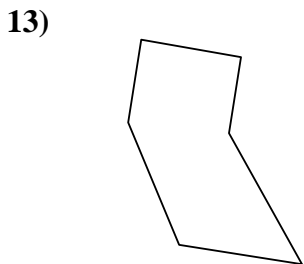
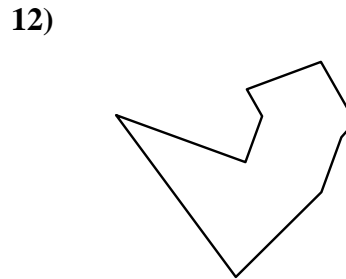
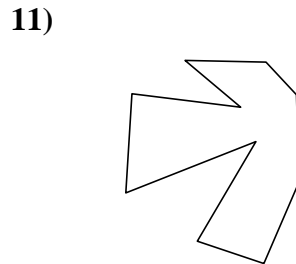
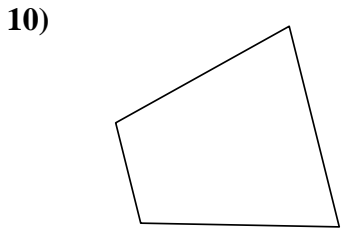

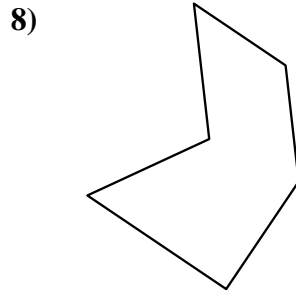
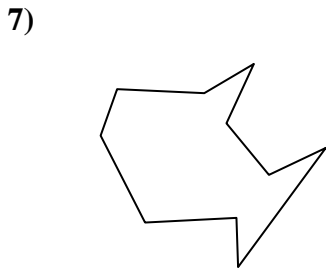
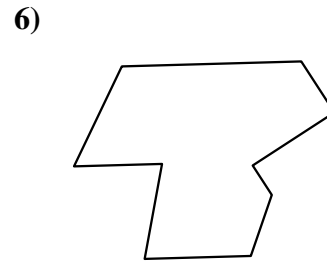

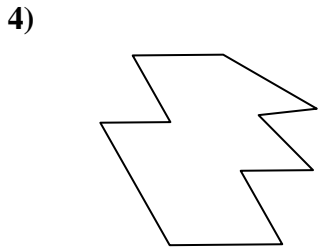
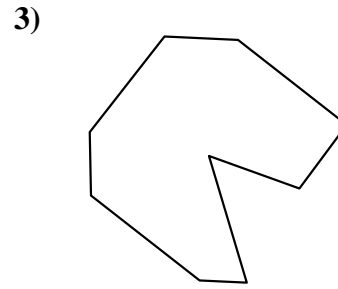
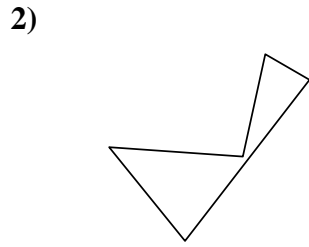
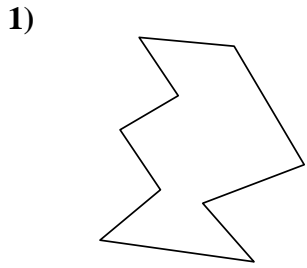


15)





Identifiziere jede gezeigte Form.



Antworten

1. Zehneck

2. Fünfeck

3. Neuneck

4. Zehneck

5. Achteck

6. Neuneck

7. Zehneck

8. Sechseck

9. Viereck

10. Viereck

11. Zehneck

12. Neuneck

13. Sechseck

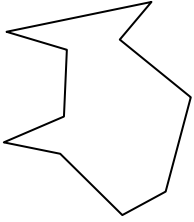
14. Viereck

15. Achteck




Identifiziere jede gezeigte Form.


1)




2)



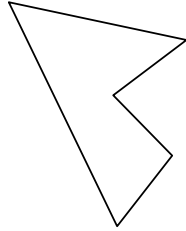
3)




4)



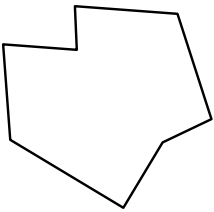
5)



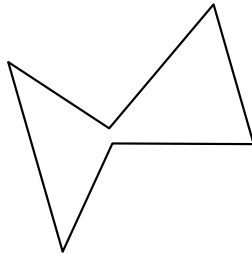
6)




7)



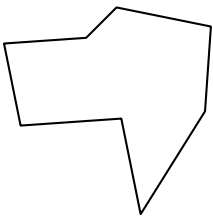
8)



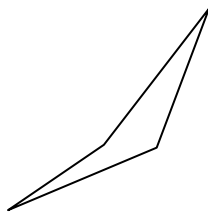
9)



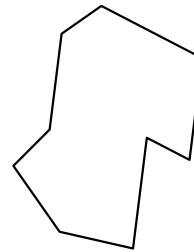
10)



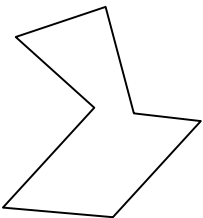
11)



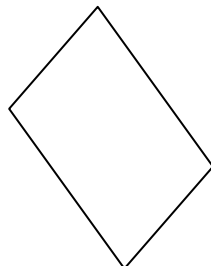
12)



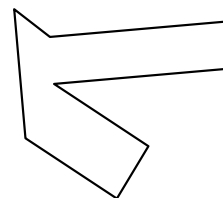
13)



14)



15)



Antworten

1. _____

2. _____

3. _____

4. _____

5. _____

6. _____

7. _____

8. _____

9. _____

10. _____

11. _____

12. _____

13. _____

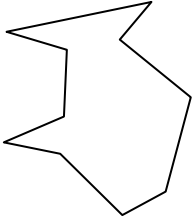
14. _____

15. _____




Identifiziere jede gezeigte Form.


1)




2)




3)




4)



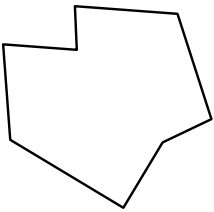
5)



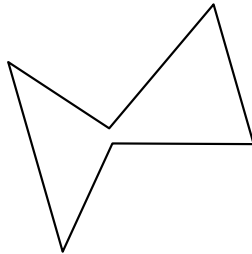
6)




7)



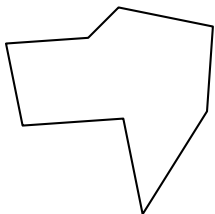
8)



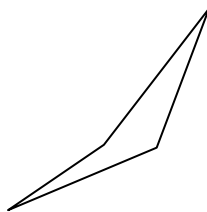
9)



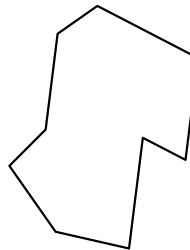
10)




11)



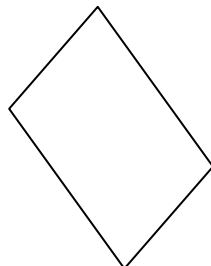
12)



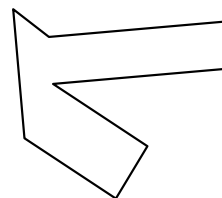
13)



14)



15)



Antworten

1. Zehneck

2. Achteck

3. Zehneck

4. Neuneck

5. Fünfeck

6. Viereck

7. Achteck

8. Sechseck

9. Fünfeck

10. Achteck

11. Viereck

12. Neuneck

13. Siebeneck

14. Viereck

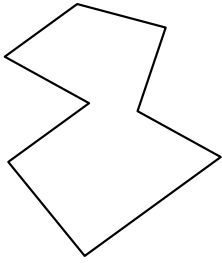
15. Achteck



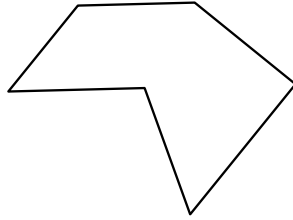
Identifiziere jede gezeigte Form.

Antworten

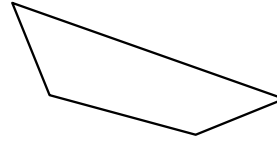
1)



2)



3)

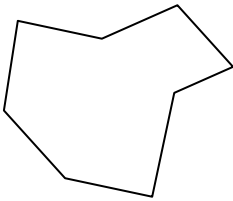


1. _____

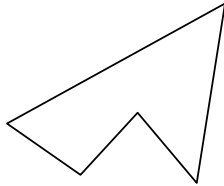
2. _____

3. _____

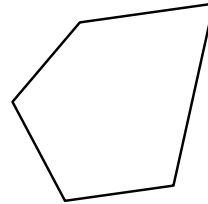
4)



5)



6)

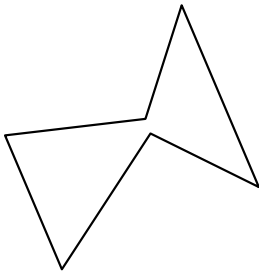


4. _____

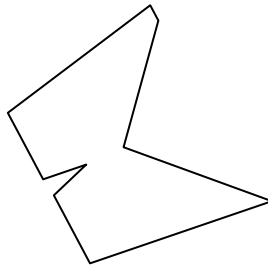
5. _____

6. _____


7)



8)



9)

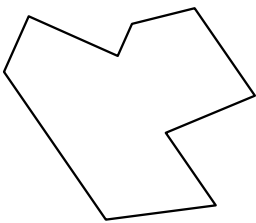


7. _____

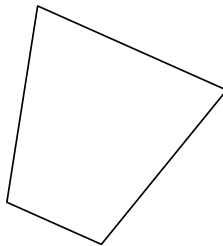
8. _____

9. _____

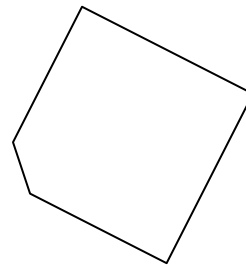
10)



11)



12)



10. _____

11. _____

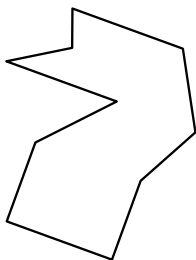
12. _____

13. _____

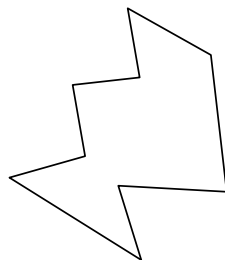
14. _____

15. _____

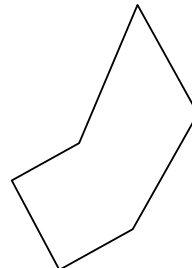
13)



14)



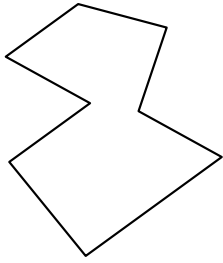
15)



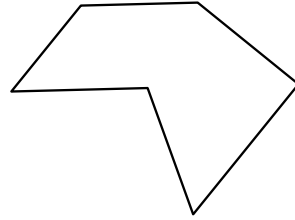


Identifiziere jede gezeigte Form.

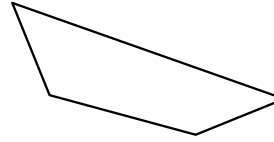
1)



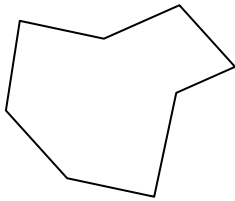
2)



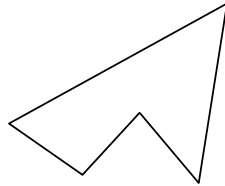
3)



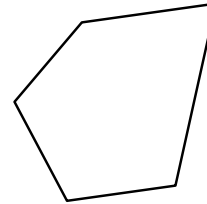
4)



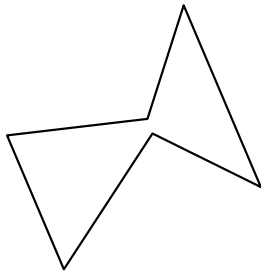
5)



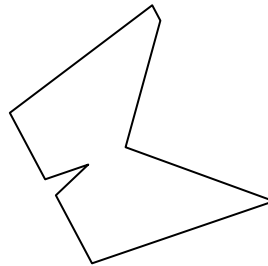
6)




7)



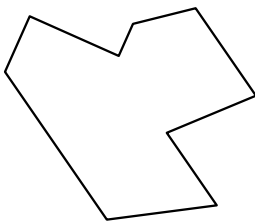
8)



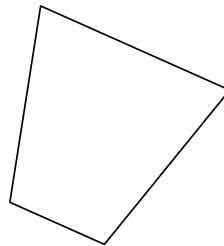
9)



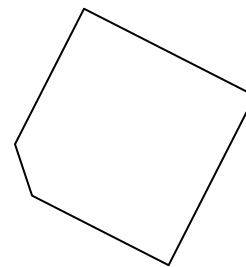
10)



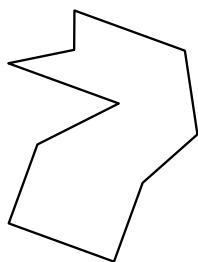
11)



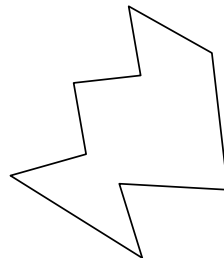
12)



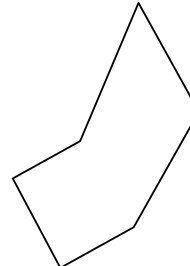
13)



14)



15)



Antworten

1. Achteck

2. Sechseck

3. Viereck

4. Achteck

5. Fünfeck

6. Fünfeck

7. Sechseck

8. Neuneck

9. Siebeneck

10. Neuneck

11. Viereck

12. Fünfeck

13. Zehneck

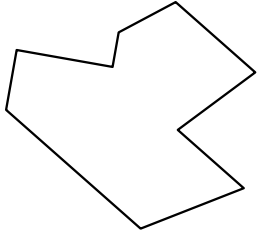
14. Zehneck

15. Sechseck

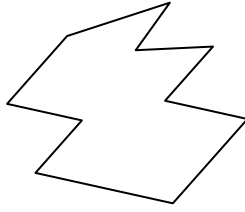


Identifiziere jede gezeigte Form.

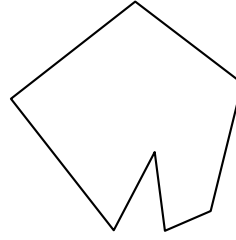
1)



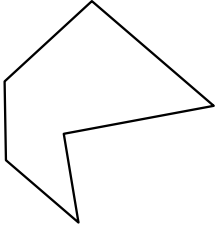
2)



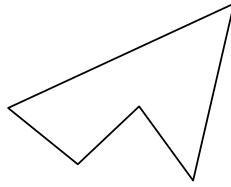
3)



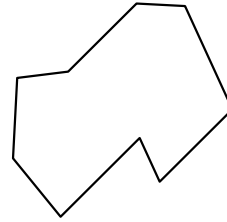
4)



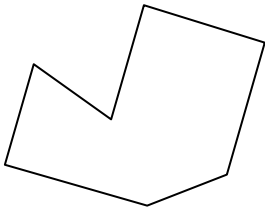
5)



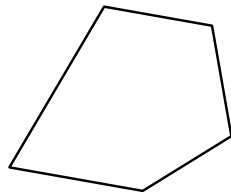
6)



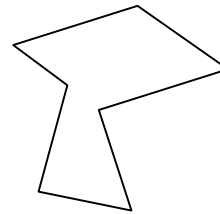
7)




8)



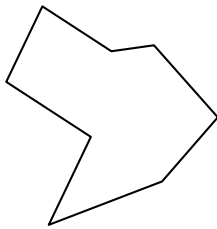
9)



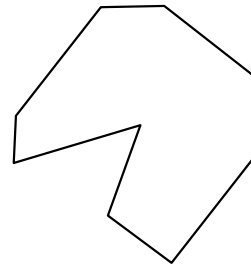
10)



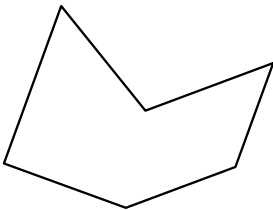
11)



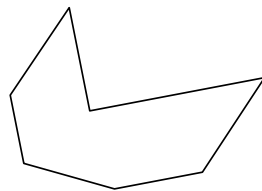
12)



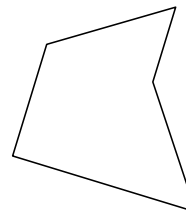
13)



14)



15)



Antworten

1. _____

2. _____

3. _____

4. _____

5. _____

6. _____

7. _____

8. _____

9. _____

10. _____

11. _____

12. _____

13. _____

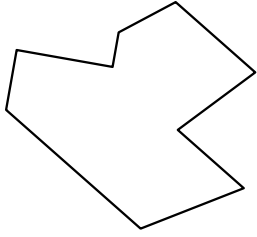
14. _____

15. _____

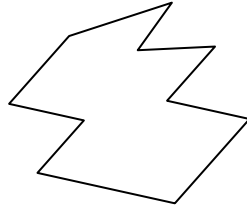


Identifiziere jede gezeigte Form.

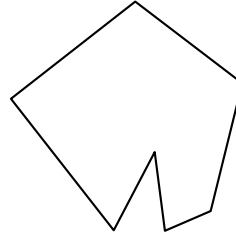
1)



2)



3)



Antworten

1. Neuneck

2. Zehneck

3. Siebeneck

4. Sechseck

5. Fünfeck

6. Neuneck

7. Siebeneck

8. Fünfeck

9. Siebeneck

10. Achteck

11. Achteck

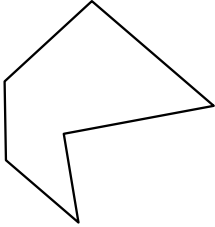
12. Neuneck

13. Sechseck

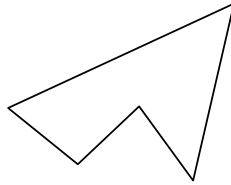
14. Siebeneck

15. Fünfeck

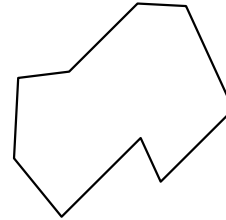
4)



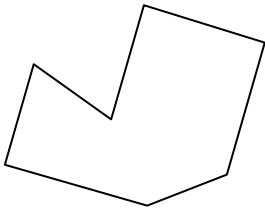
5)



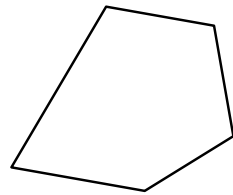
6)



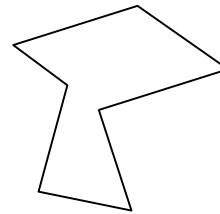
7)




8)



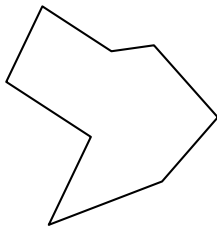
9)



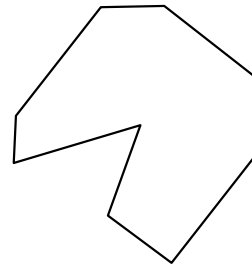
10)



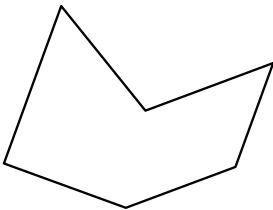
11)



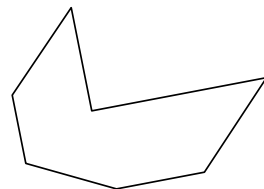
12)



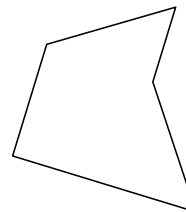
13)



14)



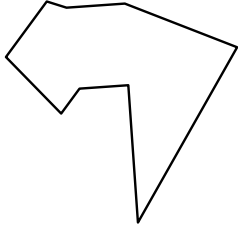
15)






Identifiziere jede gezeigte Form.

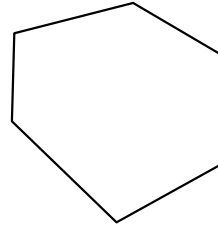
1)



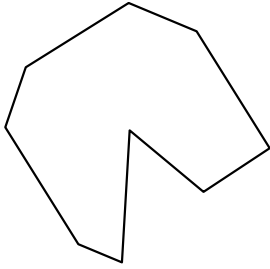
2)



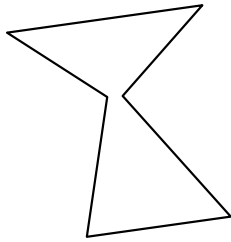
3)



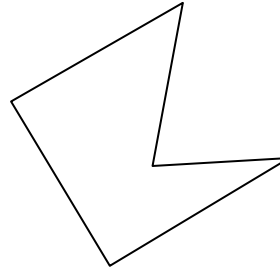
4)



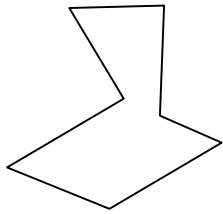
5)



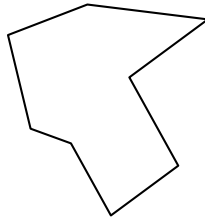
6)



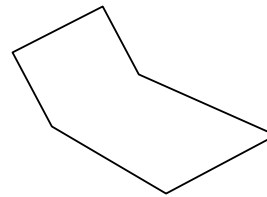
7)



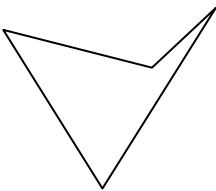
8)



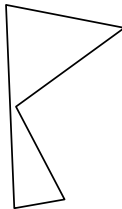
9)




10)



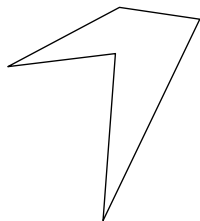
11)



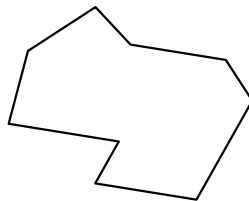
12)



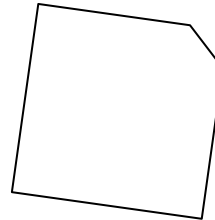
13)



14)



15)



Antworten

1. _____

2. _____

3. _____

4. _____

5. _____

6. _____

7. _____

8. _____

9. _____

10. _____

11. _____

12. _____

13. _____

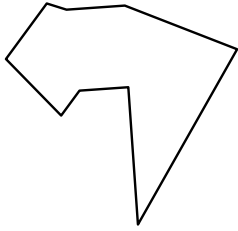
14. _____

15. _____




Identifiziere jede gezeigte Form.

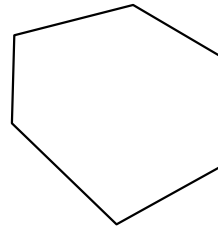
1)



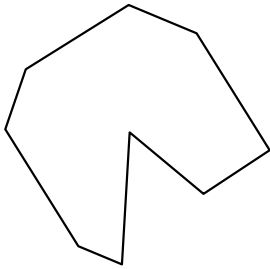
2)



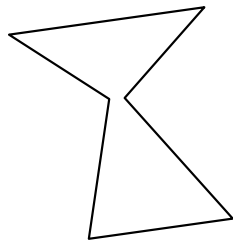
3)




4)



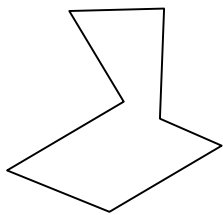
5)



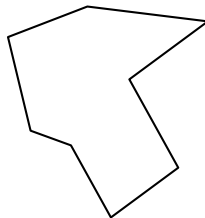
6)



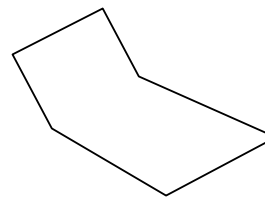
7)



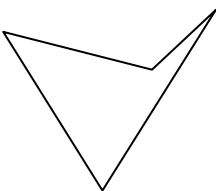
8)



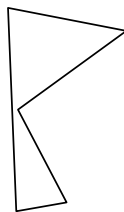
9)




10)



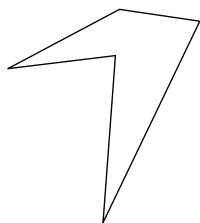
11)



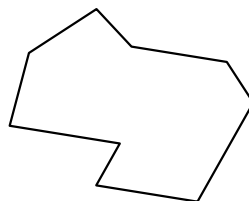
12)



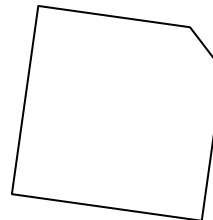
13)



14)



15)



Antworten

1. Neuneck

2. Zehneck

3. Sechseck

4. Neuneck

5. Sechseck

6. Fünfeck

7. Siebeneck

8. Achteck

9. Sechseck

10. Viereck

11. Fünfeck

12. Viereck

13. Fünfeck

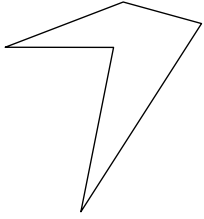
14. Neuneck

15. Fünfeck



Identifiziere jede gezeigte Form.

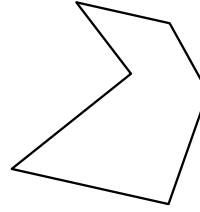
1)



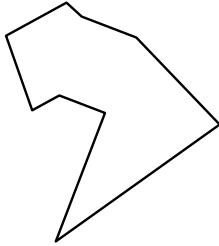
2)



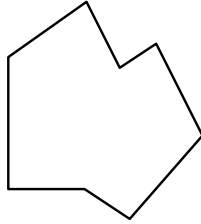
3)




4)



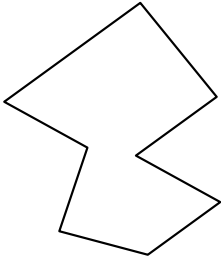
5)



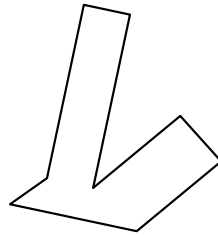
6)



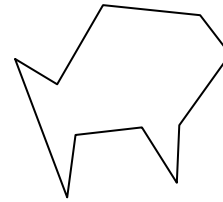
7)



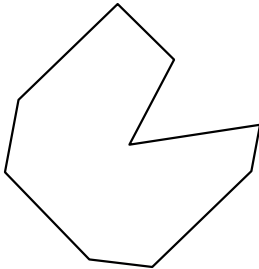
8)



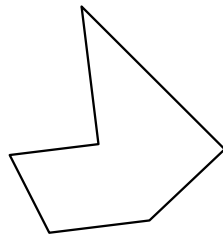
9)



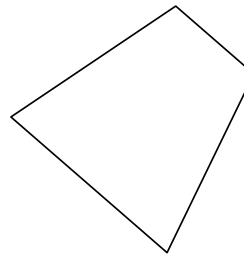
10)




11)



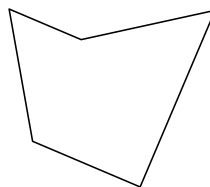
12)



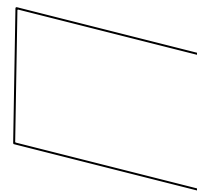
13)



14)



15)



Antworten

1. _____

2. _____

3. _____

4. _____

5. _____

6. _____

7. _____

8. _____

9. _____

10. _____

11. _____

12. _____

13. _____

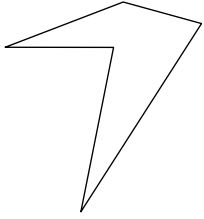
14. _____

15. _____



Identifiziere jede gezeigte Form.

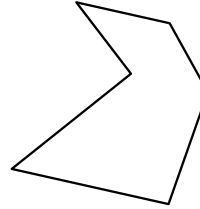
1)



2)



3)



Antworten

1. Fünfeck

2. Viereck

3. Sechseck

4. Neuneck

5. Achteck

6. Fünfeck

7. Achteck

8. Achteck

9. Zehneck

10. Neuneck

11. Sechseck

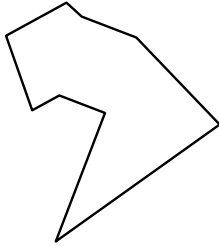
12. Viereck

13. Viereck

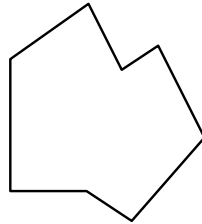
14. Fünfeck

15. Viereck


4)




5)



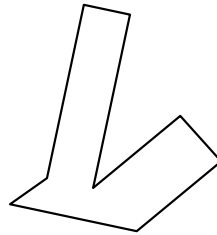
6)



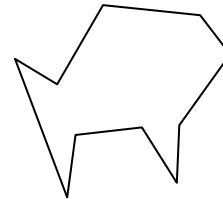
7)



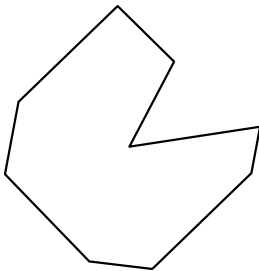
8)



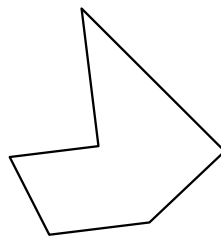
9)



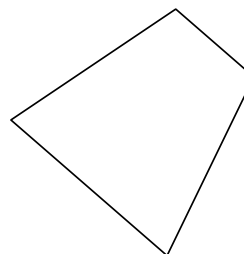
10)




11)



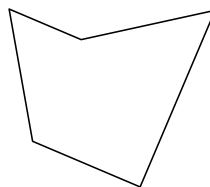
12)



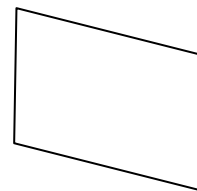
13)



14)



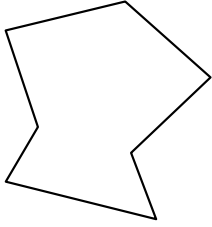
15)






Identifiziere jede gezeigte Form.

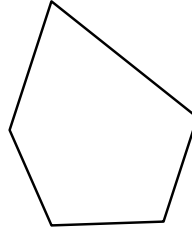
1)




2)



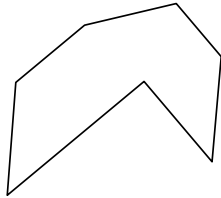
3)




4)




5)



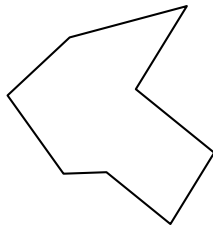
6)



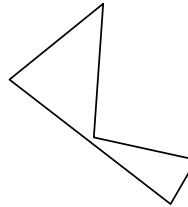
7)



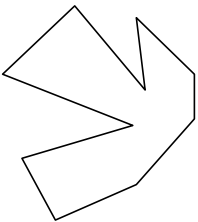
8)



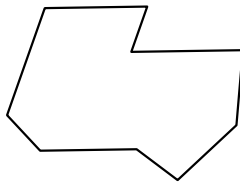
9)




10)



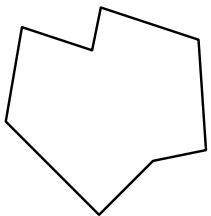
11)



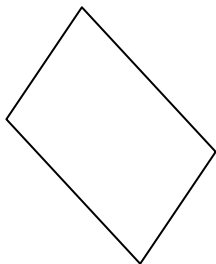
12)



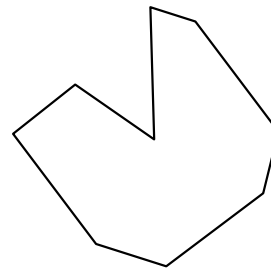
13)



14)



15)



Antworten

1. _____

2. _____

3. _____

4. _____

5. _____

6. _____

7. _____

8. _____

9. _____

10. _____

11. _____

12. _____

13. _____

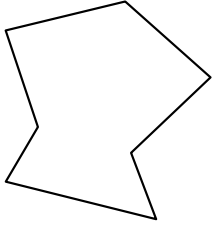
14. _____

15. _____




Identifiziere jede gezeigte Form.

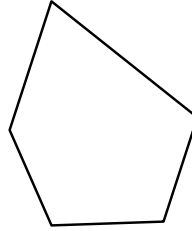
1)



2)



3)



Antworten

1. Siebeneck

2. Neuneck

3. Fünfeck

4. Zehneck

5. Siebeneck

6. Zehneck

7. Fünfeck

8. Achteck

9. Fünfeck

10. Zehneck

11. Neuneck


12. Sechseck

13. Achteck

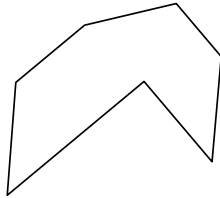
14. Viereck

15. Neuneck


4)




5)



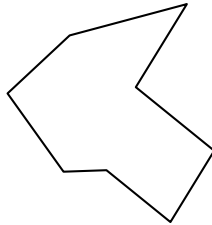
6)



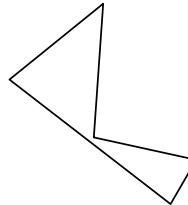
7)



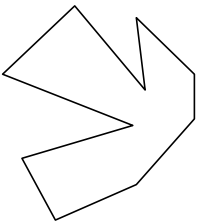
8)



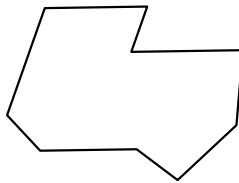
9)




10)



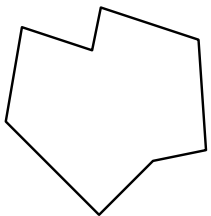
11)



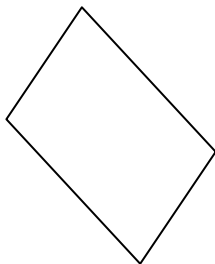
12)



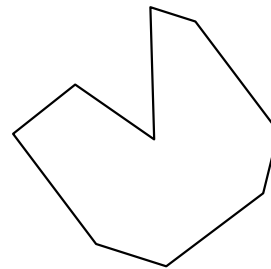
13)



14)



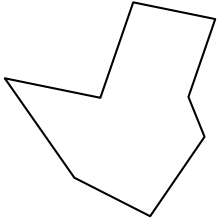
15)






Identifiziere jede gezeigte Form.

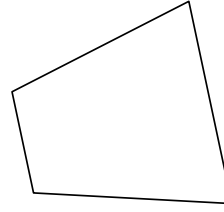
1)



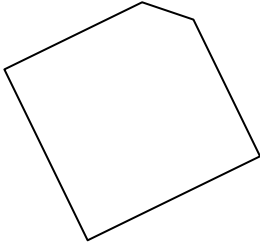
2)



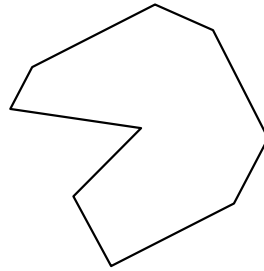
3)



4)



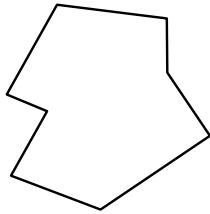
5)



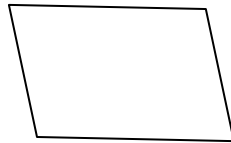
6)



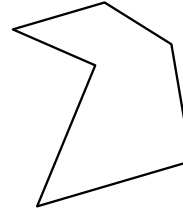
7)




8)




9)




10)



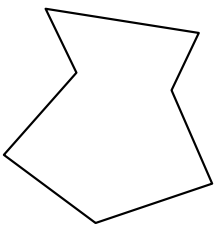
11)



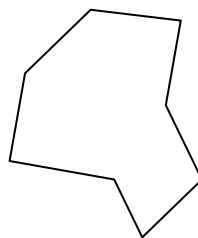
12)



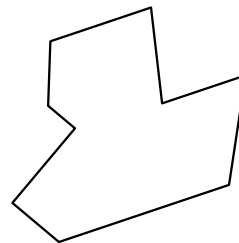
13)



14)



15)



Antworten

1. _____

2. _____

3. _____

4. _____

5. _____

6. _____

7. _____

8. _____

9. _____

10. _____

11. _____

12. _____

13. _____

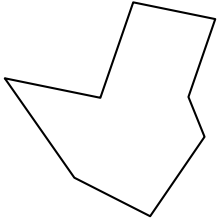
14. _____

15. _____




Identifiziere jede gezeigte Form.

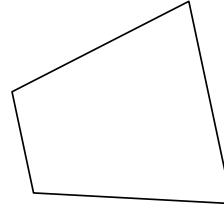
1)



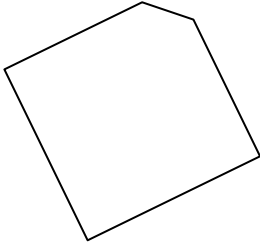
2)



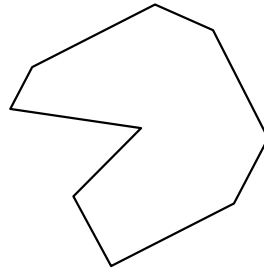
3)



4)



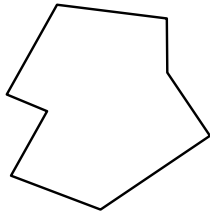
5)



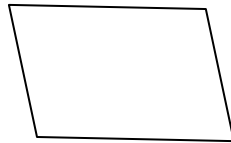
6)



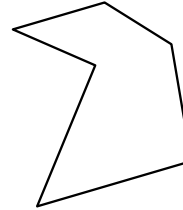
7)




8)




9)




10)



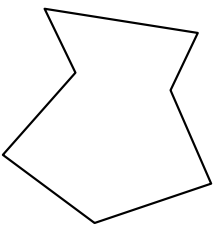
11)



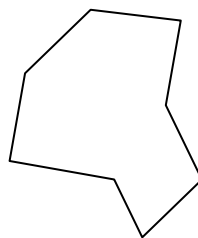
12)



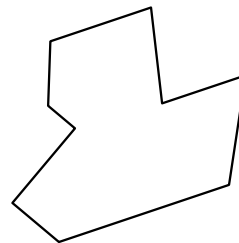
13)



14)



15)



Antworten

1. Achteck

2. Achteck

3. Viereck

4. Fünfeck

5. Neuneck

6. Viereck

7. Achteck

8. Viereck

9. Sechseck

10. Zehneck

11. Zehneck

12. Sechseck

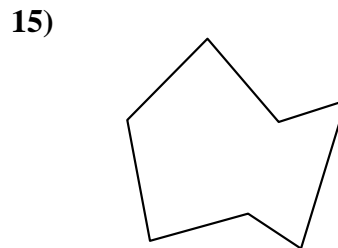
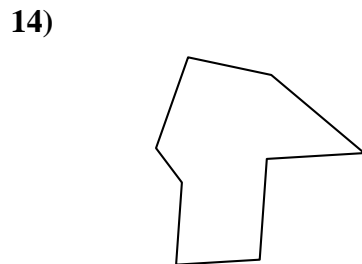
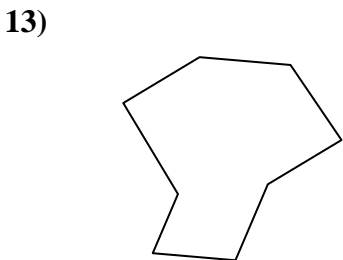
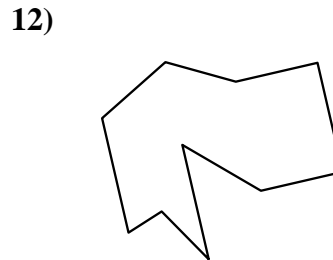
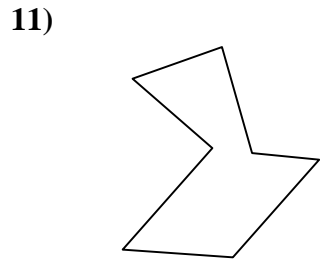
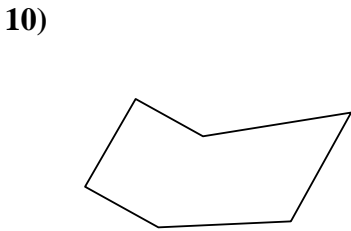
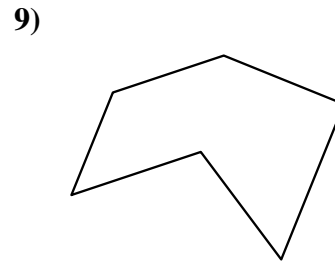
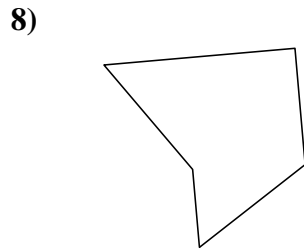
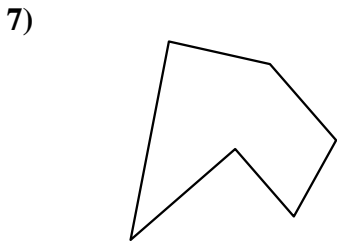
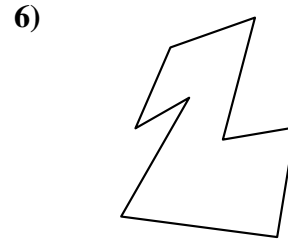
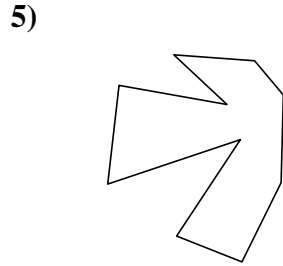
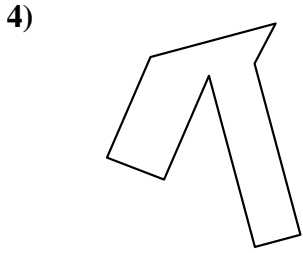
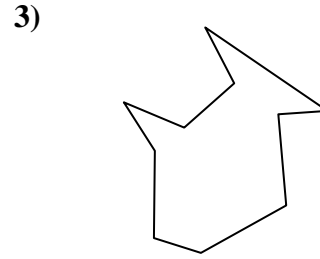
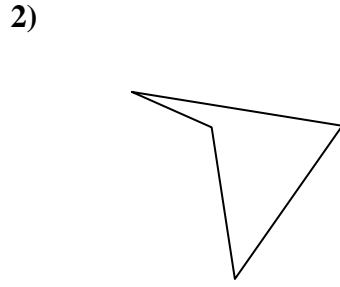
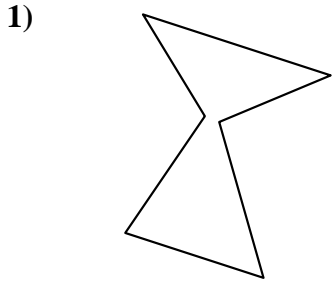
13. Siebeneck

14. Achteck

15. Neuneck



Identifiziere jede gezeigte Form.

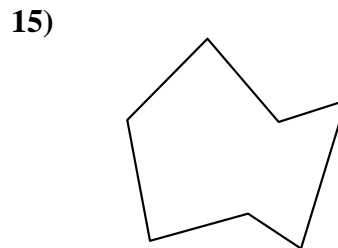
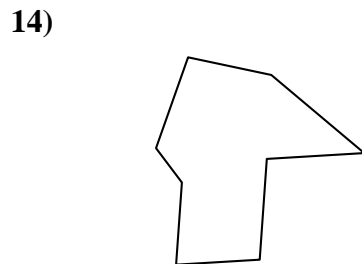
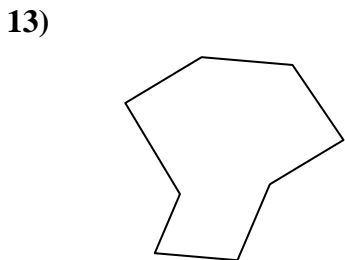
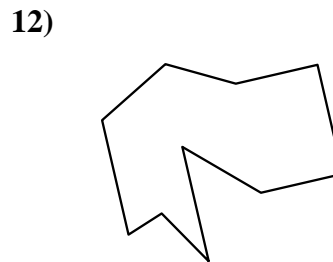
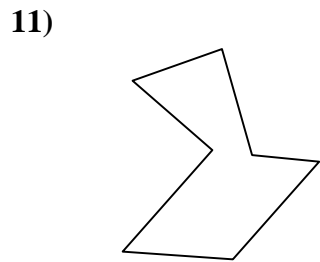
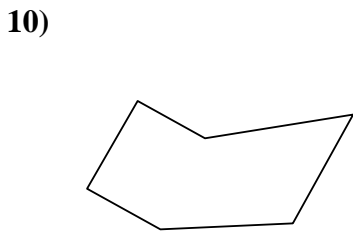
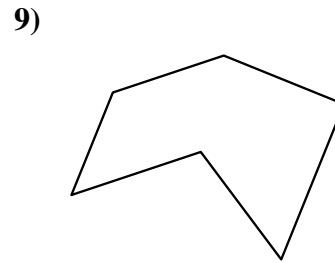
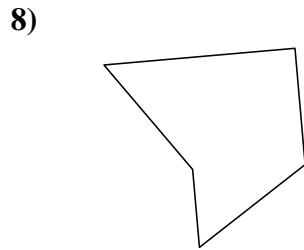
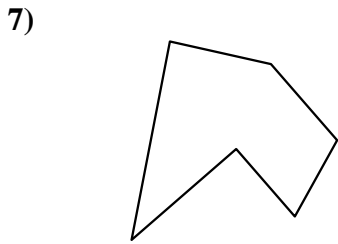
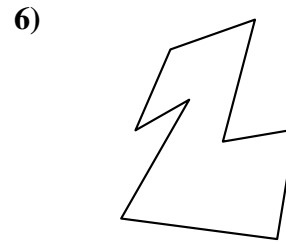
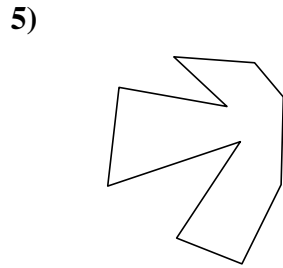
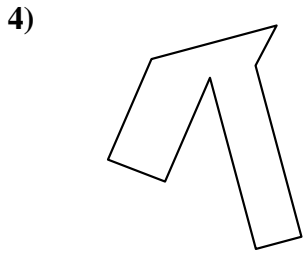
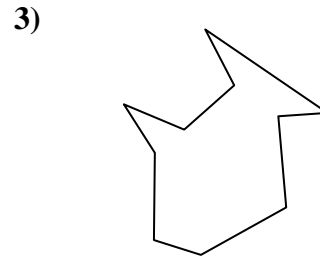
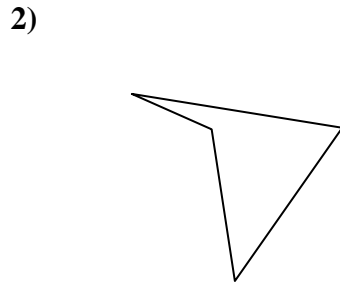
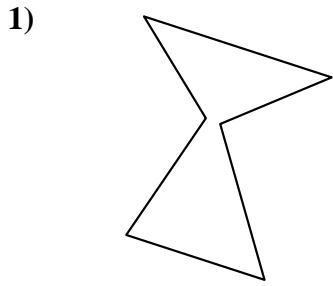


Antworten

- 1. _____
- 2. _____
- 3. _____
- 4. _____
- 5. _____
- 6. _____
- 7. _____
- 8. _____
- 9. _____
- 10. _____
- 11. _____
- 12. _____
- 13. _____
- 14. _____
- 15. _____



Identifiziere jede gezeigte Form.



Antworten

1. Sechseck

2. Viereck

3. Zehneck

4. Achteck

5. Zehneck

6. Achteck

7. Sechseck

8. Fünfeck

9. Sechseck

10. Sechseck

11. Siebeneck

12. Zehneck

13. Achteck

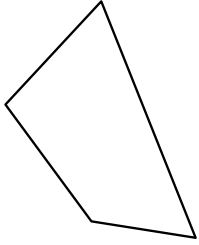
14. Achteck

15. Siebeneck

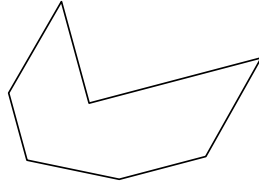


Identifiziere jede gezeigte Form.

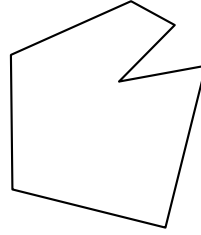
1)



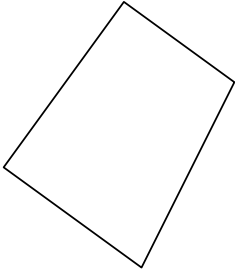
2)



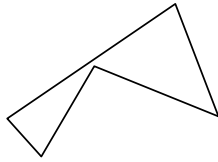
3)




4)



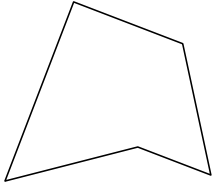
5)




6)



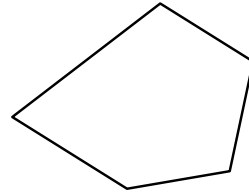
7)




8)



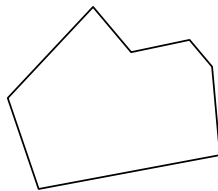
9)



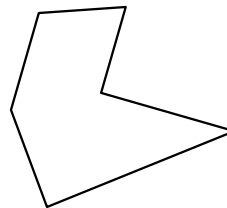
10)



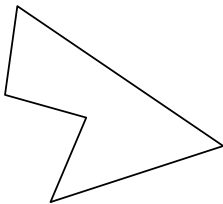
11)



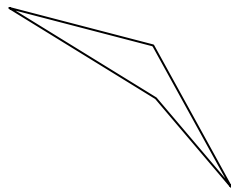
12)



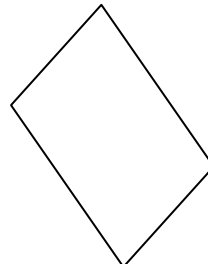
13)



14)



15)



Antworten

1. _____

2. _____

3. _____

4. _____

5. _____

6. _____

7. _____

8. _____

9. _____

10. _____

11. _____

12. _____

13. _____

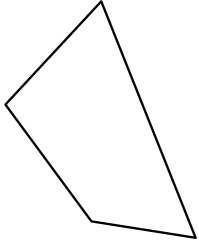
14. _____

15. _____

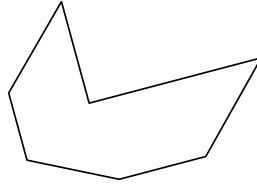


Identifiziere jede gezeigte Form.

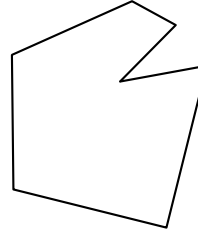
1)



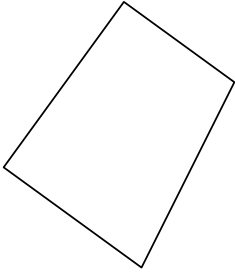
2)



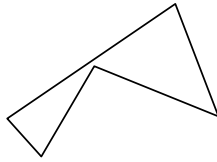
3)




4)



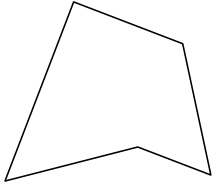
5)




6)



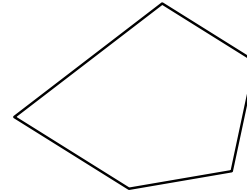
7)



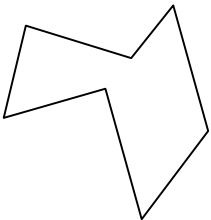
8)



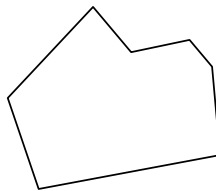
9)



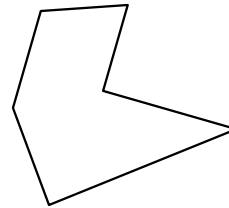
10)



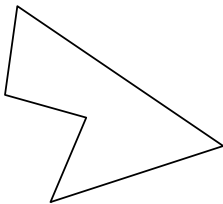
11)



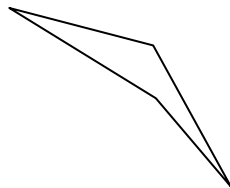
12)



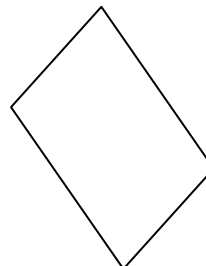
13)



14)



15)



Antworten

1. **Viereck**

2. **Siebeneck**

3. **Siebeneck**

4. **Viereck**

5. **Fünfeck**

6. **Zehneck**

7. **Fünfeck**

8. **Neuneck**

9. **Fünfeck**

10. **Siebeneck**

11. **Siebeneck**

12. **Sechseck**

13. **Fünfeck**

14. **Viereck**

15. **Viereck**