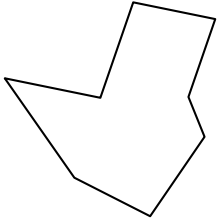





Identifiziere jede gezeigte Form.

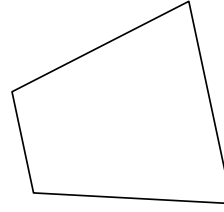
1)



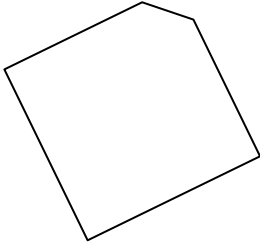
2)



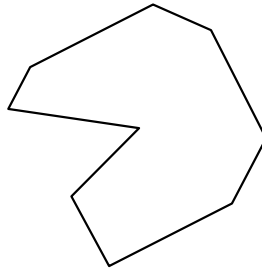
3)



4)



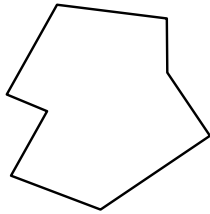
5)



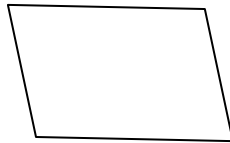
6)



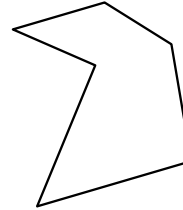
7)




8)



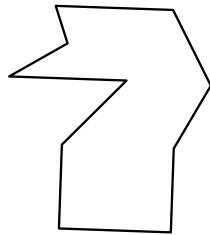
9)




10)



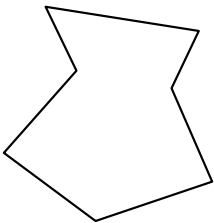
11)



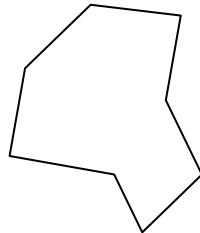
12)



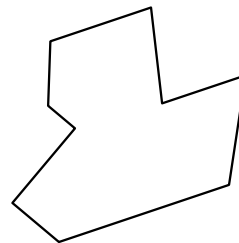
13)



14)



15)



Antworten

1. _____

2. _____

3. _____

4. _____

5. _____

6. _____

7. _____

8. _____

9. _____

10. _____

11. _____

12. _____

13. _____

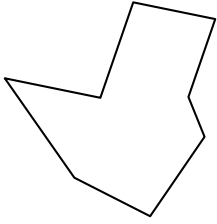
14. _____

15. _____




Identifiziere jede gezeigte Form.

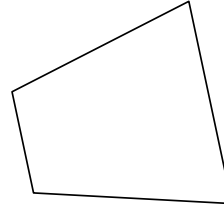
1)



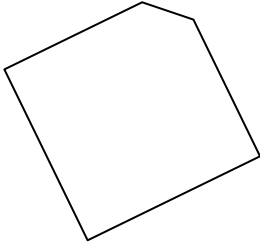
2)



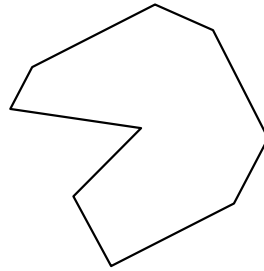
3)



4)



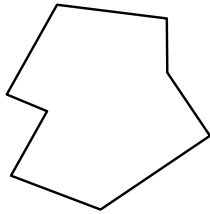
5)



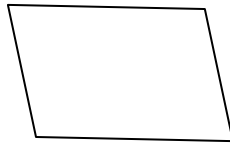
6)



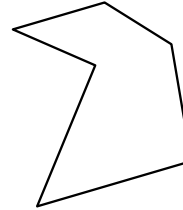
7)




8)



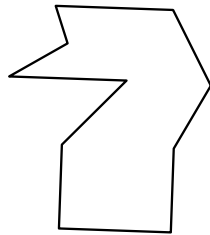
9)




10)



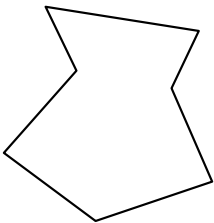
11)



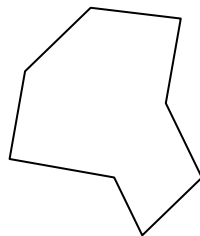
12)



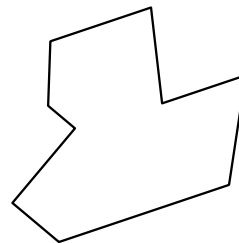
13)



14)



15)



Antworten

1. Achteck

2. Achteck

3. Viereck

4. Fünfeck

5. Neuneck

6. Viereck

7. Achteck

8. Viereck

9. Sechseck

10. Zehneck

11. Zehneck

12. Sechseck

13. Siebeneck

14. Achteck

15. Neuneck