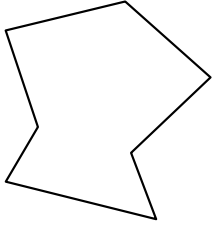


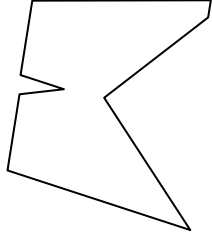


Identifiziere jede gezeigte Form.

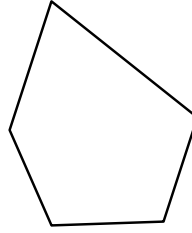
1)




2)



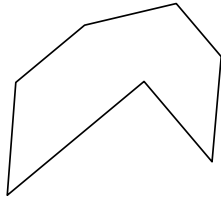
3)




4)




5)



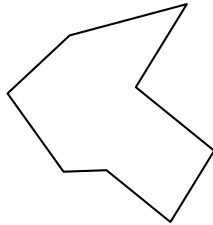
6)



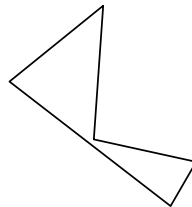
7)



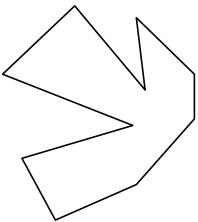
8)



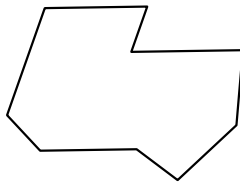
9)




10)



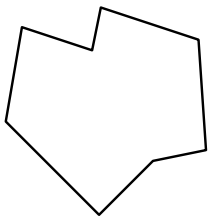
11)



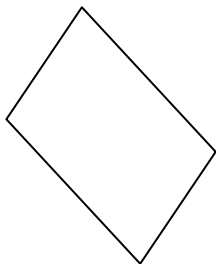
12)



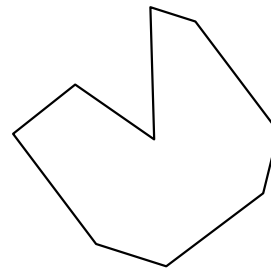
13)



14)



15)



Antworten

1. _____

2. _____

3. _____

4. _____

5. _____

6. _____

7. _____

8. _____

9. _____

10. _____

11. _____

12. _____

13. _____

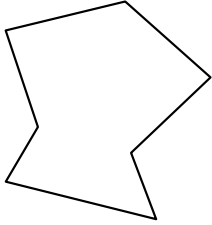
14. _____

15. _____




Identifiziere jede gezeigte Form.

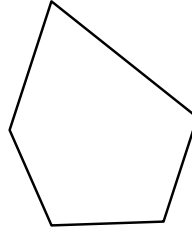
1)



2)



3)



Antworten

1. Siebeneck

2. Neuneck

3. Fünfeck

4. Zehneck

5. Siebeneck

6. Zehneck

7. Fünfeck

8. Achteck

9. Fünfeck

10. Zehneck

11. Neuneck


12. Sechseck

13. Achteck

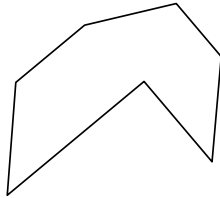
14. Viereck

15. Neuneck


4)




5)



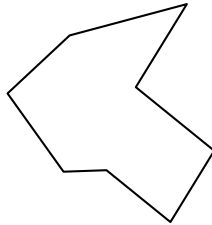
6)



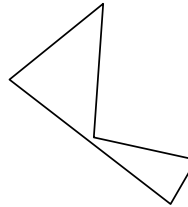
7)



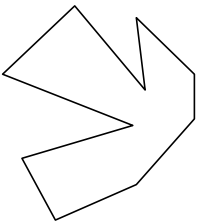
8)



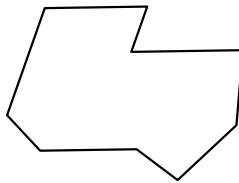
9)




10)



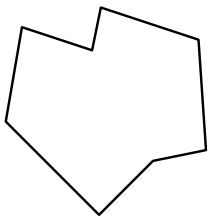
11)



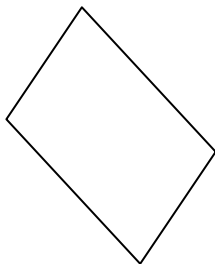
12)



13)



14)



15)

