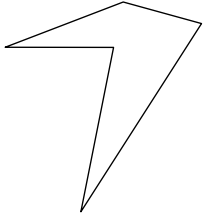




Identifiziere jede gezeigte Form.

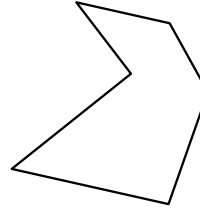
1)



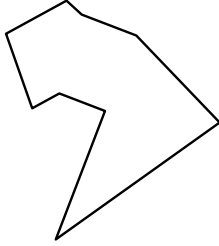
2)



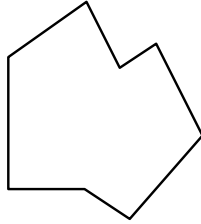
3)




4)



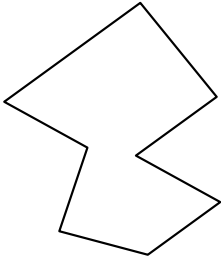
5)



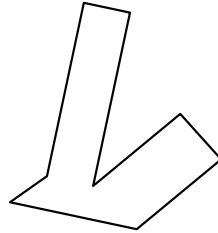
6)



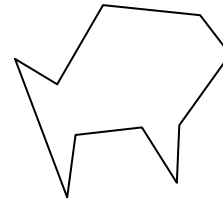
7)



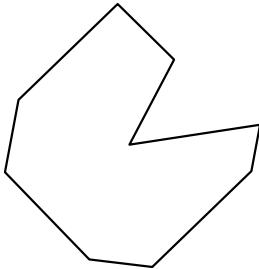
8)



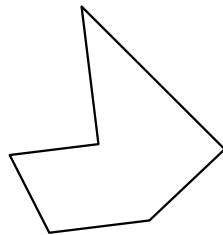
9)



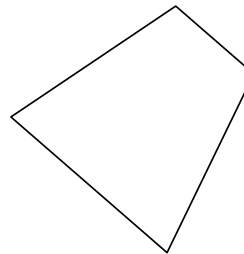
10)




11)



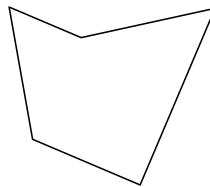
12)



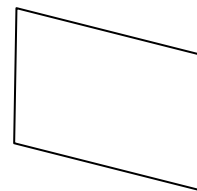
13)



14)



15)



Antworten

1. _____

2. _____

3. _____

4. _____

5. _____

6. _____

7. _____

8. _____

9. _____

10. _____

11. _____

12. _____

13. _____

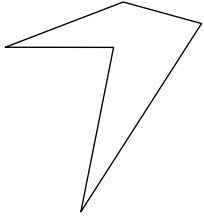
14. _____

15. _____



Identifiziere jede gezeigte Form.

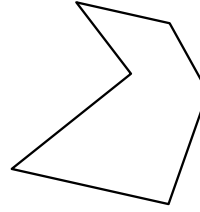
1)



2)



3)



Antworten

1. Fünfeck

2. Viereck

3. Sechseck

4. Neuneck

5. Achteck

6. Fünfeck

7. Achteck

8. Achteck

9. Zehneck

10. Neuneck

11. Sechseck

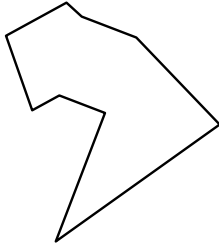
12. Viereck

13. Viereck

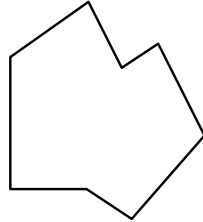
14. Fünfeck

15. Viereck


4)




5)



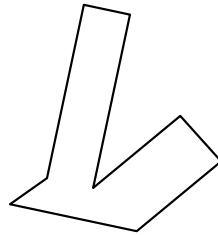
6)



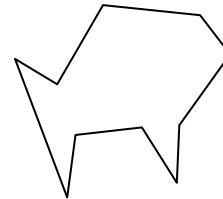
7)



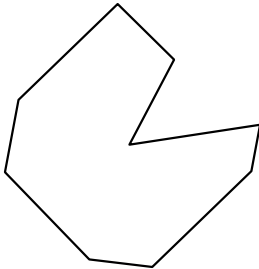
8)



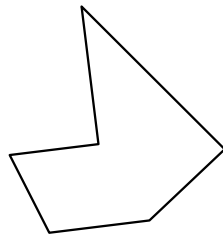
9)



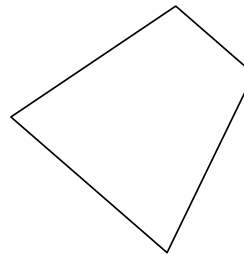
10)




11)



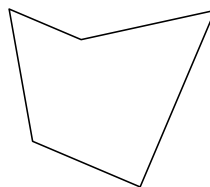
12)



13)



14)



15)

