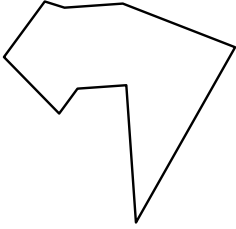




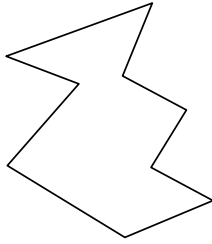
Identifiziere jede gezeigte Form.

Antworten

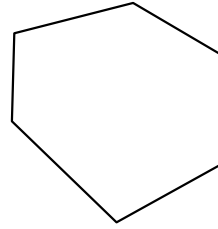
1)



2)



3)

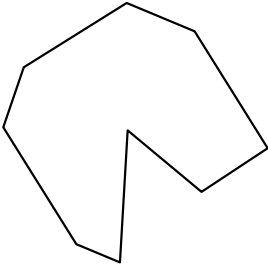


1. _____

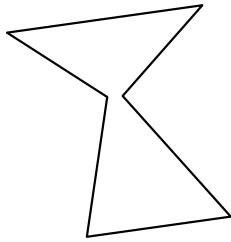
2. _____

3. _____

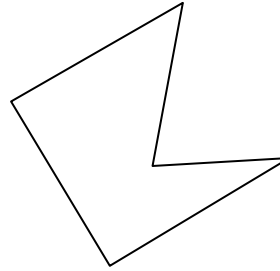
4)



5)



6)



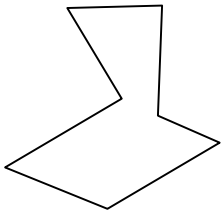
4. _____

5. _____

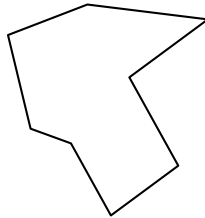
6. _____

7. _____

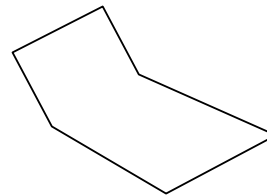
7)



8)



9)



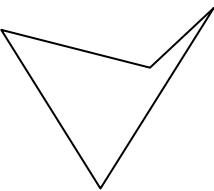
8. _____

9. _____

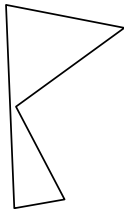
10. _____

11. _____

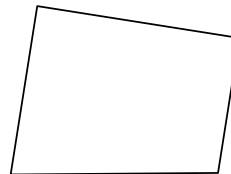
10)



11)



12)



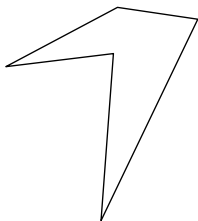
12. _____

13. _____

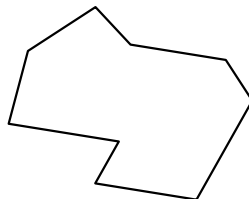
14. _____

15. _____

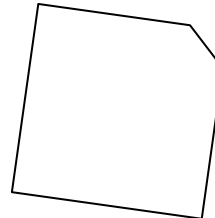
13)



14)



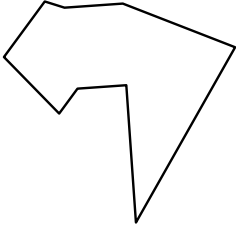
15)






Identifiziere jede gezeigte Form.

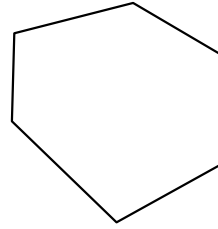
1)



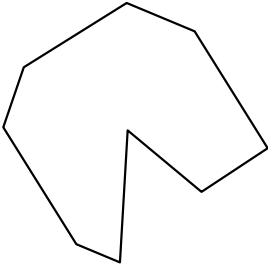
2)



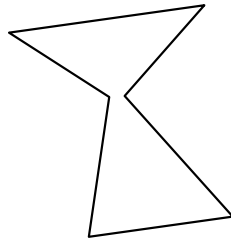
3)



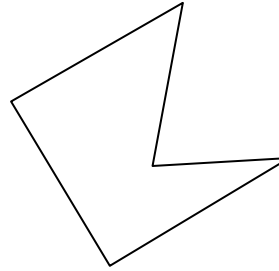
4)



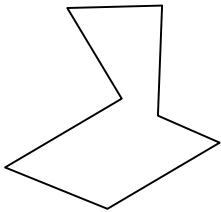
5)



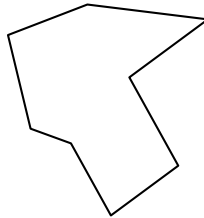
6)



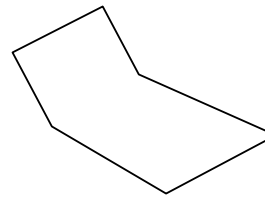
7)



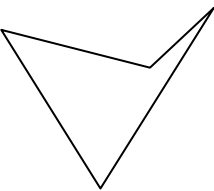
8)



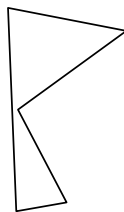
9)




10)



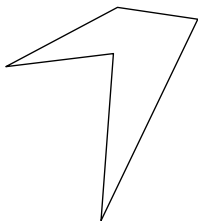
11)



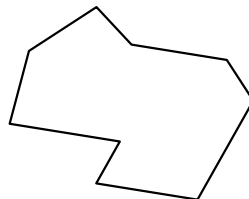
12)



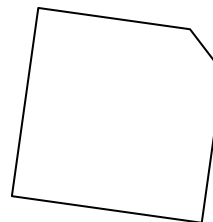
13)



14)



15)



Antworten

1. Neuneck

2. Zehneck

3. Sechseck

4. Neuneck

5. Sechseck

6. Fünfeck

7. Siebeneck

8. Achteck

9. Sechseck

10. Viereck

11. Fünfeck

12. Viereck

13. Fünfeck

14. Neuneck

15. Fünfeck