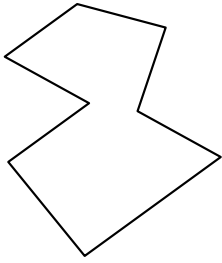




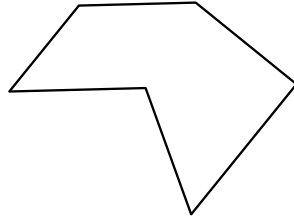
Identifiziere jede gezeigte Form.

Antworten

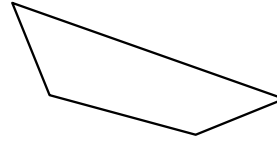
1)



2)



3)

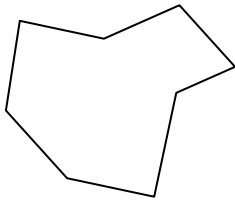


1. \_\_\_\_\_

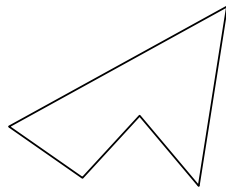
2. \_\_\_\_\_

3. \_\_\_\_\_

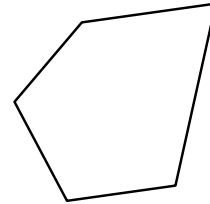
4)



5)



6)



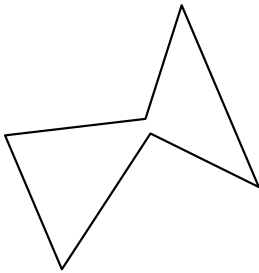
4. \_\_\_\_\_

5. \_\_\_\_\_

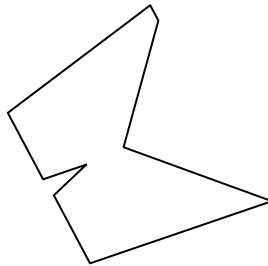
6. \_\_\_\_\_

7. \_\_\_\_\_


7)



8)



9)



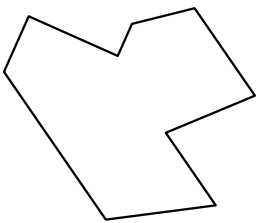
8. \_\_\_\_\_

9. \_\_\_\_\_

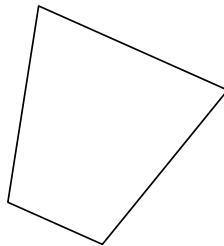
10. \_\_\_\_\_

11. \_\_\_\_\_

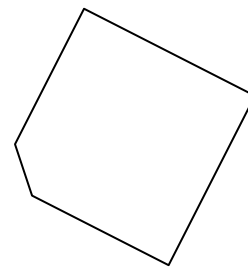
10)



11)



12)



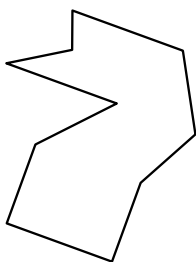
12. \_\_\_\_\_

13. \_\_\_\_\_

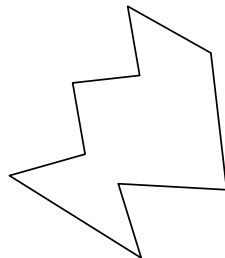
14. \_\_\_\_\_

15. \_\_\_\_\_

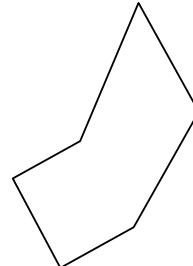
13)



14)



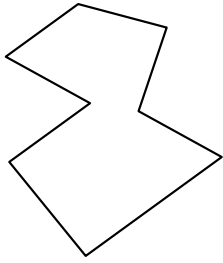
15)



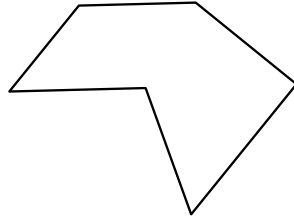


Identifiziere jede gezeigte Form.

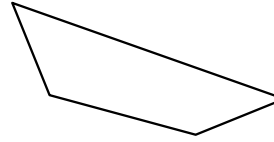
1)



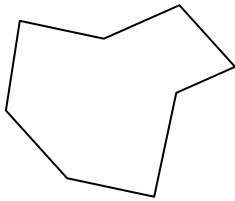
2)



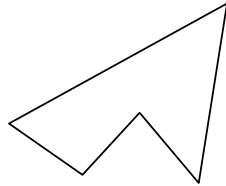
3)



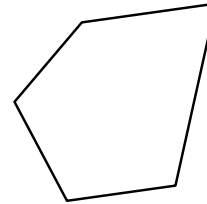
4)



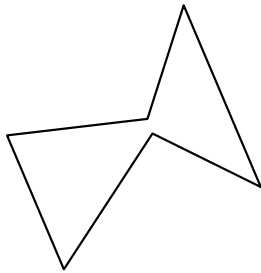
5)



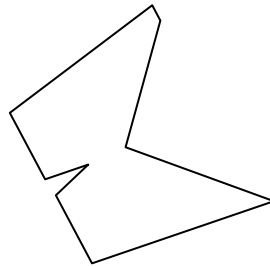
6)




7)



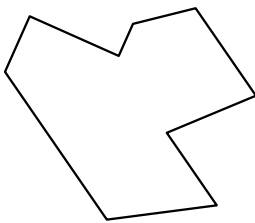
8)



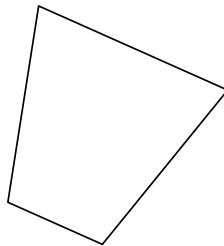
9)



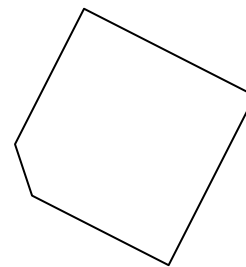
10)



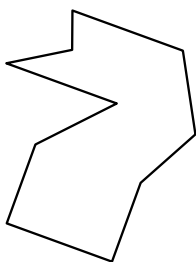
11)



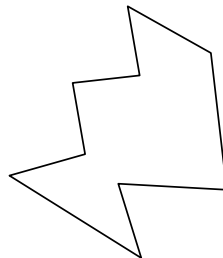
12)



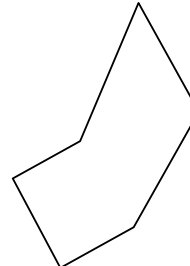
13)



14)



15)



**Antworten**

1. Achteck

2. Sechseck

3. Viereck

4. Achteck

5. Fünfeck

6. Fünfeck

7. Sechseck

8. Neuneck

9. Siebeneck

10. Neuneck

11. Viereck

12. Fünfeck

13. Zehneck

14. Zehneck

15. Sechseck