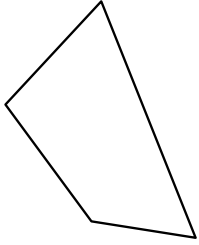


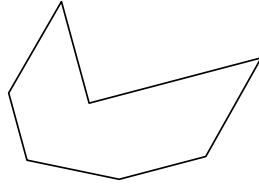


Identifiziere jede gezeigte Form.

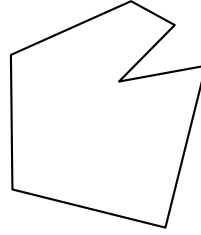
1)



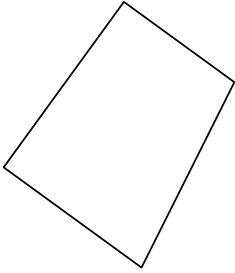
2)



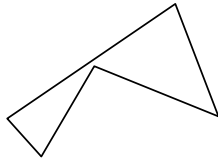
3)




4)



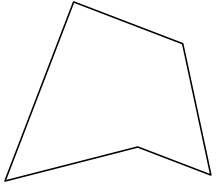
5)




6)



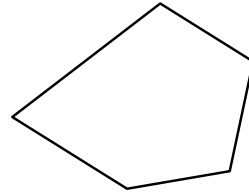
7)




8)



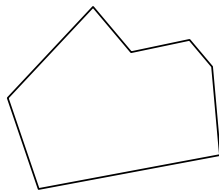
9)



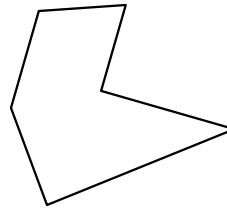
10)



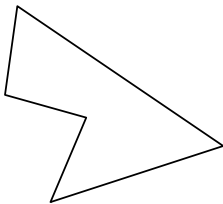
11)



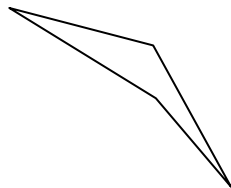
12)



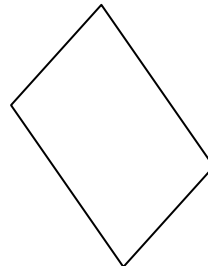
13)



14)



15)



Antworten

1. \_\_\_\_\_

2. \_\_\_\_\_

3. \_\_\_\_\_

4. \_\_\_\_\_

5. \_\_\_\_\_

6. \_\_\_\_\_

7. \_\_\_\_\_

8. \_\_\_\_\_

9. \_\_\_\_\_

10. \_\_\_\_\_

11. \_\_\_\_\_

12. \_\_\_\_\_

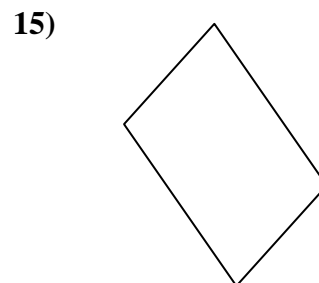
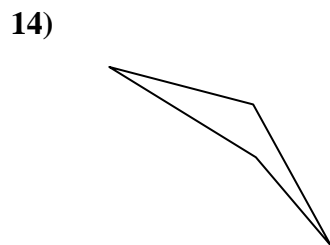
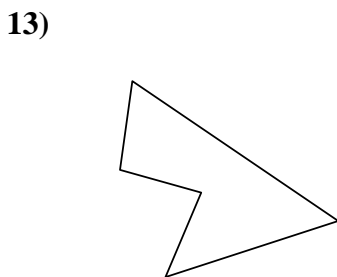
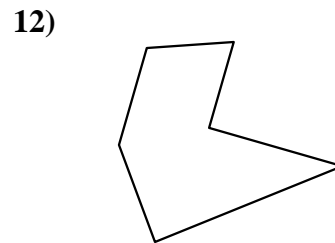
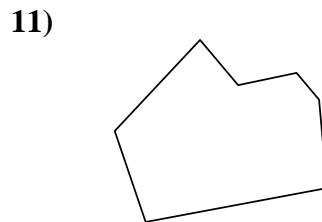
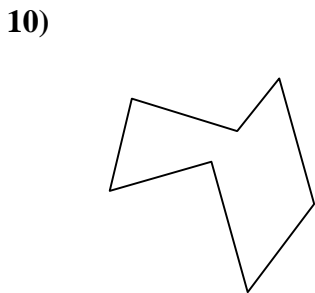
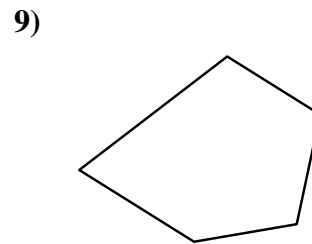
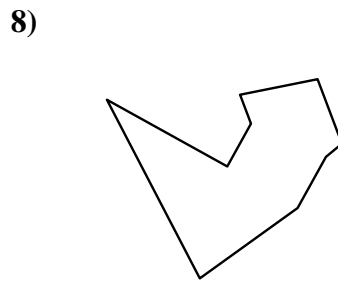
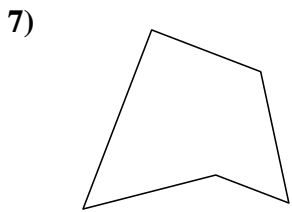
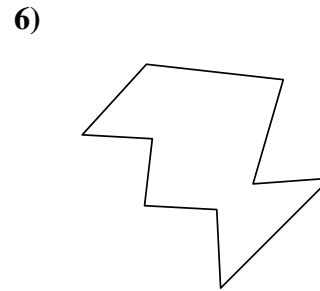
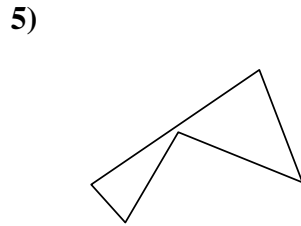
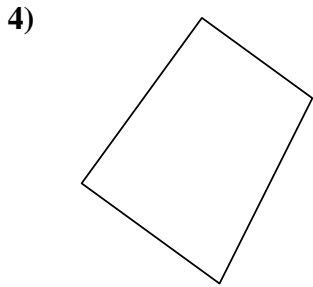
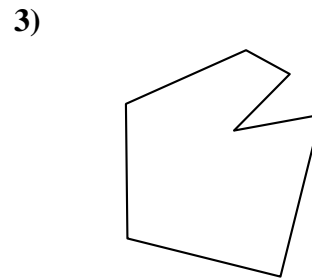
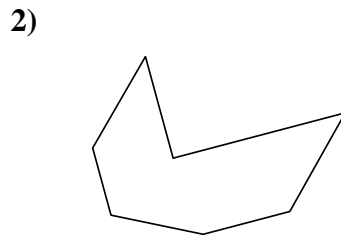
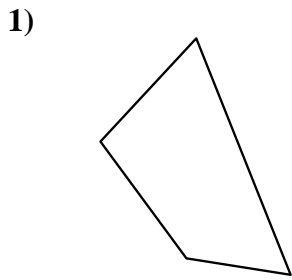
13. \_\_\_\_\_

14. \_\_\_\_\_

15. \_\_\_\_\_



Identifiziere jede gezeigte Form.



Antworten

1. Viereck

2. Siebeneck

3. Siebeneck

4. Viereck

5. Fünfeck

6. Zehneck

7. Fünfeck

8. Neuneck

9. Fünfeck

10. Siebeneck

11. Siebeneck

12. Sechseck

13. Fünfeck

14. Viereck

15. Viereck