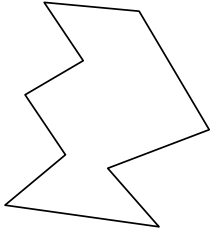




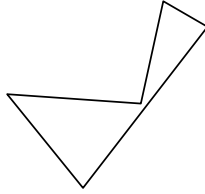
Identifiziere jede gezeigte Form.

Antworten

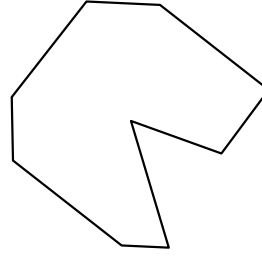
1)



2)



3)

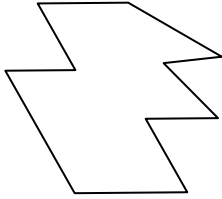


1. \_\_\_\_\_


2. \_\_\_\_\_

3. \_\_\_\_\_

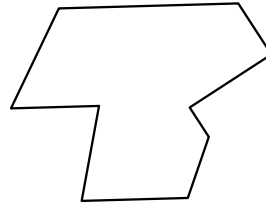
4)



5)



6)




4. \_\_\_\_\_

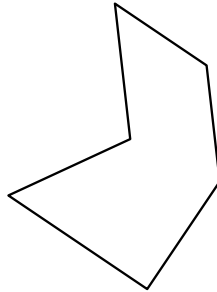
5. \_\_\_\_\_

6. \_\_\_\_\_

7)



8)



9)



7. \_\_\_\_\_

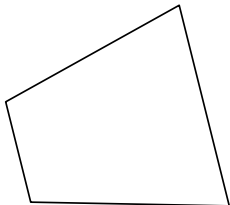
8. \_\_\_\_\_

9. \_\_\_\_\_


10. \_\_\_\_\_

11. \_\_\_\_\_


10)



11)



12)



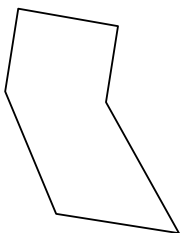
12. \_\_\_\_\_

13. \_\_\_\_\_

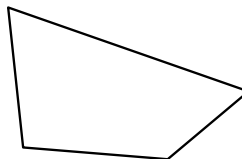
14. \_\_\_\_\_

15. \_\_\_\_\_

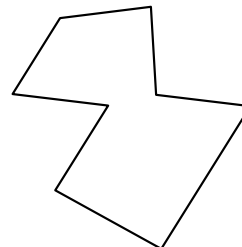
13)



14)

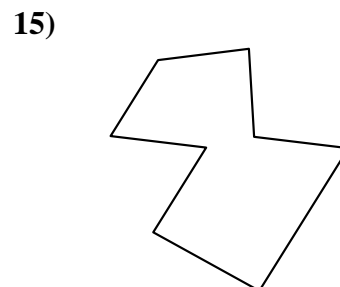
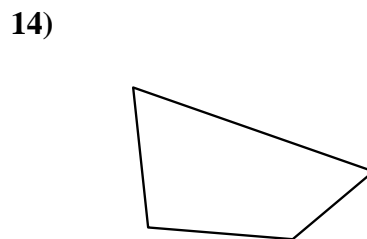
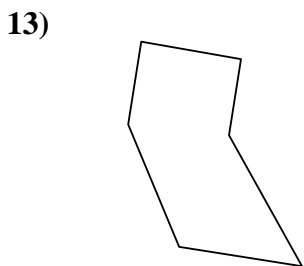
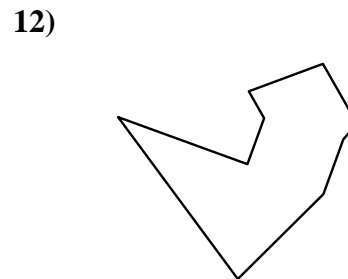
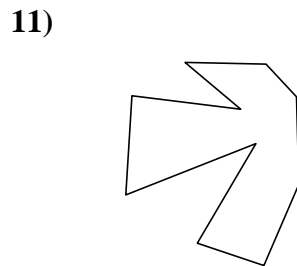
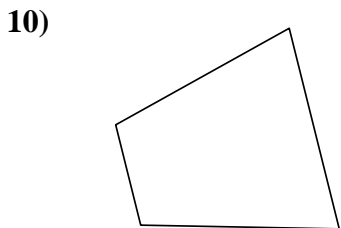

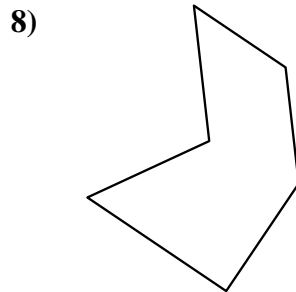
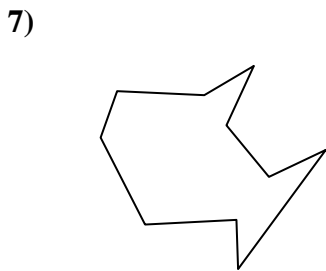
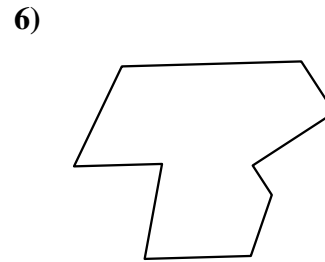

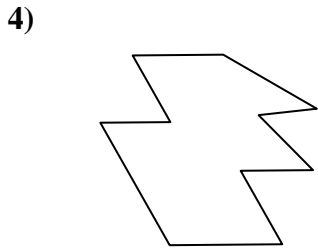
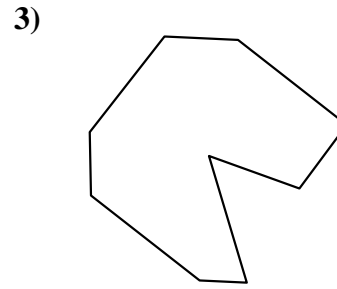
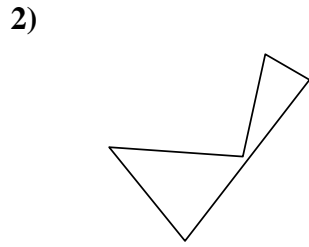
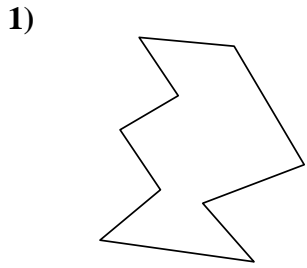


15)





Identifiziere jede gezeigte Form.



**Antworten**

1. Zehneck

2. Fünfeck

3. Neuneck

4. Zehneck

5. Achteck

6. Neuneck

7. Zehneck

8. Sechseck

9. Viereck

10. Viereck

11. Zehneck

12. Neuneck

13. Sechseck

14. Viereck

15. Achteck