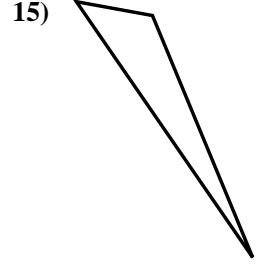
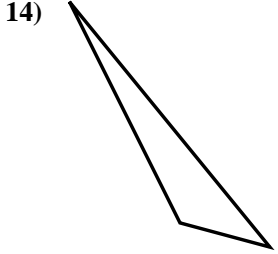
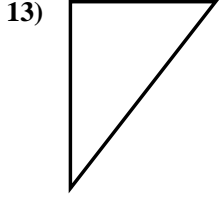
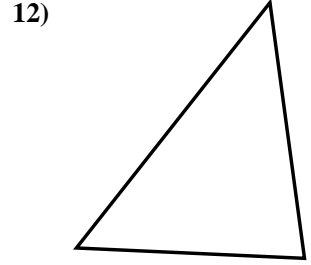
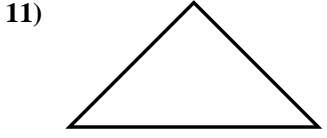
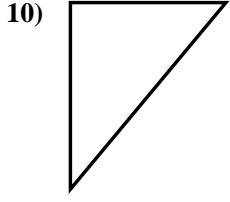

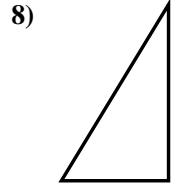
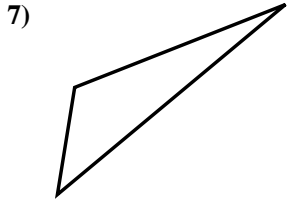
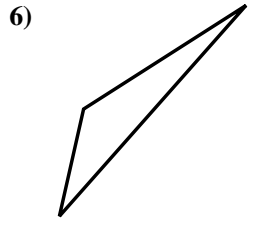
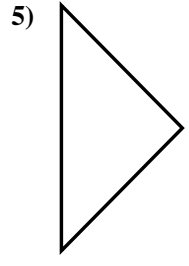
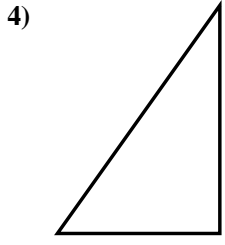
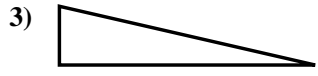
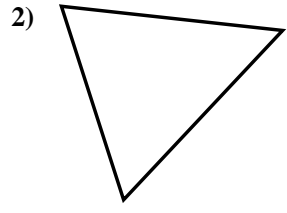
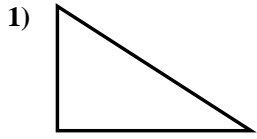




Stelle fest, ob die gezeigten Dreiecke rechtwinklig sind (ja) oder nicht (nein).

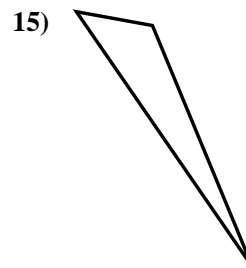
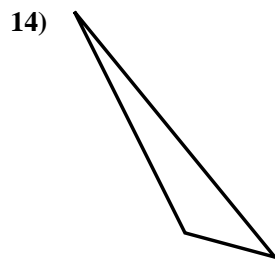
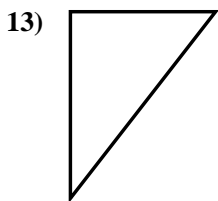
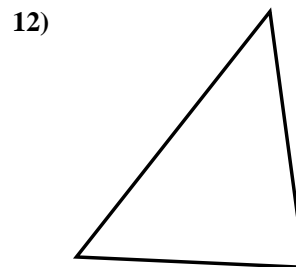
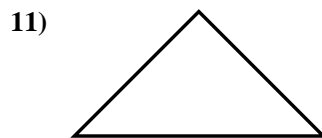
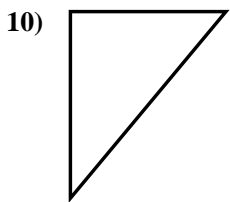
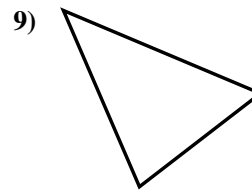
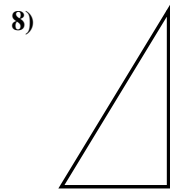
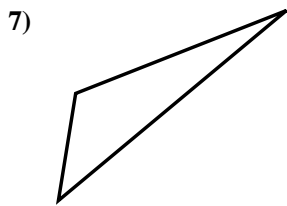
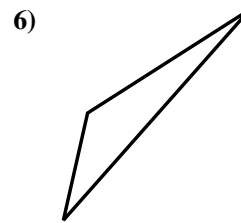
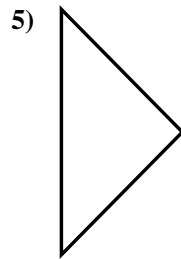
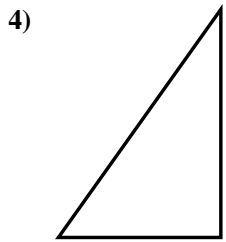
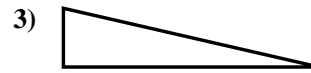
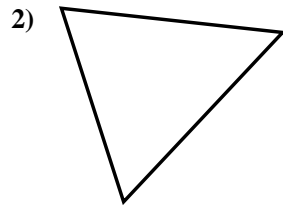
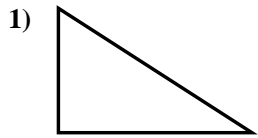
Antworten



- 1. _____
- 2. _____
- 3. _____
- 4. _____
- 5. _____
- 6. _____
- 7. _____
- 8. _____
- 9. _____
- 10. _____
- 11. _____
- 12. _____
- 13. _____
- 14. _____
- 15. _____



Stelle fest, ob die gezeigten Dreiecke rechtwinklig sind (ja) oder nicht (nein).



Antworten

1. ja

2. nein

3. ja

4. ja

5. ja

6. nein

7. nein

8. ja

9. nein

10. ja

11. ja

12. nein

13. ja

14. nein

15. nein