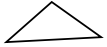


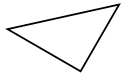


Stelle fest, ob die gezeigten Dreiecke rechtwinklig sind (ja) oder nicht (nein).

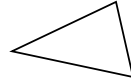
1)



2)



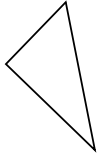
3)



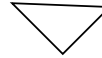
4)



5)



6)



7)



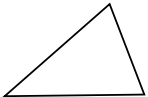
8)



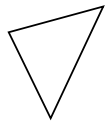
9)



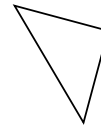
10)



11)



12)



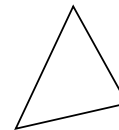
13)



14)



15)



Antworten

1. _____

2. _____

3. _____

4. _____

5. _____

6. _____

7. _____

8. _____

9. _____

10. _____

11. _____

12. _____

13. _____

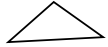
14. _____

15. _____

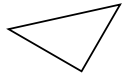


Stelle fest, ob die gezeigten Dreiecke rechtwinklig sind (ja) oder nicht (nein).

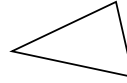
1)



2)



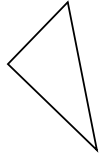
3)



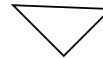
4)



5)



6)



7)



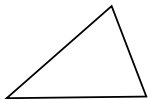
8)



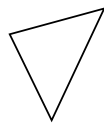
9)



10)



11)



12)



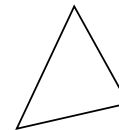
13)



14)



15)



Antworten

1. nein

2. ja

3. nein

4. nein

5. ja

6. ja

7. nein

8. nein

9. nein

10. nein

11. nein

12. ja

13. nein

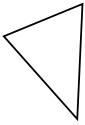
14. ja

15. nein



Stelle fest, ob die gezeigten Dreiecke rechtwinklig sind (ja) oder nicht (nein).

1)



2)



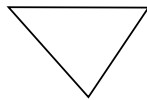
3)



4)



5)



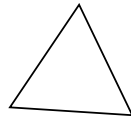
6)



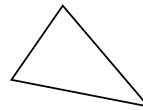
7)



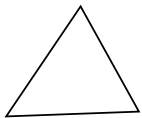
8)



9)



10)




11)



12)



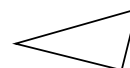
13)



14)



15)



Antworten

1. _____

2. _____

3. _____

4. _____

5. _____

6. _____

7. _____

8. _____

9. _____

10. _____

11. _____

12. _____

13. _____

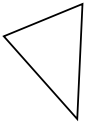
14. _____

15. _____



Stelle fest, ob die gezeigten Dreiecke rechtwinklig sind (ja) oder nicht (nein).

1)



2)



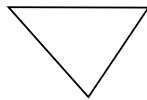
3)



4)



5)



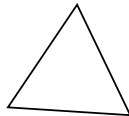
6)



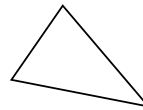
7)



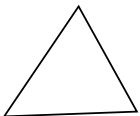
8)



9)



10)



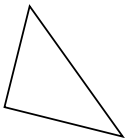
11)



12)



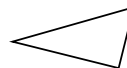
13)



14)



15)



Antworten

1. nein

2. nein

3. nein

4. ja

5. nein

6. nein

7. nein

8. nein

9. nein

10. nein

11. nein

12. ja

13. ja

14. ja

15. ja

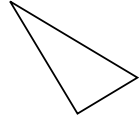


Stelle fest, ob die gezeigten Dreiecke rechtwinklig sind (ja) oder nicht (nein).

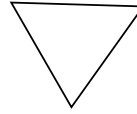
1)



2)



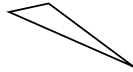
3)



4)



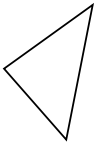
5)



6)



7)



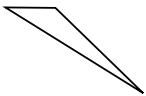
8)



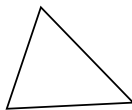
9)



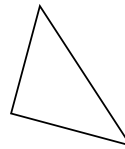
10)



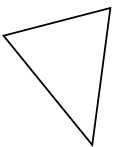
11)



12)



13)



14)



15)



Antworten

1. _____

2. _____

3. _____

4. _____

5. _____

6. _____

7. _____

8. _____

9. _____

10. _____

11. _____

12. _____

13. _____

14. _____

15. _____

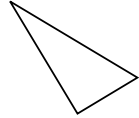


Stelle fest, ob die gezeigten Dreiecke rechtwinklig sind (ja) oder nicht (nein).

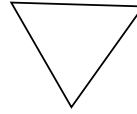
1)



2)



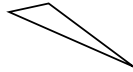
3)



4)



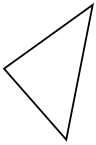
5)



6)



7)



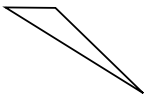
8)



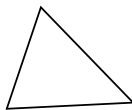
9)



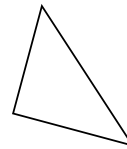
10)



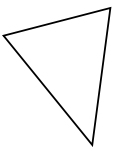
11)



12)



13)



14)



15)



Antworten

1. ja

2. ja

3. nein

4. ja

5. nein

6. ja

7. nein

8. nein

9. ja

10. nein

11. nein

12. ja

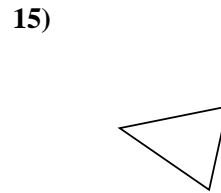
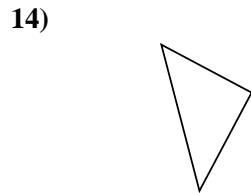
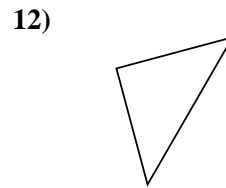
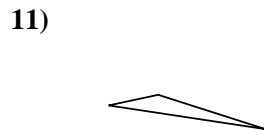
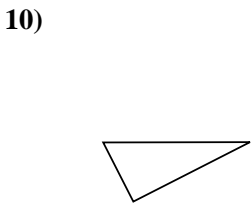

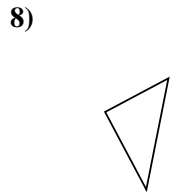
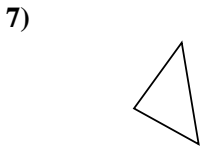
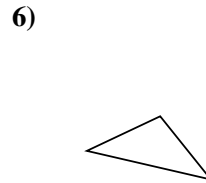
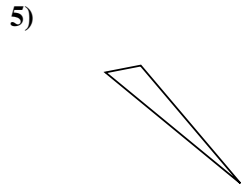
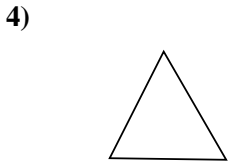
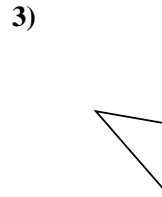
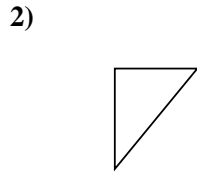
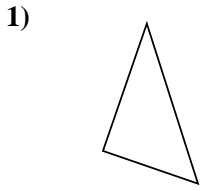
13. nein

14. nein

15. nein



Stelle fest, ob die gezeigten Dreiecke rechtwinklig sind (ja) oder nicht (nein).



Antworten

1. _____

2. _____

3. _____

4. _____

5. _____

6. _____

7. _____

8. _____

9. _____

10. _____

11. _____

12. _____

13. _____

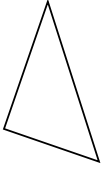
14. _____

15. _____

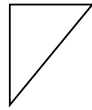


Stelle fest, ob die gezeigten Dreiecke rechtwinklig sind (ja) oder nicht (nein).

1)



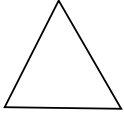
2)



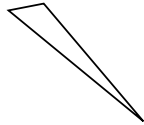
3)



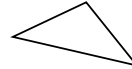
4)



5)



6)



7)



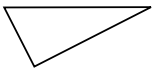
8)



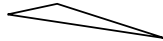
9)



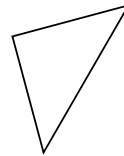
10)



11)



12)



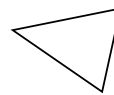
13)



14)



15)



Antworten

1. ja

2. ja

3. nein

4. nein

5. nein

6. nein

7. nein

8. ja

9. nein

10. ja

11. nein

12. ja

13. nein

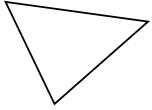
14. ja

15. nein



Stelle fest, ob die gezeigten Dreiecke rechtwinklig sind (ja) oder nicht (nein).

1)



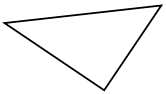
2)



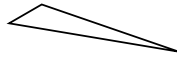
3)



4)



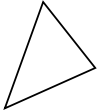
5)




6)



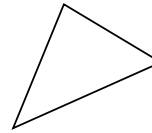
7)




8)



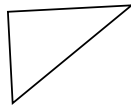
9)



10)



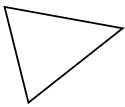
11)




12)



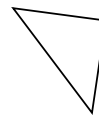
13)



14)



15)



Antworten

1. _____

2. _____

3. _____

4. _____

5. _____

6. _____

7. _____

8. _____

9. _____

10. _____

11. _____

12. _____

13. _____

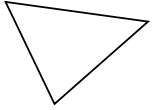
14. _____

15. _____



Stelle fest, ob die gezeigten Dreiecke rechtwinklig sind (ja) oder nicht (nein).

1)



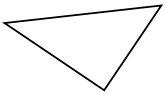
2)



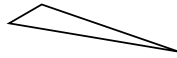
3)



4)



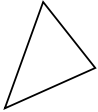
5)




6)



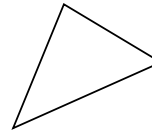
7)




8)



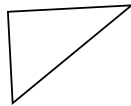
9)



10)



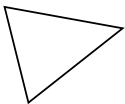
11)




12)



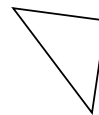
13)



14)



15)



Antworten

1. nein

2. ja

3. ja

4. ja

5. nein

6. nein

7. nein

8. nein

9. nein

10. ja

11. ja

12. nein

13. nein

14. nein

15. ja



Stelle fest, ob die gezeigten Dreiecke rechtwinklig sind (ja) oder nicht (nein).

1)



2)



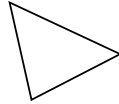
3)




4)



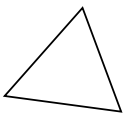
5)



6)



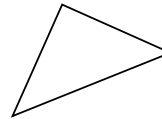
7)



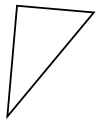
8)



9)



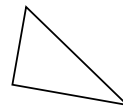
10)



11)



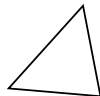
12)



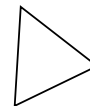
13)



14)



15)



Antworten

1. _____

2. _____

3. _____

4. _____

5. _____

6. _____

7. _____

8. _____

9. _____

10. _____

11. _____

12. _____

13. _____

14. _____

15. _____



Stelle fest, ob die gezeigten Dreiecke rechtwinklig sind (ja) oder nicht (nein).

1)



2)



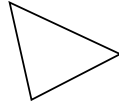
3)




4)



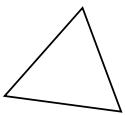
5)



6)



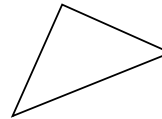
7)



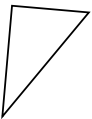
8)



9)



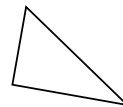
10)



11)



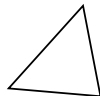
12)



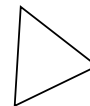
13)



14)



15)



Antworten

1. ja

2. ja

3. ja

4. ja

5. nein

6. nein

7. nein

8. nein

9. ja

10. ja

11. nein

12. ja

13. nein

14. nein

15. nein




Stelle fest, ob die gezeigten Dreiecke rechtwinklig sind (ja) oder nicht (nein).

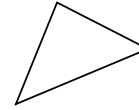
1)



2)



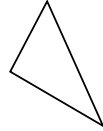
3)



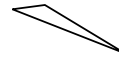
4)



5)



6)



7)



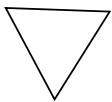
8)



9)



10)



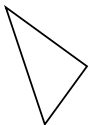
11)



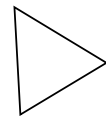
12)



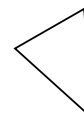
13)



14)



15)



Antworten

1. _____

2. _____

3. _____

4. _____

5. _____

6. _____

7. _____

8. _____

9. _____

10. _____

11. _____

12. _____

13. _____

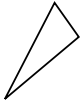
14. _____

15. _____




Stelle fest, ob die gezeigten Dreiecke rechtwinklig sind (ja) oder nicht (nein).

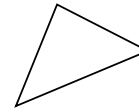
1)



2)



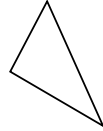
3)



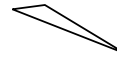
4)



5)



6)



7)



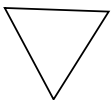
8)



9)



10)



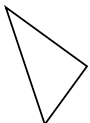
11)



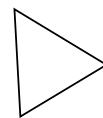
12)



13)



14)



15)



Antworten

1. nein

2. ja

3. nein

4. ja

5. ja

6. nein

7. nein

8. nein

9. nein

10. nein

11. ja

12. ja

13. ja


14. nein

15. nein




Stelle fest, ob die gezeigten Dreiecke rechtwinklig sind (ja) oder nicht (nein).

1)



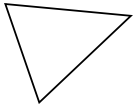
2)



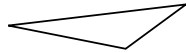
3)



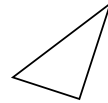
4)



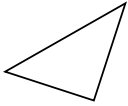
5)



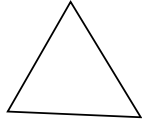
6)



7)



8)



9)



10)



11)



12)



13)



14)



15)



Antworten

1. _____

2. _____

3. _____

4. _____

5. _____

6. _____

7. _____

8. _____

9. _____

10. _____

11. _____

12. _____

13. _____


14. _____

15. _____




Stelle fest, ob die gezeigten Dreiecke rechtwinklig sind (ja) oder nicht (nein).

1)



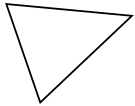
2)



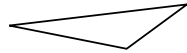
3)



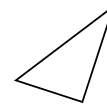
4)



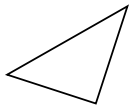
5)



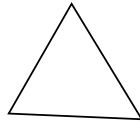
6)



7)



8)



9)



10)



11)



12)



13)



14)



15)



Antworten

1. nein

2. nein

3. ja

4. nein

5. nein

6. ja

7. ja

8. nein

9. nein

10. nein

11. ja

12. nein

13. ja

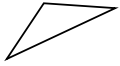
14. nein

15. ja

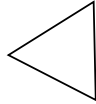


Stelle fest, ob die gezeigten Dreiecke rechtwinklig sind (ja) oder nicht (nein).

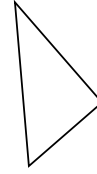
1)



2)



3)




4)



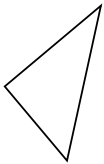
5)



6)



7)



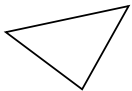
8)



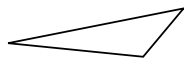
9)




10)



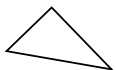
11)



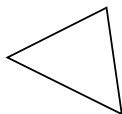
12)



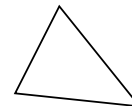
13)



14)



15)



Antworten

1. _____

2. _____

3. _____

4. _____

5. _____

6. _____

7. _____

8. _____

9. _____

10. _____

11. _____

12. _____

13. _____


14. _____

15. _____

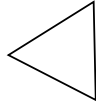


Stelle fest, ob die gezeigten Dreiecke rechtwinklig sind (ja) oder nicht (nein).

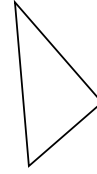
1)



2)



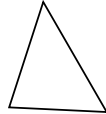
3)




4)



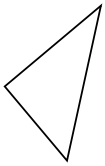
5)



6)



7)



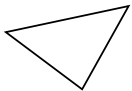
8)



9)




10)



11)



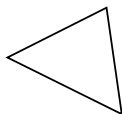
12)



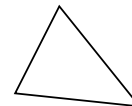
13)



14)



15)



Antworten

1. nein

2. nein

3. ja

4. nein

5. nein

6. ja

7. ja

8. ja

9. nein

10. nein

11. nein

12. nein

13. ja


14. nein

15. nein



Stelle fest, ob die gezeigten Dreiecke rechtwinklig sind (ja) oder nicht (nein).

1)



2)



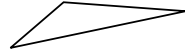
3)



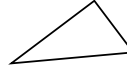
4)



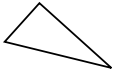
5)



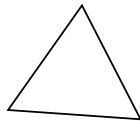
6)



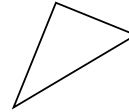
7)



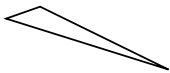
8)



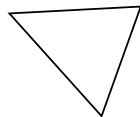
9)



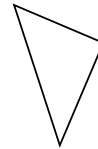
10)



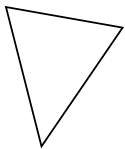
11)



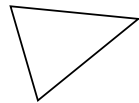
12)



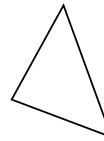
13)



14)



15)



Antworten

1. _____

2. _____

3. _____

4. _____

5. _____

6. _____

7. _____

8. _____

9. _____

10. _____

11. _____

12. _____

13. _____


14. _____

15. _____

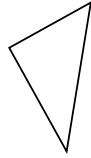


Stelle fest, ob die gezeigten Dreiecke rechtwinklig sind (ja) oder nicht (nein).

1)



2)



3)



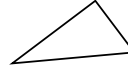
4)



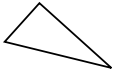
5)



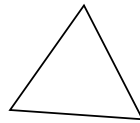
6)



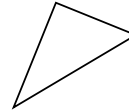
7)



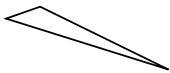
8)



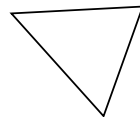
9)



10)



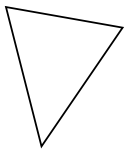
11)



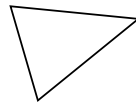
12)



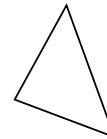
13)



14)



15)



Antworten

1. ja

2. ja

3. nein

4. nein

5. nein

6. ja

7. ja

8. nein

9. ja

10. nein

11. nein

12. ja

13. nein

14. nein

15. nein