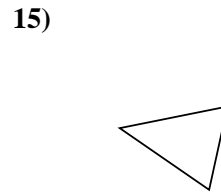
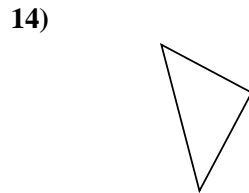
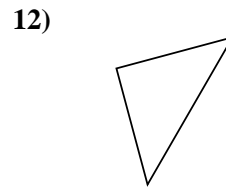
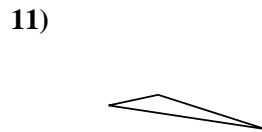
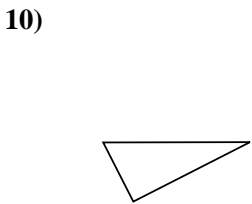

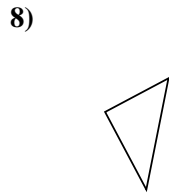
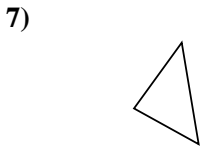
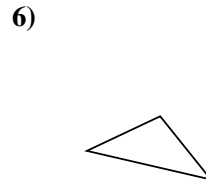
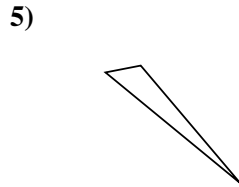
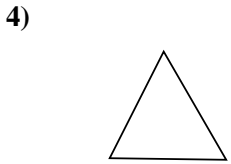
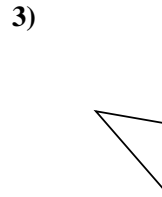
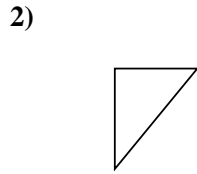
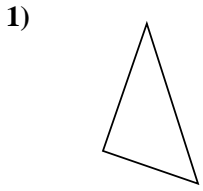




Stelle fest, ob die gezeigten Dreiecke rechtwinklig sind (ja) oder nicht (nein).



Antworten

1. _____

2. _____

3. _____

4. _____

5. _____

6. _____

7. _____

8. _____

9. _____

10. _____

11. _____

12. _____

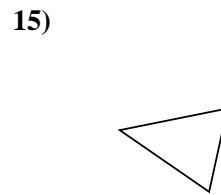
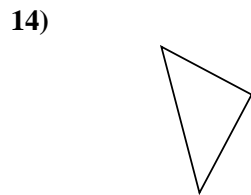
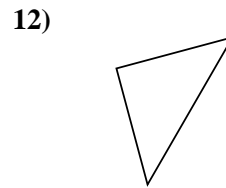
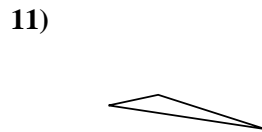
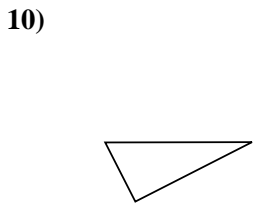

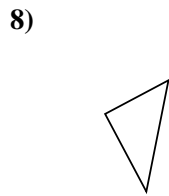
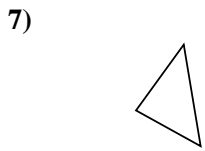
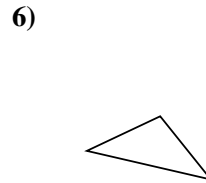
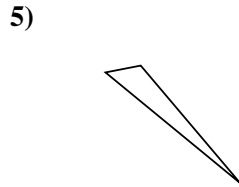
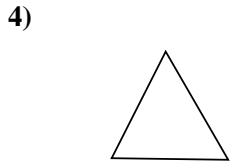
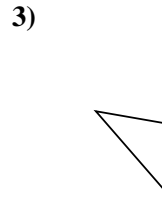
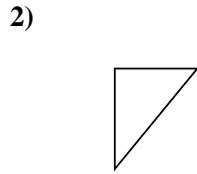
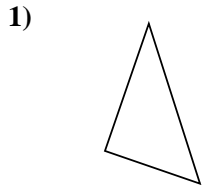
13. _____

14. _____

15. _____



Stelle fest, ob die gezeigten Dreiecke rechtwinklig sind (ja) oder nicht (nein).



Antworten

1. ja

2. ja

3. nein

4. nein

5. nein

6. nein

7. nein

8. ja

9. nein

10. ja

11. nein

12. ja

13. nein

14. ja

15. nein