

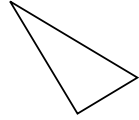


Stelle fest, ob die gezeigten Dreiecke rechtwinklig sind (ja) oder nicht (nein).

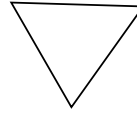
1)



2)



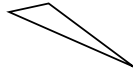
3)



4)



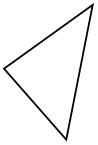
5)



6)



7)



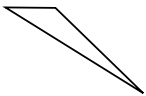
8)



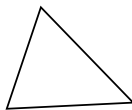
9)



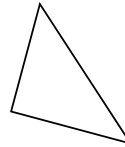
10)



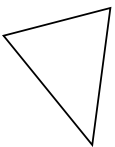
11)



12)



13)



14)



15)



Antworten

1. \_\_\_\_\_

2. \_\_\_\_\_

3. \_\_\_\_\_

4. \_\_\_\_\_

5. \_\_\_\_\_

6. \_\_\_\_\_

7. \_\_\_\_\_

8. \_\_\_\_\_

9. \_\_\_\_\_

10. \_\_\_\_\_

11. \_\_\_\_\_

12. \_\_\_\_\_

13. \_\_\_\_\_

14. \_\_\_\_\_

15. \_\_\_\_\_

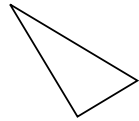


Stelle fest, ob die gezeigten Dreiecke rechtwinklig sind (ja) oder nicht (nein).

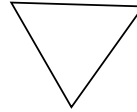
1)



2)



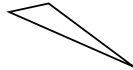
3)



4)



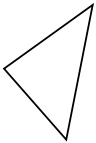
5)



6)



7)



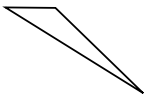
8)



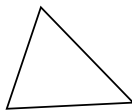
9)



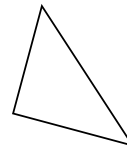
10)



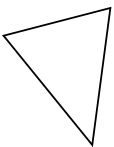
11)



12)



13)



14)



15)



Antworten

1. ja

2. ja

3. nein

4. ja

5. nein

6. ja

7. nein

8. nein

9. ja

10. nein

11. nein

12. ja

13. nein

14. nein

15. nein