



Stelle fest, ob die gezeigten Dreiecke rechtwinklig sind (ja) oder nicht (nein).

1)



2)



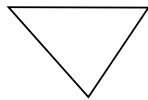
3)



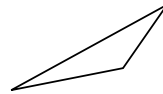
4)



5)



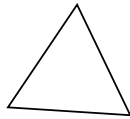
6)



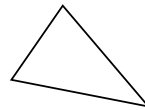
7)



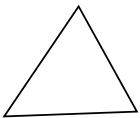
8)



9)



10)



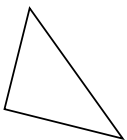
11)



12)



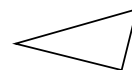
13)



14)



15)



Antworten

1. \_\_\_\_\_

2. \_\_\_\_\_

3. \_\_\_\_\_

4. \_\_\_\_\_

5. \_\_\_\_\_

6. \_\_\_\_\_

7. \_\_\_\_\_

8. \_\_\_\_\_

9. \_\_\_\_\_

10. \_\_\_\_\_

11. \_\_\_\_\_

12. \_\_\_\_\_

13. \_\_\_\_\_

14. \_\_\_\_\_

15. \_\_\_\_\_



Stelle fest, ob die gezeigten Dreiecke rechtwinklig sind (ja) oder nicht (nein).

1)



2)



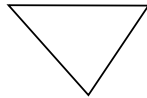
3)



4)



5)



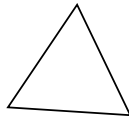
6)



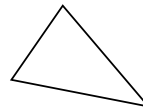
7)



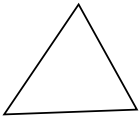
8)



9)



10)



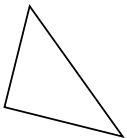
11)



12)



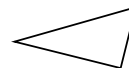
13)



14)



15)



Antworten

1. nein

2. nein

3. nein

4. ja

5. nein

6. nein

7. nein

8. nein

9. nein

10. nein

11. nein

12. ja

13. ja

14. ja

15. ja