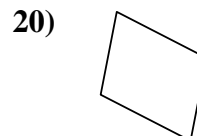
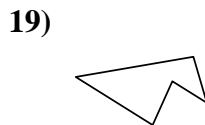
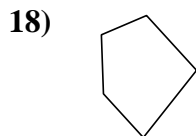
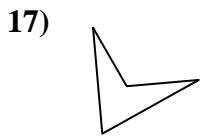
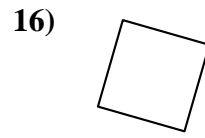
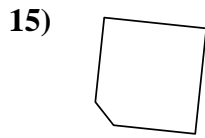
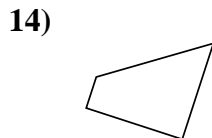
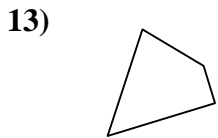
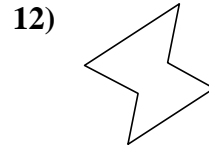
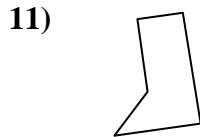
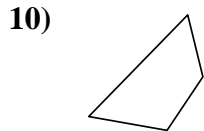
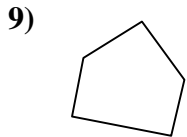
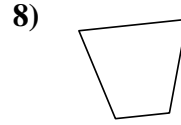
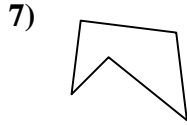
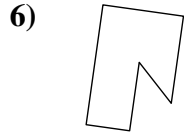
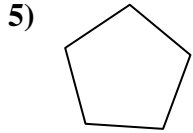
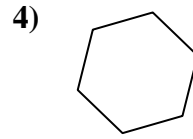
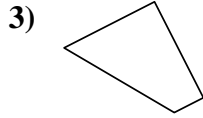
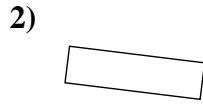
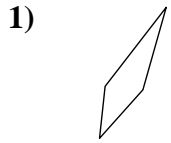




Stelle fest, ob die gezeigte Form viereckig ist (ja) oder nicht (nein).

**Antworten**

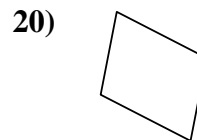
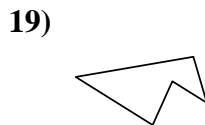
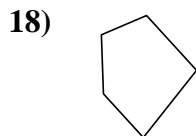
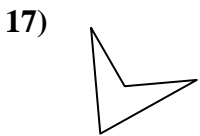
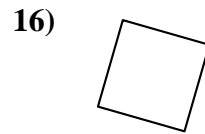
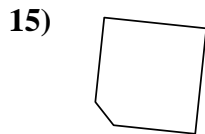
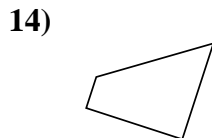
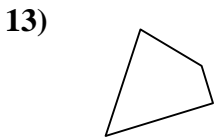
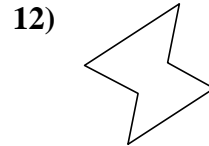
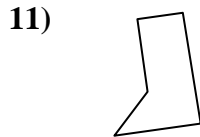
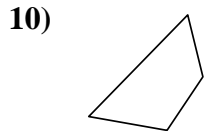
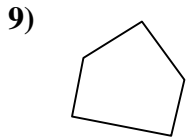
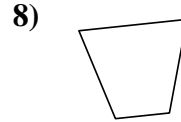
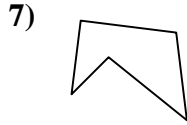
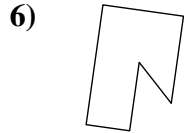
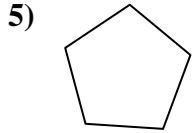
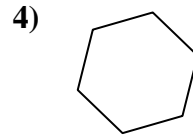
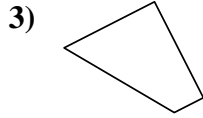
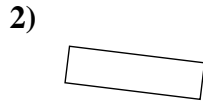
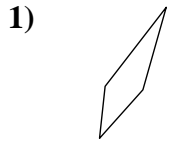


- 1. \_\_\_\_\_
- 2. \_\_\_\_\_
- 3. \_\_\_\_\_
- 4. \_\_\_\_\_
- 5. \_\_\_\_\_
- 6. \_\_\_\_\_
- 7. \_\_\_\_\_
- 8. \_\_\_\_\_
- 9. \_\_\_\_\_
- 10. \_\_\_\_\_
- 11. \_\_\_\_\_
- 12. \_\_\_\_\_
- 13. \_\_\_\_\_
- 14. \_\_\_\_\_
- 15. \_\_\_\_\_
- 16. \_\_\_\_\_
- 17. \_\_\_\_\_
- 18. \_\_\_\_\_
- 19. \_\_\_\_\_
- 20. \_\_\_\_\_



Stelle fest, ob die gezeigte Form viereckig ist (ja) oder nicht (nein).

Antworten



1. ja

2. ja

3. ja

4. nein

5. nein

6. nein

7. nein

8. ja

9. nein

10. ja

11. nein

12. nein

13. ja

14. ja

15. nein

16. ja

17. ja

18. nein

19. nein

20. ja