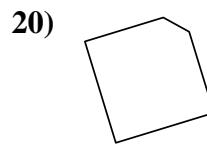
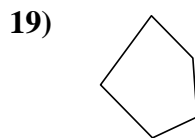
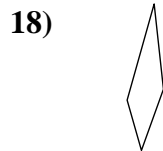
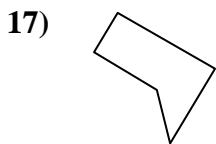
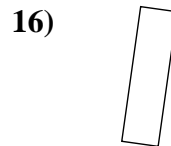
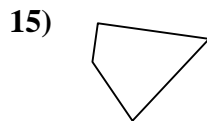
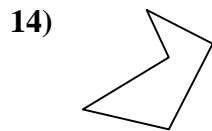
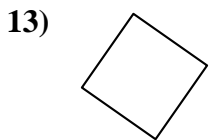
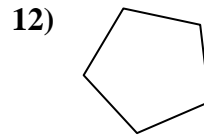
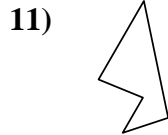
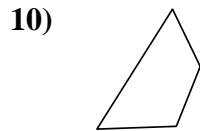
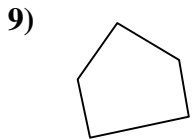
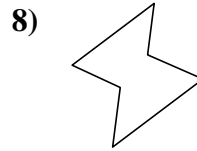
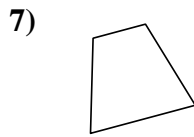
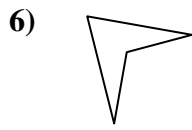
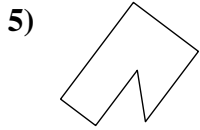
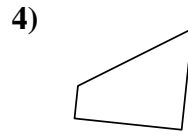
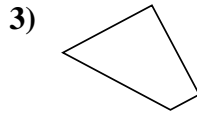
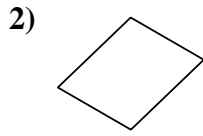
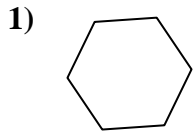




Stelle fest, ob die gezeigte Form viereckig ist (ja) oder nicht (nein).



Antworten

1. \_\_\_\_\_

2. \_\_\_\_\_

3. \_\_\_\_\_

4. \_\_\_\_\_

5. \_\_\_\_\_

6. \_\_\_\_\_

7. \_\_\_\_\_

8. \_\_\_\_\_

9. \_\_\_\_\_

10. \_\_\_\_\_

11. \_\_\_\_\_

12. \_\_\_\_\_

13. \_\_\_\_\_

14. \_\_\_\_\_

15. \_\_\_\_\_

16. \_\_\_\_\_

17. \_\_\_\_\_


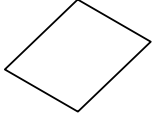
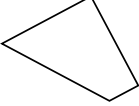
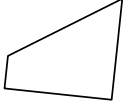
18. \_\_\_\_\_

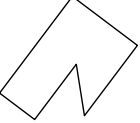



19. \_\_\_\_\_

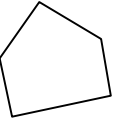
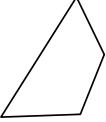

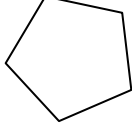
20. \_\_\_\_\_

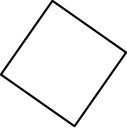
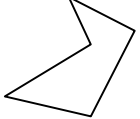
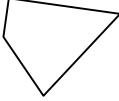



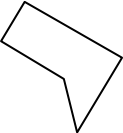

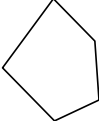
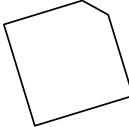
Stelle fest, ob die gezeigte Form viereckig ist (ja) oder nicht (nein).

1)  2)  3)  4) 

5)  6)  7)  8) 

9)  10)  11)  12) 

13)  14)  15)  16) 

17)  18)  19)  20) 

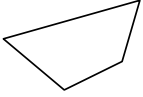
Antworten

1. nein
2. ja
3. ja
4. ja
5. nein
6. ja
7. ja
8. nein
9. nein
10. ja
11. nein
12. nein
13. ja
14. nein
15. ja
16. ja
17. nein
18. ja
19. nein
20. nein

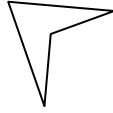


Stelle fest, ob die gezeigte Form viereckig ist (ja) oder nicht (nein).

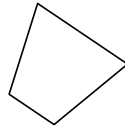
1)



2)



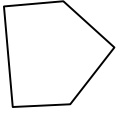
3)



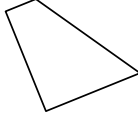
4)



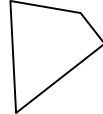
5)



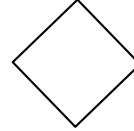
6)



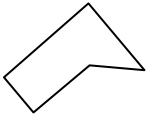
7)



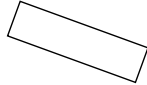
8)



9)



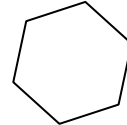
10)



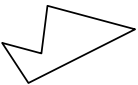
11)




12)



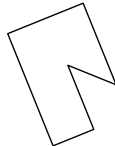
13)



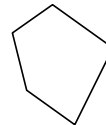
14)



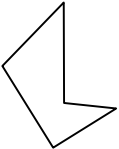
15)



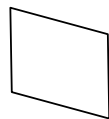
16)



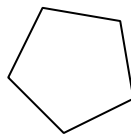
17)



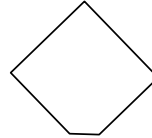
18)



19)



20)



Antworten

1. \_\_\_\_\_

2. \_\_\_\_\_

3. \_\_\_\_\_

4. \_\_\_\_\_

5. \_\_\_\_\_

6. \_\_\_\_\_

7. \_\_\_\_\_

8. \_\_\_\_\_

9. \_\_\_\_\_

10. \_\_\_\_\_

11. \_\_\_\_\_

12. \_\_\_\_\_

13. \_\_\_\_\_

14. \_\_\_\_\_

15. \_\_\_\_\_

16. \_\_\_\_\_

17. \_\_\_\_\_

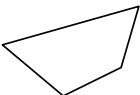
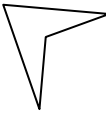
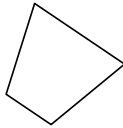

18. \_\_\_\_\_

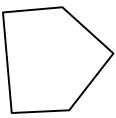
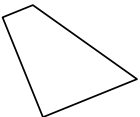

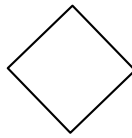
19. \_\_\_\_\_


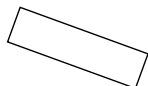
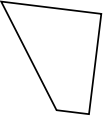
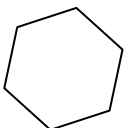
20. \_\_\_\_\_


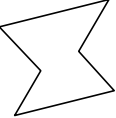
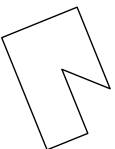
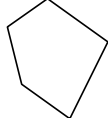


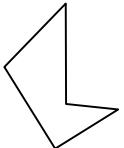
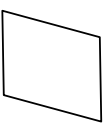
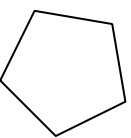
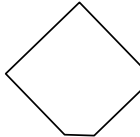
Stelle fest, ob die gezeigte Form viereckig ist (ja) oder nicht (nein).

1)  2)  3)  4) 

5)  6)  7)  8) 

9)  10)  11)  12) 

13)  14)  15)  16) 

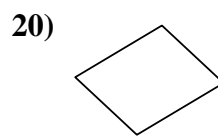
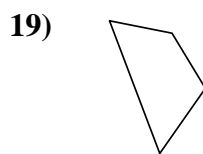
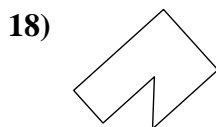
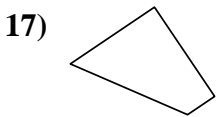
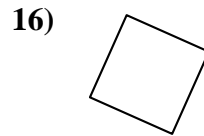
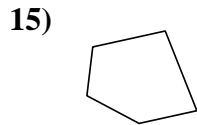
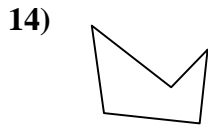
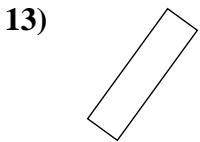
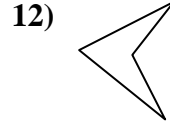
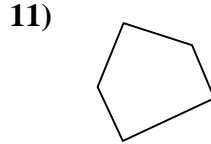
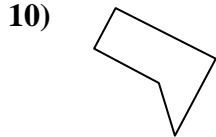
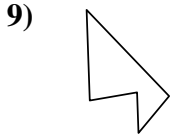
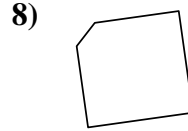
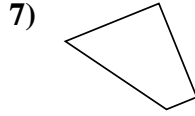
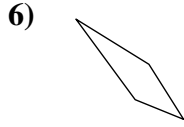
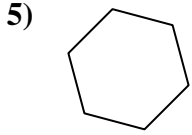
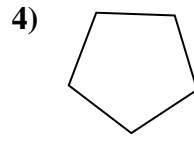
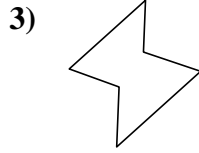
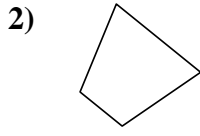
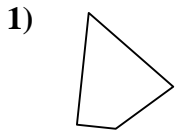
17)  18)  19)  20) 

Antworten

1. ja
2. ja
3. ja
4. ja
5. nein
6. ja
7. ja
8. ja
9. nein
10. ja
11. ja
12. nein
13. nein
14. nein
15. nein
16. nein
17. nein
18. ja
19. nein
20. nein



Stelle fest, ob die gezeigte Form viereckig ist (ja) oder nicht (nein).



Antworten

1. \_\_\_\_\_

2. \_\_\_\_\_

3. \_\_\_\_\_

4. \_\_\_\_\_

5. \_\_\_\_\_

6. \_\_\_\_\_

7. \_\_\_\_\_

8. \_\_\_\_\_

9. \_\_\_\_\_

10. \_\_\_\_\_

11. \_\_\_\_\_

12. \_\_\_\_\_

13. \_\_\_\_\_

14. \_\_\_\_\_

15. \_\_\_\_\_

16. \_\_\_\_\_

17. \_\_\_\_\_

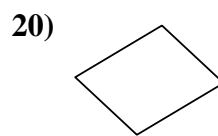
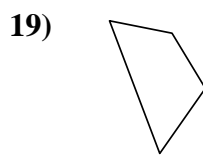
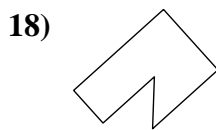
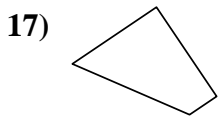
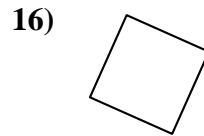
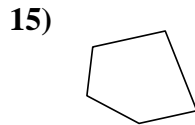
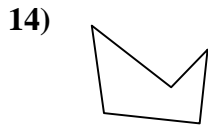
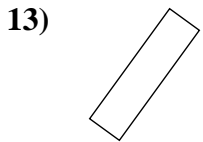
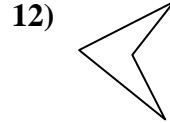
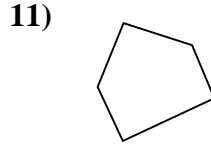
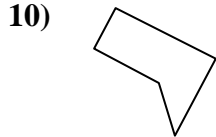
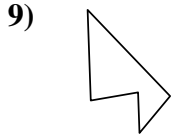
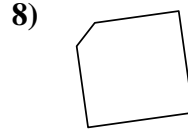
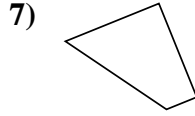
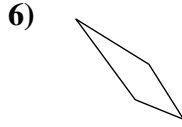
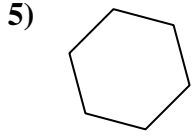
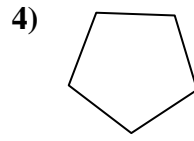
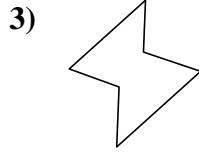
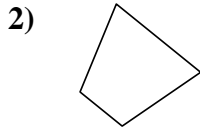
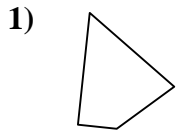
18. \_\_\_\_\_

19. \_\_\_\_\_

20. \_\_\_\_\_



Stelle fest, ob die gezeigte Form viereckig ist (ja) oder nicht (nein).



Antworten

1. ja

2. ja

3. nein

4. nein

5. nein

6. ja

7. ja

8. nein

9. nein

10. nein

11. nein

12. ja

13. ja

14. nein

15. nein

16. ja

17. ja

18. nein

19. ja

20. ja

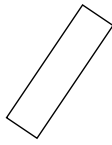


Stelle fest, ob die gezeigte Form viereckig ist (ja) oder nicht (nein).

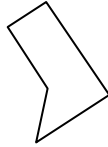
1)



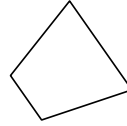
2)



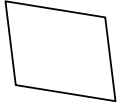
3)



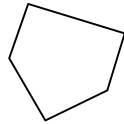
4)



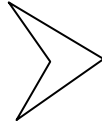
5)




6)



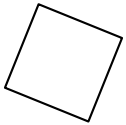
7)



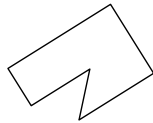
8)



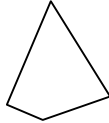
9)



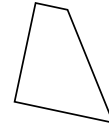
10)



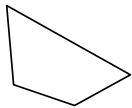
11)



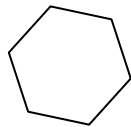
12)




13)



14)



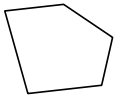
15)



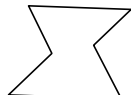
16)



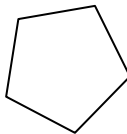
17)



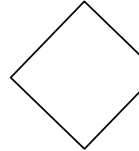
18)



19)



20)



Antworten

1. \_\_\_\_\_

2. \_\_\_\_\_

3. \_\_\_\_\_

4. \_\_\_\_\_

5. \_\_\_\_\_

6. \_\_\_\_\_

7. \_\_\_\_\_

8. \_\_\_\_\_

9. \_\_\_\_\_

10. \_\_\_\_\_

11. \_\_\_\_\_

12. \_\_\_\_\_

13. \_\_\_\_\_

14. \_\_\_\_\_

15. \_\_\_\_\_

16. \_\_\_\_\_

17. \_\_\_\_\_


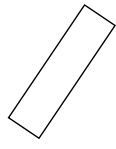
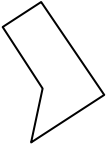
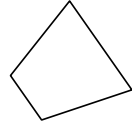
18. \_\_\_\_\_

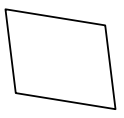
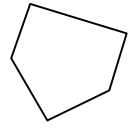
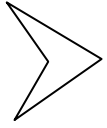

19. \_\_\_\_\_

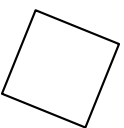
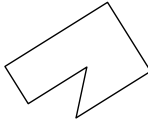
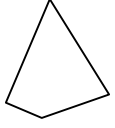
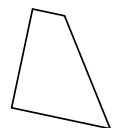
20. \_\_\_\_\_

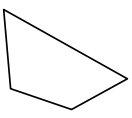
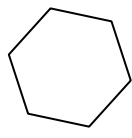




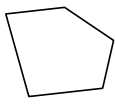
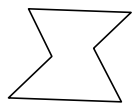
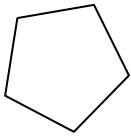
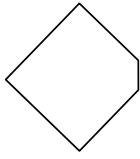
Stelle fest, ob die gezeigte Form viereckig ist (ja) oder nicht (nein).

1)  2)  3)  4) 

5)  6)  7)  8) 

9)  10)  11)  12) 

13)  14)  15)  16) 

17)  18)  19)  20) 

Antworten

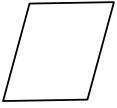
1. nein
2. ja
3. nein
4. ja
5. ja
6. nein
7. ja
8. ja
9. ja
10. nein
11. ja
12. ja
13. ja
14. nein
15. nein
16. ja
17. nein
18. nein
19. nein
20. nein



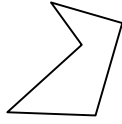


Stelle fest, ob die gezeigte Form viereckig ist (ja) oder nicht (nein).

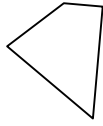
1)



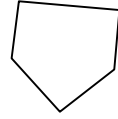
2)



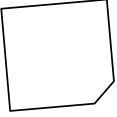
3)



4)



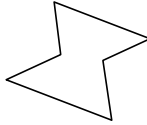
5)



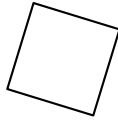
6)



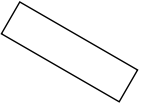
7)



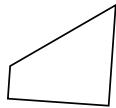
8)



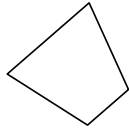
9)



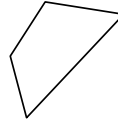
10)



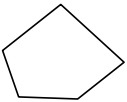
11)



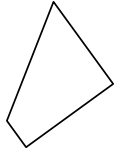
12)



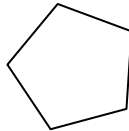
13)



14)



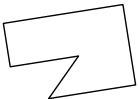
15)



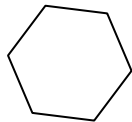
16)



17)



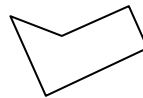
18)



19)



20)



Antworten

1. \_\_\_\_\_

2. \_\_\_\_\_

3. \_\_\_\_\_

4. \_\_\_\_\_

5. \_\_\_\_\_

6. \_\_\_\_\_

7. \_\_\_\_\_

8. \_\_\_\_\_

9. \_\_\_\_\_

10. \_\_\_\_\_

11. \_\_\_\_\_

12. \_\_\_\_\_

13. \_\_\_\_\_

14. \_\_\_\_\_

15. \_\_\_\_\_

16. \_\_\_\_\_

17. \_\_\_\_\_

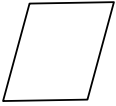
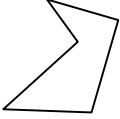
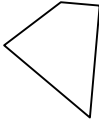
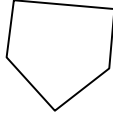
18. \_\_\_\_\_

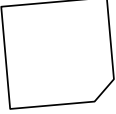

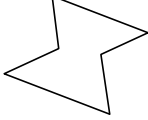
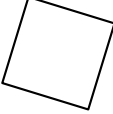
19. \_\_\_\_\_

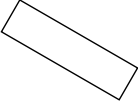
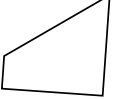
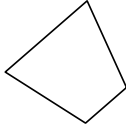
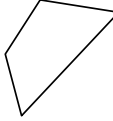
20. \_\_\_\_\_

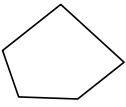
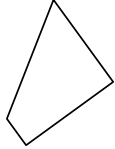
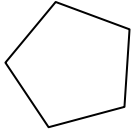







Stelle fest, ob die gezeigte Form viereckig ist (ja) oder nicht (nein).

1)  2)  3)  4) 

5)  6)  7)  8) 

9)  10)  11)  12) 

13)  14)  15)  16) 

17)  18)  19)  20) 

Antworten

1. ja
2. nein
3. ja
4. nein
5. nein
6. ja
7. nein
8. ja
9. ja
10. ja
11. ja
12. ja
13. nein
14. ja
15. nein
16. nein
17. nein
18. nein
19. ja
20. nein



Stelle fest, ob die gezeigte Form viereckig ist (ja) oder nicht (nein).

- 1)
- 2)
- 3)
- 4)
- 5)
- 6)
- 7)
- 8)
- 9)
- 10)
- 11)
- 12)
- 13)
- 14)
- 15)
- 16)
- 17)
- 18)
- 19)
- 20)

Antworten

- 1. \_\_\_\_\_
- 2. \_\_\_\_\_
- 3. \_\_\_\_\_
- 4. \_\_\_\_\_
- 5. \_\_\_\_\_
- 6. \_\_\_\_\_
- 7. \_\_\_\_\_
- 8. \_\_\_\_\_
- 9. \_\_\_\_\_
- 10. \_\_\_\_\_
- 11. \_\_\_\_\_
- 12. \_\_\_\_\_
- 13. \_\_\_\_\_
- 14. \_\_\_\_\_
- 15. \_\_\_\_\_
- 16. \_\_\_\_\_
- 17. \_\_\_\_\_
- 18. \_\_\_\_\_
- 19. \_\_\_\_\_
- 20. \_\_\_\_\_



Stelle fest, ob die gezeigte Form viereckig ist (ja) oder nicht (nein).

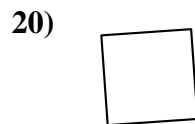
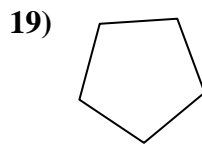
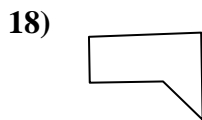
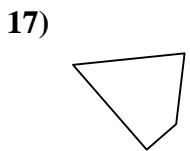
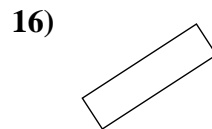
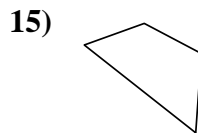
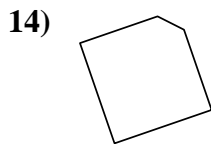
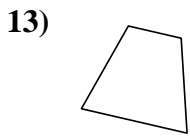
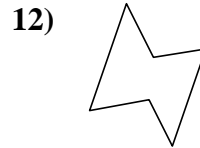
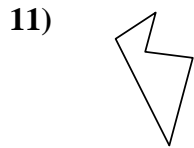
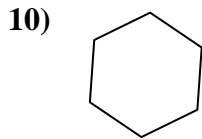
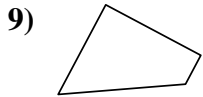
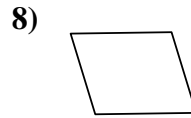
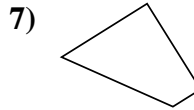
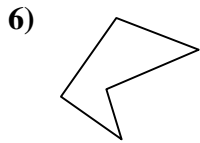
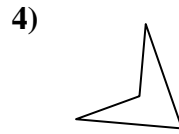
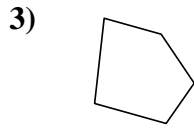
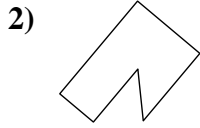
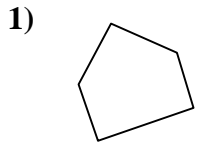
1) 2) 3) 4) 5) 6) 7) 8) 9) 10) 11) 12) 13) 14) 15) 16) 17) 18) 19) 20)

Antworten

1. nein
2. nein
3. nein
4. ja
5. ja
6. ja
7. ja
8. ja
9. nein
10. ja
11. nein
12. nein
13. nein
14. ja
15. ja
16. ja
17. nein
18. nein
19. ja
20. nein



Stelle fest, ob die gezeigte Form viereckig ist (ja) oder nicht (nein).



Antworten

1. \_\_\_\_\_

2. \_\_\_\_\_

3. \_\_\_\_\_

4. \_\_\_\_\_

5. \_\_\_\_\_

6. \_\_\_\_\_

7. \_\_\_\_\_

8. \_\_\_\_\_

9. \_\_\_\_\_

10. \_\_\_\_\_

11. \_\_\_\_\_

12. \_\_\_\_\_

13. \_\_\_\_\_

14. \_\_\_\_\_

15. \_\_\_\_\_

16. \_\_\_\_\_

17. \_\_\_\_\_

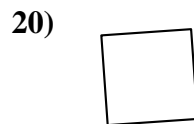
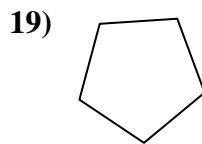
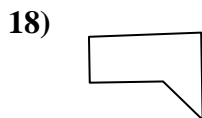
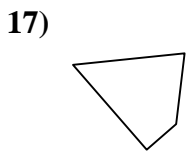
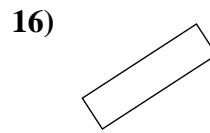
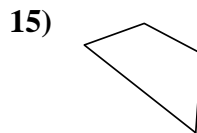
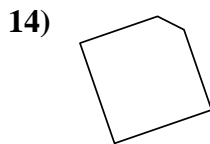
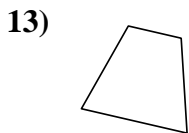
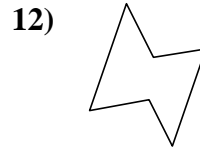
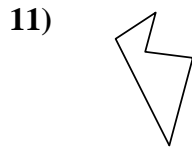
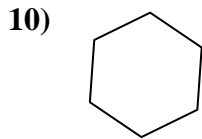
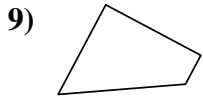
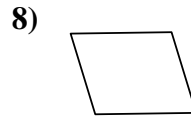
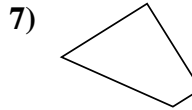
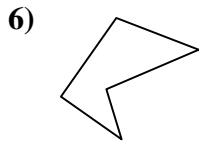
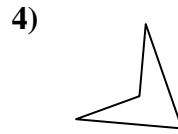
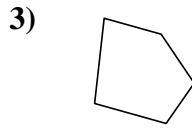
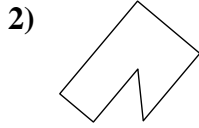
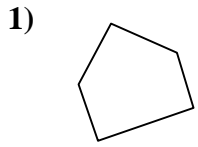
18. \_\_\_\_\_

19. \_\_\_\_\_

20. \_\_\_\_\_



Stelle fest, ob die gezeigte Form viereckig ist (ja) oder nicht (nein).



Antworten

1. nein

2. nein

3. nein

4. ja

5. ja

6. nein

7. ja

8. ja

9. ja

10. nein

11. nein

12. nein

13. ja

14. nein

15. ja

16. ja

17. ja

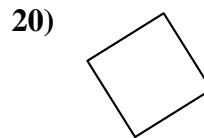
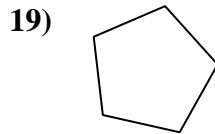
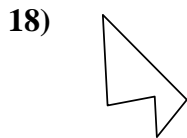
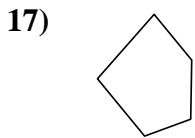
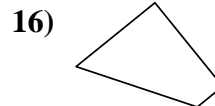
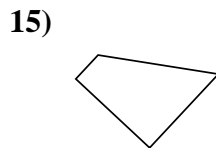
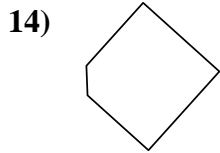
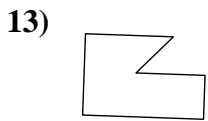
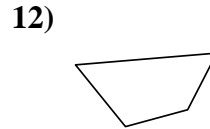
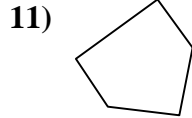
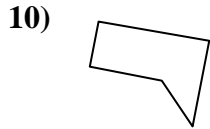
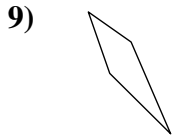
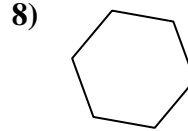
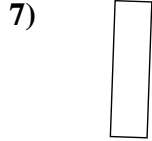
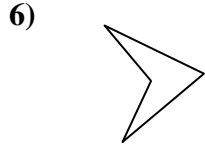

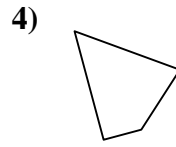
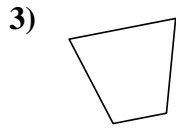
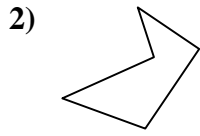
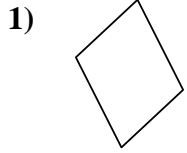
18. nein

19. nein

20. ja



Stelle fest, ob die gezeigte Form viereckig ist (ja) oder nicht (nein).



Antworten

1. \_\_\_\_\_

2. \_\_\_\_\_

3. \_\_\_\_\_

4. \_\_\_\_\_

5. \_\_\_\_\_

6. \_\_\_\_\_

7. \_\_\_\_\_

8. \_\_\_\_\_

9. \_\_\_\_\_

10. \_\_\_\_\_

11. \_\_\_\_\_

12. \_\_\_\_\_

13. \_\_\_\_\_

14. \_\_\_\_\_

15. \_\_\_\_\_

16. \_\_\_\_\_

17. \_\_\_\_\_

18. \_\_\_\_\_

19. \_\_\_\_\_

20. \_\_\_\_\_



Stelle fest, ob die gezeigte Form viereckig ist (ja) oder nicht (nein).

1) 2) 3) 4) 5) 6) 7) 8) 9) 10) 11) 12) 13) 14) 15) 16) 17) 18) 19) 20)

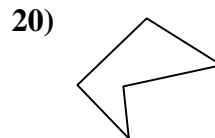

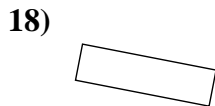
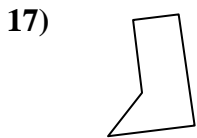
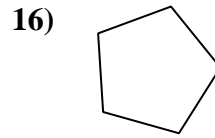
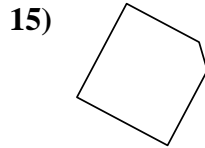
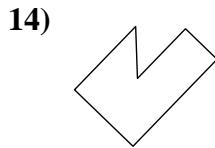
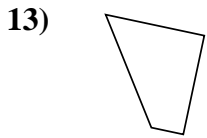
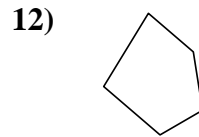
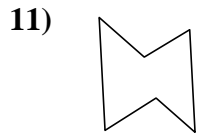
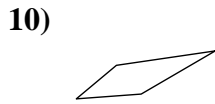
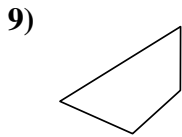
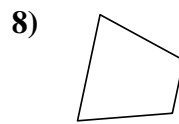
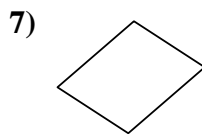
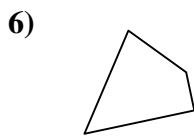
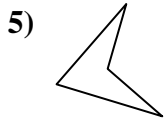
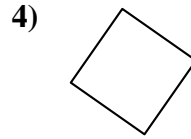
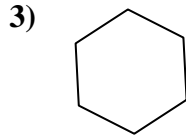
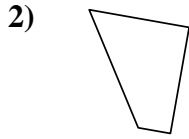
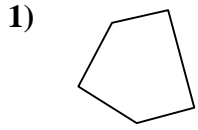
Antworten

1. ja
2. nein
3. ja
4. ja
5. nein
6. ja
7. ja
8. nein
9. ja
10. nein
11. nein
12. ja
13. nein
14. nein
15. ja
16. ja
17. nein
18. nein
19. nein
20. ja





Stelle fest, ob die gezeigte Form viereckig ist (ja) oder nicht (nein).



Antworten

1. \_\_\_\_\_

2. \_\_\_\_\_

3. \_\_\_\_\_

4. \_\_\_\_\_

5. \_\_\_\_\_

6. \_\_\_\_\_

7. \_\_\_\_\_

8. \_\_\_\_\_

9. \_\_\_\_\_

10. \_\_\_\_\_

11. \_\_\_\_\_

12. \_\_\_\_\_

13. \_\_\_\_\_

14. \_\_\_\_\_

15. \_\_\_\_\_

16. \_\_\_\_\_

17. \_\_\_\_\_

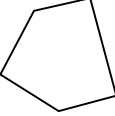
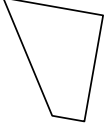
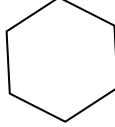
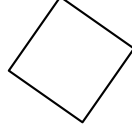
18. \_\_\_\_\_

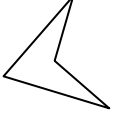
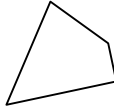
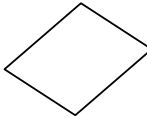
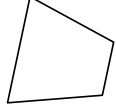
19. \_\_\_\_\_

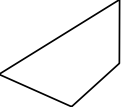


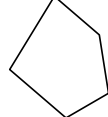
20. \_\_\_\_\_

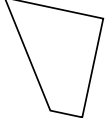
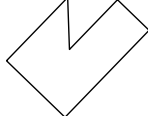
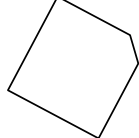
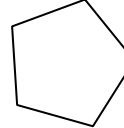





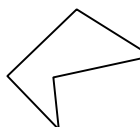
Stelle fest, ob die gezeigte Form viereckig ist (ja) oder nicht (nein).

1)  2)  3)  4) 

5)  6)  7)  8) 

9)  10)  11)  12) 

13)  14)  15)  16) 

17)  18)  19)  20) 

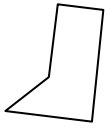
Antworten

1. nein
2. ja
3. nein
4. ja
5. ja
6. ja
7. ja
8. ja
9. ja
10. ja
11. nein
12. nein
13. ja
14. nein
15. nein
16. nein
17. nein
18. ja
19. nein
20. nein



Stelle fest, ob die gezeigte Form viereckig ist (ja) oder nicht (nein).

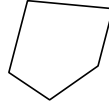
1)



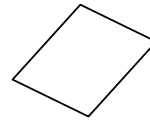
2)



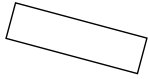
3)



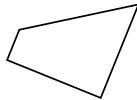
4)



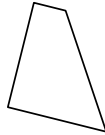
5)



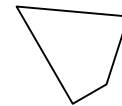
6)



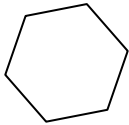
7)




8)



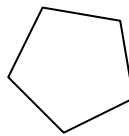
9)



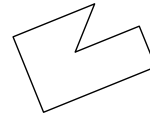
10)



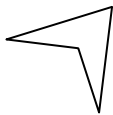
11)



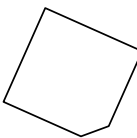
12)




13)



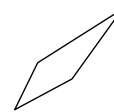
14)



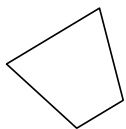
15)




16)



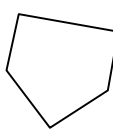
17)



18)



19)



20)



Antworten

1. \_\_\_\_\_

2. \_\_\_\_\_

3. \_\_\_\_\_

4. \_\_\_\_\_

5. \_\_\_\_\_

6. \_\_\_\_\_

7. \_\_\_\_\_

8. \_\_\_\_\_

9. \_\_\_\_\_

10. \_\_\_\_\_

11. \_\_\_\_\_

12. \_\_\_\_\_

13. \_\_\_\_\_

14. \_\_\_\_\_

15. \_\_\_\_\_

16. \_\_\_\_\_

17. \_\_\_\_\_

18. \_\_\_\_\_

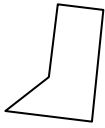
19. \_\_\_\_\_

20. \_\_\_\_\_



Stelle fest, ob die gezeigte Form viereckig ist (ja) oder nicht (nein).

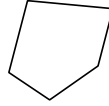
1)



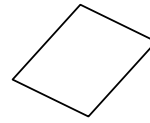
2)



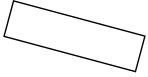
3)



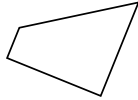
4)



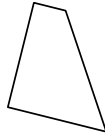
5)



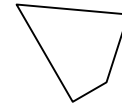
6)



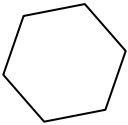
7)



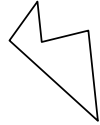
8)



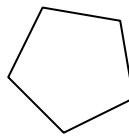
9)



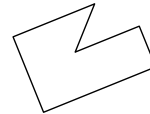
10)



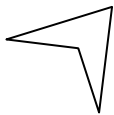
11)



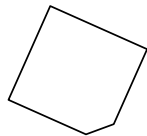
12)




13)



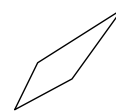
14)



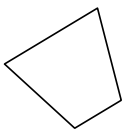
15)




16)



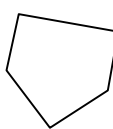
17)



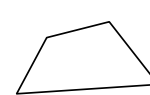
18)



19)



20)



Antworten

1. nein

2. nein

3. nein

4. ja

5. ja

6. ja

7. ja

8. ja

9. nein

10. nein

11. nein

12. nein

13. ja

14. nein

15. ja

16. ja

17. ja

18. nein

19. nein

20. ja