

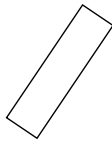


Stelle fest, ob die gezeigte Form viereckig ist (ja) oder nicht (nein).

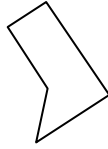
1)



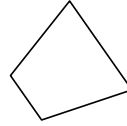
2)



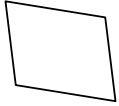
3)



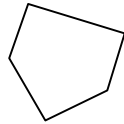
4)



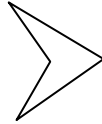
5)



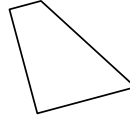
6)



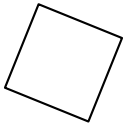
7)



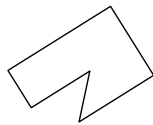
8)



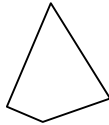
9)



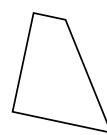
10)



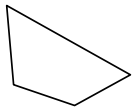
11)



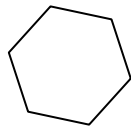
12)




13)



14)



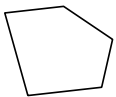
15)



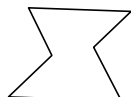
16)



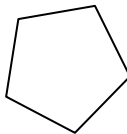
17)



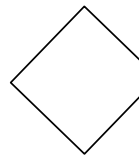
18)



19)



20)



Antworten

1. _____

2. _____

3. _____

4. _____

5. _____

6. _____

7. _____

8. _____

9. _____

10. _____

11. _____

12. _____

13. _____

14. _____

15. _____

16. _____

17. _____

18. _____

19. _____

20. _____

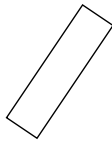


Stelle fest, ob die gezeigte Form viereckig ist (ja) oder nicht (nein).

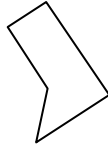
1)



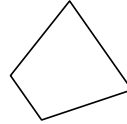
2)



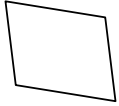
3)



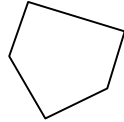
4)



5)



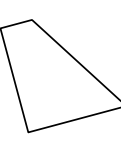
6)



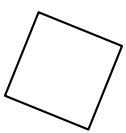
7)



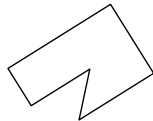
8)



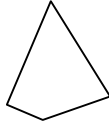
9)



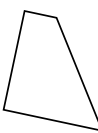
10)



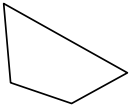
11)



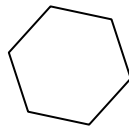
12)




13)



14)



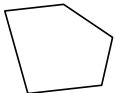
15)



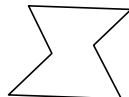
16)



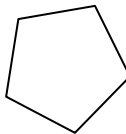
17)



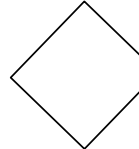
18)



19)



20)



Antworten

1. nein

2. ja

3. nein

4. ja

5. ja

6. nein

7. ja

8. ja

9. ja

10. nein

11. ja

12. ja

13. ja

14. nein

15. nein

16. ja

17. nein

18. nein

19. nein

20. nein