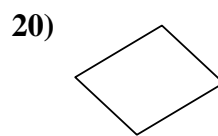
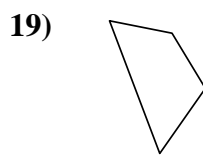
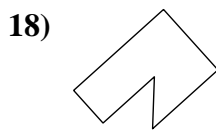
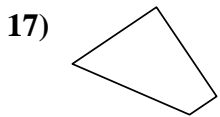
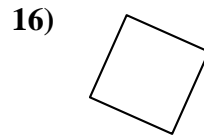
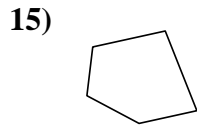
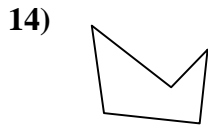
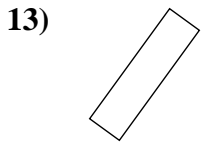
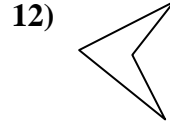
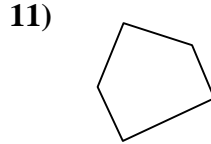
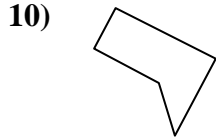
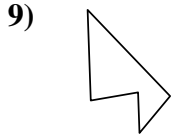
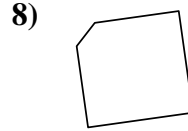
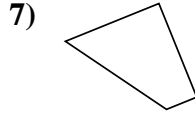
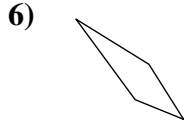
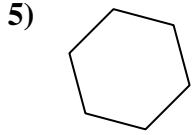
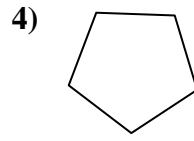
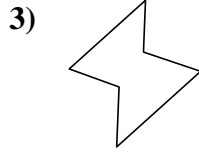
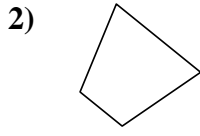
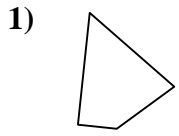




Stelle fest, ob die gezeigte Form viereckig ist (ja) oder nicht (nein).



Antworten

1. \_\_\_\_\_

2. \_\_\_\_\_

3. \_\_\_\_\_

4. \_\_\_\_\_

5. \_\_\_\_\_

6. \_\_\_\_\_

7. \_\_\_\_\_

8. \_\_\_\_\_

9. \_\_\_\_\_

10. \_\_\_\_\_

11. \_\_\_\_\_

12. \_\_\_\_\_

13. \_\_\_\_\_

14. \_\_\_\_\_

15. \_\_\_\_\_

16. \_\_\_\_\_

17. \_\_\_\_\_

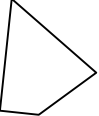
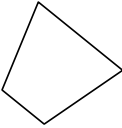

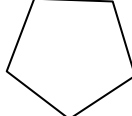
18. \_\_\_\_\_

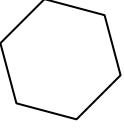

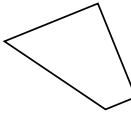
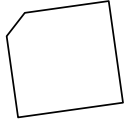
19. \_\_\_\_\_

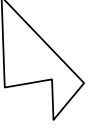
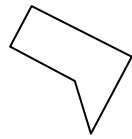
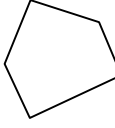
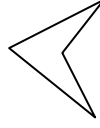
20. \_\_\_\_\_

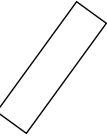
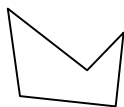
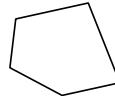
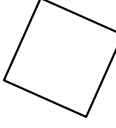


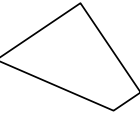
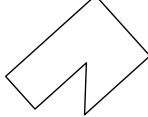

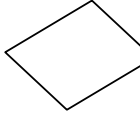
Stelle fest, ob die gezeigte Form viereckig ist (ja) oder nicht (nein).

1)  2)  3)  4) 

5)  6)  7)  8) 

9)  10)  11)  12) 

13)  14)  15)  16) 

17)  18)  19)  20) 

Antworten

- 1. ja
- 2. ja
- 3. nein
- 4. nein
- 5. nein
- 6. ja
- 7. ja
- 8. nein
- 9. nein
- 10. nein
- 11. nein
- 12. ja
- 13. ja
- 14. nein
- 15. nein
- 16. ja
- 17. ja
- 18. nein
- 19. ja
- 20. ja