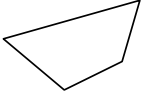


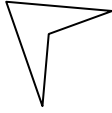


Stelle fest, ob die gezeigte Form viereckig ist (ja) oder nicht (nein).

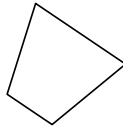
1)



2)



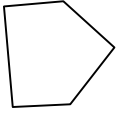
3)



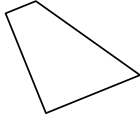
4)



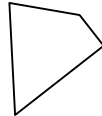
5)



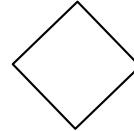
6)



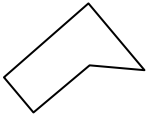
7)



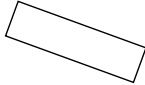
8)



9)



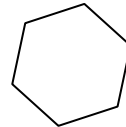
10)



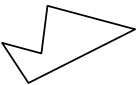
11)




12)



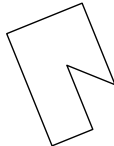
13)



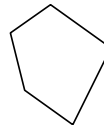
14)



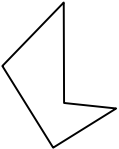
15)



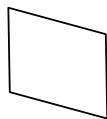
16)



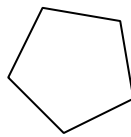
17)



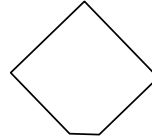
18)



19)



20)



Antworten

1. _____

2. _____

3. _____

4. _____

5. _____

6. _____

7. _____

8. _____

9. _____

10. _____

11. _____

12. _____

13. _____

14. _____

15. _____

16. _____

17. _____

18. _____

19. _____

20. _____



Stelle fest, ob die gezeigte Form viereckig ist (ja) oder nicht (nein).

1) 2) 3) 4) 5) 6) 7) 8) 9) 10) 11) 12) 13) 14) 15) 16) 17) 18) 19) 20)

Antworten

1. ja
2. ja
3. ja
4. ja
5. nein
6. ja
7. ja
8. ja
9. nein
10. ja
11. ja
12. nein
13. nein
14. nein
15. nein
16. nein
17. nein
18. ja
19. nein
20. nein