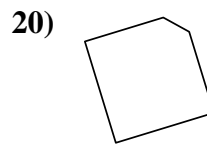
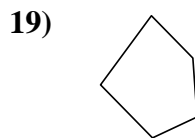
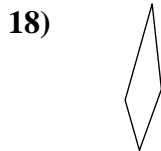
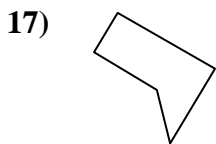
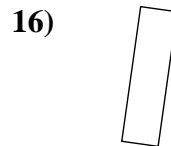
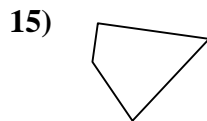
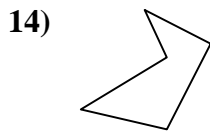
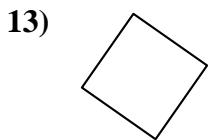
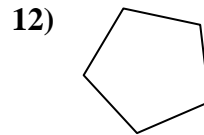
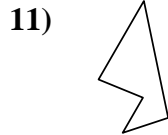
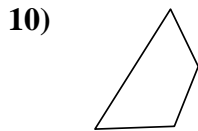
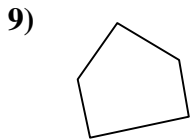
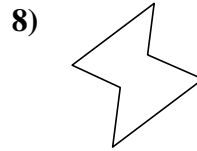
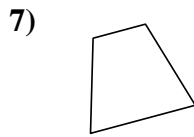
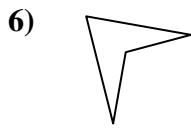
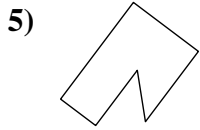
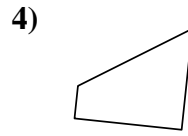
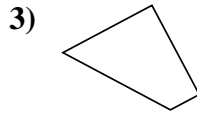
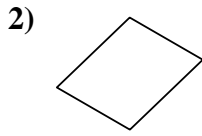
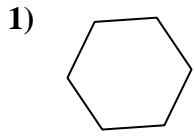




Stelle fest, ob die gezeigte Form viereckig ist (ja) oder nicht (nein).



Antworten

1. _____

2. _____

3. _____

4. _____

5. _____

6. _____

7. _____

8. _____

9. _____

10. _____

11. _____

12. _____

13. _____

14. _____

15. _____

16. _____

17. _____


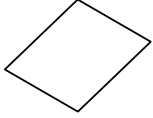
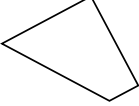
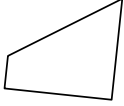
18. _____

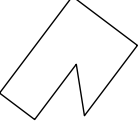



19. _____

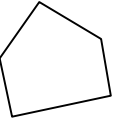
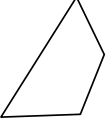

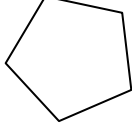
20. _____

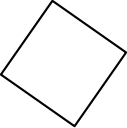
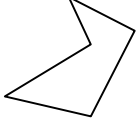
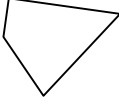



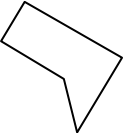

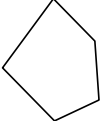
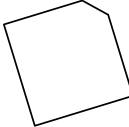
Stelle fest, ob die gezeigte Form viereckig ist (ja) oder nicht (nein).

1)  2)  3)  4) 

5)  6)  7)  8) 

9)  10)  11)  12) 

13)  14)  15)  16) 

17)  18)  19)  20) 

Antworten

1. nein
2. ja
3. ja
4. ja
5. nein
6. ja
7. ja
8. nein
9. nein
10. ja
11. nein
12. nein
13. ja
14. nein
15. ja
16. ja
17. nein
18. ja
19. nein
20. nein