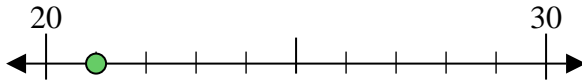




Benutze den Zahlenstrahl um jede Zahl auf die nächste Zehnerstelle zu runden.

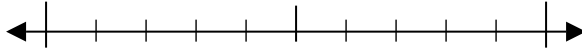
Bsp) 21



Antworten

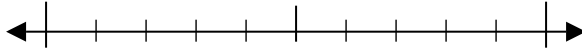
Bsp. 20

1) 95



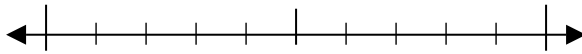
1. _____

2) 25



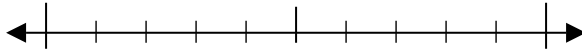
2. _____

3) 28



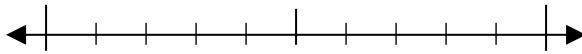
3. _____

4) 61



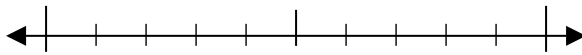
4. _____

5) 280



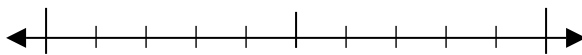
5. _____

6) 569



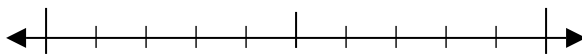
6. _____

7) 409



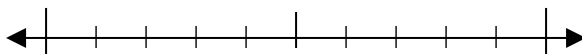
7. _____

8) 613



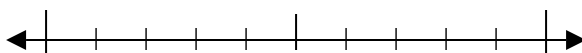
8. _____

9) 9.524



9. _____

10) 8.319

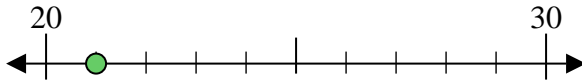


10. _____



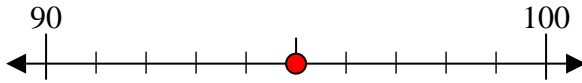
Benutze den Zahlenstrahl um jede Zahl auf die nächste Zehnerstelle zu runden.

Bsp) 21



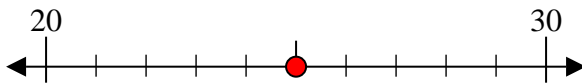
Antworten
Bsp. 20

1) 95



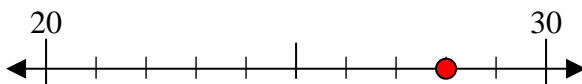
1. 100

2) 25



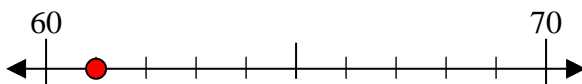
2. 30

3) 28



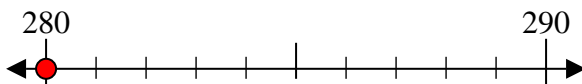
3. 30

4) 61



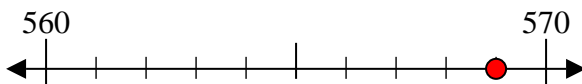
4. 60

5) 280



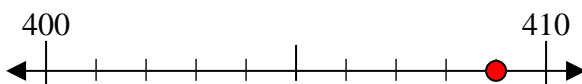
5. 280

6) 569



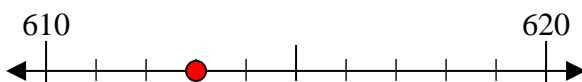
6. 570

7) 409



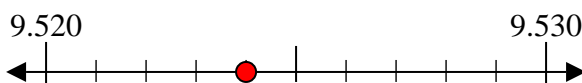
7. 410

8) 613



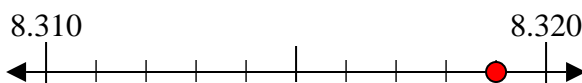
8. 610

9) 9.524



9. 9.520

10) 8.319

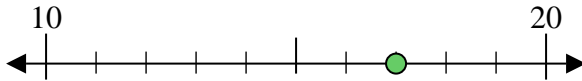


10. 8.320



Benutze den Zahlenstrahl um jede Zahl auf die nächste Zehnerstelle zu runden.

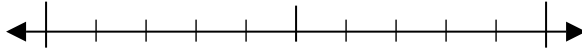
Bsp) 17



Antworten

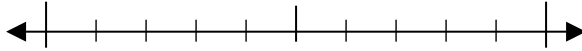
Bsp. 20

1) 24



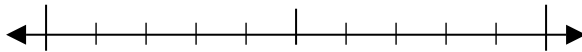
1. _____

2) 11



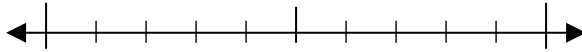
2. _____

3) 89



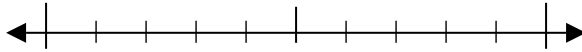
3. _____

4) 83



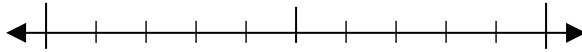
4. _____

5) 464



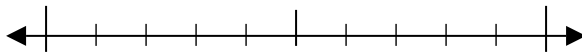
5. _____

6) 563



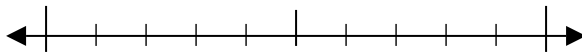
6. _____

7) 541



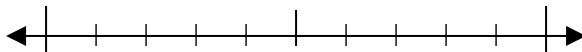
7. _____

8) 113



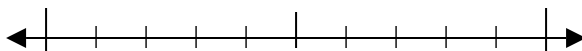
8. _____

9) 8.779



9. _____

10) 6.946

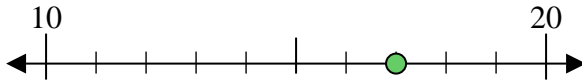


10. _____



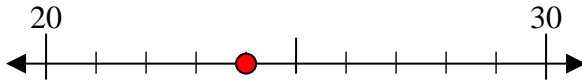
Benutze den Zahlenstrahl um jede Zahl auf die nächste Zehnerstelle zu runden.

Bsp) 17



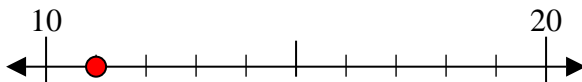
Antworten
Bsp. 20

1) 24



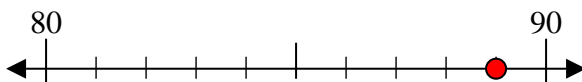
1. 20

2) 11



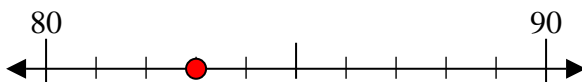
2. 10

3) 89



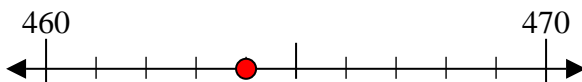
3. 90

4) 83



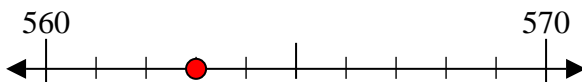
4. 80

5) 464



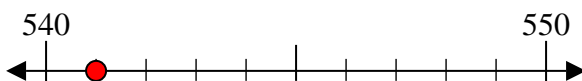
5. 460

6) 563



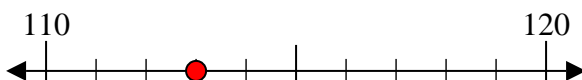
6. 560

7) 541



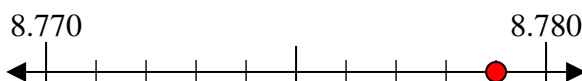
7. 540

8) 113



8. 110

9) 8.779



9. 8.780

10) 6.946

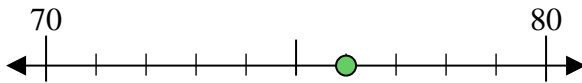


10. 6.950



Benutze den Zahlenstrahl um jede Zahl auf die nächste Zehnerstelle zu runden.

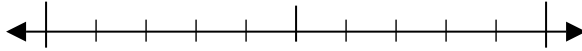
Bsp) 76



Antworten

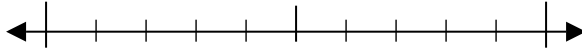
Bsp. 80

1) 48



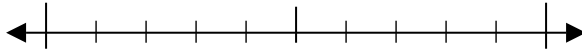
1. _____

2) 62



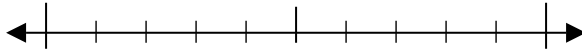
2. _____

3) 62



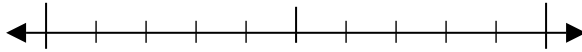
3. _____

4) 70



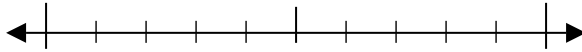
4. _____

5) 709



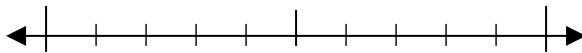
5. _____

6) 447



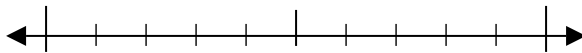
6. _____

7) 474



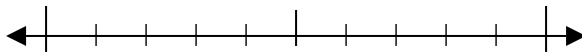
7. _____

8) 985



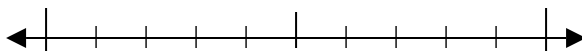
8. _____

9) 6.818



9. _____

10) 1.509

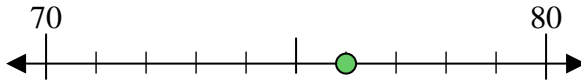


10. _____

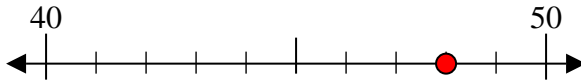


Benutze den Zahlenstrahl um jede Zahl auf die nächste Zehnerstelle zu runden.

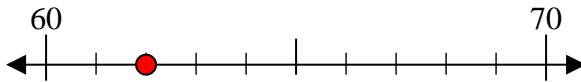
Bsp) 76

AntwortenBsp. 80

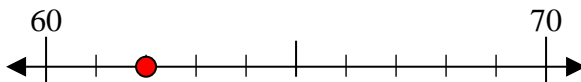
1) 48

1. 50

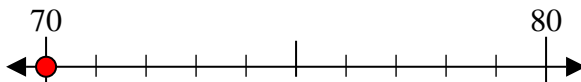
2) 62

2. 60

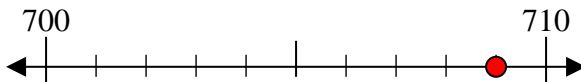
3) 62

3. 60

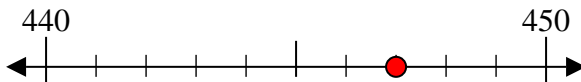
4) 70

4. 70

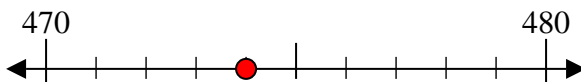
5) 709

5. 710

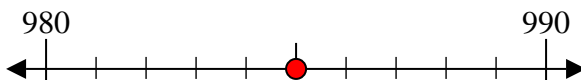
6) 447

6. 450

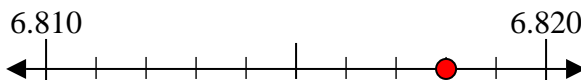
7) 474

7. 470

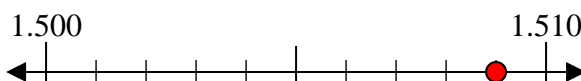
8) 985

8. 990

9) 6.818

9. 6.820

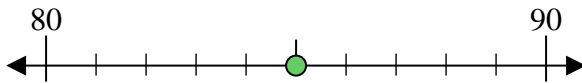
10) 1.509

10. 1.510



Benutze den Zahlenstrahl um jede Zahl auf die nächste Zehnerstelle zu runden.

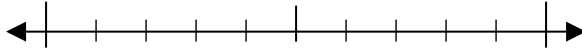
Bsp) 85



Antworten

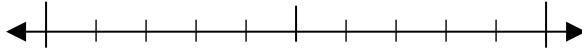
Bsp. 90

1) 29



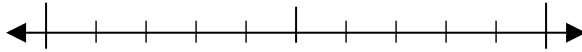
1. _____

2) 46



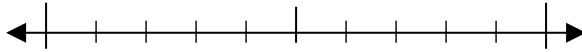
2. _____

3) 94



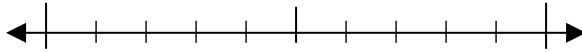
3. _____

4) 70



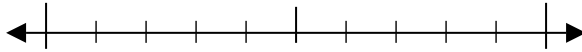
4. _____

5) 864



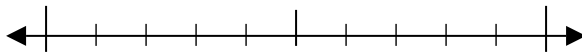
5. _____

6) 546



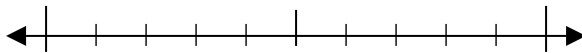
6. _____

7) 339



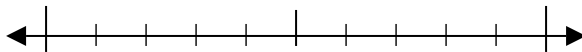
7. _____

8) 688



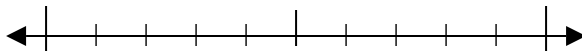
8. _____

9) 7.752



9. _____

10) 9.901

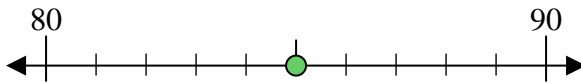


10. _____



Benutze den Zahlenstrahl um jede Zahl auf die nächste Zehnerstelle zu runden.

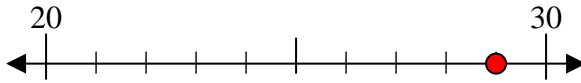
Bsp) 85



Antworten

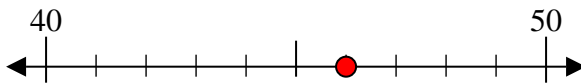
Bsp. 90

1) 29



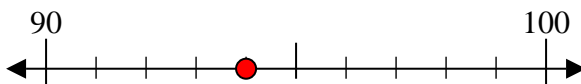
1. 30

2) 46



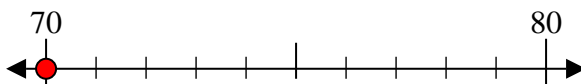
2. 50

3) 94



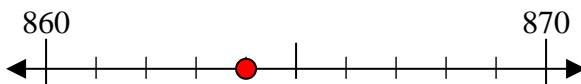
3. 90

4) 70



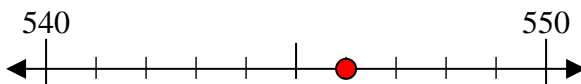
4. 70

5) 864



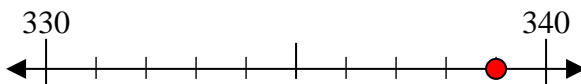
5. 860

6) 546



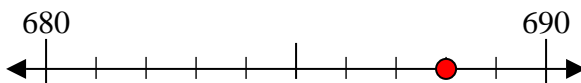
6. 550

7) 339



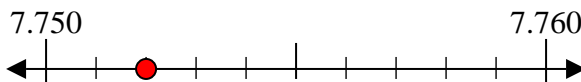
7. 340

8) 688



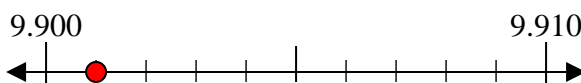
8. 690

9) 7.752



9. 7.750

10) 9.901

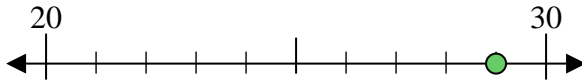


10. 9.900



Benutze den Zahlenstrahl um jede Zahl auf die nächste Zehnerstelle zu runden.

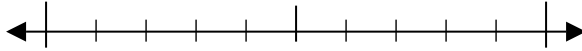
Bsp) 29



Antworten

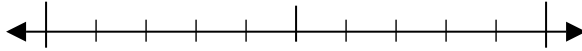
Bsp. 30

1) 29



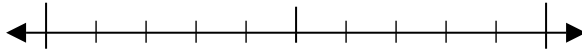
1. _____

2) 86



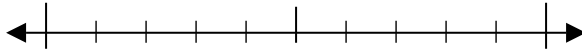
2. _____

3) 60



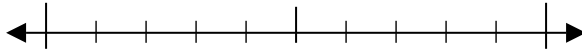
3. _____

4) 97



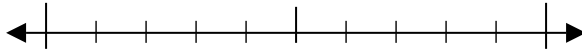
4. _____

5) 187



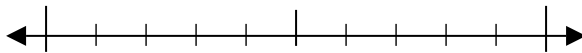
5. _____

6) 372



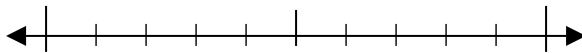
6. _____

7) 123



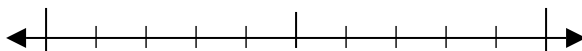
7. _____

8) 814



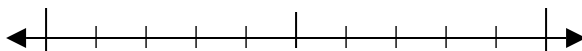
8. _____

9) 9.790



9. _____

10) 5.860

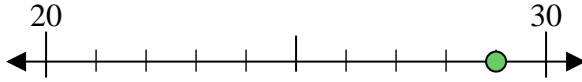


10. _____

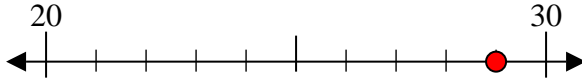


Benutze den Zahlenstrahl um jede Zahl auf die nächste Zehnerstelle zu runden.

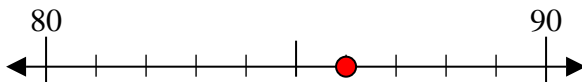
Bsp) 29



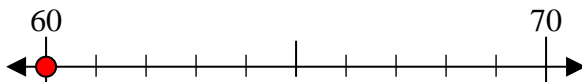
1) 29



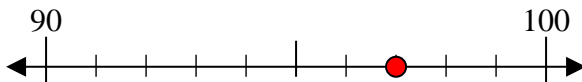
2) 86



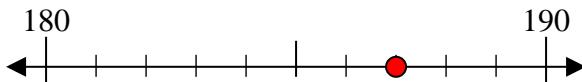
3) 60



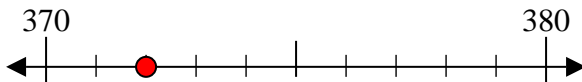
4) 97



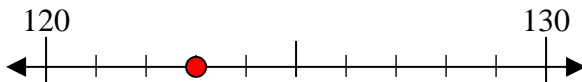
5) 187



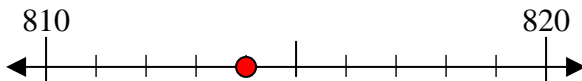
6) 372



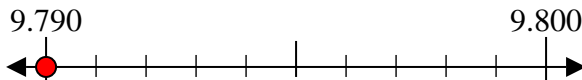
7) 123



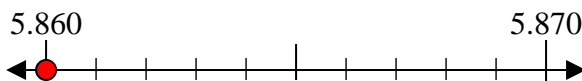
8) 814



9) 9.790



10) 5.860



Antworten

Bsp. 30

1. 30

2. 90

3. 60

4. 100

5. 190

6. 370

7. 120

8. 810

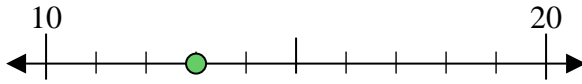
9. 9.790

10. 5.860



Benutze den Zahlenstrahl um jede Zahl auf die nächste Zehnerstelle zu runden.

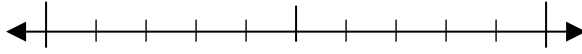
Bsp) 13



Antworten

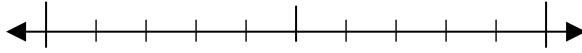
Bsp. 10

1) 63



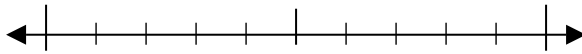
1. _____

2) 42



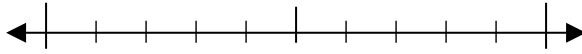
2. _____

3) 32



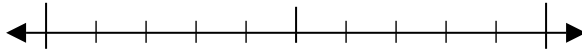
3. _____

4) 60



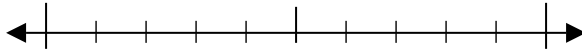
4. _____

5) 271



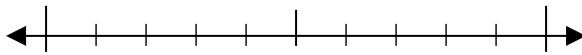
5. _____

6) 646



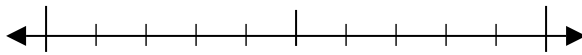
6. _____

7) 802



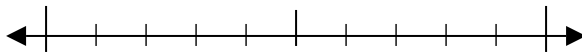
7. _____

8) 115



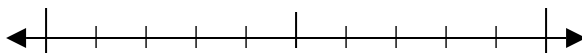
8. _____

9) 7.481



9. _____

10) 2.220

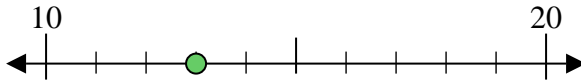


10. _____

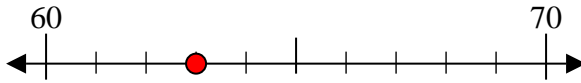


Benutze den Zahlenstrahl um jede Zahl auf die nächste Zehnerstelle zu runden.

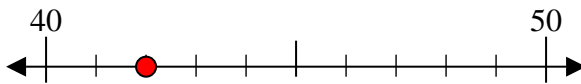
Bsp) 13



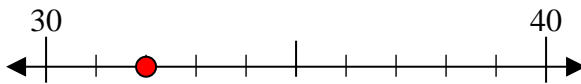
1) 63



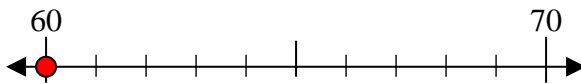
2) 42



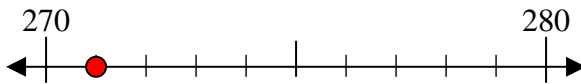
3) 32



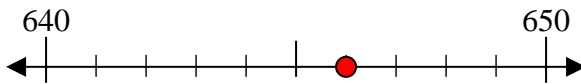
4) 60



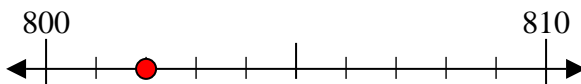
5) 271



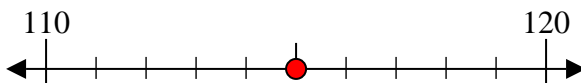
6) 646



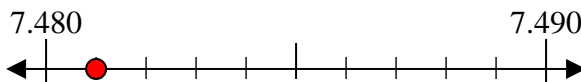
7) 802



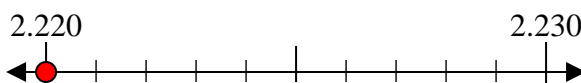
8) 115



9) 7.481



10) 2.220



Antworten

Bsp. 10

1. 60

2. 40

3. 30

4. 60

5. 270

6. 650

7. 800

8. 120

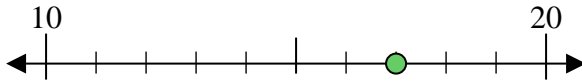
9. 7.480

10. 2.220



Benutze den Zahlenstrahl um jede Zahl auf die nächste Zehnerstelle zu runden.

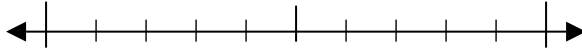
Bsp) 17



Antworten

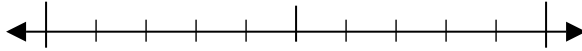
Bsp. 20

1) 30



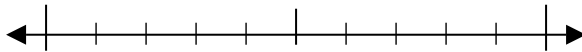
1. _____

2) 76



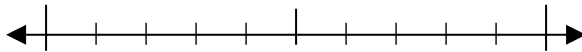
2. _____

3) 37



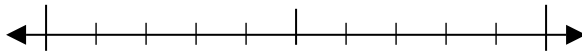
3. _____

4) 56



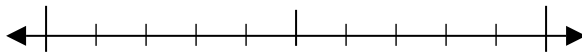
4. _____

5) 767



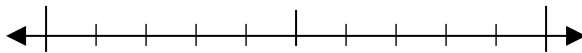
5. _____

6) 823



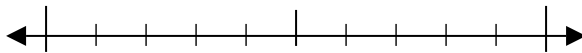
6. _____

7) 958



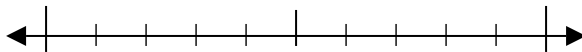
7. _____

8) 127



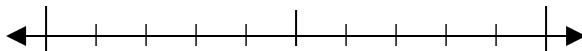
8. _____

9) 2.970



9. _____

10) 8.155

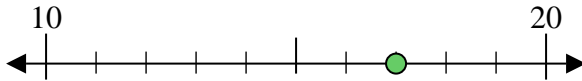


10. _____

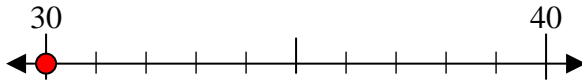


Benutze den Zahlenstrahl um jede Zahl auf die nächste Zehnerstelle zu runden.

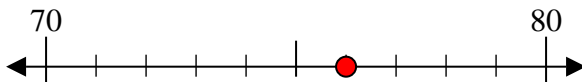
Bsp) 17



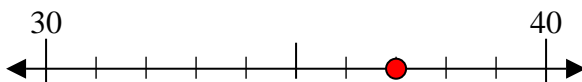
1) 30



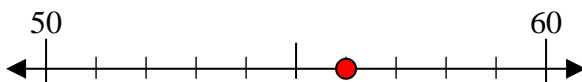
2) 76



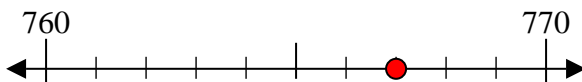
3) 37



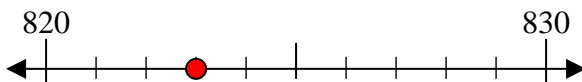
4) 56



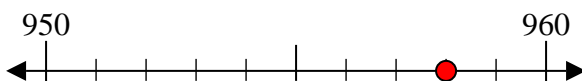
5) 767



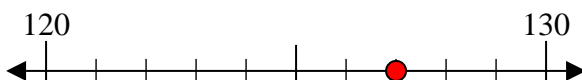
6) 823



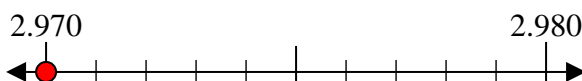
7) 958



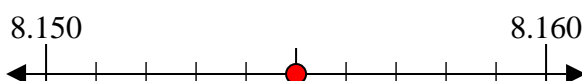
8) 127



9) 2.970



10) 8.155



Antworten

Bsp. 20

1. 30

2. 80

3. 40

4. 60

5. 770

6. 820

7. 960

8. 130

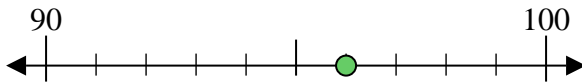
9. 2.970

10. 8.160



Benutze den Zahlenstrahl um jede Zahl auf die nächste Zehnerstelle zu runden.

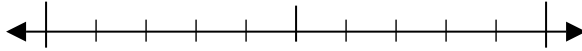
Bsp) 96



Antworten

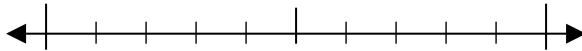
Bsp. 100

1) 95



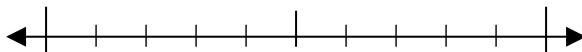
1. _____

2) 44



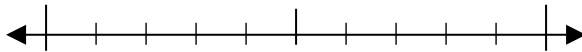
2. _____

3) 74



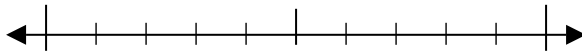
3. _____

4) 34



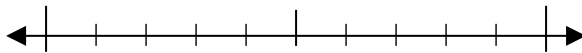
4. _____

5) 512



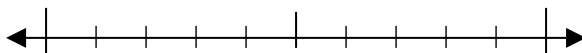
5. _____

6) 217



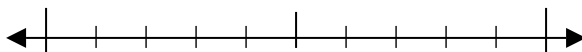
6. _____

7) 609



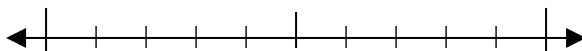
7. _____

8) 897



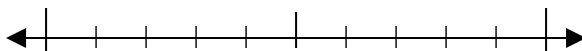
8. _____

9) 8.247



9. _____

10) 4.436

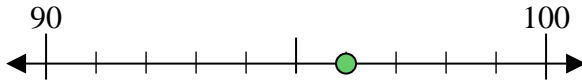


10. _____

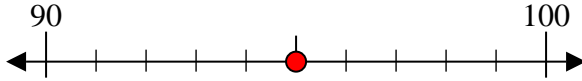


Benutze den Zahlenstrahl um jede Zahl auf die nächste Zehnerstelle zu runden.

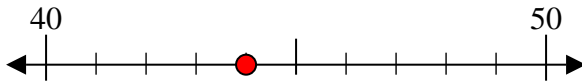
Bsp) 96



1) 95



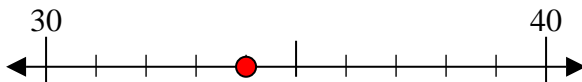
2) 44



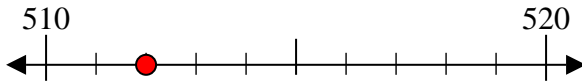
3) 74



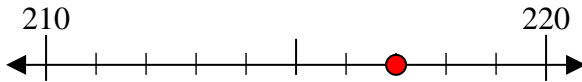
4) 34



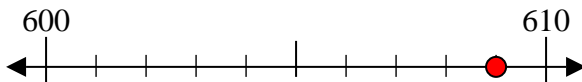
5) 512



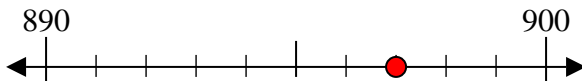
6) 217



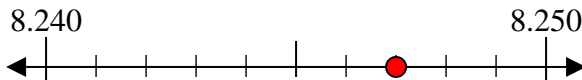
7) 609



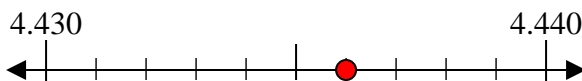
8) 897



9) 8.247



10) 4.436



Antworten

Bsp. 100

1. 100

2. 40

3. 70

4. 30

5. 510

6. 220

7. 610

8. 900

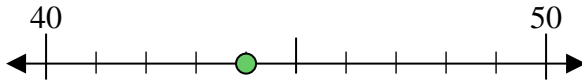
9. 8.250

10. 4.440



Benutze den Zahlenstrahl um jede Zahl auf die nächste Zehnerstelle zu runden.

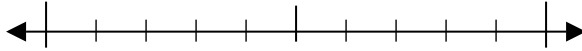
Bsp) 44



Antworten

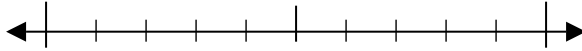
Bsp. 40

1) 86



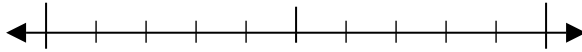
1. _____

2) 58



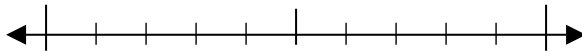
2. _____

3) 51



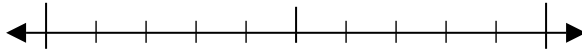
3. _____

4) 85



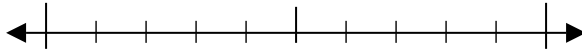
4. _____

5) 452



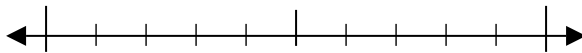
5. _____

6) 928



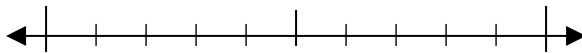
6. _____

7) 533



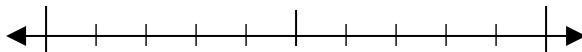
7. _____

8) 304



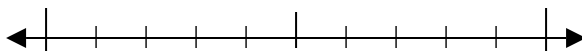
8. _____

9) 2.391



9. _____

10) 8.675

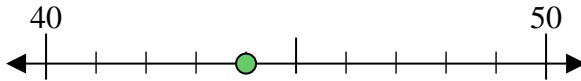


10. _____

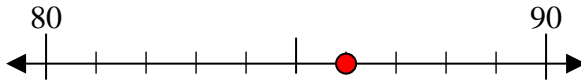


Benutze den Zahlenstrahl um jede Zahl auf die nächste Zehnerstelle zu runden.

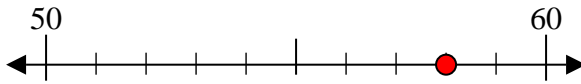
Bsp) 44

AntwortenBsp. 40

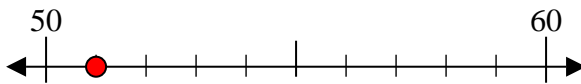
1) 86

1. 90

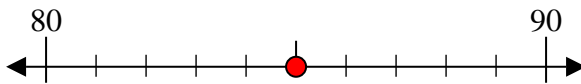
2) 58

2. 60

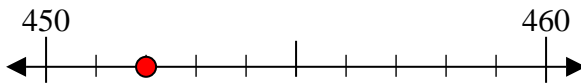
3) 51

3. 50

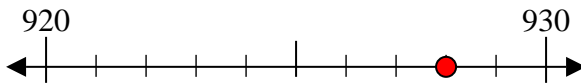
4) 85

4. 90

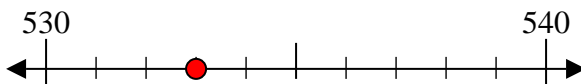
5) 452

5. 450

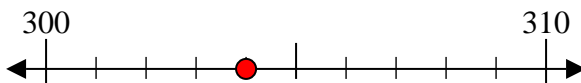
6) 928

6. 930

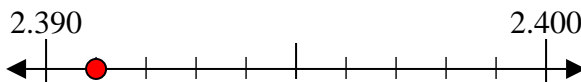
7) 533

7. 530

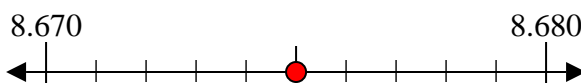
8) 304

8. 300

9) 2.391

9. 2.390

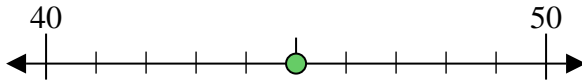
10) 8.675

10. 8.680



Benutze den Zahlenstrahl um jede Zahl auf die nächste Zehnerstelle zu runden.

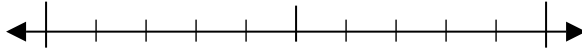
Bsp) 45



Antworten

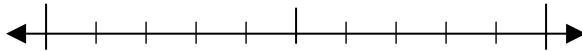
Bsp. 50

1) 50



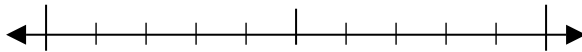
1. _____

2) 58



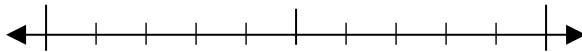
2. _____

3) 76



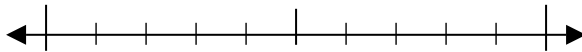
3. _____

4) 17



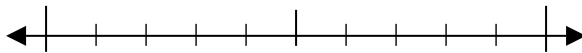
4. _____

5) 267



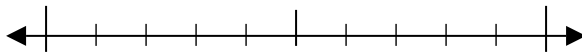
5. _____

6) 863



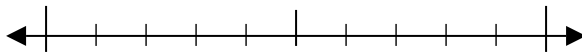
6. _____

7) 690



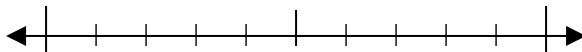
7. _____

8) 588



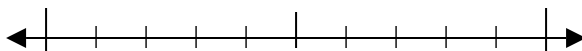
8. _____

9) 5.831



9. _____

10) 5.580

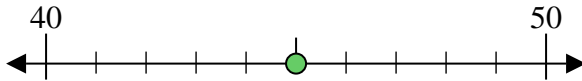


10. _____

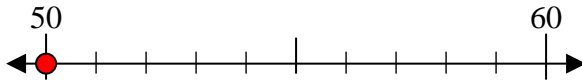


Benutze den Zahlenstrahl um jede Zahl auf die nächste Zehnerstelle zu runden.

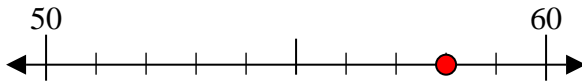
Bsp) 45



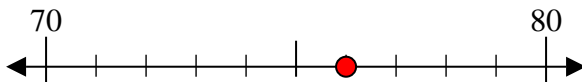
1) 50



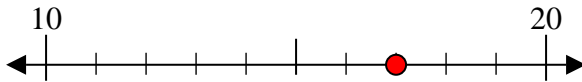
2) 58



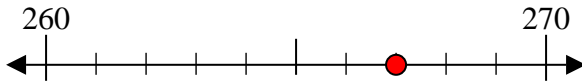
3) 76



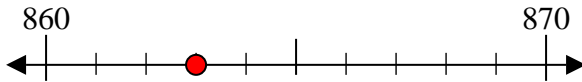
4) 17



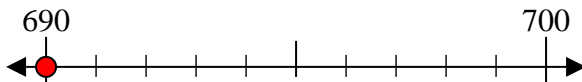
5) 267



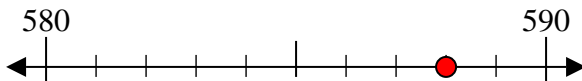
6) 863



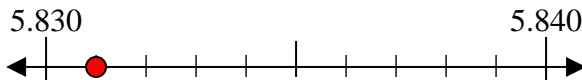
7) 690



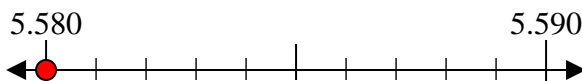
8) 588



9) 5.831



10) 5.580



Antworten

Bsp. 50

1. 50

2. 60

3. 80

4. 20

5. 270

6. 860

7. 690

8. 590

9. 5.830

10. 5.580

