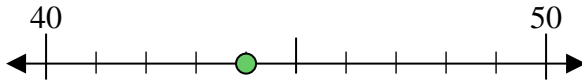




Benutze den Zahlenstrahl um jede Zahl auf die nächste Zehnerstelle zu runden.

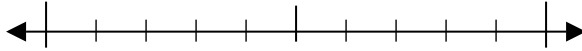
Bsp) 44



Antworten

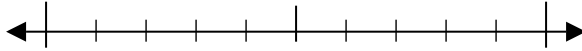
Bsp. 40

1) 86



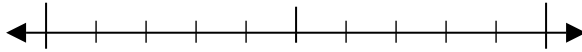
1. _____

2) 58



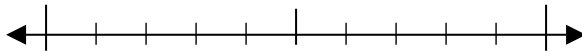
2. _____

3) 51



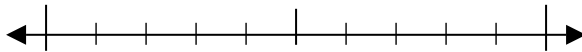
3. _____

4) 85



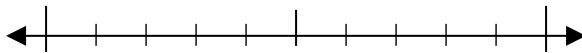
4. _____

5) 452



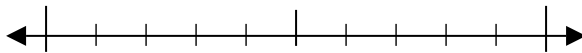
5. _____

6) 928



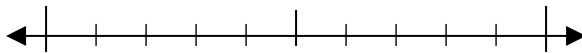
6. _____

7) 533



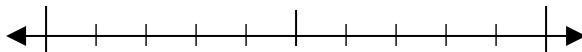
7. _____

8) 304



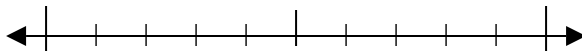
8. _____

9) 2.391



9. _____

10) 8.675

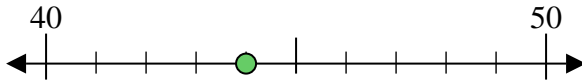


10. _____



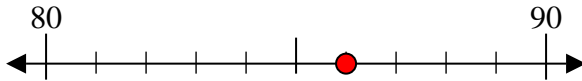
Benutze den Zahlenstrahl um jede Zahl auf die nächste Zehnerstelle zu runden.

Bsp) 44



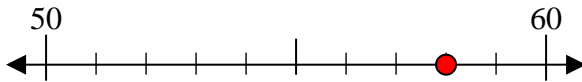
Antworten
Bsp. 40

1) 86



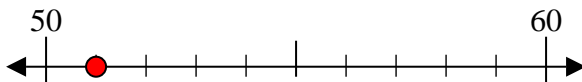
1. 90

2) 58



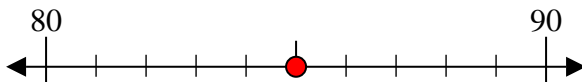
2. 60

3) 51



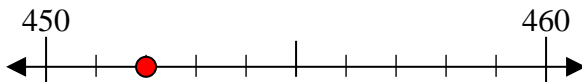
3. 50

4) 85



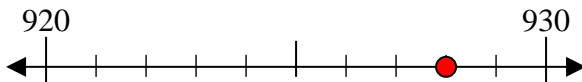
4. 90

5) 452



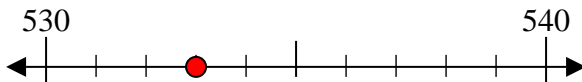
5. 450

6) 928



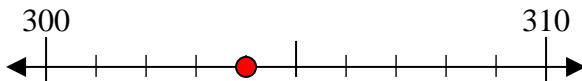
6. 930

7) 533



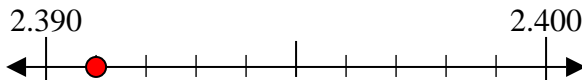
7. 530

8) 304



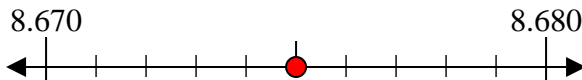
8. 300

9) 2.391



9. 2.390

10) 8.675



10. 8.680