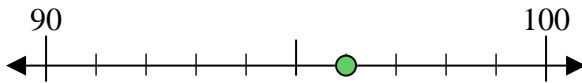




Benutze den Zahlenstrahl um jede Zahl auf die nächste Zehnerstelle zu runden.

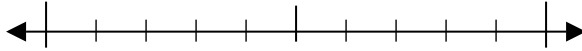
Bsp) 96



Antworten

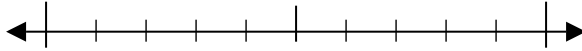
Bsp. 100

1) 95



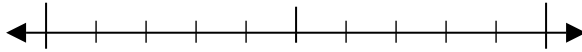
1. _____

2) 44



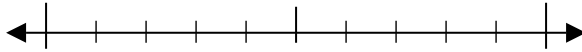
2. _____

3) 74



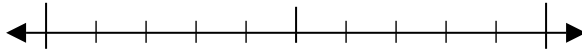
3. _____

4) 34



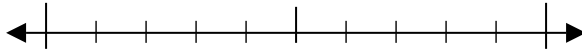
4. _____

5) 512



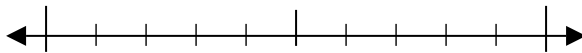
5. _____

6) 217



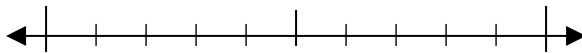
6. _____

7) 609



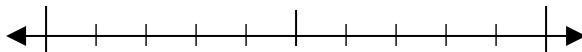
7. _____

8) 897



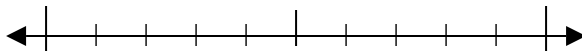
8. _____

9) 8.247



9. _____

10) 4.436

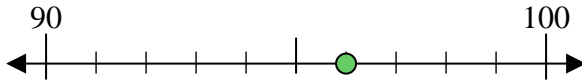


10. _____



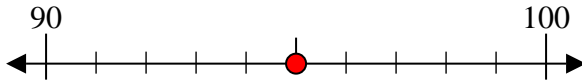
Benutze den Zahlenstrahl um jede Zahl auf die nächste Zehnerstelle zu runden.

Bsp) 96



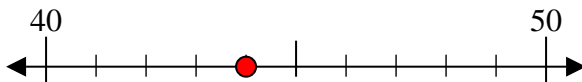
Antworten
Bsp. 100

1) 95



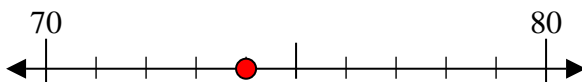
1. 100

2) 44



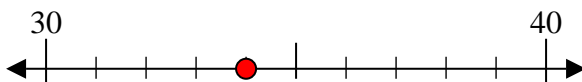
2. 40

3) 74



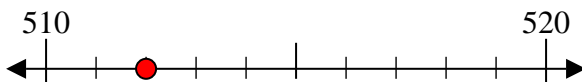
3. 70

4) 34



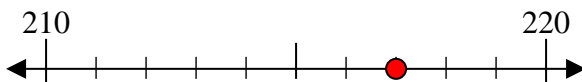
4. 30

5) 512



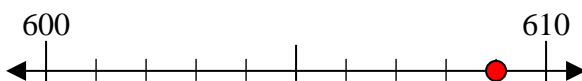
5. 510

6) 217



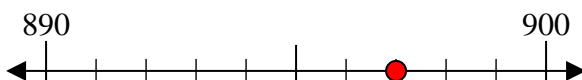
6. 220

7) 609



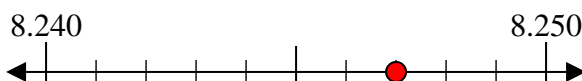
7. 610

8) 897



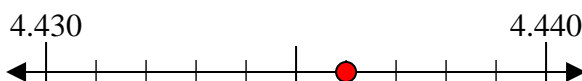
8. 900

9) 8.247



9. 8.250

10) 4.436



10. 4.440