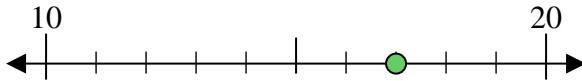




Benutze den Zahlenstrahl um jede Zahl auf die nächste Zehnerstelle zu runden.

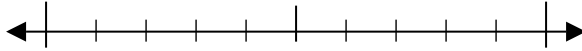
Bsp) 17



**Antworten**

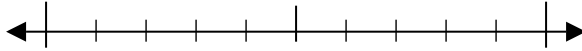
Bsp. 20

1) 30



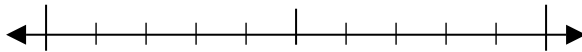
1. \_\_\_\_\_

2) 76



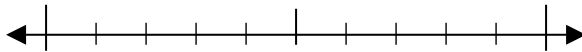
2. \_\_\_\_\_

3) 37



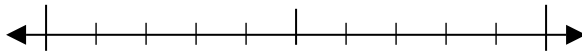
3. \_\_\_\_\_

4) 56



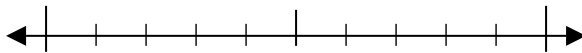
4. \_\_\_\_\_

5) 767



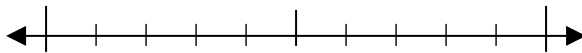
5. \_\_\_\_\_

6) 823



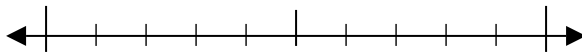
6. \_\_\_\_\_

7) 958



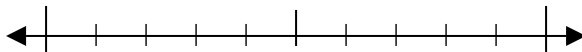
7. \_\_\_\_\_

8) 127



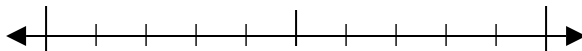
8. \_\_\_\_\_

9) 2.970



9. \_\_\_\_\_

10) 8.155

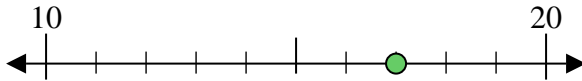


10. \_\_\_\_\_



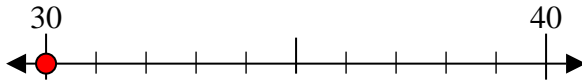
Benutze den Zahlenstrahl um jede Zahl auf die nächste Zehnerstelle zu runden.

Bsp) 17



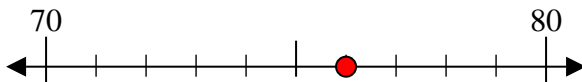
Antworten  
Bsp. 20

1) 30



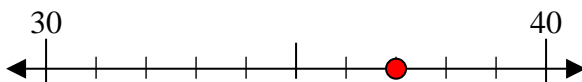
1. 30

2) 76



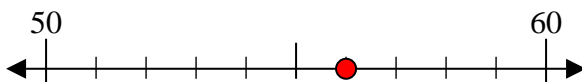
2. 80

3) 37



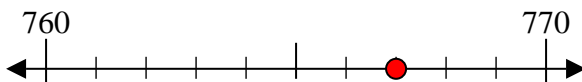
3. 40

4) 56



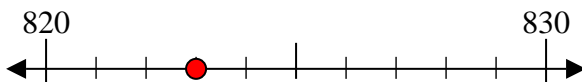
4. 60

5) 767



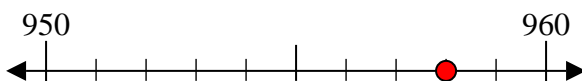
5. 770

6) 823



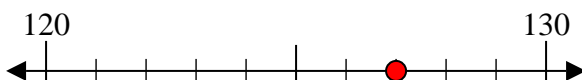
6. 820

7) 958



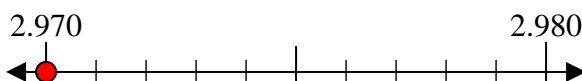
7. 960

8) 127



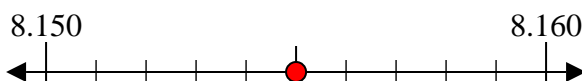
8. 130

9) 2.970



9. 2.970

10) 8.155



10. 8.160