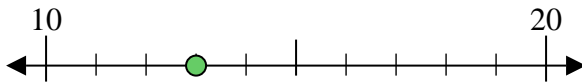




Benutze den Zahlenstrahl um jede Zahl auf die nächste Zehnerstelle zu runden.

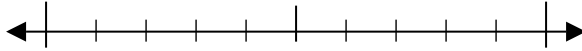
Bsp) 13



Antworten

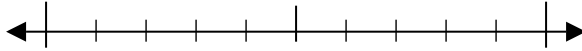
Bsp. 10

1) 63



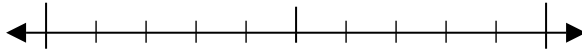
1. _____

2) 42



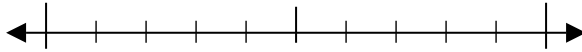
2. _____

3) 32



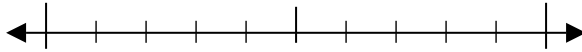
3. _____

4) 60



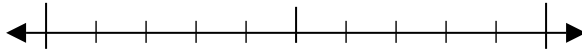
4. _____

5) 271



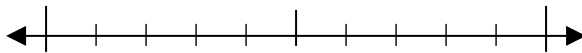
5. _____

6) 646



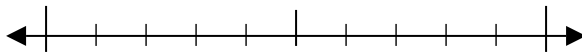
6. _____

7) 802



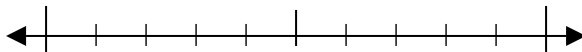
7. _____

8) 115



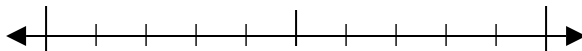
8. _____

9) 7.481



9. _____

10) 2.220

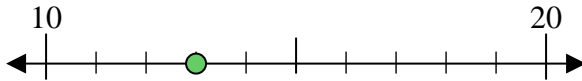


10. _____



Benutze den Zahlenstrahl um jede Zahl auf die nächste Zehnerstelle zu runden.

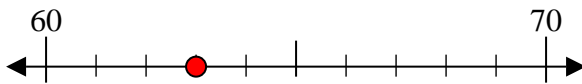
Bsp) 13



Antworten

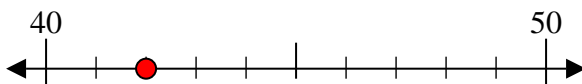
Bsp. 10

1) 63



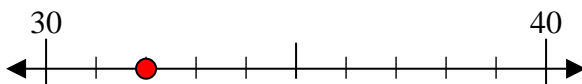
1. 60

2) 42



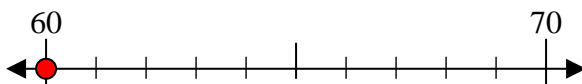
2. 40

3) 32



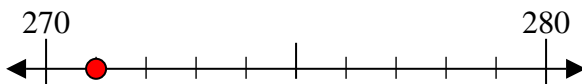
3. 30

4) 60



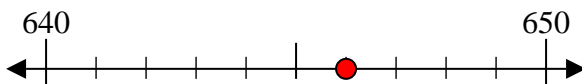
4. 60

5) 271



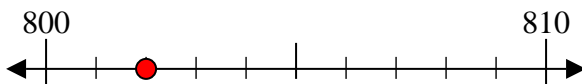
5. 270

6) 646



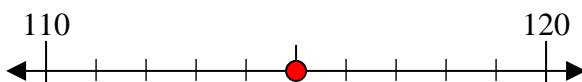
6. 650

7) 802



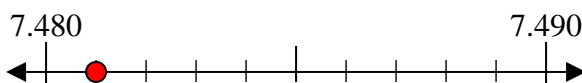
7. 800

8) 115



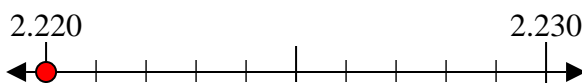
8. 120

9) 7.481



9. 7.480

10) 2.220



10. 2.220