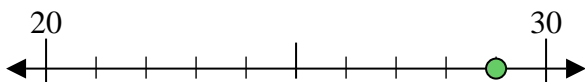




Benutze den Zahlenstrahl um jede Zahl auf die nächste Zehnerstelle zu runden.

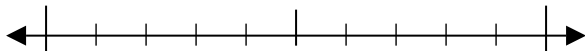
Bsp) 29



Antworten

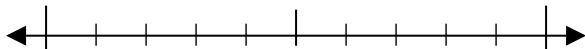
Bsp. 30

1) 29



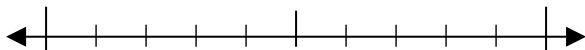
1. _____

2) 86



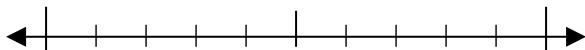
2. _____

3) 60



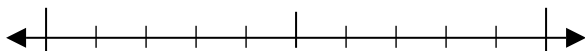
3. _____

4) 97



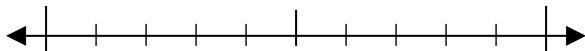
4. _____

5) 187



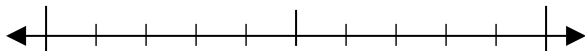
5. _____

6) 372



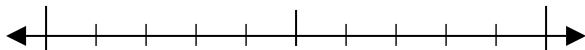
6. _____

7) 123



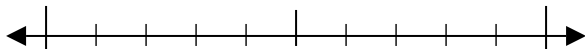
7. _____

8) 814



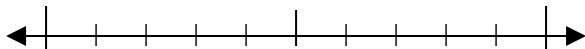
8. _____

9) 9.790



9. _____

10) 5.860

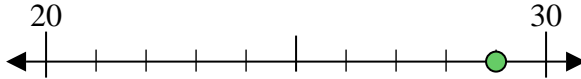


10. _____

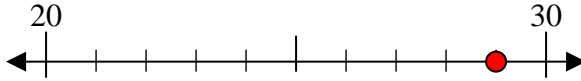


Benutze den Zahlenstrahl um jede Zahl auf die nächste Zehnerstelle zu runden.

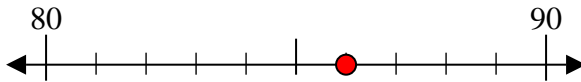
Bsp) 29



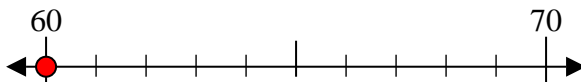
1) 29



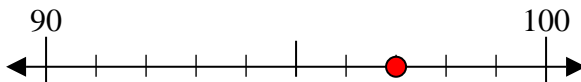
2) 86



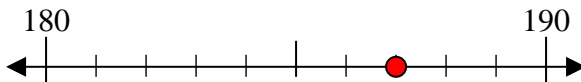
3) 60



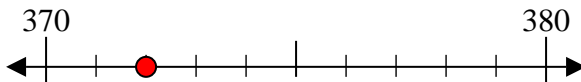
4) 97



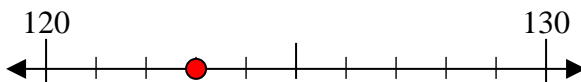
5) 187



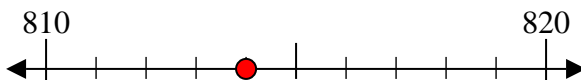
6) 372



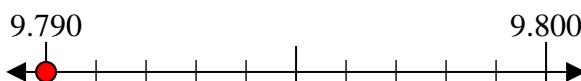
7) 123



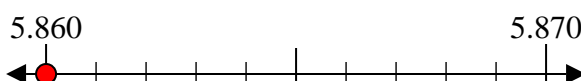
8) 814



9) 9.790



10) 5.860

AntwortenBsp. 301. 302. 903. 604. 1005. 1906. 3707. 1208. 8109. 9.79010. 5.860