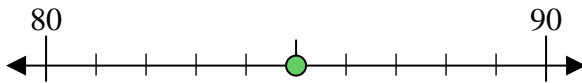




Benutze den Zahlenstrahl um jede Zahl auf die nächste Zehnerstelle zu runden.

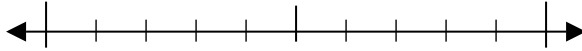
Bsp) 85



Antworten

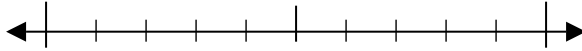
Bsp. 90

1) 29



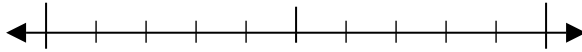
1. _____

2) 46



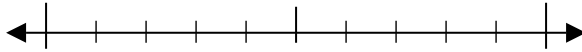
2. _____

3) 94



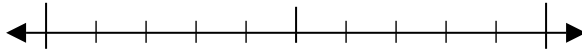
3. _____

4) 70



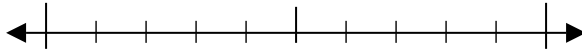
4. _____

5) 864



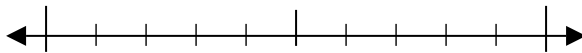
5. _____

6) 546



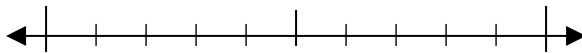
6. _____

7) 339



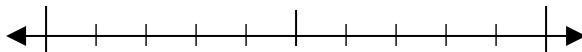
7. _____

8) 688



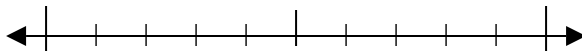
8. _____

9) 7.752



9. _____

10) 9.901

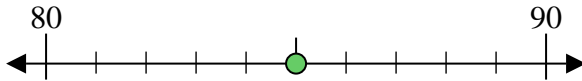


10. _____



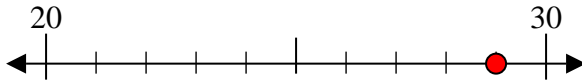
Benutze den Zahlenstrahl um jede Zahl auf die nächste Zehnerstelle zu runden.

Bsp) 85



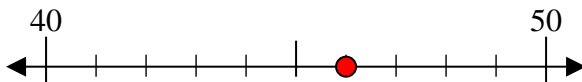
Antworten
Bsp. 90

1) 29



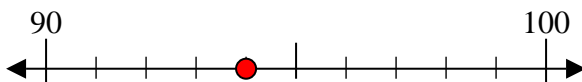
1. 30

2) 46



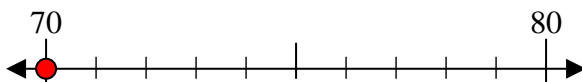
2. 50

3) 94



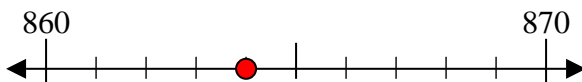
3. 90

4) 70



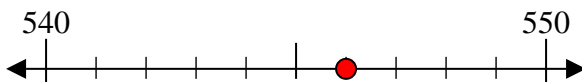
4. 70

5) 864



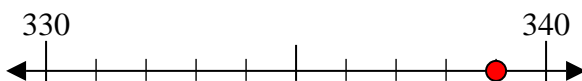
5. 860

6) 546



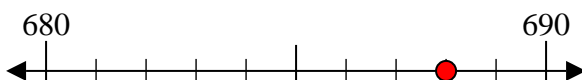
6. 550

7) 339



7. 340

8) 688



8. 690

9) 7.752



9. 7.750

10) 9.901



10. 9.900