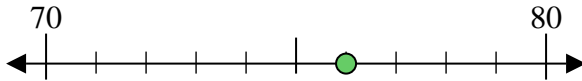




Benutze den Zahlenstrahl um jede Zahl auf die nächste Zehnerstelle zu runden.

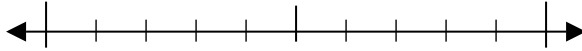
Bsp) 76



Antworten

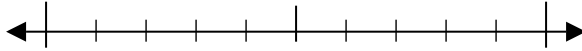
Bsp. 80

1) 48



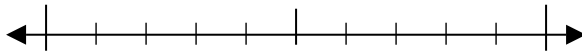
1. _____

2) 62



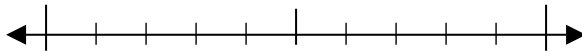
2. _____

3) 62



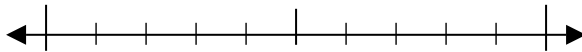
3. _____

4) 70



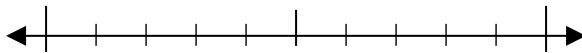
4. _____

5) 709



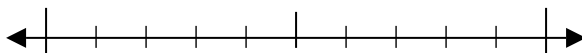
5. _____

6) 447



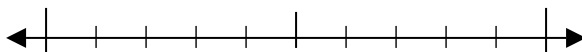
6. _____

7) 474



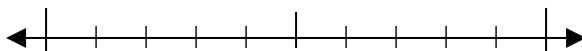
7. _____

8) 985



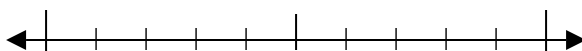
8. _____

9) 6.818



9. _____

10) 1.509

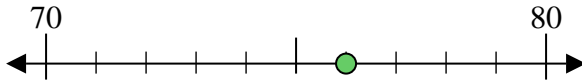


10. _____



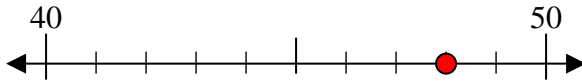
Benutze den Zahlenstrahl um jede Zahl auf die nächste Zehnerstelle zu runden.

Bsp) 76



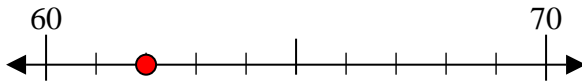
Antworten
Bsp. 80

1) 48



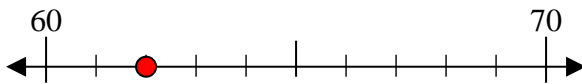
1. 50

2) 62



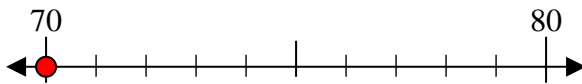
2. 60

3) 62



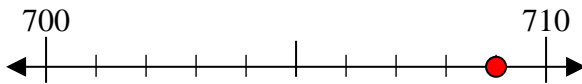
3. 60

4) 70



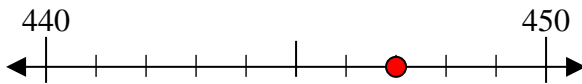
4. 70

5) 709



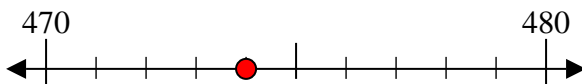
5. 710

6) 447



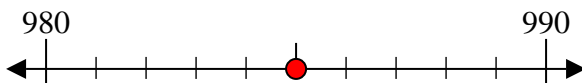
6. 450

7) 474



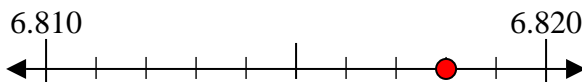
7. 470

8) 985



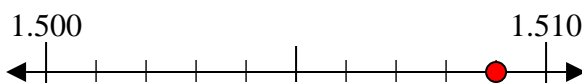
8. 990

9) 6.818



9. 6.820

10) 1.509



10. 1.510