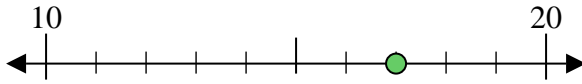




Benutze den Zahlenstrahl um jede Zahl auf die nächste Zehnerstelle zu runden.

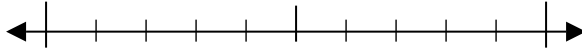
Bsp) 17



Antworten

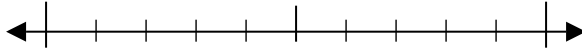
Bsp. 20

1) 24



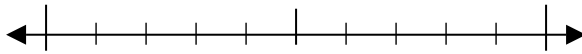
1. _____

2) 11



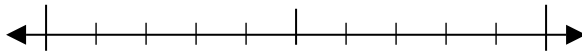
2. _____

3) 89



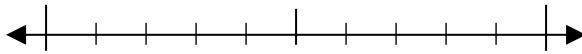
3. _____

4) 83



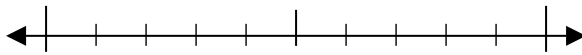
4. _____

5) 464



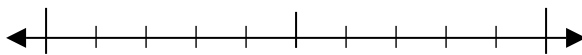
5. _____

6) 563



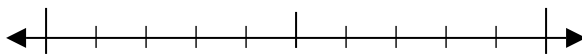
6. _____

7) 541



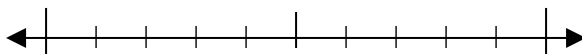
7. _____

8) 113



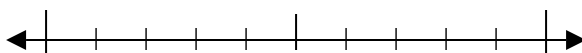
8. _____

9) 8.779



9. _____

10) 6.946

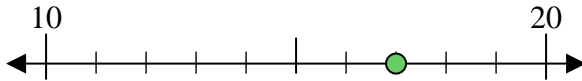


10. _____



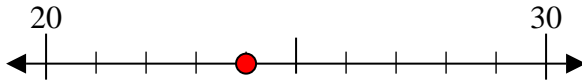
Benutze den Zahlenstrahl um jede Zahl auf die nächste Zehnerstelle zu runden.

Bsp) 17



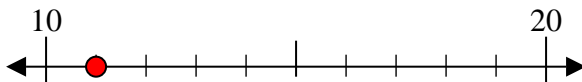
Antworten
Bsp. 20

1) 24



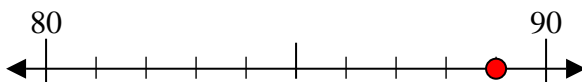
1. 20

2) 11



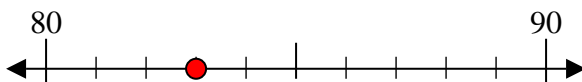
2. 10

3) 89



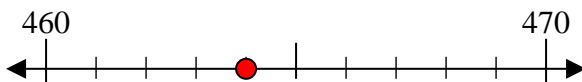
3. 90

4) 83



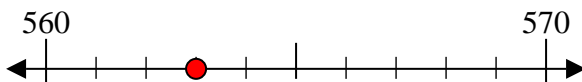
4. 80

5) 464



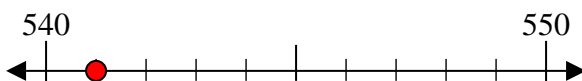
5. 460

6) 563



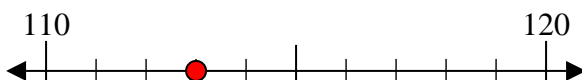
6. 560

7) 541



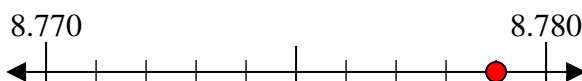
7. 540

8) 113



8. 110

9) 8.779



9. 8.780

10) 6.946



10. 6.950