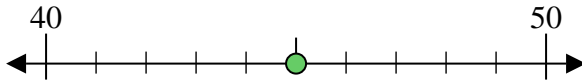




Benutze den Zahlenstrahl um jede Zahl auf die nächste Zehnerstelle zu runden.

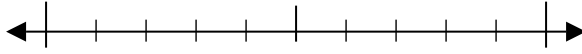
Bsp) 45



Antworten

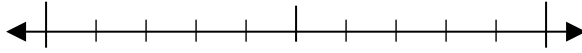
Bsp. 50

1) 50



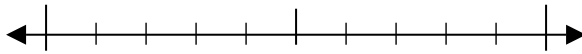
1. _____

2) 58



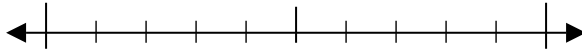
2. _____

3) 76



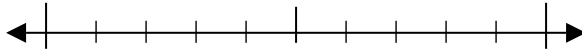
3. _____

4) 17



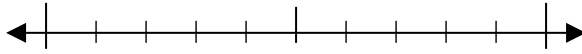
4. _____

5) 267



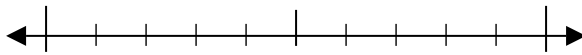
5. _____

6) 863



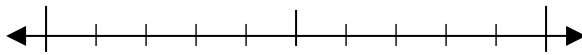
6. _____

7) 690



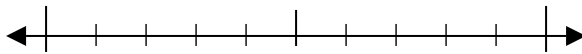
7. _____

8) 588



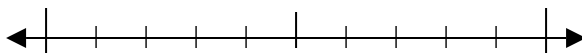
8. _____

9) 5.831



9. _____

10) 5.580

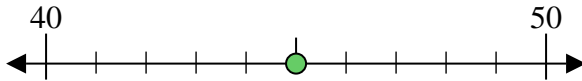


10. _____

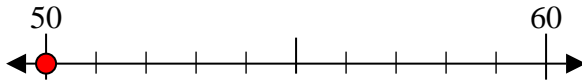


Benutze den Zahlenstrahl um jede Zahl auf die nächste Zehnerstelle zu runden.

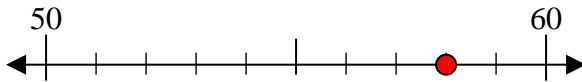
Bsp) 45



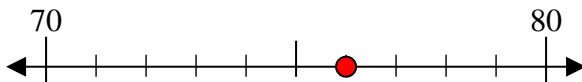
1) 50



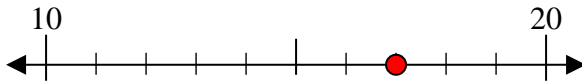
2) 58



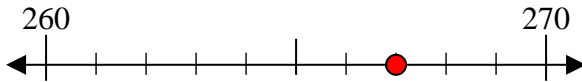
3) 76



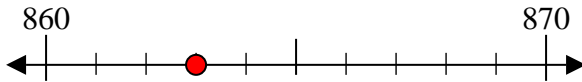
4) 17



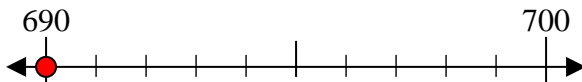
5) 267



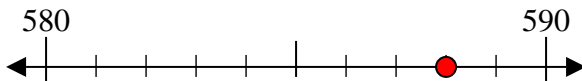
6) 863



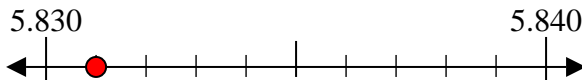
7) 690



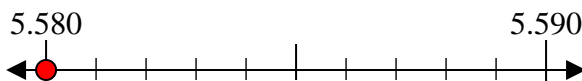
8) 588



9) 5.831



10) 5.580



Antworten

Bsp. 50

1. 50

2. 60

3. 80

4. 20

5. 270

6. 860

7. 690

8. 590

9. 5.830

10. 5.580