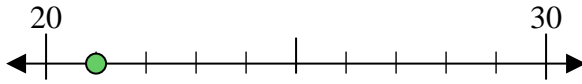




Benutze den Zahlenstrahl um jede Zahl auf die nächste Zehnerstelle zu runden.

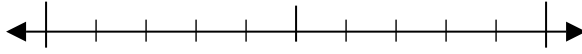
Bsp) 21



Antworten

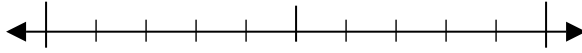
Bsp. 20

1) 95



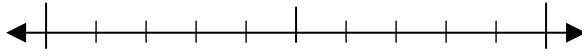
1. \_\_\_\_\_

2) 25



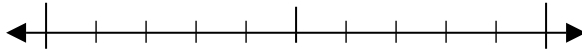
2. \_\_\_\_\_

3) 28



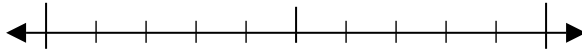
3. \_\_\_\_\_

4) 61



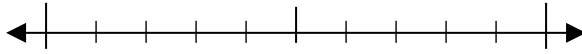
4. \_\_\_\_\_

5) 280



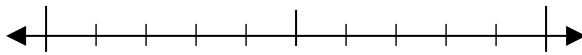
5. \_\_\_\_\_

6) 569



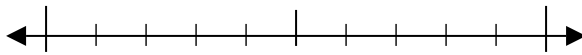
6. \_\_\_\_\_

7) 409



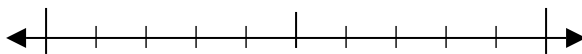
7. \_\_\_\_\_

8) 613



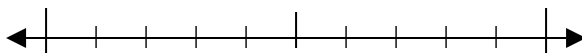
8. \_\_\_\_\_

9) 9.524



9. \_\_\_\_\_

10) 8.319

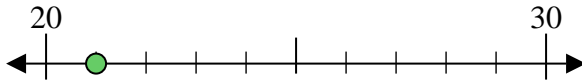


10. \_\_\_\_\_



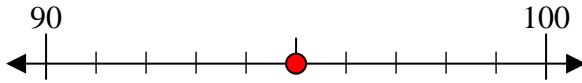
Benutze den Zahlenstrahl um jede Zahl auf die nächste Zehnerstelle zu runden.

Bsp) 21



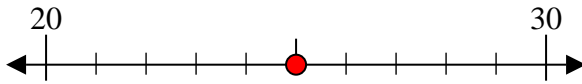
Antworten  
Bsp. 20

1) 95



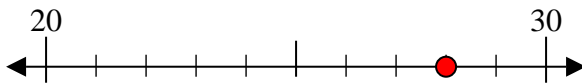
1. 100

2) 25



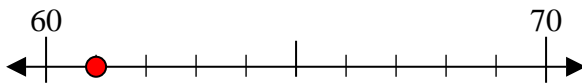
2. 30

3) 28



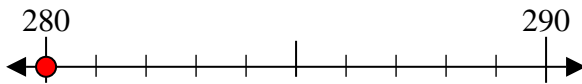
3. 30

4) 61



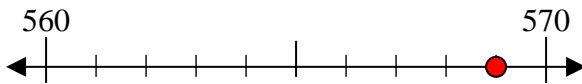
4. 60

5) 280



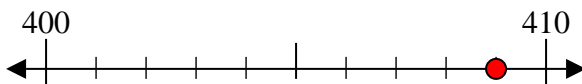
5. 280

6) 569



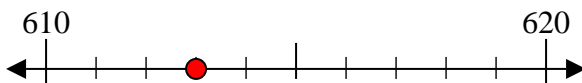
6. 570

7) 409



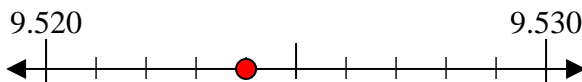
7. 410

8) 613



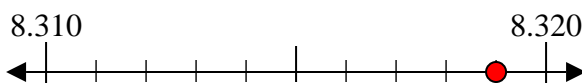
8. 610

9) 9.524



9. 9.520

10) 8.319



10. 8.320