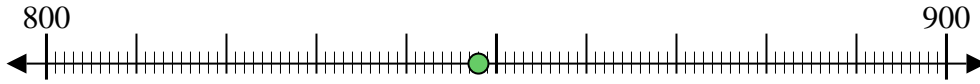




Benutze den Zahlenstrahl um jede Zahl auf das nächste Hundert zu runden.

Bsp) 848



**Antworten**

Bsp. 800

1) 915



1. \_\_\_\_\_

2) 242



2. \_\_\_\_\_

3) 398



3. \_\_\_\_\_

4) 408



4. \_\_\_\_\_

5) 5.145



5. \_\_\_\_\_

6) 3.740



6. \_\_\_\_\_

7) 2.226



7. \_\_\_\_\_

8) 4.926



8. \_\_\_\_\_

9) 68.834



9. \_\_\_\_\_

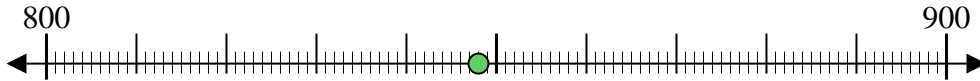
10) 96.097





Benutze den Zahlenstrahl um jede Zahl auf das nächste Hundert zu runden.

Bsp) 848



Antworten

Bsp. 800

1) 915



1. 900

2) 242



2. 200

3) 398



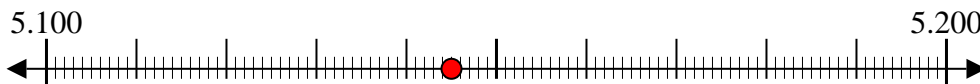
3. 400

4) 408



4. 400

5) 5.145



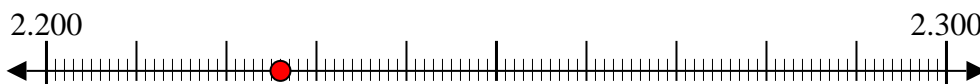
5. 5.100

6) 3.740



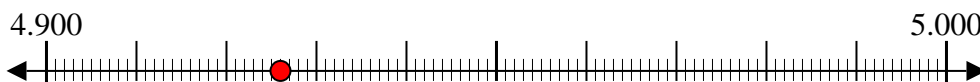
6. 3.700

7) 2.226



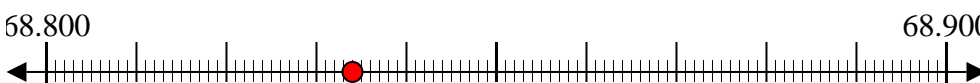
7. 2.200

8) 4.926



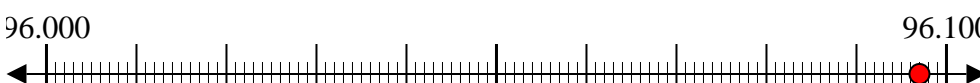
8. 4.900

9) 68.834



9. 68.800

10) 96.097



10. 96.100