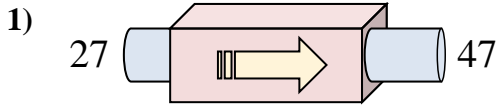
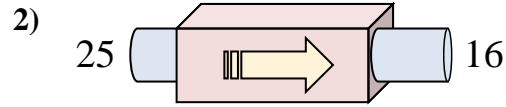




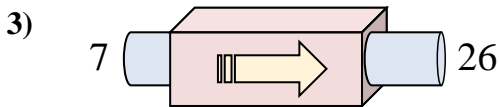
Stelle fest, welche Regel die Funktionsmaschine anwendet.

Antworten

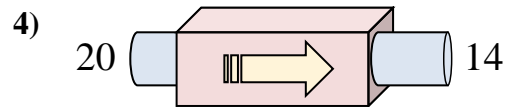
- A. addiere 19
- B. addiere 18
- C. subtrahiere 25
- D. addiere 20



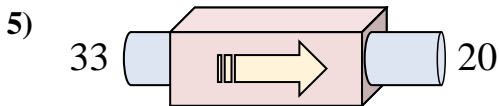
- A. subtrahiere 6
- B. subtrahiere 13
- C. subtrahiere 5
- D. subtrahiere 9



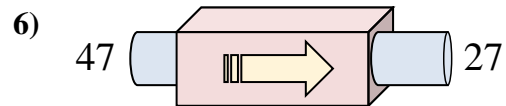
- A. subtrahiere 15
- B. subtrahiere 14
- C. addiere 19
- D. addiere 23



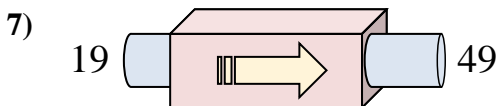
- A. subtrahiere 6
- B. addiere 1
- C. subtrahiere 10
- D. addiere 3



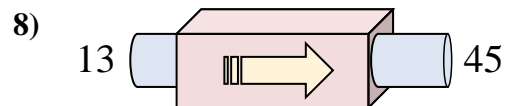
- A. addiere 14
- B. subtrahiere 13
- C. addiere 18
- D. subtrahiere 10



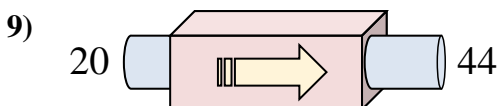
- A. subtrahiere 20
- B. addiere 15
- C. subtrahiere 25
- D. subtrahiere 16



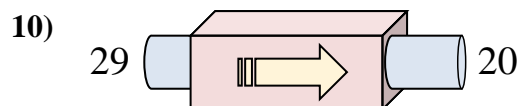
- A. addiere 30
- B. addiere 31
- C. addiere 34
- D. addiere 35



- A. addiere 28
- B. addiere 31
- C. addiere 32
- D. subtrahiere 34



- A. addiere 24
- B. addiere 22
- C. addiere 28
- D. addiere 20

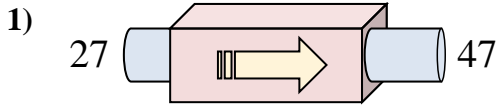


- A. subtrahiere 5
- B. addiere 7
- C. subtrahiere 11
- D. subtrahiere 9

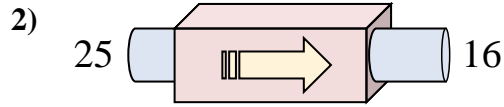
1. _____
2. _____
3. _____
4. _____
5. _____
6. _____
7. _____
8. _____
9. _____
10. _____



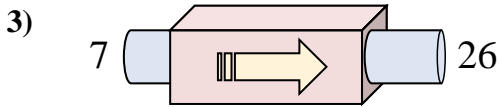
Stelle fest, welche Regel die Funktionsmaschine anwendet.



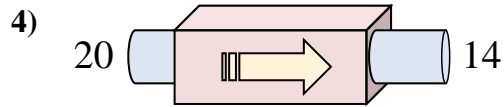
- A. addiere 19
- B. addiere 18
- C. subtrahiere 25
- D. addiere 20



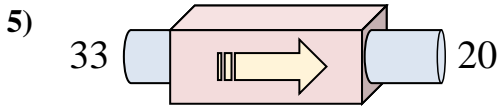
- A. subtrahiere 6
- B. subtrahiere 13
- C. subtrahiere 5
- D. subtrahiere 9



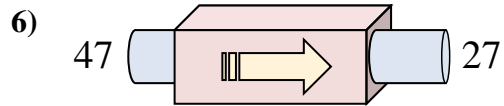
- A. subtrahiere 15
- B. subtrahiere 14
- C. addiere 19
- D. addiere 23



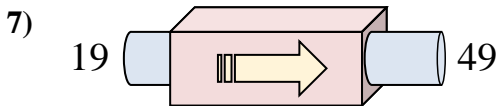
- A. subtrahiere 6
- B. addiere 1
- C. subtrahiere 10
- D. addiere 3



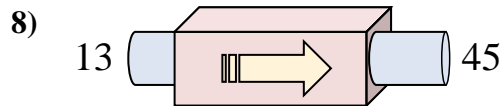
- A. addiere 14
- B. subtrahiere 13
- C. addiere 18
- D. subtrahiere 10



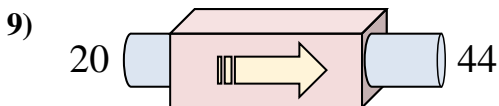
- A. subtrahiere 20
- B. addiere 15
- C. subtrahiere 25
- D. subtrahiere 16



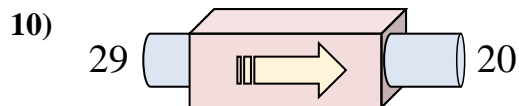
- A. addiere 30
- B. addiere 31
- C. addiere 34
- D. addiere 35



- A. addiere 28
- B. addiere 31
- C. addiere 32
- D. subtrahiere 34



- A. addiere 24
- B. addiere 22
- C. addiere 28
- D. addiere 20



- A. subtrahiere 5
- B. addiere 7
- C. subtrahiere 11
- D. subtrahiere 9

Antworten

1. **D**
2. **D**
3. **C**
4. **A**
5. **B**
6. **A**
7. **A**
8. **C**
9. **A**
10. **D**