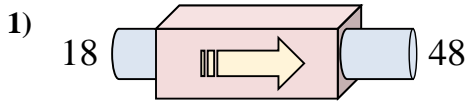
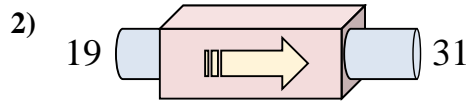




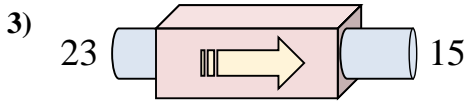
Stelle fest, welche Regel die Funktionsmaschine anwendet.



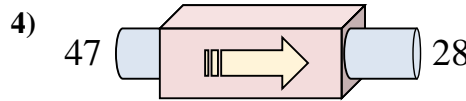
- A. subtrahiere 28
- B. subtrahiere 30
- C. addiere 30
- D. addiere 31



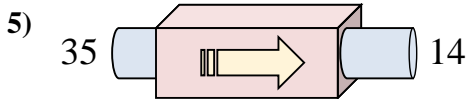
- A. addiere 12
- B. addiere 17
- C. subtrahiere 10
- D. addiere 14



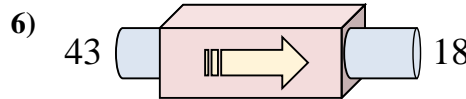
- A. subtrahiere 4
- B. subtrahiere 8
- C. addiere 10
- D. addiere 12



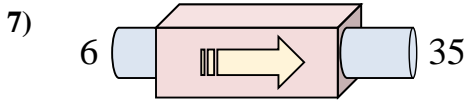
- A. subtrahiere 23
- B. subtrahiere 24
- C. subtrahiere 19
- D. addiere 15



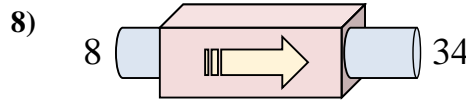
- A. subtrahiere 21
- B. subtrahiere 18
- C. subtrahiere 22
- D. addiere 17



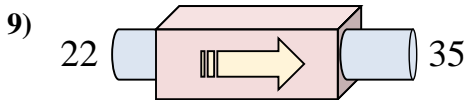
- A. subtrahiere 25
- B. subtrahiere 30
- C. subtrahiere 20
- D. subtrahiere 21



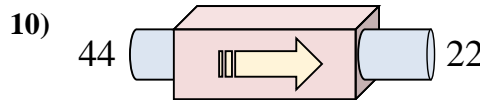
- A. addiere 26
- B. addiere 25
- C. addiere 29
- D. addiere 33



- A. addiere 26
- B. addiere 21
- C. subtrahiere 22
- D. addiere 28



- A. subtrahiere 8
- B. addiere 8
- C. subtrahiere 11
- D. addiere 13



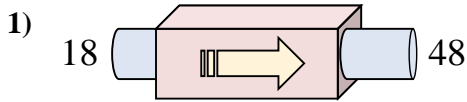
- A. subtrahiere 17
- B. subtrahiere 27
- C. addiere 23
- D. subtrahiere 22

Antworten

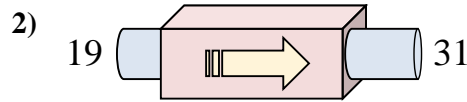
- 1. _____
- 2. _____
- 3. _____
- 4. _____
- 5. _____
- 6. _____
- 7. _____
- 8. _____
- 9. _____
- 10. _____



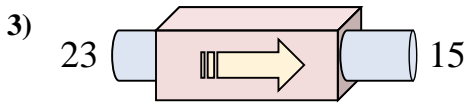
Stelle fest, welche Regel die Funktionsmaschine anwendet.



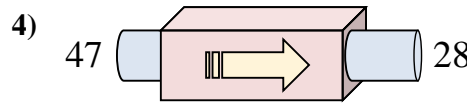
- A. subtrahiere 28
- B. subtrahiere 30
- C. addiere 30
- D. addiere 31



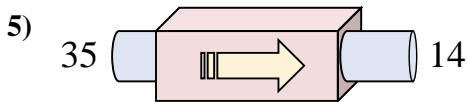
- A. addiere 12
- B. addiere 17
- C. subtrahiere 10
- D. addiere 14



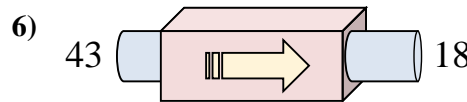
- A. subtrahiere 4
- B. subtrahiere 8
- C. addiere 10
- D. addiere 12



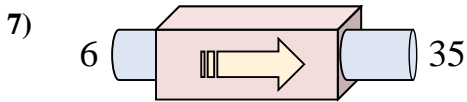
- A. subtrahiere 23
- B. subtrahiere 24
- C. subtrahiere 19
- D. addiere 15



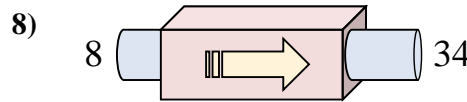
- A. subtrahiere 21
- B. subtrahiere 18
- C. subtrahiere 22
- D. addiere 17



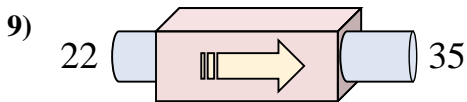
- A. subtrahiere 25
- B. subtrahiere 30
- C. subtrahiere 20
- D. subtrahiere 21



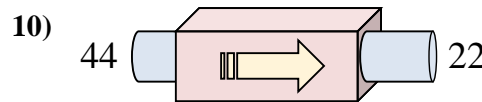
- A. addiere 26
- B. addiere 25
- C. addiere 29
- D. addiere 33



- A. addiere 26
- B. addiere 21
- C. subtrahiere 22
- D. addiere 28



- A. subtrahiere 8
- B. addiere 8
- C. subtrahiere 11
- D. addiere 13



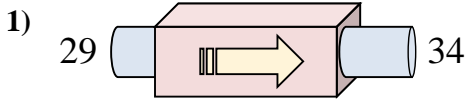
- A. subtrahiere 17
- B. subtrahiere 27
- C. addiere 23
- D. subtrahiere 22

Antworten

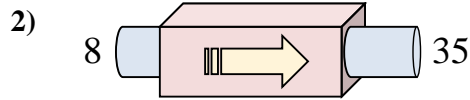
1. **C**
2. **A**
3. **B**
4. **C**
5. **A**
6. **A**
7. **C**
8. **A**
9. **D**
10. **D**



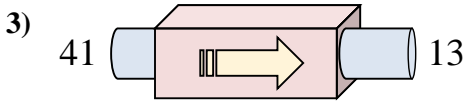
Stelle fest, welche Regel die Funktionsmaschine anwendet.



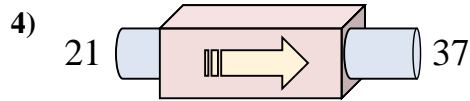
- A. subtrahiere 6
- B. addiere 8
- C. addiere 1
- D. addiere 5



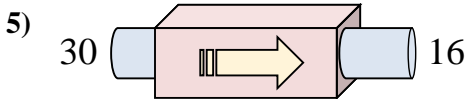
- A. addiere 27
- B. addiere 24
- C. addiere 25
- D. addiere 23



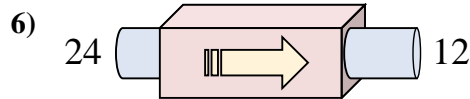
- A. subtrahiere 26
- B. subtrahiere 28
- C. subtrahiere 23
- D. addiere 26



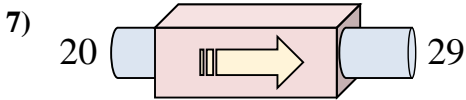
- A. addiere 11
- B. subtrahiere 16
- C. addiere 16
- D. addiere 17



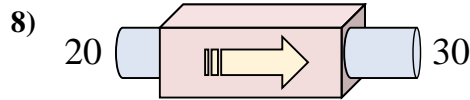
- A. subtrahiere 11
- B. subtrahiere 10
- C. subtrahiere 14
- D. addiere 11



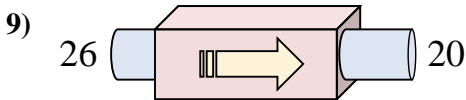
- A. subtrahiere 15
- B. subtrahiere 16
- C. addiere 14
- D. subtrahiere 12



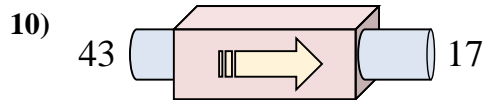
- A. addiere 9
- B. addiere 7
- C. addiere 11
- D. subtrahiere 5



- A. addiere 15
- B. addiere 10
- C. addiere 8
- D. addiere 14



- A. subtrahiere 2
- B. subtrahiere 6
- C. subtrahiere 1
- D. addiere 5



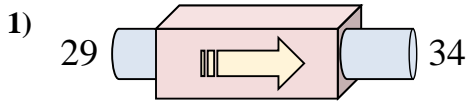
- A. subtrahiere 29
- B. subtrahiere 22
- C. subtrahiere 24
- D. subtrahiere 26

Antworten

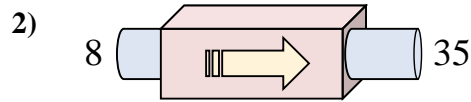
- 1. _____
- 2. _____
- 3. _____
- 4. _____
- 5. _____
- 6. _____
- 7. _____
- 8. _____
- 9. _____
- 10. _____



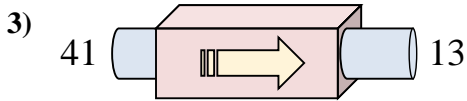
Stelle fest, welche Regel die Funktionsmaschine anwendet.



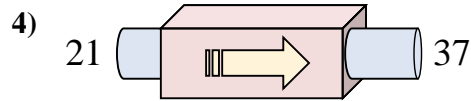
- A. subtrahiere 6
- B. addiere 8
- C. addiere 1
- D. addiere 5



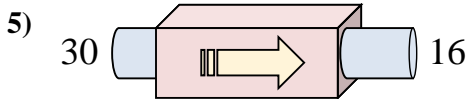
- A. addiere 27
- B. addiere 24
- C. addiere 25
- D. addiere 23



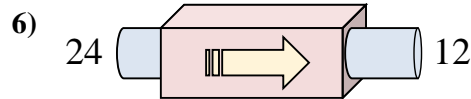
- A. subtrahiere 26
- B. subtrahiere 28
- C. subtrahiere 23
- D. addiere 26



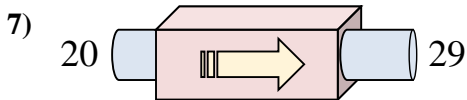
- A. addiere 11
- B. subtrahiere 16
- C. addiere 16
- D. addiere 17



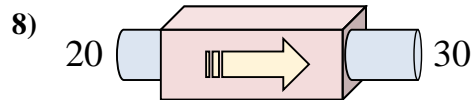
- A. subtrahiere 11
- B. subtrahiere 10
- C. subtrahiere 14
- D. addiere 11



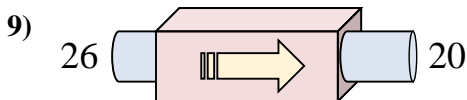
- A. subtrahiere 15
- B. subtrahiere 16
- C. addiere 14
- D. subtrahiere 12



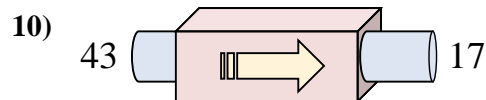
- A. addiere 9
- B. addiere 7
- C. addiere 11
- D. subtrahiere 5



- A. addiere 15
- B. addiere 10
- C. addiere 8
- D. addiere 14



- A. subtrahiere 2
- B. subtrahiere 6
- C. subtrahiere 1
- D. addiere 5



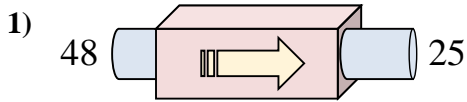
- A. subtrahiere 29
- B. subtrahiere 22
- C. subtrahiere 24
- D. subtrahiere 26

Antworten

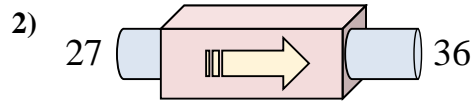
1. **D**
2. **A**
3. **B**
4. **C**
5. **C**
6. **D**
7. **A**
8. **B**
9. **B**
10. **D**



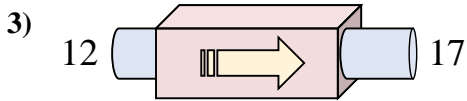
Stelle fest, welche Regel die Funktionsmaschine anwendet.



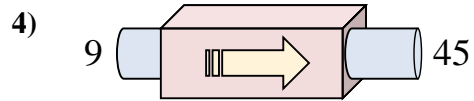
- A. subtrahiere 26
- B. addiere 19
- C. subtrahiere 27
- D. subtrahiere 23



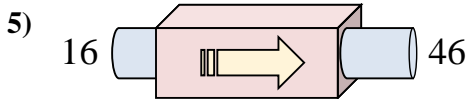
- A. addiere 4
- B. addiere 5
- C. addiere 9
- D. subtrahiere 9



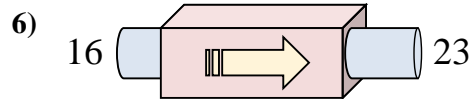
- A. subtrahiere 8
- B. subtrahiere 6
- C. addiere 5
- D. addiere 10



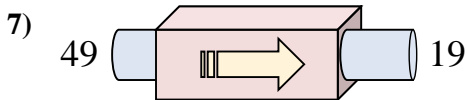
- A. addiere 32
- B. addiere 36
- C. subtrahiere 38
- D. addiere 33



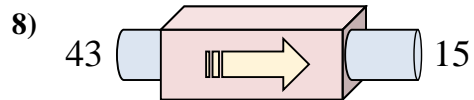
- A. subtrahiere 30
- B. addiere 31
- C. addiere 34
- D. addiere 30



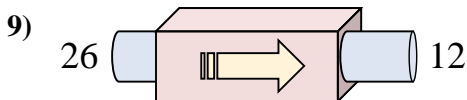
- A. addiere 6
- B. addiere 10
- C. addiere 3
- D. addiere 7



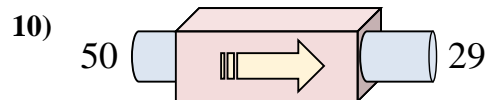
- A. addiere 27
- B. subtrahiere 35
- C. subtrahiere 28
- D. subtrahiere 30



- A. addiere 28
- B. subtrahiere 33
- C. subtrahiere 28
- D. subtrahiere 31



- A. subtrahiere 14
- B. addiere 18
- C. subtrahiere 10
- D. addiere 19



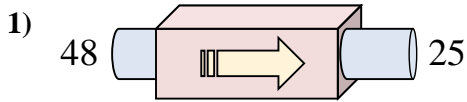
- A. addiere 22
- B. addiere 16
- C. subtrahiere 21
- D. subtrahiere 20

Antworten

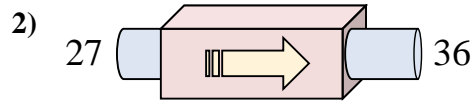
1. _____
2. _____
3. _____
4. _____
5. _____
6. _____
7. _____
8. _____
9. _____
10. _____



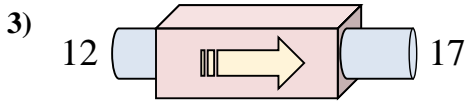
Stelle fest, welche Regel die Funktionsmaschine anwendet.



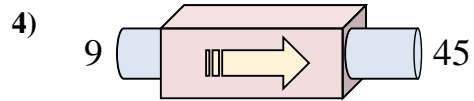
- A. subtrahiere 26
- B. addiere 19
- C. subtrahiere 27
- D. subtrahiere 23



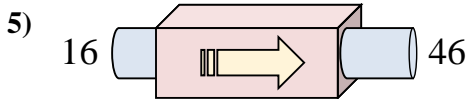
- A. addiere 4
- B. addiere 5
- C. addiere 9
- D. subtrahiere 9



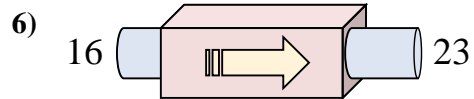
- A. subtrahiere 8
- B. subtrahiere 6
- C. addiere 5
- D. addiere 10



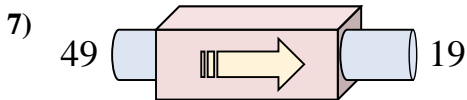
- A. addiere 32
- B. addiere 36
- C. subtrahiere 38
- D. addiere 33



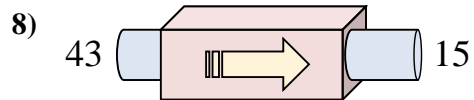
- A. subtrahiere 30
- B. addiere 31
- C. addiere 34
- D. addiere 30



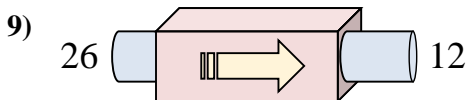
- A. addiere 6
- B. addiere 10
- C. addiere 3
- D. addiere 7



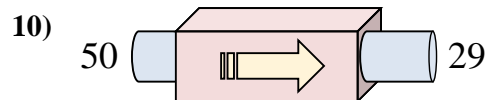
- A. addiere 27
- B. subtrahiere 35
- C. subtrahiere 28
- D. subtrahiere 30



- A. addiere 28
- B. subtrahiere 33
- C. subtrahiere 28
- D. subtrahiere 31



- A. subtrahiere 14
- B. addiere 18
- C. subtrahiere 10
- D. addiere 19

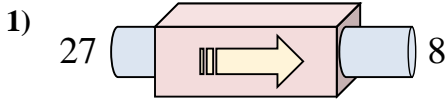


- A. addiere 22
- B. addiere 16
- C. subtrahiere 21
- D. subtrahiere 20

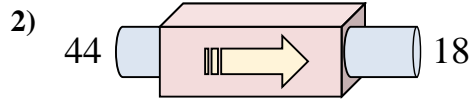
Antworten1. **D**2. **C**3. **C**4. **B**5. **D**6. **D**7. **D**8. **C**9. **A**10. **C**



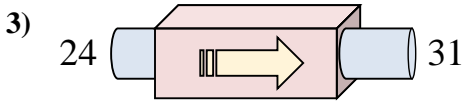
Stelle fest, welche Regel die Funktionsmaschine anwendet.



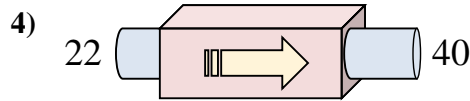
- A. subtrahiere 21
- B. subtrahiere 17
- C. subtrahiere 19
- D. subtrahiere 20



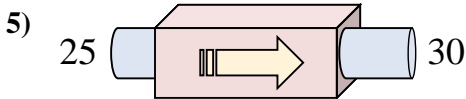
- A. addiere 28
- B. subtrahiere 24
- C. subtrahiere 26
- D. subtrahiere 22



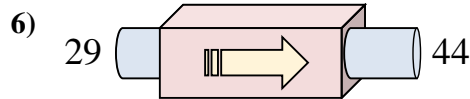
- A. addiere 9
- B. subtrahiere 6
- C. addiere 10
- D. addiere 7



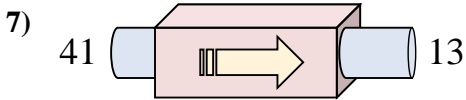
- A. subtrahiere 16
- B. addiere 17
- C. addiere 18
- D. addiere 22



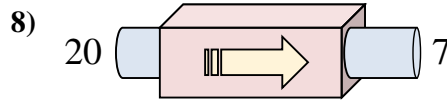
- A. addiere 5
- B. addiere 9
- C. addiere 10
- D. subtrahiere 5



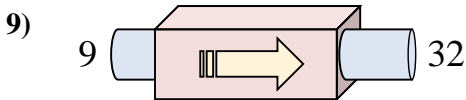
- A. addiere 15
- B. subtrahiere 17
- C. addiere 10
- D. addiere 16



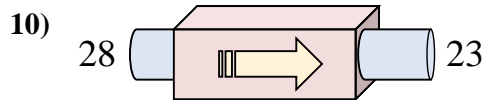
- A. addiere 26
- B. subtrahiere 31
- C. subtrahiere 28
- D. subtrahiere 29



- A. subtrahiere 13
- B. addiere 9
- C. subtrahiere 10
- D. addiere 15



- A. subtrahiere 23
- B. addiere 23
- C. addiere 18
- D. subtrahiere 22



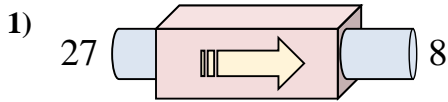
- A. subtrahiere 8
- B. subtrahiere 5
- C. addiere 4
- D. subtrahiere 1

Antworten

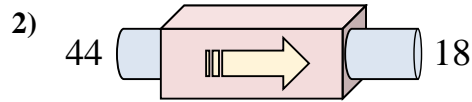
- 1. _____
- 2. _____
- 3. _____
- 4. _____
- 5. _____
- 6. _____
- 7. _____
- 8. _____
- 9. _____
- 10. _____



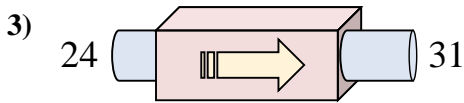
Stelle fest, welche Regel die Funktionsmaschine anwendet.



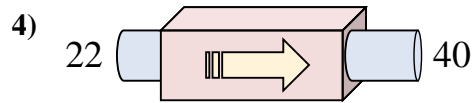
- A. subtrahiere 21
B. subtrahiere 17
C. subtrahiere 19
D. subtrahiere 20



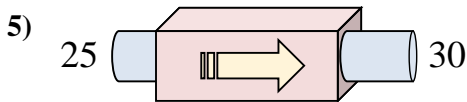
- A. addiere 28
B. subtrahiere 24
C. subtrahiere 26
D. subtrahiere 22



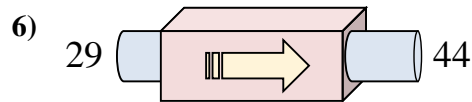
- A. addiere 9
B. subtrahiere 6
C. addiere 10
D. addiere 7



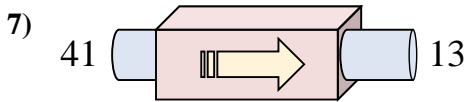
- A. subtrahiere 16
B. addiere 17
C. addiere 18
D. addiere 22



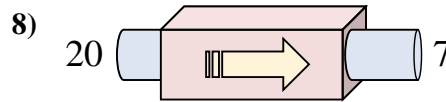
- A. addiere 5
B. addiere 9
C. addiere 10
D. subtrahiere 5



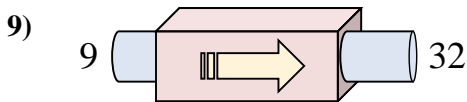
- A. addiere 15
B. subtrahiere 17
C. addiere 10
D. addiere 16



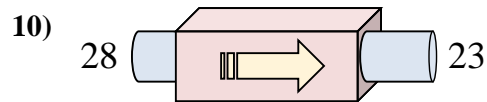
- A. addiere 26
B. subtrahiere 31
C. subtrahiere 28
D. subtrahiere 29



- A. subtrahiere 13
B. addiere 9
C. subtrahiere 10
D. addiere 15



- A. subtrahiere 23
B. addiere 23
C. addiere 18
D. subtrahiere 22

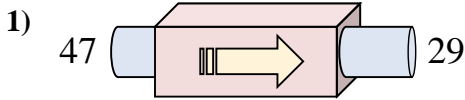


- A. subtrahiere 8
B. subtrahiere 5
C. addiere 4
D. subtrahiere 1

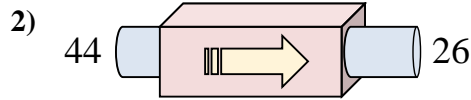
Antworten1. **C**2. **C**3. **D**4. **C**5. **A**6. **A**7. **C**8. **A**9. **B**10. **B**



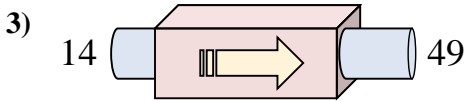
Stelle fest, welche Regel die Funktionsmaschine anwendet.



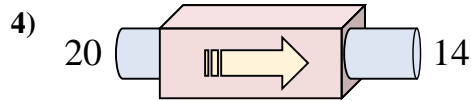
- A. addiere 15
- B. subtrahiere 15
- C. subtrahiere 18
- D. subtrahiere 20



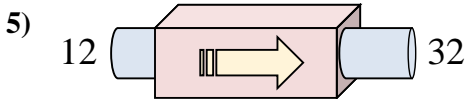
- A. addiere 13
- B. subtrahiere 15
- C. addiere 18
- D. subtrahiere 18



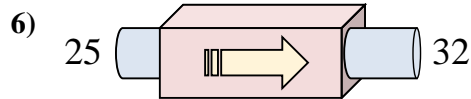
- A. addiere 39
- B. addiere 30
- C. addiere 35
- D. addiere 36



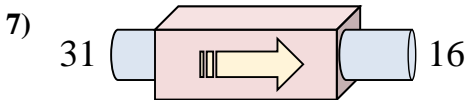
- A. addiere 8
- B. subtrahiere 6
- C. subtrahiere 7
- D. subtrahiere 8



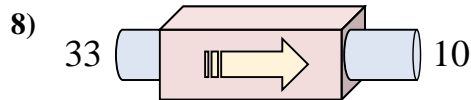
- A. addiere 20
- B. subtrahiere 23
- C. addiere 18
- D. addiere 16



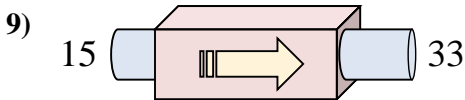
- A. addiere 7
- B. addiere 9
- C. addiere 2
- D. subtrahiere 8



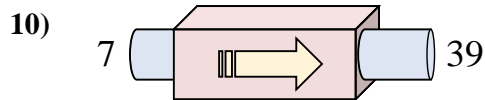
- A. addiere 19
- B. subtrahiere 17
- C. subtrahiere 20
- D. subtrahiere 15



- A. subtrahiere 28
- B. addiere 19
- C. subtrahiere 23
- D. subtrahiere 18



- A. addiere 14
- B. subtrahiere 18
- C. addiere 17
- D. addiere 18



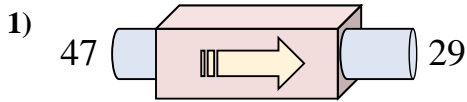
- A. addiere 35
- B. addiere 32
- C. subtrahiere 34
- D. addiere 33

Antworten

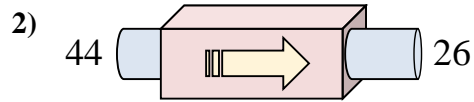
- 1. _____
- 2. _____
- 3. _____
- 4. _____
- 5. _____
- 6. _____
- 7. _____
- 8. _____
- 9. _____
- 10. _____



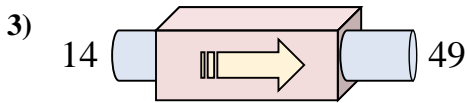
Stelle fest, welche Regel die Funktionsmaschine anwendet.



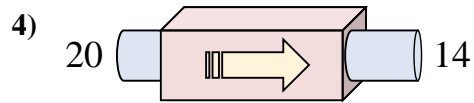
- A. addiere 15
 B. subtrahiere 15
 C. subtrahiere 18
 D. subtrahiere 20



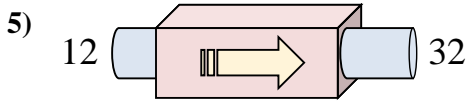
- A. addiere 13
 B. subtrahiere 15
 C. addiere 18
 D. subtrahiere 18



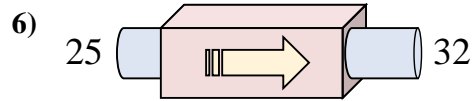
- A. addiere 39
 B. addiere 30
 C. addiere 35
 D. addiere 36



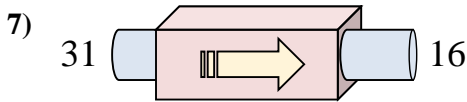
- A. addiere 8
 B. subtrahiere 6
 C. subtrahiere 7
 D. subtrahiere 8



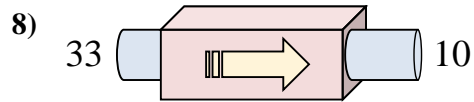
- A. addiere 20
 B. subtrahiere 23
 C. addiere 18
 D. addiere 16



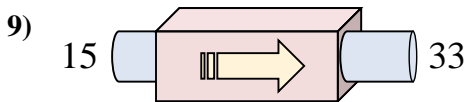
- A. addiere 7
 B. addiere 9
 C. addiere 2
 D. subtrahiere 8



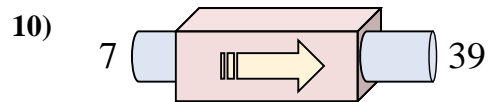
- A. addiere 19
 B. subtrahiere 17
 C. subtrahiere 20
 D. subtrahiere 15



- A. subtrahiere 28
 B. addiere 19
 C. subtrahiere 23
 D. subtrahiere 18



- A. addiere 14
 B. subtrahiere 18
 C. addiere 17
 D. addiere 18



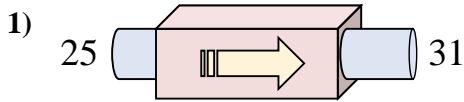
- A. addiere 35
 B. addiere 32
 C. subtrahiere 34
 D. addiere 33

Antworten

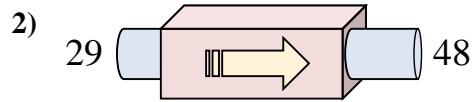
1. **C**
 2. **D**
 3. **C**
 4. **B**
 5. **A**
 6. **A**
 7. **D**
 8. **C**
 9. **D**
 10. **B**



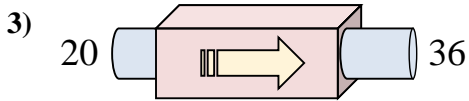
Stelle fest, welche Regel die Funktionsmaschine anwendet.



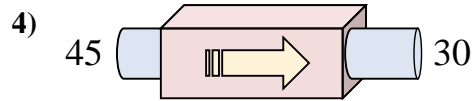
- A. addiere 2
- B. addiere 6
- C. addiere 10
- D. addiere 5



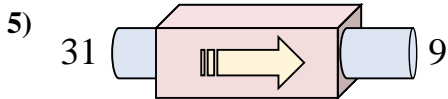
- A. addiere 19
- B. addiere 24
- C. subtrahiere 22
- D. addiere 20



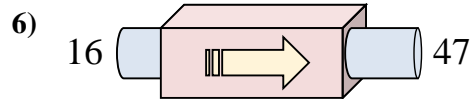
- A. subtrahiere 17
- B. addiere 20
- C. addiere 16
- D. addiere 12



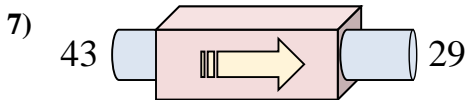
- A. subtrahiere 19
- B. subtrahiere 14
- C. subtrahiere 15
- D. subtrahiere 16



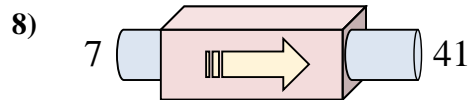
- A. subtrahiere 27
- B. addiere 23
- C. subtrahiere 26
- D. subtrahiere 22



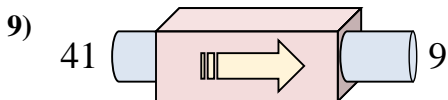
- A. addiere 31
- B. addiere 35
- C. addiere 33
- D. subtrahiere 32



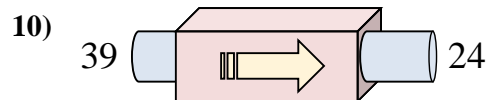
- A. subtrahiere 10
- B. subtrahiere 17
- C. addiere 18
- D. subtrahiere 14



- A. addiere 30
- B. addiere 34
- C. addiere 38
- D. addiere 31



- A. subtrahiere 35
- B. addiere 28
- C. subtrahiere 34
- D. subtrahiere 32



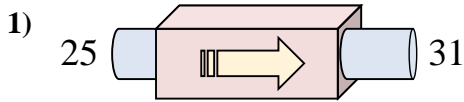
- A. subtrahiere 11
- B. subtrahiere 15
- C. subtrahiere 19
- D. addiere 15

Antworten

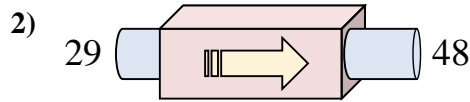
1. _____
2. _____
3. _____
4. _____
5. _____
6. _____
7. _____
8. _____
9. _____
10. _____



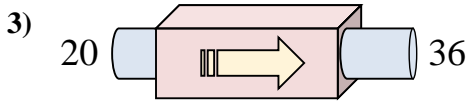
Stelle fest, welche Regel die Funktionsmaschine anwendet.



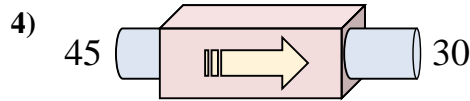
- A. addiere 2
- B. addiere 6
- C. addiere 10
- D. addiere 5



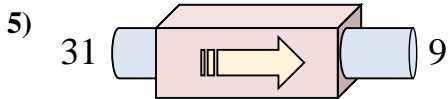
- A. addiere 19
- B. addiere 24
- C. subtrahiere 22
- D. addiere 20



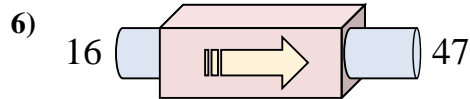
- A. subtrahiere 17
- B. addiere 20
- C. addiere 16
- D. addiere 12



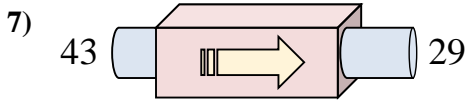
- A. subtrahiere 19
- B. subtrahiere 14
- C. subtrahiere 15
- D. subtrahiere 16



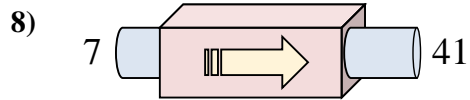
- A. subtrahiere 27
- B. addiere 23
- C. subtrahiere 26
- D. subtrahiere 22



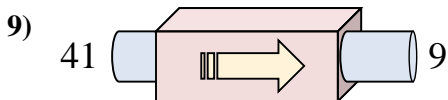
- A. addiere 31
- B. addiere 35
- C. addiere 33
- D. subtrahiere 32



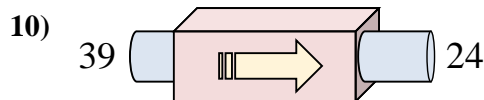
- A. subtrahiere 10
- B. subtrahiere 17
- C. addiere 18
- D. subtrahiere 14



- A. addiere 30
- B. addiere 34
- C. addiere 38
- D. addiere 31



- A. subtrahiere 35
- B. addiere 28
- C. subtrahiere 34
- D. subtrahiere 32



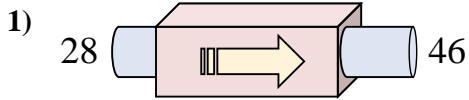
- A. subtrahiere 11
- B. subtrahiere 15
- C. subtrahiere 19
- D. addiere 15

Antworten

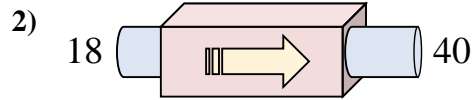
1. **B**
2. **A**
3. **C**
4. **C**
5. **D**
6. **A**
7. **D**
8. **B**
9. **D**
10. **B**



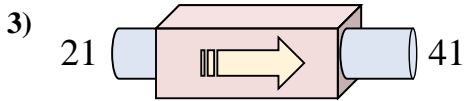
Stelle fest, welche Regel die Funktionsmaschine anwendet.



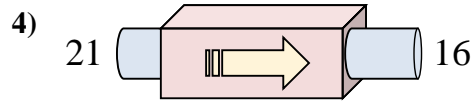
- A. addiere 23
 B. addiere 19
 C. addiere 18
 D. subtrahiere 19



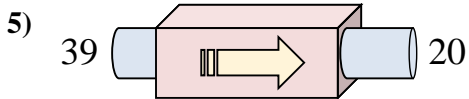
- A. addiere 27
 B. addiere 22
 C. subtrahiere 20
 D. addiere 17



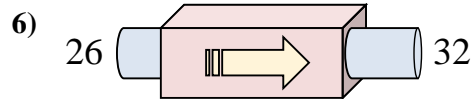
- A. subtrahiere 21
 B. addiere 20
 C. addiere 16
 D. addiere 15



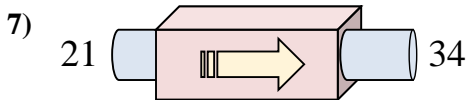
- A. subtrahiere 1
 B. subtrahiere 3
 C. subtrahiere 10
 D. subtrahiere 5



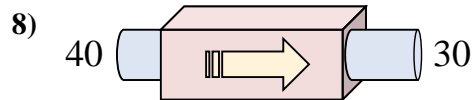
- A. addiere 20
 B. subtrahiere 24
 C. subtrahiere 16
 D. subtrahiere 19



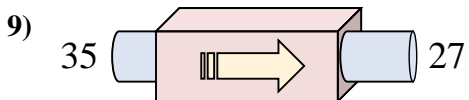
- A. subtrahiere 11
 B. subtrahiere 8
 C. addiere 11
 D. addiere 6



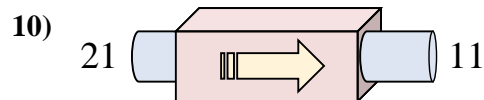
- A. addiere 14
 B. addiere 18
 C. addiere 13
 D. addiere 10



- A. subtrahiere 10
 B. subtrahiere 15
 C. subtrahiere 5
 D. addiere 11



- A. subtrahiere 8
 B. subtrahiere 5
 C. subtrahiere 3
 D. addiere 7



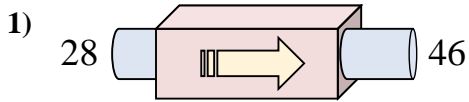
- A. subtrahiere 14
 B. addiere 15
 C. subtrahiere 10
 D. subtrahiere 12

Antworten

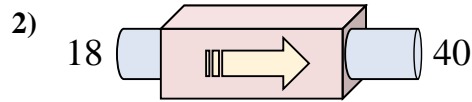
1. _____
 2. _____
 3. _____
 4. _____
 5. _____
 6. _____
 7. _____
 8. _____
 9. _____
 10. _____



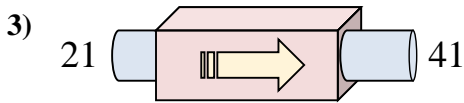
Stelle fest, welche Regel die Funktionsmaschine anwendet.



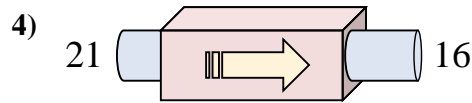
- A. addiere 23
- B. addiere 19
- C. addiere 18
- D. subtrahiere 19



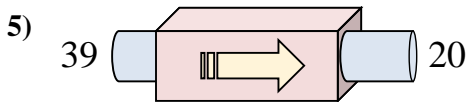
- A. addiere 27
- B. addiere 22
- C. subtrahiere 20
- D. addiere 17



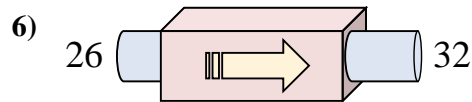
- A. subtrahiere 21
- B. addiere 20
- C. addiere 16
- D. addiere 15



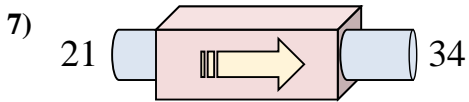
- A. subtrahiere 1
- B. subtrahiere 3
- C. subtrahiere 10
- D. subtrahiere 5



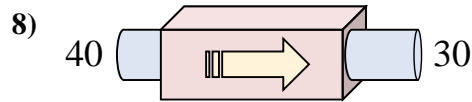
- A. addiere 20
- B. subtrahiere 24
- C. subtrahiere 16
- D. subtrahiere 19



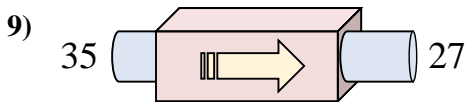
- A. subtrahiere 11
- B. subtrahiere 8
- C. addiere 11
- D. addiere 6



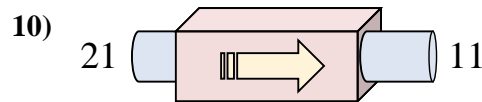
- A. addiere 14
- B. addiere 18
- C. addiere 13
- D. addiere 10



- A. subtrahiere 10
- B. subtrahiere 15
- C. subtrahiere 5
- D. addiere 11



- A. subtrahiere 8
- B. subtrahiere 5
- C. subtrahiere 3
- D. addiere 7

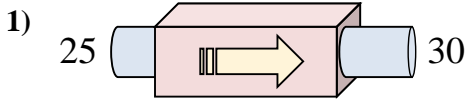


- A. subtrahiere 14
- B. addiere 15
- C. subtrahiere 10
- D. subtrahiere 12

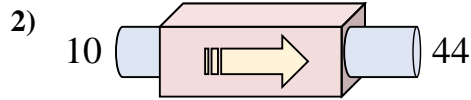
Antworten1. **C**2. **B**3. **B**4. **D**5. **D**6. **D**7. **C**8. **A**9. **A**10. **C**



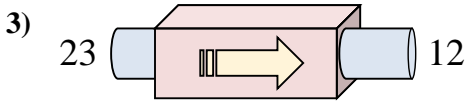
Stelle fest, welche Regel die Funktionsmaschine anwendet.



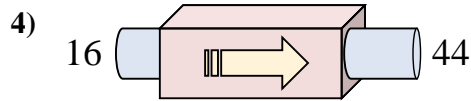
- A. addiere 5
- B. subtrahiere 7
- C. addiere 9
- D. subtrahiere 4



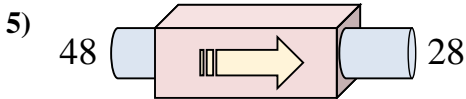
- A. addiere 38
- B. addiere 33
- C. addiere 29
- D. addiere 34



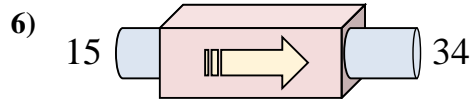
- A. subtrahiere 11
- B. subtrahiere 12
- C. subtrahiere 9
- D. addiere 11



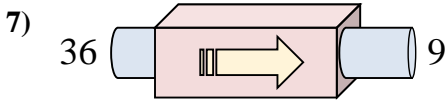
- A. addiere 28
- B. addiere 33
- C. addiere 25
- D. subtrahiere 32



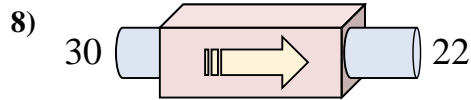
- A. subtrahiere 15
- B. subtrahiere 24
- C. addiere 25
- D. subtrahiere 20



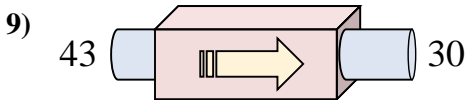
- A. subtrahiere 21
- B. addiere 17
- C. addiere 24
- D. addiere 19



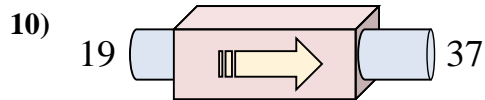
- A. subtrahiere 27
- B. addiere 30
- C. subtrahiere 25
- D. addiere 22



- A. subtrahiere 8
- B. subtrahiere 3
- C. addiere 8
- D. subtrahiere 10



- A. addiere 13
- B. subtrahiere 13
- C. addiere 9
- D. subtrahiere 10



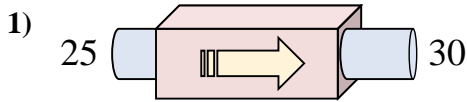
- A. subtrahiere 15
- B. addiere 18
- C. addiere 21
- D. addiere 14

Antworten

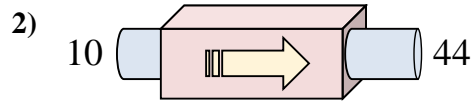
- 1. _____
- 2. _____
- 3. _____
- 4. _____
- 5. _____
- 6. _____
- 7. _____
- 8. _____
- 9. _____
- 10. _____



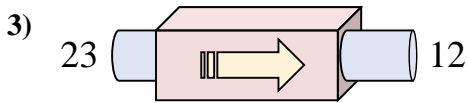
Stelle fest, welche Regel die Funktionsmaschine anwendet.



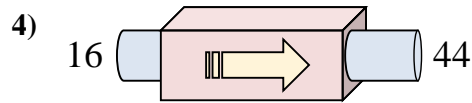
- A. addiere 5
B. subtrahiere 7
C. addiere 9
D. subtrahiere 4



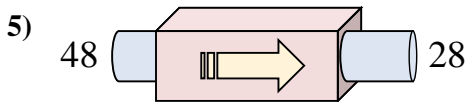
- A. addiere 38
B. addiere 33
C. addiere 29
D. addiere 34



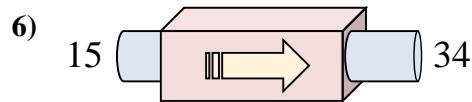
- A. subtrahiere 11
B. subtrahiere 12
C. subtrahiere 9
D. addiere 11



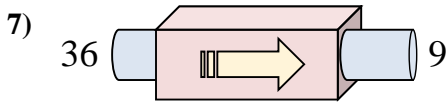
- A. addiere 28
B. addiere 33
C. addiere 25
D. subtrahiere 32



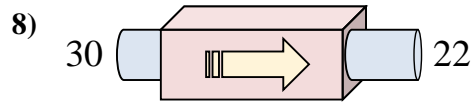
- A. subtrahiere 15
B. subtrahiere 24
C. addiere 25
D. subtrahiere 20



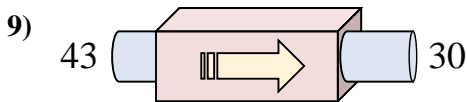
- A. subtrahiere 21
B. addiere 17
C. addiere 24
D. addiere 19



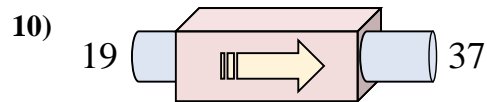
- A. subtrahiere 27
B. addiere 30
C. subtrahiere 25
D. addiere 22



- A. subtrahiere 8
B. subtrahiere 3
C. addiere 8
D. subtrahiere 10



- A. addiere 13
B. subtrahiere 13
C. addiere 9
D. subtrahiere 10

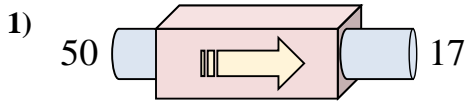


- A. subtrahiere 15
B. addiere 18
C. addiere 21
D. addiere 14

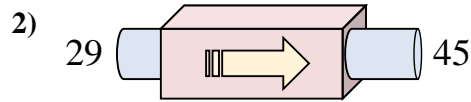
Antworten1. **A**2. **D**3. **A**4. **A**5. **D**6. **D**7. **A**8. **A**9. **B**10. **B**



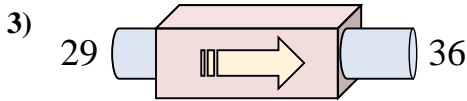
Stelle fest, welche Regel die Funktionsmaschine anwendet.



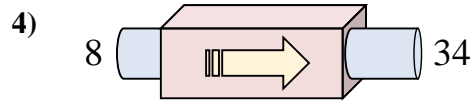
- A. subtrahiere 29
- B. subtrahiere 31
- C. addiere 29
- D. subtrahiere 33



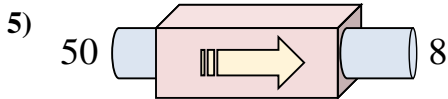
- A. addiere 18
- B. addiere 16
- C. addiere 17
- D. subtrahiere 12



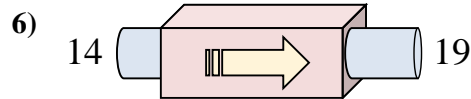
- A. addiere 2
- B. addiere 4
- C. subtrahiere 10
- D. addiere 7



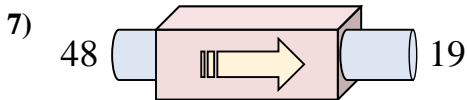
- A. addiere 26
- B. subtrahiere 29
- C. addiere 31
- D. addiere 30



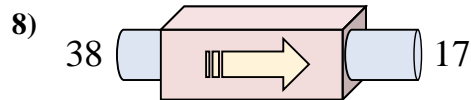
- A. subtrahiere 42
- B. subtrahiere 47
- C. subtrahiere 45
- D. subtrahiere 43



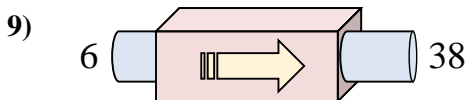
- A. addiere 3
- B. addiere 9
- C. addiere 5
- D. subtrahiere 4



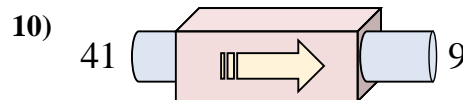
- A. addiere 34
- B. subtrahiere 31
- C. subtrahiere 29
- D. subtrahiere 24



- A. addiere 22
- B. subtrahiere 16
- C. subtrahiere 21
- D. addiere 17



- A. addiere 32
- B. addiere 34
- C. subtrahiere 31
- D. addiere 33



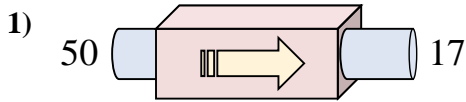
- A. subtrahiere 33
- B. subtrahiere 32
- C. subtrahiere 35
- D. addiere 27

Antworten

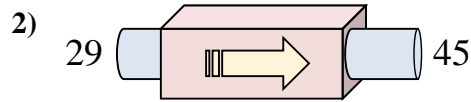
1. _____
2. _____
3. _____
4. _____
5. _____
6. _____
7. _____
8. _____
9. _____
10. _____



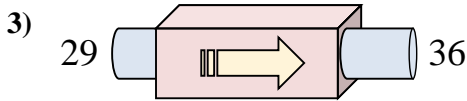
Stelle fest, welche Regel die Funktionsmaschine anwendet.



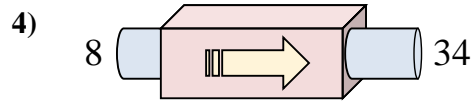
- A. subtrahiere 29
- B. subtrahiere 31
- C. addiere 29
- D. subtrahiere 33



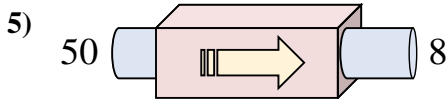
- A. addiere 18
- B. addiere 16
- C. addiere 17
- D. subtrahiere 12



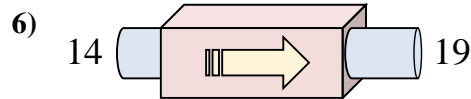
- A. addiere 2
- B. addiere 4
- C. subtrahiere 10
- D. addiere 7



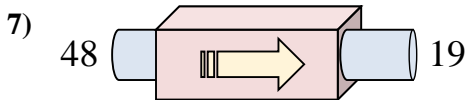
- A. addiere 26
- B. subtrahiere 29
- C. addiere 31
- D. addiere 30



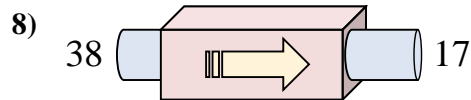
- A. subtrahiere 42
- B. subtrahiere 47
- C. subtrahiere 45
- D. subtrahiere 43



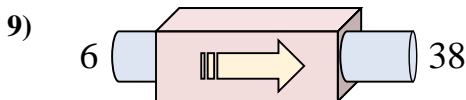
- A. addiere 3
- B. addiere 9
- C. addiere 5
- D. subtrahiere 4



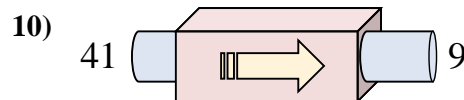
- A. addiere 34
- B. subtrahiere 31
- C. subtrahiere 29
- D. subtrahiere 24



- A. addiere 22
- B. subtrahiere 16
- C. subtrahiere 21
- D. addiere 17



- A. addiere 32
- B. addiere 34
- C. subtrahiere 31
- D. addiere 33

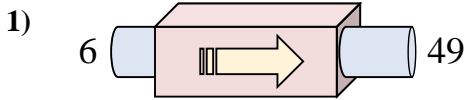


- A. subtrahiere 33
- B. subtrahiere 32
- C. subtrahiere 35
- D. addiere 27

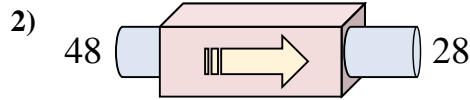
Antworten1. **D**2. **B**3. **D**4. **A**5. **A**6. **C**7. **C**8. **C**9. **A**10. **B**



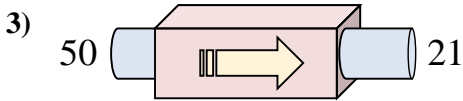
Stelle fest, welche Regel die Funktionsmaschine anwendet.



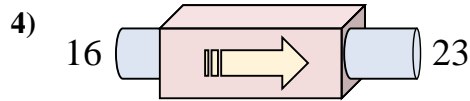
- A. addiere 45
- B. subtrahiere 42
- C. addiere 43
- D. addiere 48



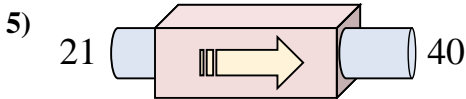
- A. subtrahiere 22
- B. subtrahiere 20
- C. subtrahiere 25
- D. addiere 22



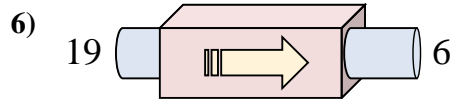
- A. subtrahiere 29
- B. addiere 34
- C. subtrahiere 28
- D. subtrahiere 31



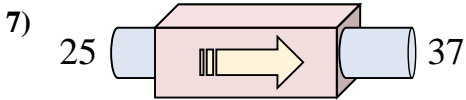
- A. subtrahiere 2
- B. addiere 6
- C. addiere 5
- D. addiere 7



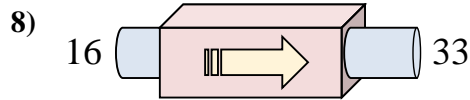
- A. addiere 24
- B. addiere 23
- C. subtrahiere 17
- D. addiere 19



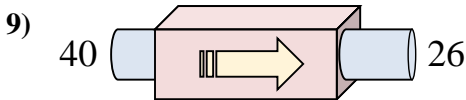
- A. subtrahiere 11
- B. addiere 17
- C. subtrahiere 17
- D. subtrahiere 13



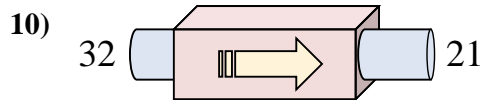
- A. addiere 12
- B. addiere 8
- C. addiere 14
- D. subtrahiere 9



- A. addiere 17
- B. subtrahiere 22
- C. subtrahiere 18
- D. addiere 15



- A. subtrahiere 11
- B. addiere 18
- C. subtrahiere 14
- D. subtrahiere 17



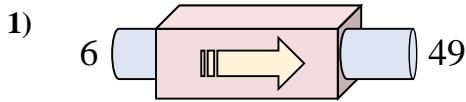
- A. subtrahiere 11
- B. subtrahiere 14
- C. subtrahiere 7
- D. addiere 7

Antworten

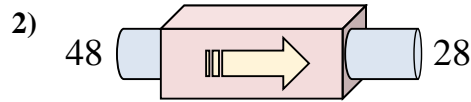
- 1. _____
- 2. _____
- 3. _____
- 4. _____
- 5. _____
- 6. _____
- 7. _____
- 8. _____
- 9. _____
- 10. _____



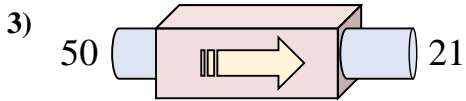
Stelle fest, welche Regel die Funktionsmaschine anwendet.



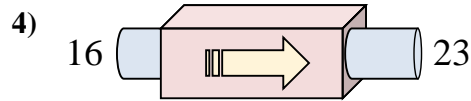
- A. addiere 45
 B. subtrahiere 42
 C. addiere 43
 D. addiere 48



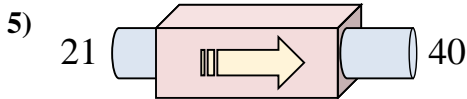
- A. subtrahiere 22
 B. subtrahiere 20
 C. subtrahiere 25
 D. addiere 22



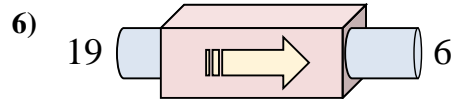
- A. subtrahiere 29
 B. addiere 34
 C. subtrahiere 28
 D. subtrahiere 31



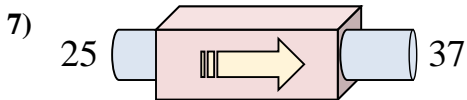
- A. subtrahiere 2
 B. addiere 6
 C. addiere 5
 D. addiere 7



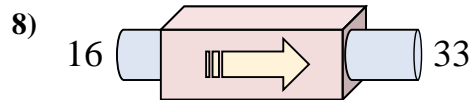
- A. addiere 24
 B. addiere 23
 C. subtrahiere 17
 D. addiere 19



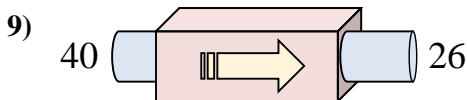
- A. subtrahiere 11
 B. addiere 17
 C. subtrahiere 17
 D. subtrahiere 13



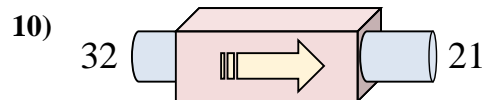
- A. addiere 12
 B. addiere 8
 C. addiere 14
 D. subtrahiere 9



- A. addiere 17
 B. subtrahiere 22
 C. subtrahiere 18
 D. addiere 15



- A. subtrahiere 11
 B. addiere 18
 C. subtrahiere 14
 D. subtrahiere 17



- A. subtrahiere 11
 B. subtrahiere 14
 C. subtrahiere 7
 D. addiere 7

Antworten1. **C**2. **B**3. **A**4. **D**5. **D**6. **D**7. **A**8. **A**9. **C**10. **A**