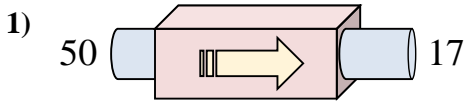
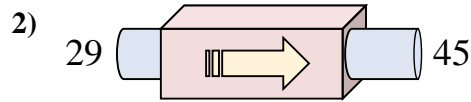




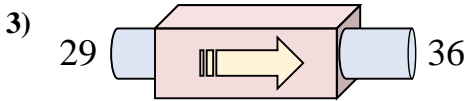
Stelle fest, welche Regel die Funktionsmaschine anwendet.



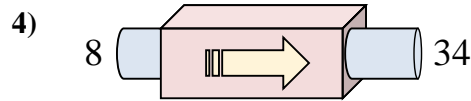
- A. subtrahiere 29
- B. subtrahiere 31
- C. addiere 29
- D. subtrahiere 33



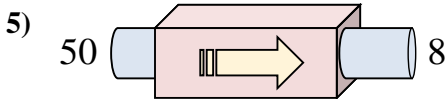
- A. addiere 18
- B. addiere 16
- C. addiere 17
- D. subtrahiere 12



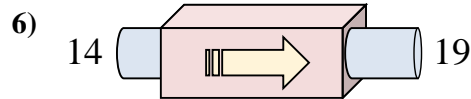
- A. addiere 2
- B. addiere 4
- C. subtrahiere 10
- D. addiere 7



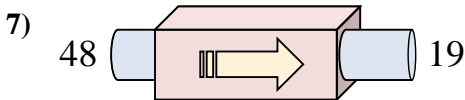
- A. addiere 26
- B. subtrahiere 29
- C. addiere 31
- D. addiere 30



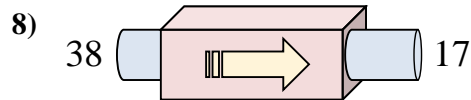
- A. subtrahiere 42
- B. subtrahiere 47
- C. subtrahiere 45
- D. subtrahiere 43



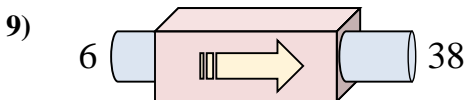
- A. addiere 3
- B. addiere 9
- C. addiere 5
- D. subtrahiere 4



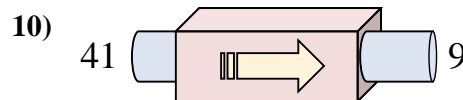
- A. addiere 34
- B. subtrahiere 31
- C. subtrahiere 29
- D. subtrahiere 24



- A. addiere 22
- B. subtrahiere 16
- C. subtrahiere 21
- D. addiere 17



- A. addiere 32
- B. addiere 34
- C. subtrahiere 31
- D. addiere 33



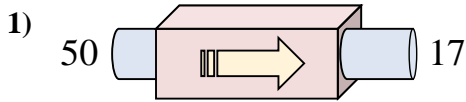
- A. subtrahiere 33
- B. subtrahiere 32
- C. subtrahiere 35
- D. addiere 27

Antworten

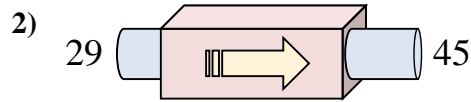
- 1. \_\_\_\_\_
- 2. \_\_\_\_\_
- 3. \_\_\_\_\_
- 4. \_\_\_\_\_
- 5. \_\_\_\_\_
- 6. \_\_\_\_\_
- 7. \_\_\_\_\_
- 8. \_\_\_\_\_
- 9. \_\_\_\_\_
- 10. \_\_\_\_\_



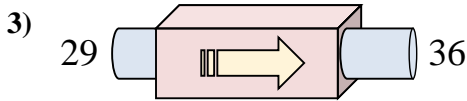
Stelle fest, welche Regel die Funktionsmaschine anwendet.



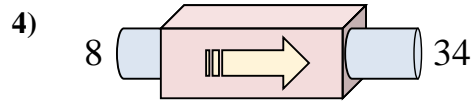
- A. subtrahiere 29
- B. subtrahiere 31
- C. addiere 29
- D. subtrahiere 33



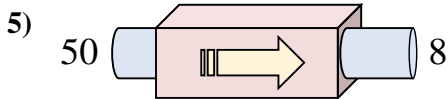
- A. addiere 18
- B. addiere 16
- C. addiere 17
- D. subtrahiere 12



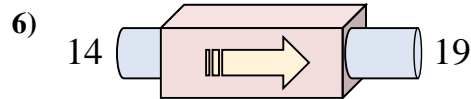
- A. addiere 2
- B. addiere 4
- C. subtrahiere 10
- D. addiere 7



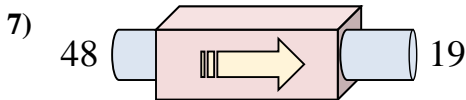
- A. addiere 26
- B. subtrahiere 29
- C. addiere 31
- D. addiere 30



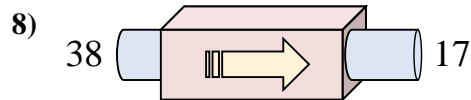
- A. subtrahiere 42
- B. subtrahiere 47
- C. subtrahiere 45
- D. subtrahiere 43



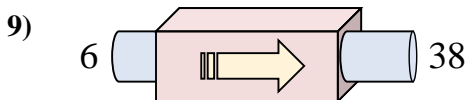
- A. addiere 3
- B. addiere 9
- C. addiere 5
- D. subtrahiere 4



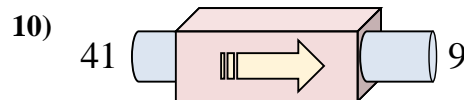
- A. addiere 34
- B. subtrahiere 31
- C. subtrahiere 29
- D. subtrahiere 24



- A. addiere 22
- B. subtrahiere 16
- C. subtrahiere 21
- D. addiere 17



- A. addiere 32
- B. addiere 34
- C. subtrahiere 31
- D. addiere 33



- A. subtrahiere 33
- B. subtrahiere 32
- C. subtrahiere 35
- D. addiere 27

**Antworten**1. **D**2. **B**3. **D**4. **A**5. **A**6. **C**7. **C**8. **C**9. **A**10. **B**