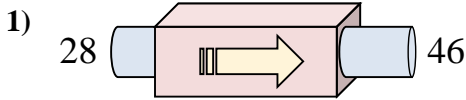
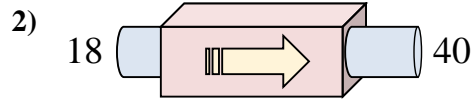




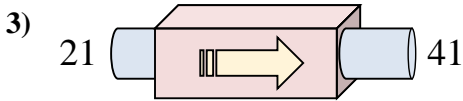
Stelle fest, welche Regel die Funktionsmaschine anwendet.



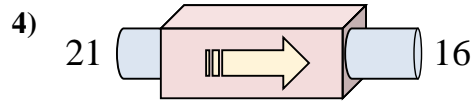
- A. addiere 23
- B. addiere 19
- C. addiere 18
- D. subtrahiere 19



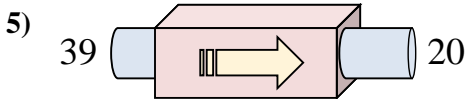
- A. addiere 27
- B. addiere 22
- C. subtrahiere 20
- D. addiere 17



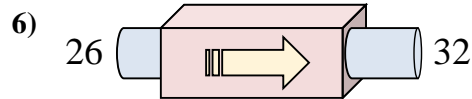
- A. subtrahiere 21
- B. addiere 20
- C. addiere 16
- D. addiere 15



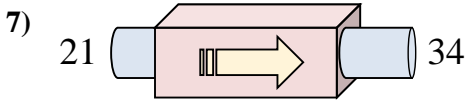
- A. subtrahiere 1
- B. subtrahiere 3
- C. subtrahiere 10
- D. subtrahiere 5



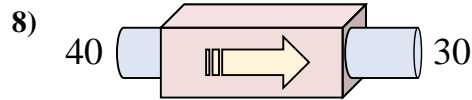
- A. addiere 20
- B. subtrahiere 24
- C. subtrahiere 16
- D. subtrahiere 19



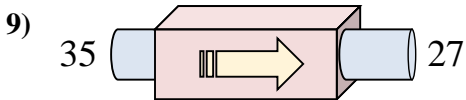
- A. subtrahiere 11
- B. subtrahiere 8
- C. addiere 11
- D. addiere 6



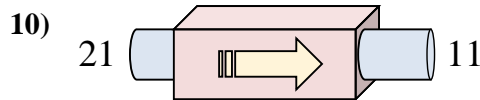
- A. addiere 14
- B. addiere 18
- C. addiere 13
- D. addiere 10



- A. subtrahiere 10
- B. subtrahiere 15
- C. subtrahiere 5
- D. addiere 11



- A. subtrahiere 8
- B. subtrahiere 5
- C. subtrahiere 3
- D. addiere 7



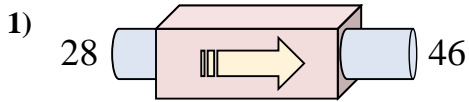
- A. subtrahiere 14
- B. addiere 15
- C. subtrahiere 10
- D. subtrahiere 12

Antworten

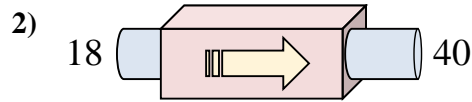
- 1. \_\_\_\_\_
- 2. \_\_\_\_\_
- 3. \_\_\_\_\_
- 4. \_\_\_\_\_
- 5. \_\_\_\_\_
- 6. \_\_\_\_\_
- 7. \_\_\_\_\_
- 8. \_\_\_\_\_
- 9. \_\_\_\_\_
- 10. \_\_\_\_\_



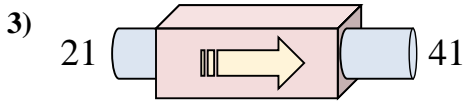
Stelle fest, welche Regel die Funktionsmaschine anwendet.



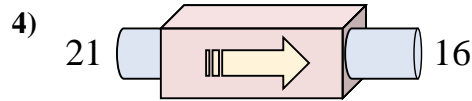
- A. addiere 23  
B. addiere 19  
C. addiere 18  
D. subtrahiere 19



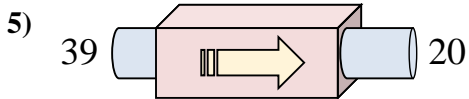
- A. addiere 27  
B. addiere 22  
C. subtrahiere 20  
D. addiere 17



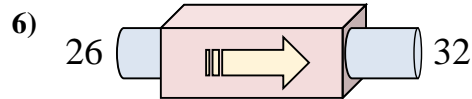
- A. subtrahiere 21  
B. addiere 20  
C. addiere 16  
D. addiere 15



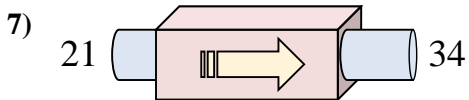
- A. subtrahiere 1  
B. subtrahiere 3  
C. subtrahiere 10  
D. subtrahiere 5



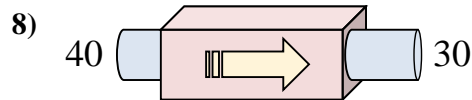
- A. addiere 20  
B. subtrahiere 24  
C. subtrahiere 16  
D. subtrahiere 19



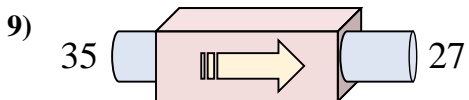
- A. subtrahiere 11  
B. subtrahiere 8  
C. addiere 11  
D. addiere 6



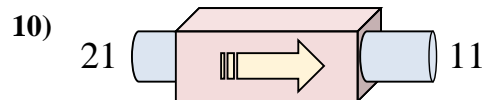
- A. addiere 14  
B. addiere 18  
C. addiere 13  
D. addiere 10



- A. subtrahiere 10  
B. subtrahiere 15  
C. subtrahiere 5  
D. addiere 11



- A. subtrahiere 8  
B. subtrahiere 5  
C. subtrahiere 3  
D. addiere 7



- A. subtrahiere 14  
B. addiere 15  
C. subtrahiere 10  
D. subtrahiere 12

**Antworten**1. **C**2. **B**3. **B**4. **D**5. **D**6. **D**7. **C**8. **A**9. **A**10. **C**