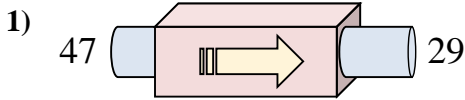
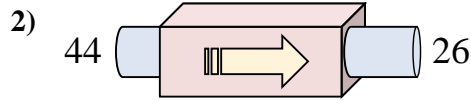




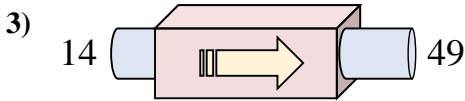
Stelle fest, welche Regel die Funktionsmaschine anwendet.



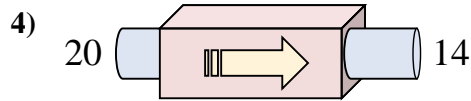
- A. addiere 15
- B. subtrahiere 15
- C. subtrahiere 18
- D. subtrahiere 20



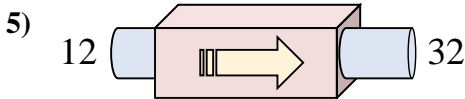
- A. addiere 13
- B. subtrahiere 15
- C. addiere 18
- D. subtrahiere 18



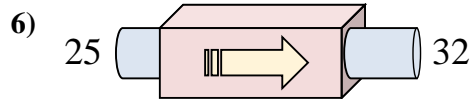
- A. addiere 39
- B. addiere 30
- C. addiere 35
- D. addiere 36



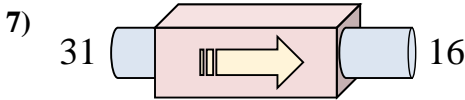
- A. addiere 8
- B. subtrahiere 6
- C. subtrahiere 7
- D. subtrahiere 8



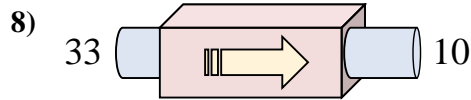
- A. addiere 20
- B. subtrahiere 23
- C. addiere 18
- D. addiere 16



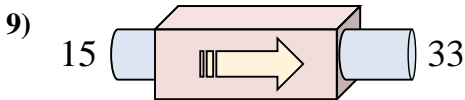
- A. addiere 7
- B. addiere 9
- C. addiere 2
- D. subtrahiere 8



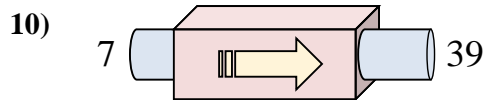
- A. addiere 19
- B. subtrahiere 17
- C. subtrahiere 20
- D. subtrahiere 15



- A. subtrahiere 28
- B. addiere 19
- C. subtrahiere 23
- D. subtrahiere 18



- A. addiere 14
- B. subtrahiere 18
- C. addiere 17
- D. addiere 18



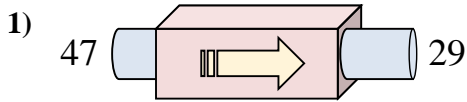
- A. addiere 35
- B. addiere 32
- C. subtrahiere 34
- D. addiere 33

Antworten

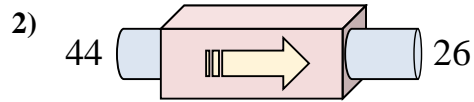
- 1. \_\_\_\_\_
- 2. \_\_\_\_\_
- 3. \_\_\_\_\_
- 4. \_\_\_\_\_
- 5. \_\_\_\_\_
- 6. \_\_\_\_\_
- 7. \_\_\_\_\_
- 8. \_\_\_\_\_
- 9. \_\_\_\_\_
- 10. \_\_\_\_\_



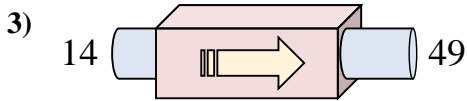
Stelle fest, welche Regel die Funktionsmaschine anwendet.



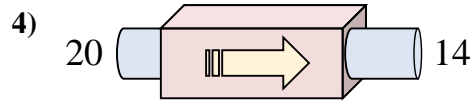
- A. addiere 15  
 B. subtrahiere 15  
 C. subtrahiere 18  
 D. subtrahiere 20



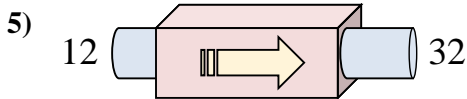
- A. addiere 13  
 B. subtrahiere 15  
 C. addiere 18  
 D. subtrahiere 18



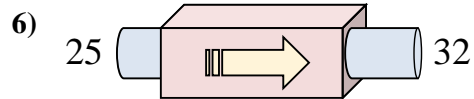
- A. addiere 39  
 B. addiere 30  
 C. addiere 35  
 D. addiere 36



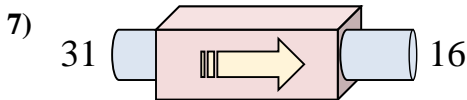
- A. addiere 8  
 B. subtrahiere 6  
 C. subtrahiere 7  
 D. subtrahiere 8



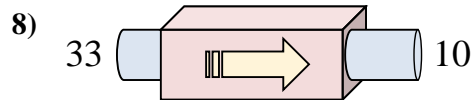
- A. addiere 20  
 B. subtrahiere 23  
 C. addiere 18  
 D. addiere 16



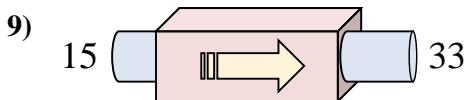
- A. addiere 7  
 B. addiere 9  
 C. addiere 2  
 D. subtrahiere 8



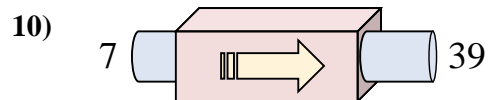
- A. addiere 19  
 B. subtrahiere 17  
 C. subtrahiere 20  
 D. subtrahiere 15



- A. subtrahiere 28  
 B. addiere 19  
 C. subtrahiere 23  
 D. subtrahiere 18



- A. addiere 14  
 B. subtrahiere 18  
 C. addiere 17  
 D. addiere 18



- A. addiere 35  
 B. addiere 32  
 C. subtrahiere 34  
 D. addiere 33

**Antworten**1. **C**2. **D**3. **C**4. **B**5. **A**6. **A**7. **D**8. **C**9. **D**10. **B**