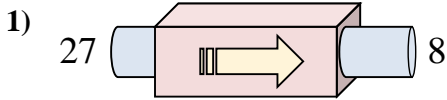
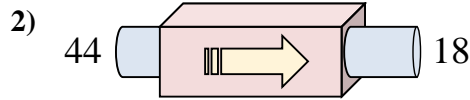




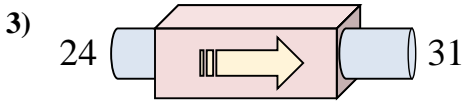
Stelle fest, welche Regel die Funktionsmaschine anwendet.



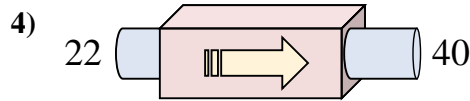
- A. subtrahiere 21
- B. subtrahiere 17
- C. subtrahiere 19
- D. subtrahiere 20



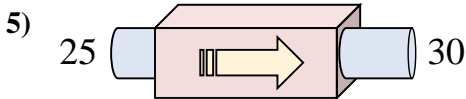
- A. addiere 28
- B. subtrahiere 24
- C. subtrahiere 26
- D. subtrahiere 22



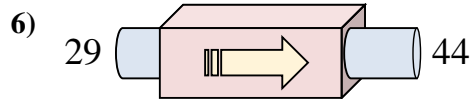
- A. addiere 9
- B. subtrahiere 6
- C. addiere 10
- D. addiere 7



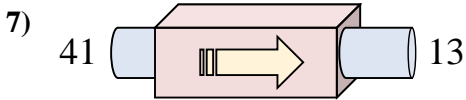
- A. subtrahiere 16
- B. addiere 17
- C. addiere 18
- D. addiere 22



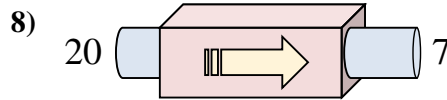
- A. addiere 5
- B. addiere 9
- C. addiere 10
- D. subtrahiere 5



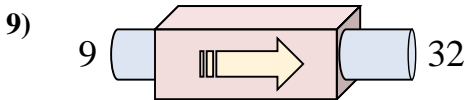
- A. addiere 15
- B. subtrahiere 17
- C. addiere 10
- D. addiere 16



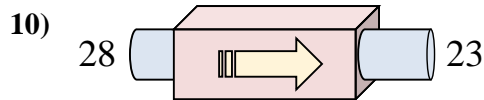
- A. addiere 26
- B. subtrahiere 31
- C. subtrahiere 28
- D. subtrahiere 29



- A. subtrahiere 13
- B. addiere 9
- C. subtrahiere 10
- D. addiere 15



- A. subtrahiere 23
- B. addiere 23
- C. addiere 18
- D. subtrahiere 22



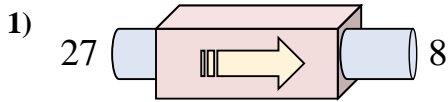
- A. subtrahiere 8
- B. subtrahiere 5
- C. addiere 4
- D. subtrahiere 1

Antworten

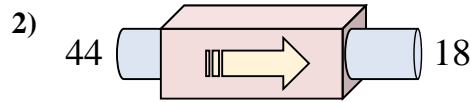
1. _____
2. _____
3. _____
4. _____
5. _____
6. _____
7. _____
8. _____
9. _____
10. _____



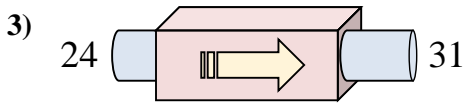
Stelle fest, welche Regel die Funktionsmaschine anwendet.



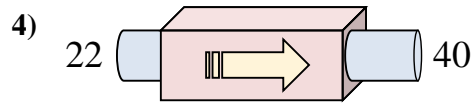
- A. subtrahiere 21
 B. subtrahiere 17
 C. subtrahiere 19
 D. subtrahiere 20



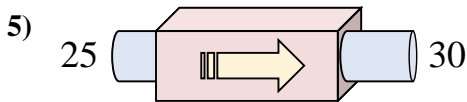
- A. addiere 28
 B. subtrahiere 24
 C. subtrahiere 26
 D. subtrahiere 22



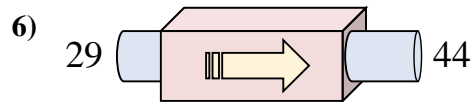
- A. addiere 9
 B. subtrahiere 6
 C. addiere 10
 D. addiere 7



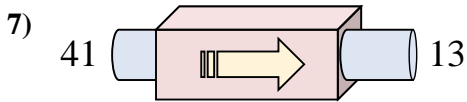
- A. subtrahiere 16
 B. addiere 17
 C. addiere 18
 D. addiere 22



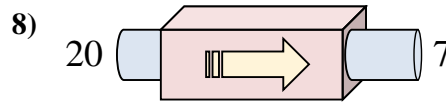
- A. addiere 5
 B. addiere 9
 C. addiere 10
 D. subtrahiere 5



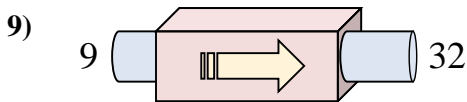
- A. addiere 15
 B. subtrahiere 17
 C. addiere 10
 D. addiere 16



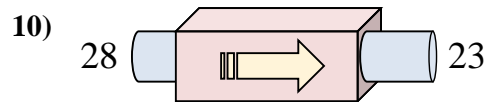
- A. addiere 26
 B. subtrahiere 31
 C. subtrahiere 28
 D. subtrahiere 29



- A. subtrahiere 13
 B. addiere 9
 C. subtrahiere 10
 D. addiere 15



- A. subtrahiere 23
 B. addiere 23
 C. addiere 18
 D. subtrahiere 22



- A. subtrahiere 8
 B. subtrahiere 5
 C. addiere 4
 D. subtrahiere 1

Antworten1. **C**2. **C**3. **D**4. **C**5. **A**6. **A**7. **C**8. **A**9. **B**10. **B**