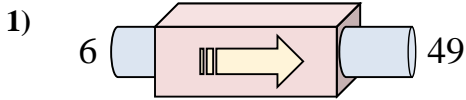


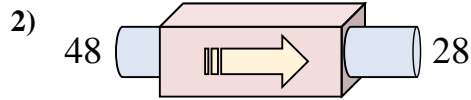


Stelle fest, welche Regel die Funktionsmaschine anwendet.

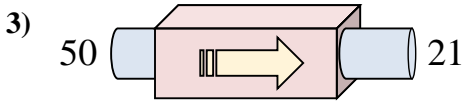
Antworten



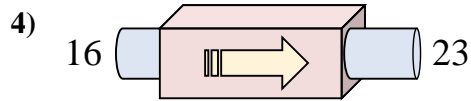
- A. addiere 45
- B. subtrahiere 42
- C. addiere 43
- D. addiere 48



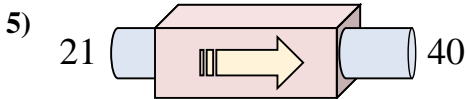
- A. subtrahiere 22
- B. subtrahiere 20
- C. subtrahiere 25
- D. addiere 22



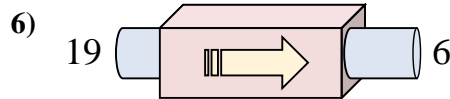
- A. subtrahiere 29
- B. addiere 34
- C. subtrahiere 28
- D. subtrahiere 31



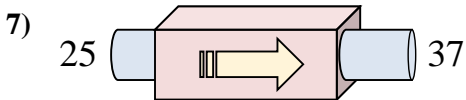
- A. subtrahiere 2
- B. addiere 6
- C. addiere 5
- D. addiere 7



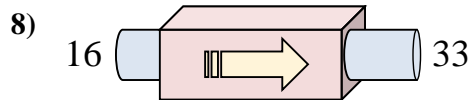
- A. addiere 24
- B. addiere 23
- C. subtrahiere 17
- D. addiere 19



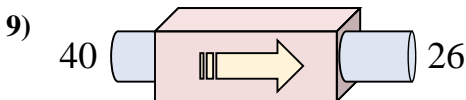
- A. subtrahiere 11
- B. addiere 17
- C. subtrahiere 17
- D. subtrahiere 13



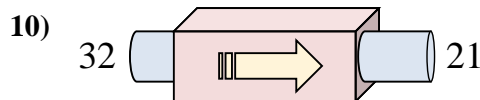
- A. addiere 12
- B. addiere 8
- C. addiere 14
- D. subtrahiere 9



- A. addiere 17
- B. subtrahiere 22
- C. subtrahiere 18
- D. addiere 15



- A. subtrahiere 11
- B. addiere 18
- C. subtrahiere 14
- D. subtrahiere 17

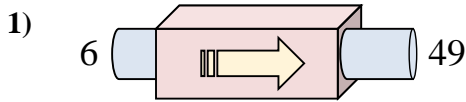


- A. subtrahiere 11
- B. subtrahiere 14
- C. subtrahiere 7
- D. addiere 7

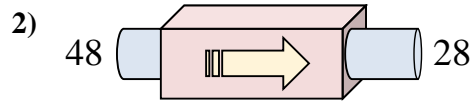
- 1. _____
- 2. _____
- 3. _____
- 4. _____
- 5. _____
- 6. _____
- 7. _____
- 8. _____
- 9. _____
- 10. _____



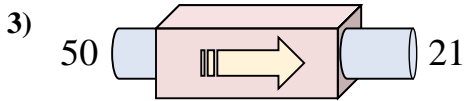
Stelle fest, welche Regel die Funktionsmaschine anwendet.



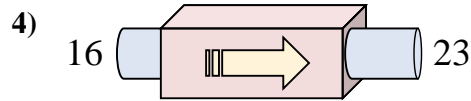
- A. addiere 45
- B. subtrahiere 42
- C. addiere 43
- D. addiere 48



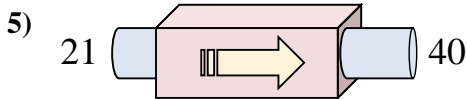
- A. subtrahiere 22
- B. subtrahiere 20
- C. subtrahiere 25
- D. addiere 22



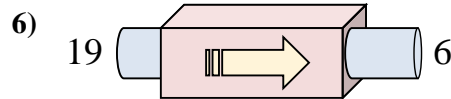
- A. subtrahiere 29
- B. addiere 34
- C. subtrahiere 28
- D. subtrahiere 31



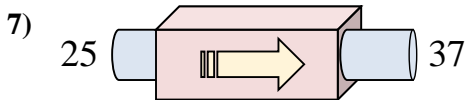
- A. subtrahiere 2
- B. addiere 6
- C. addiere 5
- D. addiere 7



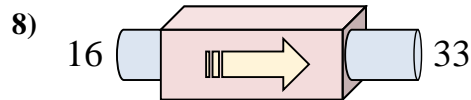
- A. addiere 24
- B. addiere 23
- C. subtrahiere 17
- D. addiere 19



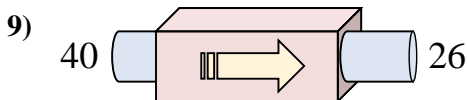
- A. subtrahiere 11
- B. addiere 17
- C. subtrahiere 17
- D. subtrahiere 13



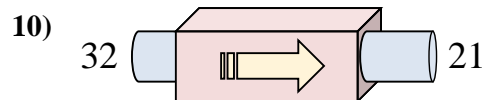
- A. addiere 12
- B. addiere 8
- C. addiere 14
- D. subtrahiere 9



- A. addiere 17
- B. subtrahiere 22
- C. subtrahiere 18
- D. addiere 15



- A. subtrahiere 11
- B. addiere 18
- C. subtrahiere 14
- D. subtrahiere 17



- A. subtrahiere 11
- B. subtrahiere 14
- C. subtrahiere 7
- D. addiere 7

Antworten1. **C**2. **B**3. **A**4. **D**5. **D**6. **D**7. **A**8. **A**9. **C**10. **A**