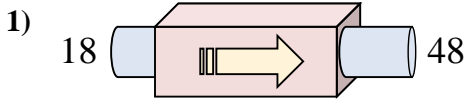
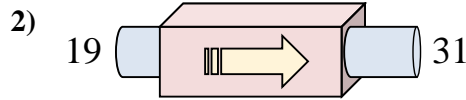




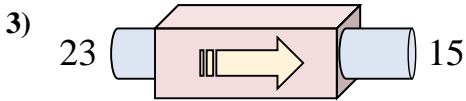
Stelle fest, welche Regel die Funktionsmaschine anwendet.



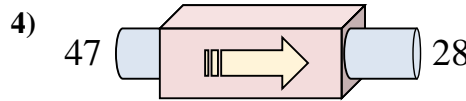
- A. subtrahiere 28
- B. subtrahiere 30
- C. addiere 30
- D. addiere 31



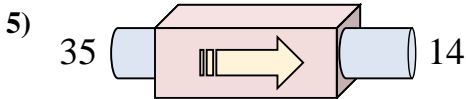
- A. addiere 12
- B. addiere 17
- C. subtrahiere 10
- D. addiere 14



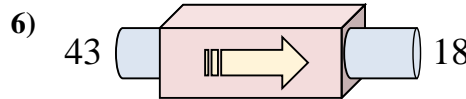
- A. subtrahiere 4
- B. subtrahiere 8
- C. addiere 10
- D. addiere 12



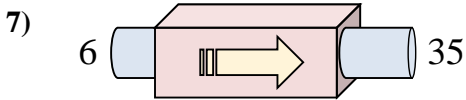
- A. subtrahiere 23
- B. subtrahiere 24
- C. subtrahiere 19
- D. addiere 15



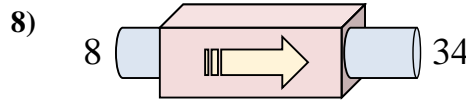
- A. subtrahiere 21
- B. subtrahiere 18
- C. subtrahiere 22
- D. addiere 17



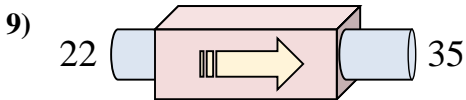
- A. subtrahiere 25
- B. subtrahiere 30
- C. subtrahiere 20
- D. subtrahiere 21



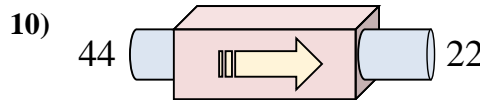
- A. addiere 26
- B. addiere 25
- C. addiere 29
- D. addiere 33



- A. addiere 26
- B. addiere 21
- C. subtrahiere 22
- D. addiere 28



- A. subtrahiere 8
- B. addiere 8
- C. subtrahiere 11
- D. addiere 13



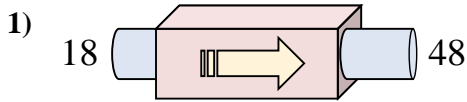
- A. subtrahiere 17
- B. subtrahiere 27
- C. addiere 23
- D. subtrahiere 22

Antworten

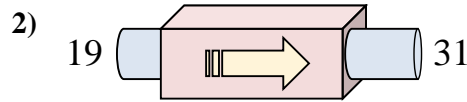
- 1. _____
- 2. _____
- 3. _____
- 4. _____
- 5. _____
- 6. _____
- 7. _____
- 8. _____
- 9. _____
- 10. _____



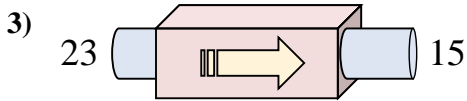
Stelle fest, welche Regel die Funktionsmaschine anwendet.



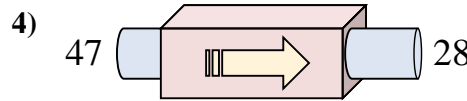
- A. subtrahiere 28
- B. subtrahiere 30
- C. addiere 30
- D. addiere 31



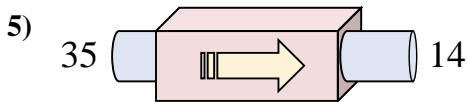
- A. addiere 12
- B. addiere 17
- C. subtrahiere 10
- D. addiere 14



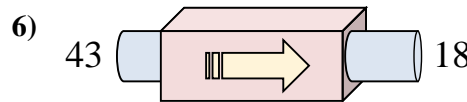
- A. subtrahiere 4
- B. subtrahiere 8
- C. addiere 10
- D. addiere 12



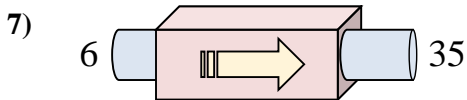
- A. subtrahiere 23
- B. subtrahiere 24
- C. subtrahiere 19
- D. addiere 15



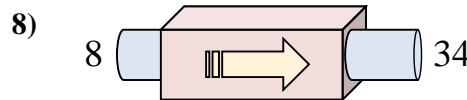
- A. subtrahiere 21
- B. subtrahiere 18
- C. subtrahiere 22
- D. addiere 17



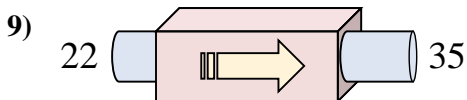
- A. subtrahiere 25
- B. subtrahiere 30
- C. subtrahiere 20
- D. subtrahiere 21



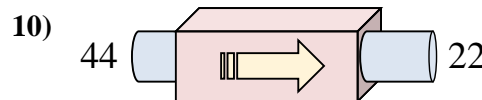
- A. addiere 26
- B. addiere 25
- C. addiere 29
- D. addiere 33



- A. addiere 26
- B. addiere 21
- C. subtrahiere 22
- D. addiere 28



- A. subtrahiere 8
- B. addiere 8
- C. subtrahiere 11
- D. addiere 13



- A. subtrahiere 17
- B. subtrahiere 27
- C. addiere 23
- D. subtrahiere 22

Antworten1. **C**2. **A**3. **B**4. **C**5. **A**6. **A**7. **C**8. **A**9. **D**10. **D**