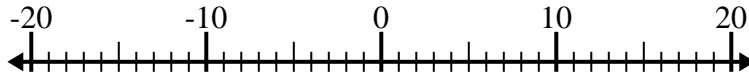


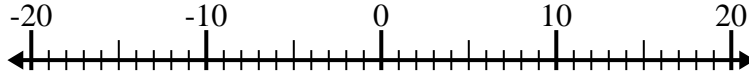


Löse jede Aufgabe. Benutze den Zahlenstrahl, falls du ihn brauchst.

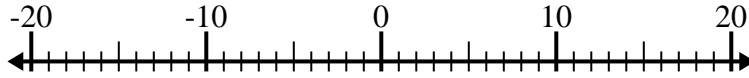
1) $12 - (-1) =$ _____



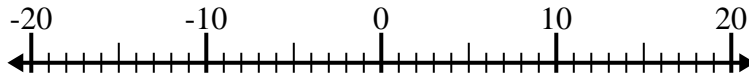
2) $(-10) - (-15) =$ _____



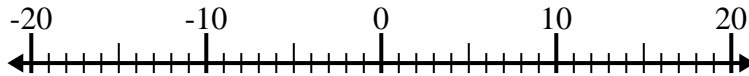
3) $(-1) - (-7) =$ _____



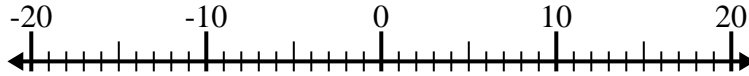
4) $(-7) + 14 =$ _____



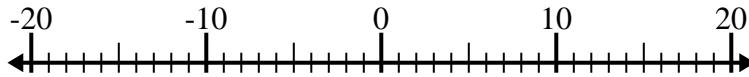
5) $12 + (-9) =$ _____



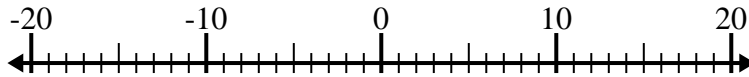
6) $(-9) + (-5) =$ _____



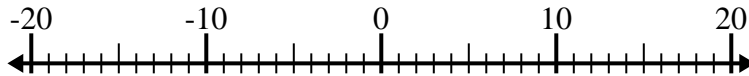
7) $3 - (-1) =$ _____



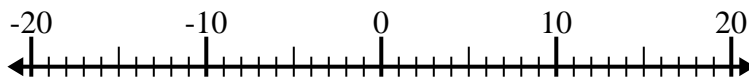
8) $(-14) - (-6) =$ _____



9) $(-12) + 2 =$ _____



10) $(-2) + (-15) =$ _____

**Antworten**

1. _____

2. _____

3. _____

4. _____

5. _____

6. _____

7. _____

8. _____

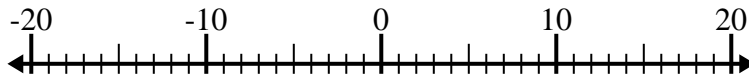
9. _____

10. _____

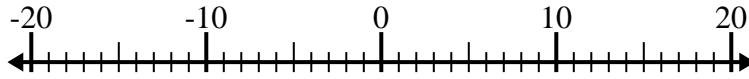


Löse jede Aufgabe. Benutze den Zahlenstrahl, falls du ihn brauchst.

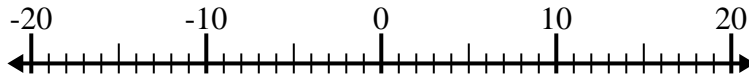
1) $12 - (-1) = \underline{13}$



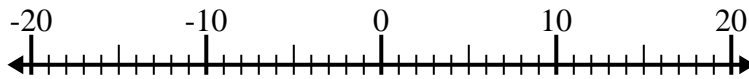
2) $(-10) - (-15) = \underline{5}$



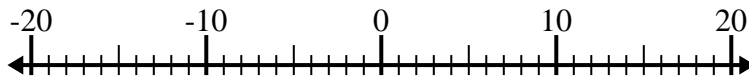
3) $(-1) - (-7) = \underline{6}$



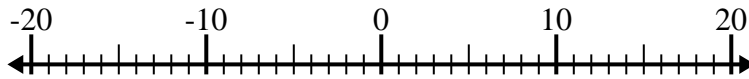
4) $(-7) + 14 = \underline{7}$



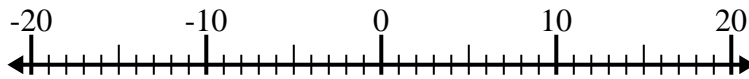
5) $12 + (-9) = \underline{3}$



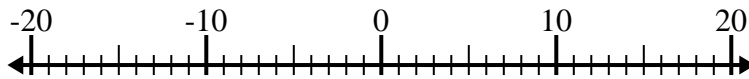
6) $(-9) + (-5) = \underline{-14}$



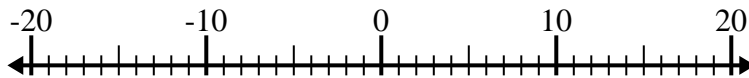
7) $3 - (-1) = \underline{4}$



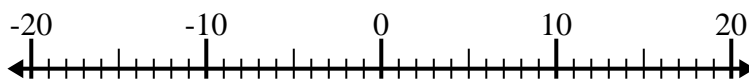
8) $(-14) - (-6) = \underline{-8}$



9) $(-12) + 2 = \underline{-10}$



10) $(-2) + (-15) = \underline{-17}$



Antworten

1. 13

2. 5

3. 6

4. 7

5. 3

6. -14

7. 4

8. -8

9. -10

10. -17