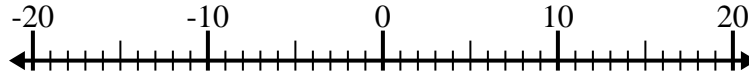


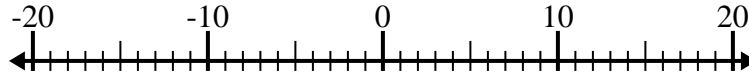


Löse jede Aufgabe. Benutze den Zahlenstrahl, falls du ihn brauchst.

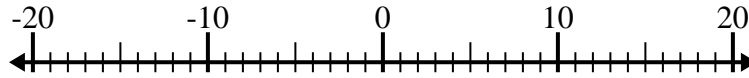
1) $15 + (-11) =$ _____



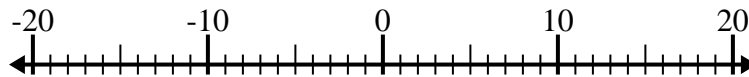
2) $9 - (-6) =$ _____



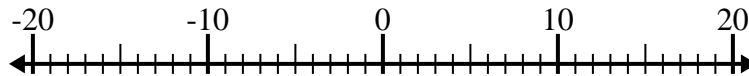
3) $5 - (-10) =$ _____



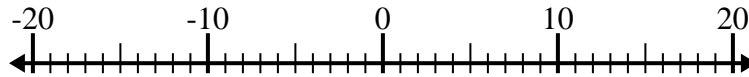
4) $8 - (-12) =$ _____



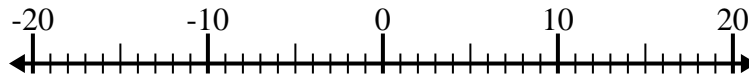
5) $(-12) - 8 =$ _____



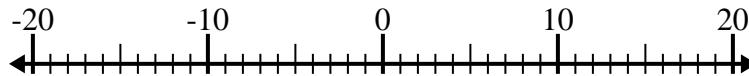
6) $(-1) + (-3) =$ _____



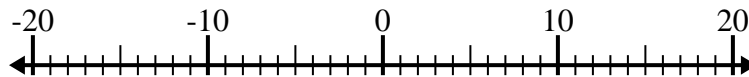
7) $(-14) + (-6) =$ _____



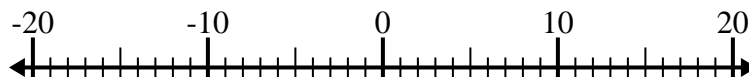
8) $(-8) - 3 =$ _____



9) $(-5) - 14 =$ _____



10) $4 + (-15) =$ _____

Antworten

1. _____

2. _____

3. _____

4. _____

5. _____

6. _____

7. _____

8. _____

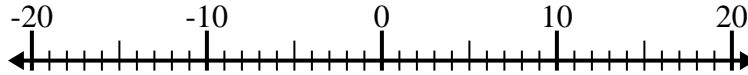
9. _____

10. _____

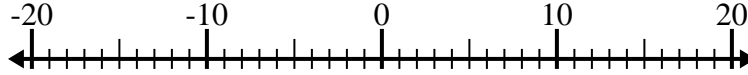


Löse jede Aufgabe. Benutze den Zahlenstrahl, falls du ihn brauchst.

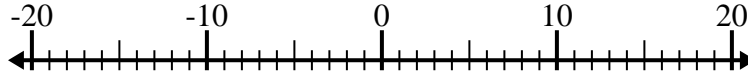
1) $15 + (-11) = \underline{4}$



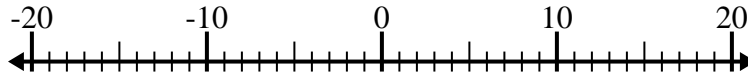
2) $9 - (-6) = \underline{15}$



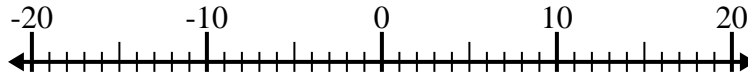
3) $5 - (-10) = \underline{15}$



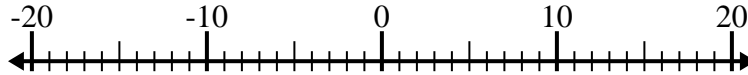
4) $8 - (-12) = \underline{20}$



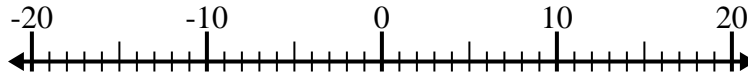
5) $(-12) - 8 = \underline{-20}$



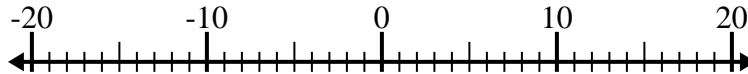
6) $(-1) + (-3) = \underline{-4}$



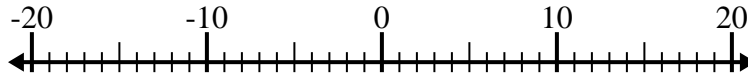
7) $(-14) + (-6) = \underline{-20}$



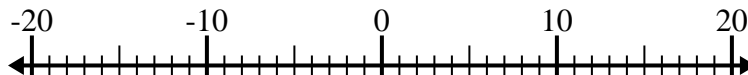
8) $(-8) - 3 = \underline{-11}$



9) $(-5) - 14 = \underline{-19}$



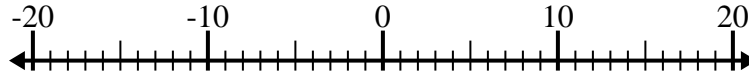
10) $4 + (-15) = \underline{-11}$

**Antworten**1. 42. 153. 154. 205. -206. -47. -208. -119. -1910. -11

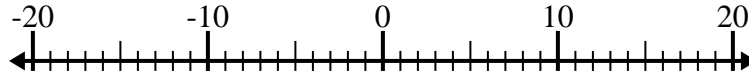


Löse jede Aufgabe. Benutze den Zahlenstrahl, falls du ihn brauchst.

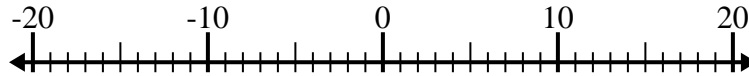
1) $(-1) - (-6) =$ _____



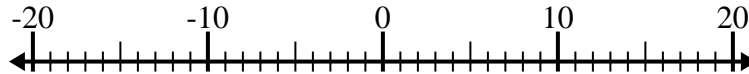
2) $5 - (-12) =$ _____



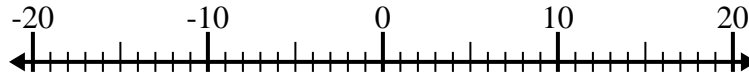
3) $(-12) + (-5) =$ _____



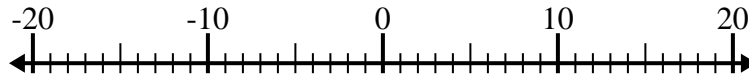
4) $(-2) - 14 =$ _____



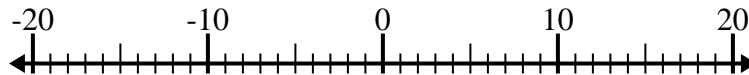
5) $(-6) - (-8) =$ _____



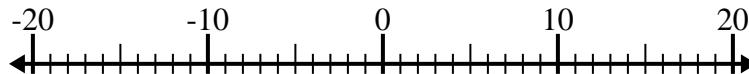
6) $(-8) + 9 =$ _____



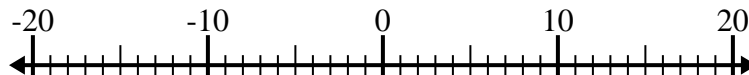
7) $2 - (-13) =$ _____



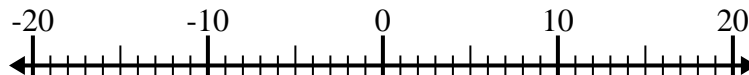
8) $(-7) - 5 =$ _____



9) $(-12) + 10 =$ _____



10) $6 - (-4) =$ _____

Antworten

1. _____

2. _____

3. _____

4. _____

5. _____

6. _____

7. _____

8. _____

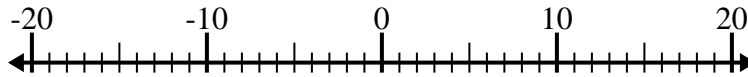
9. _____

10. _____

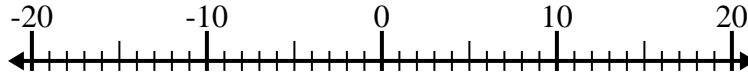


Löse jede Aufgabe. Benutze den Zahlenstrahl, falls du ihn brauchst.

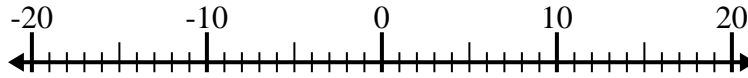
1) $(-1) - (-6) = \underline{5}$



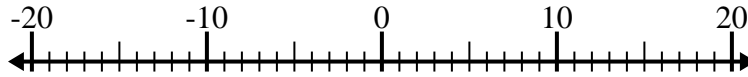
2) $5 - (-12) = \underline{17}$



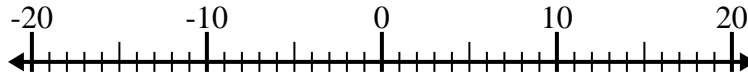
3) $(-12) + (-5) = \underline{-17}$



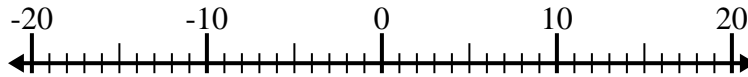
4) $(-2) - 14 = \underline{-16}$



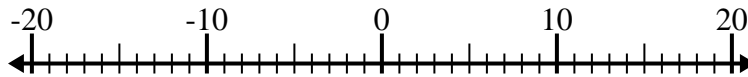
5) $(-6) - (-8) = \underline{2}$



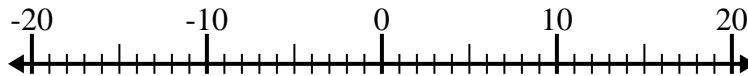
6) $(-8) + 9 = \underline{1}$



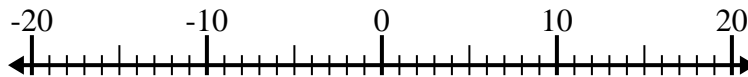
7) $2 - (-13) = \underline{15}$



8) $(-7) - 5 = \underline{-12}$



9) $(-12) + 10 = \underline{-2}$



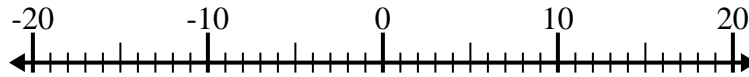
10) $6 - (-4) = \underline{10}$

**Antworten**1. 52. 173. -174. -165. 26. 17. 158. -129. -210. 10

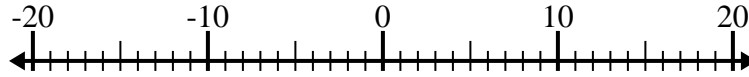


Löse jede Aufgabe. Benutze den Zahlenstrahl, falls du ihn brauchst.

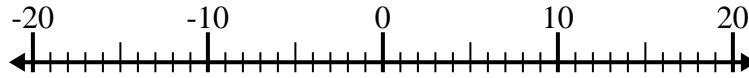
1) $7 + (-11) =$ _____



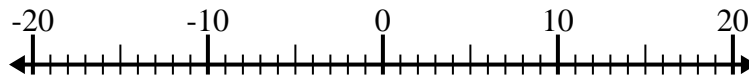
2) $(-9) - 4 =$ _____



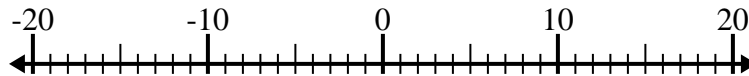
3) $13 - (-7) =$ _____



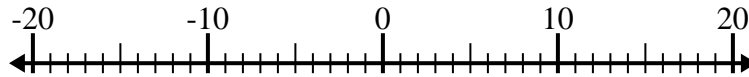
4) $11 - (-4) =$ _____



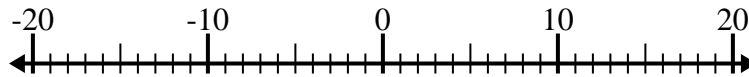
5) $5 - (-9) =$ _____



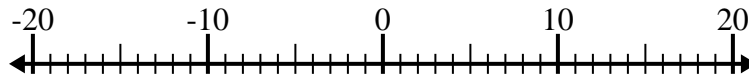
6) $(-1) - (-10) =$ _____



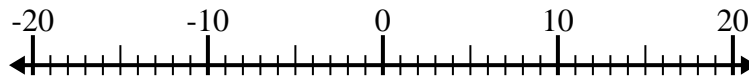
7) $(-6) - 9 =$ _____



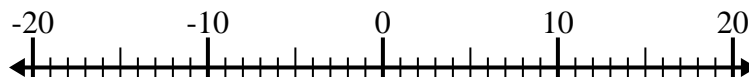
8) $(-2) - (-13) =$ _____



9) $(-10) + (-7) =$ _____



10) $1 - (-2) =$ _____

**Antworten**

1. _____

2. _____

3. _____

4. _____

5. _____

6. _____

7. _____

8. _____

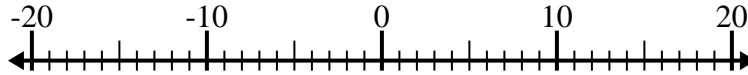
9. _____

10. _____

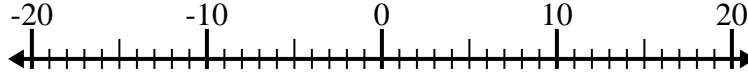


Löse jede Aufgabe. Benutze den Zahlenstrahl, falls du ihn brauchst.

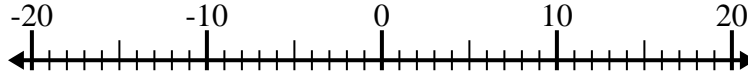
1) $7 + (-11) = \underline{-4}$



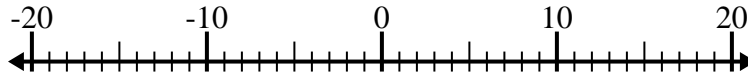
2) $(-9) - 4 = \underline{-13}$



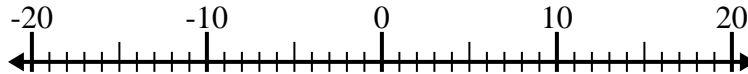
3) $13 - (-7) = \underline{20}$



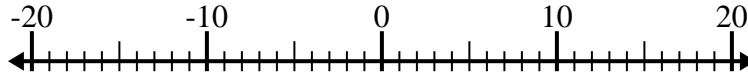
4) $11 - (-4) = \underline{15}$



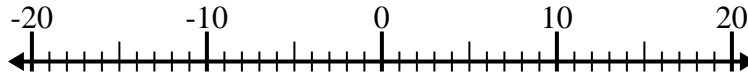
5) $5 - (-9) = \underline{14}$



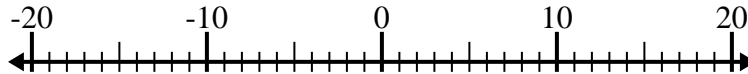
6) $(-1) - (-10) = \underline{9}$



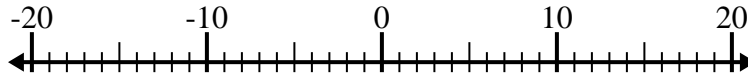
7) $(-6) - 9 = \underline{-15}$



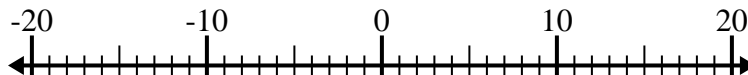
8) $(-2) - (-13) = \underline{11}$



9) $(-10) + (-7) = \underline{-17}$



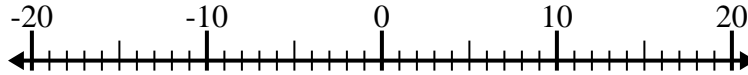
10) $1 - (-2) = \underline{3}$

**Antworten**1. **-4**2. **-13**3. **20**4. **15**5. **14**6. **9**7. **-15**8. **11**9. **-17**10. **3**

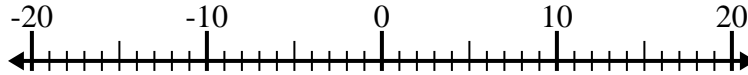


Löse jede Aufgabe. Benutze den Zahlenstrahl, falls du ihn brauchst.

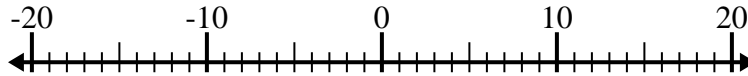
1) $2 - (-1) =$ _____



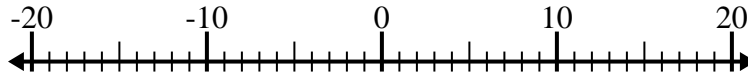
2) $12 + (-3) =$ _____



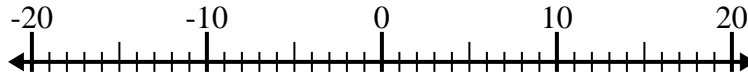
3) $10 - (-7) =$ _____



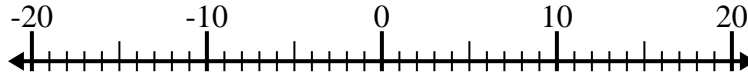
4) $(-1) - 4 =$ _____



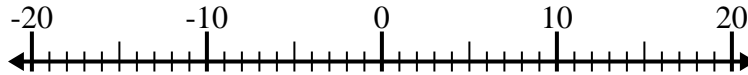
5) $(-4) + (-3) =$ _____



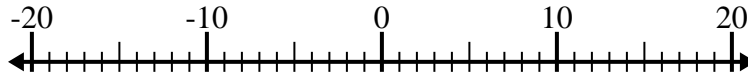
6) $5 - (-11) =$ _____



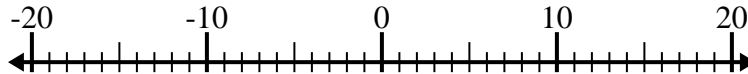
7) $1 + (-9) =$ _____



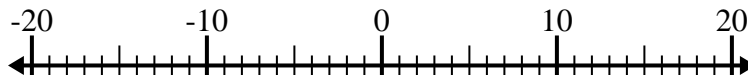
8) $(-15) + 12 =$ _____



9) $2 - (-5) =$ _____



10) $(-15) - (-13) =$ _____

Antworten

1. _____

2. _____

3. _____

4. _____

5. _____

6. _____

7. _____

8. _____

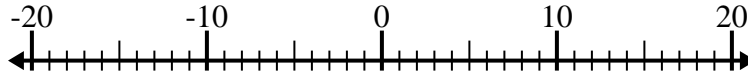
9. _____

10. _____

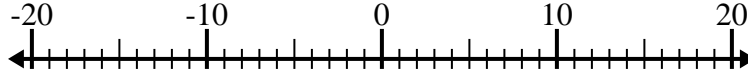


Löse jede Aufgabe. Benutze den Zahlenstrahl, falls du ihn brauchst.

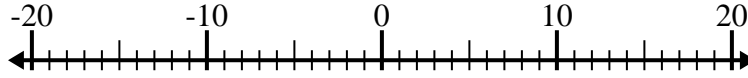
1) $2 - (-1) = \underline{3}$



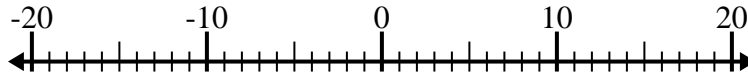
2) $12 + (-3) = \underline{9}$



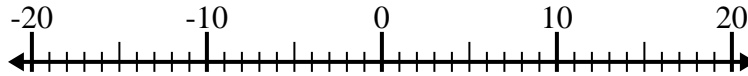
3) $10 - (-7) = \underline{17}$



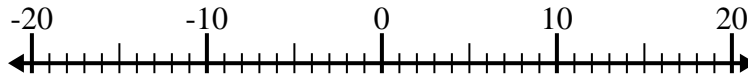
4) $(-1) - 4 = \underline{-5}$



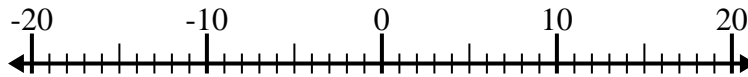
5) $(-4) + (-3) = \underline{-7}$



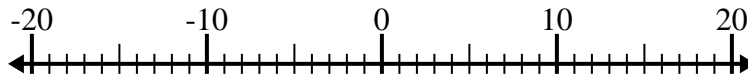
6) $5 - (-11) = \underline{16}$



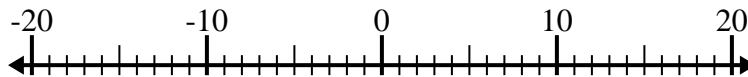
7) $1 + (-9) = \underline{-8}$



8) $(-15) + 12 = \underline{-3}$



9) $2 - (-5) = \underline{7}$



10) $(-15) - (-13) = \underline{-2}$



Antworten

1. 3

2. 9

3. 17

4. -5

5. -7

6. 16

7. -8

8. -3

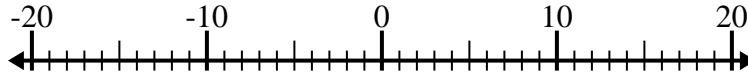
9. 7

10. -2

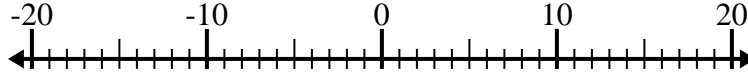


Löse jede Aufgabe. Benutze den Zahlenstrahl, falls du ihn brauchst.

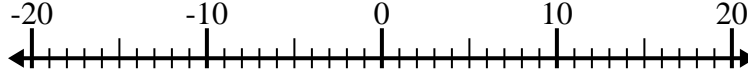
1) $(-8) + 6 =$ _____



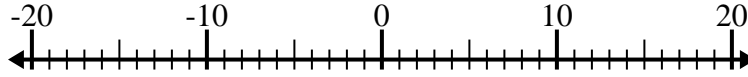
2) $1 - (-10) =$ _____



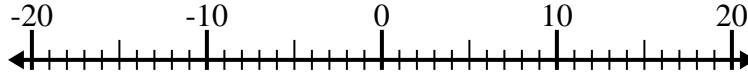
3) $2 + (-7) =$ _____



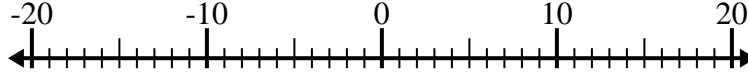
4) $(-11) - 8 =$ _____



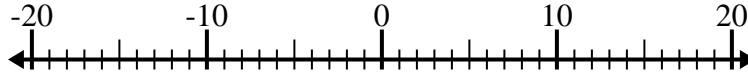
5) $4 - (-10) =$ _____



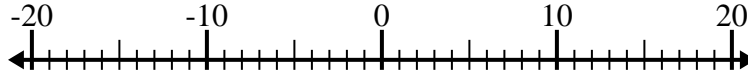
6) $(-9) - (-13) =$ _____



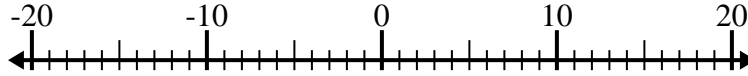
7) $(-2) + 3 =$ _____



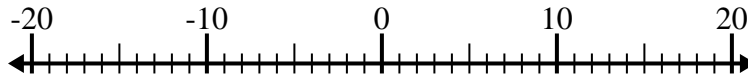
8) $13 + (-5) =$ _____



9) $(-6) + (-1) =$ _____



10) $4 - (-9) =$ _____



Antworten

1. _____

2. _____

3. _____

4. _____

5. _____

6. _____

7. _____

8. _____

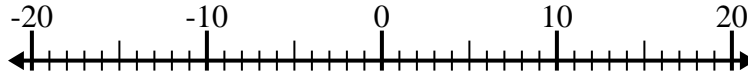
9. _____

10. _____

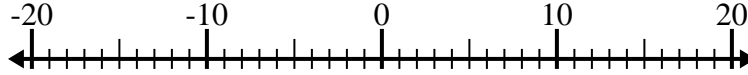


Löse jede Aufgabe. Benutze den Zahlenstrahl, falls du ihn brauchst.

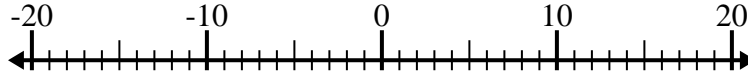
1) $(-8) + 6 = \underline{-2}$



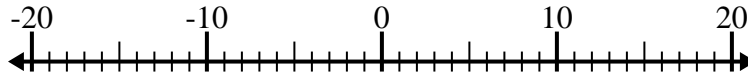
2) $1 - (-10) = \underline{11}$



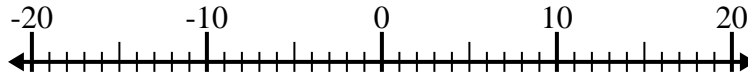
3) $2 + (-7) = \underline{-5}$



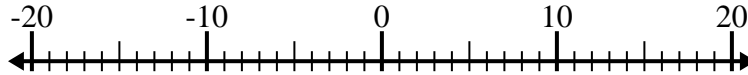
4) $(-11) - 8 = \underline{-19}$



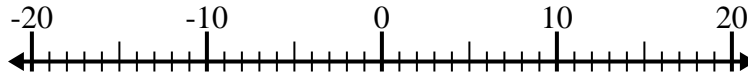
5) $4 - (-10) = \underline{14}$



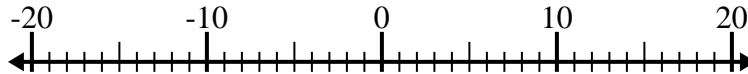
6) $(-9) - (-13) = \underline{4}$



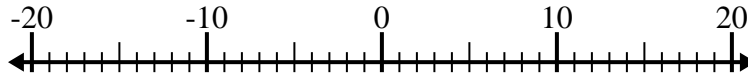
7) $(-2) + 3 = \underline{1}$



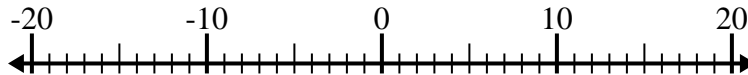
8) $13 + (-5) = \underline{8}$



9) $(-6) + (-1) = \underline{-7}$



10) $4 - (-9) = \underline{13}$



Antworten

1. -2

2. 11

3. -5

4. -19

5. 14

6. 4

7. 1

8. 8

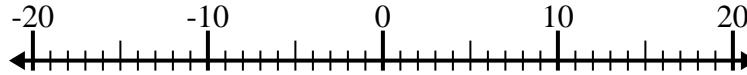
9. -7

10. 13

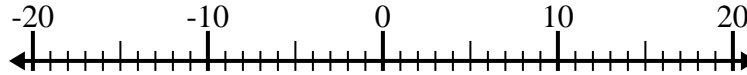


Löse jede Aufgabe. Benutze den Zahlenstrahl, falls du ihn brauchst.

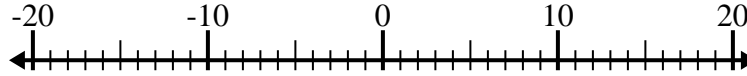
1) $6 - (-7) =$ _____



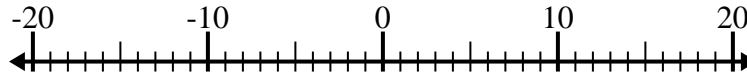
2) $7 + (-5) =$ _____



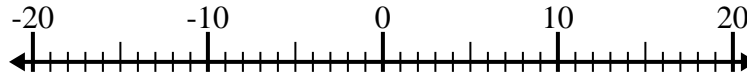
3) $(-5) + (-12) =$ _____



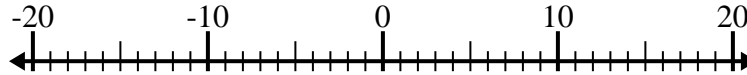
4) $(-1) - (-5) =$ _____



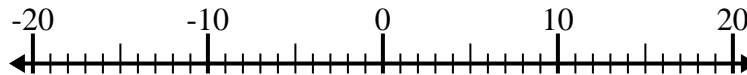
5) $(-2) + 4 =$ _____



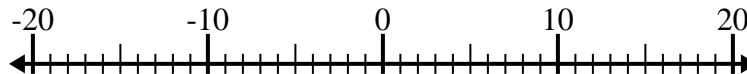
6) $(-8) + 6 =$ _____



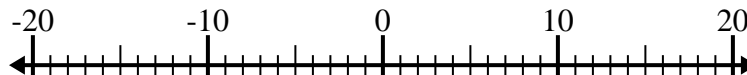
7) $5 - (-11) =$ _____



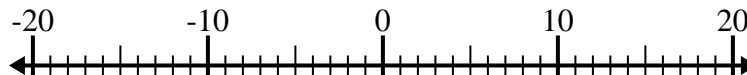
8) $(-5) - 2 =$ _____



9) $(-1) - 4 =$ _____



10) $(-4) + (-5) =$ _____

Antworten

1. _____

2. _____

3. _____

4. _____

5. _____

6. _____

7. _____

8. _____

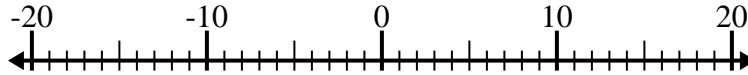
9. _____

10. _____

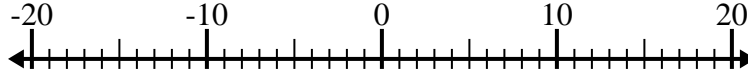


Löse jede Aufgabe. Benutze den Zahlenstrahl, falls du ihn brauchst.

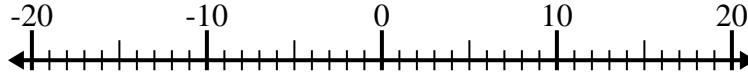
1) $6 - (-7) = \underline{13}$



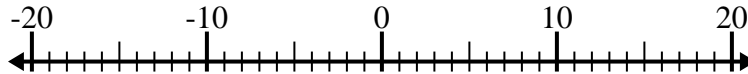
2) $7 + (-5) = \underline{2}$



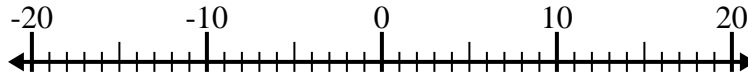
3) $(-5) + (-12) = \underline{-17}$



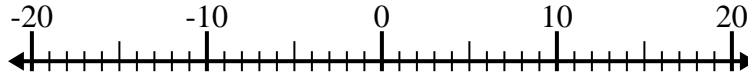
4) $(-1) - (-5) = \underline{4}$



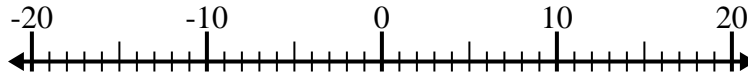
5) $(-2) + 4 = \underline{2}$



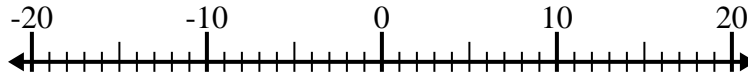
6) $(-8) + 6 = \underline{-2}$



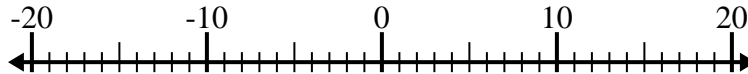
7) $5 - (-11) = \underline{16}$



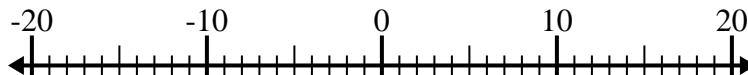
8) $(-5) - 2 = \underline{-7}$



9) $(-1) - 4 = \underline{-5}$



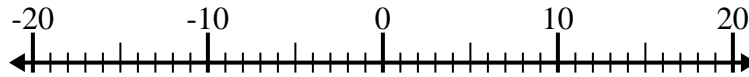
10) $(-4) + (-5) = \underline{-9}$

Antworten1. 132. 23. -174. 45. 26. -27. 168. -79. -510. -9

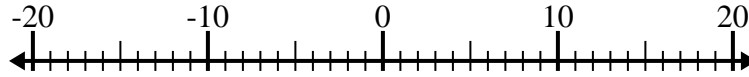


Löse jede Aufgabe. Benutze den Zahlenstrahl, falls du ihn brauchst.

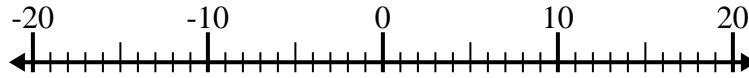
1) $12 - (-8) =$ _____



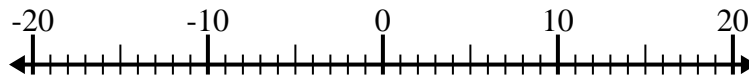
2) $(-2) - 3 =$ _____



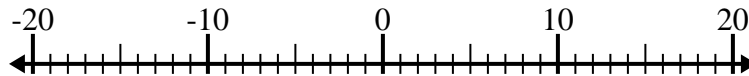
3) $7 - (-9) =$ _____



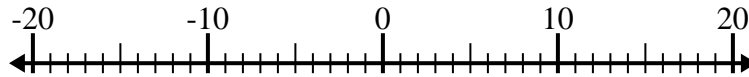
4) $11 - (-2) =$ _____



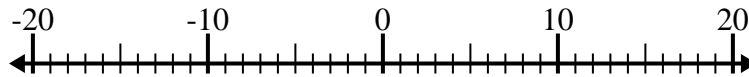
5) $6 - (-11) =$ _____



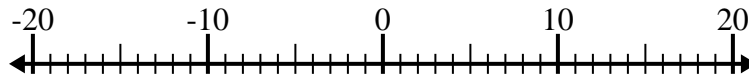
6) $(-3) + (-14) =$ _____



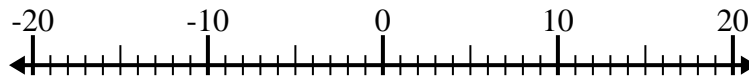
7) $(-5) - 4 =$ _____



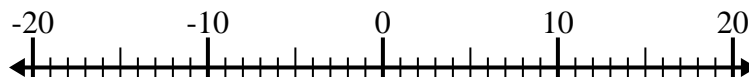
8) $(-15) + 4 =$ _____



9) $(-10) - (-13) =$ _____



10) $6 - (-12) =$ _____

**Antworten**

1. _____

2. _____

3. _____

4. _____

5. _____

6. _____

7. _____

8. _____

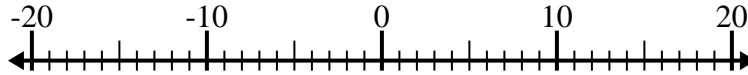
9. _____

10. _____

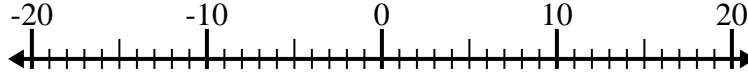


Löse jede Aufgabe. Benutze den Zahlenstrahl, falls du ihn brauchst.

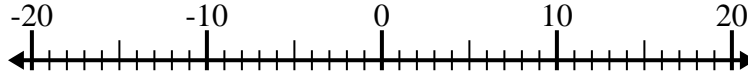
1) $12 - (-8) = \underline{20}$



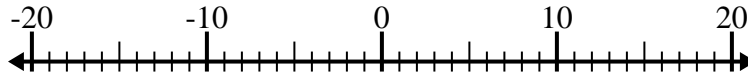
2) $(-2) - 3 = \underline{-5}$



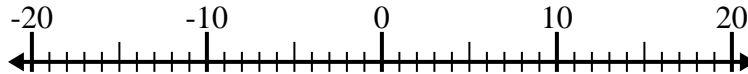
3) $7 - (-9) = \underline{16}$



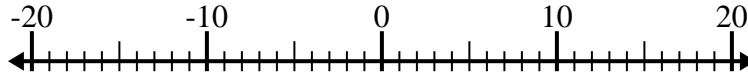
4) $11 - (-2) = \underline{13}$



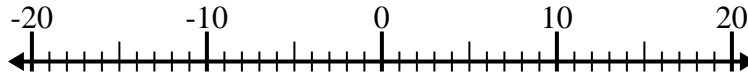
5) $6 - (-11) = \underline{17}$



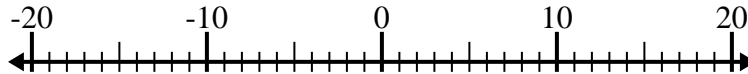
6) $(-3) + (-14) = \underline{-17}$



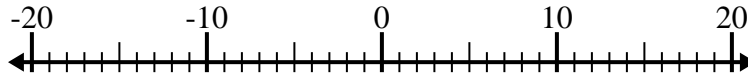
7) $(-5) - 4 = \underline{-9}$



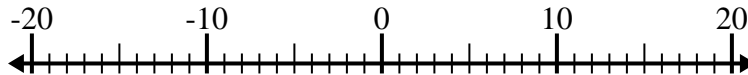
8) $(-15) + 4 = \underline{-11}$



9) $(-10) - (-13) = \underline{3}$



10) $6 - (-12) = \underline{18}$



Antworten

1. 20

2. -5

3. 16

4. 13

5. 17

6. -17

7. -9

8. -11

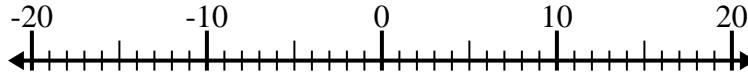
9. 3

10. 18

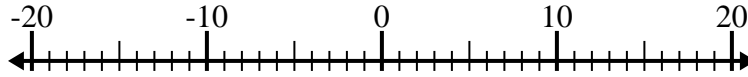


Löse jede Aufgabe. Benutze den Zahlenstrahl, falls du ihn brauchst.

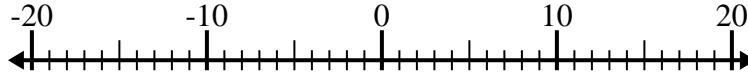
1) $(-10) - 4 =$ _____



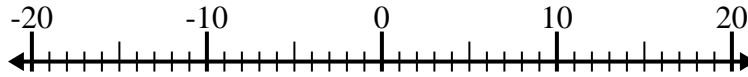
2) $6 - (-4) =$ _____



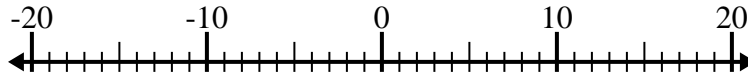
3) $5 - (-2) =$ _____



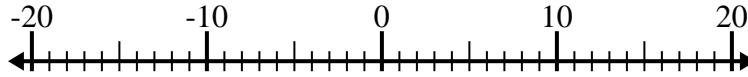
4) $(-1) + 8 =$ _____



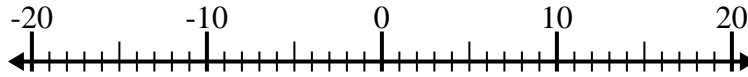
5) $(-12) + 6 =$ _____



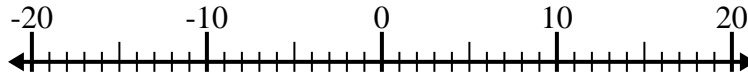
6) $(-4) + (-12) =$ _____



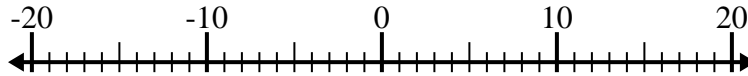
7) $(-9) - (-7) =$ _____



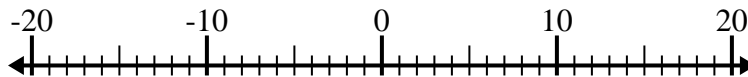
8) $1 - (-2) =$ _____



9) $1 + (-13) =$ _____



10) $14 + (-12) =$ _____

Antworten

1. _____

2. _____

3. _____

4. _____

5. _____

6. _____

7. _____

8. _____

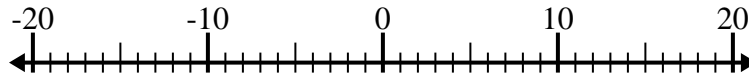
9. _____

10. _____

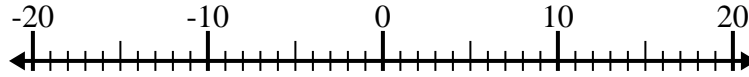


Löse jede Aufgabe. Benutze den Zahlenstrahl, falls du ihn brauchst.

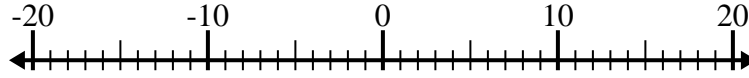
1) $(-10) - 4 = \underline{-14}$



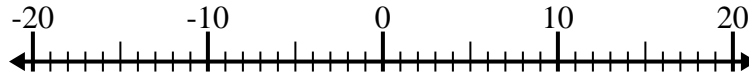
2) $6 - (-4) = \underline{10}$



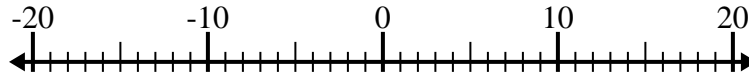
3) $5 - (-2) = \underline{7}$



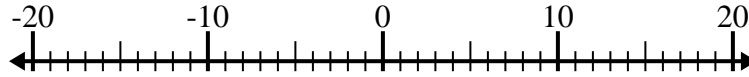
4) $(-1) + 8 = \underline{7}$



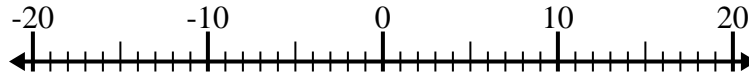
5) $(-12) + 6 = \underline{-6}$



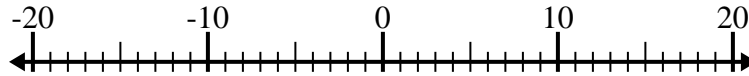
6) $(-4) + (-12) = \underline{-16}$



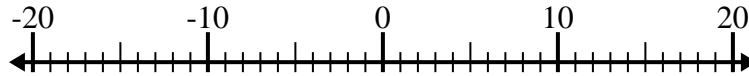
7) $(-9) - (-7) = \underline{-2}$



8) $1 - (-2) = \underline{3}$



9) $1 + (-13) = \underline{-12}$



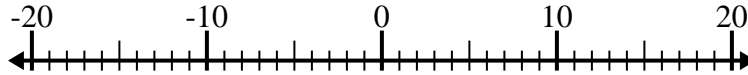
10) $14 + (-12) = \underline{2}$

**Antworten**1. **-14**2. **10**3. **7**4. **7**5. **-6**6. **-16**7. **-2**8. **3**9. **-12**10. **2**

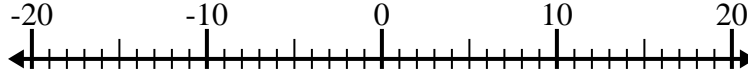


Löse jede Aufgabe. Benutze den Zahlenstrahl, falls du ihn brauchst.

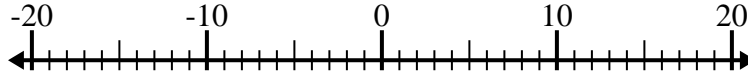
1) $(-9) + (-3) =$ _____



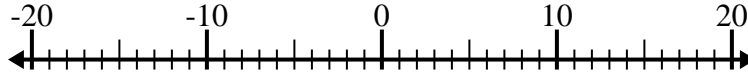
2) $(-11) - 1 =$ _____



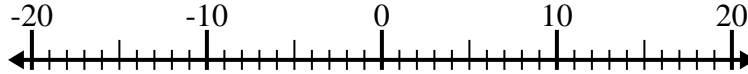
3) $11 + (-4) =$ _____



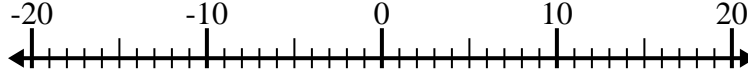
4) $(-4) + (-14) =$ _____



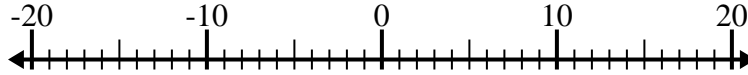
5) $(-11) - (-3) =$ _____



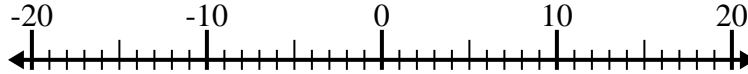
6) $(-5) - (-12) =$ _____



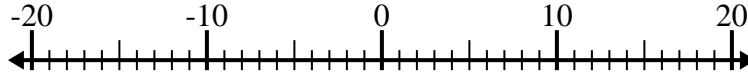
7) $6 - (-1) =$ _____



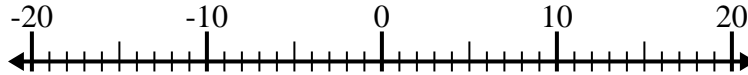
8) $(-8) - (-6) =$ _____



9) $2 + (-3) =$ _____



10) $1 - (-12) =$ _____



Antworten

1. _____

2. _____

3. _____

4. _____

5. _____

6. _____

7. _____

8. _____

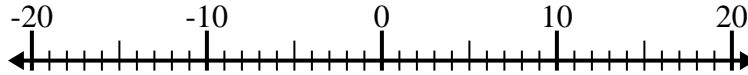
9. _____

10. _____

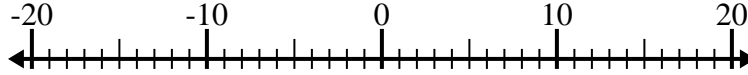


Löse jede Aufgabe. Benutze den Zahlenstrahl, falls du ihn brauchst.

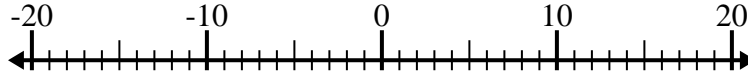
1) $(-9) + (-3) = \underline{-12}$



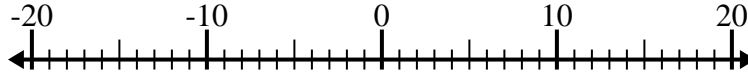
2) $(-11) - 1 = \underline{-12}$



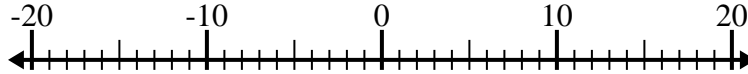
3) $11 + (-4) = \underline{7}$



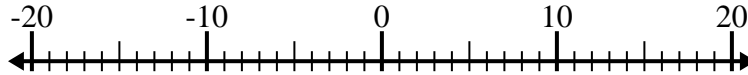
4) $(-4) + (-14) = \underline{-18}$



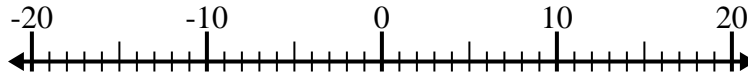
5) $(-11) - (-3) = \underline{-8}$



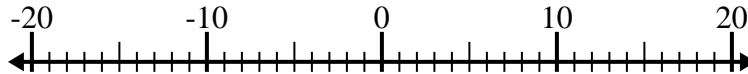
6) $(-5) - (-12) = \underline{7}$



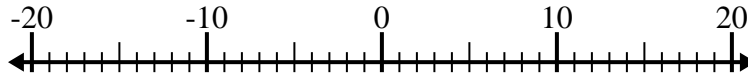
7) $6 - (-1) = \underline{7}$



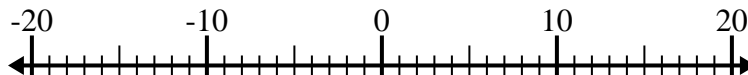
8) $(-8) - (-6) = \underline{-2}$



9) $2 + (-3) = \underline{-1}$



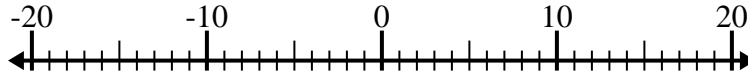
10) $1 - (-12) = \underline{13}$

Antworten1. -122. -123. 74. -185. -86. 77. 78. -29. -110. 13

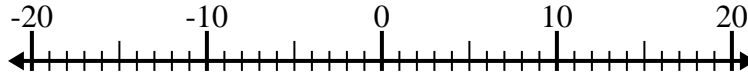


Löse jede Aufgabe. Benutze den Zahlenstrahl, falls du ihn brauchst.

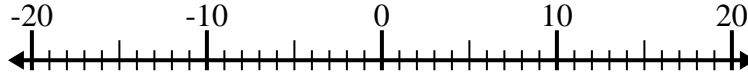
1) $5 - (-3) =$ _____



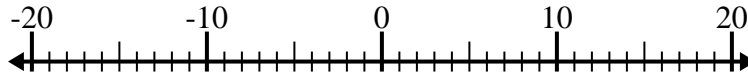
2) $6 + (-4) =$ _____



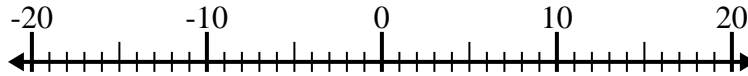
3) $(-3) + (-8) =$ _____



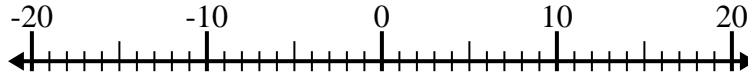
4) $13 + (-9) =$ _____



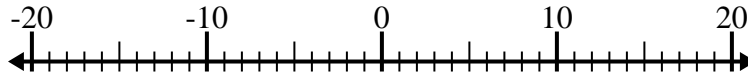
5) $(-5) + (-9) =$ _____



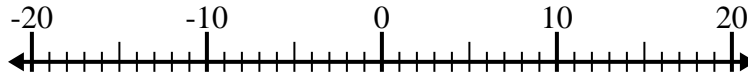
6) $(-15) + 9 =$ _____



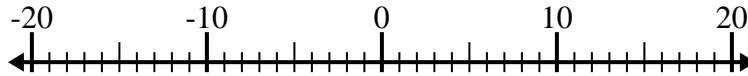
7) $7 - (-11) =$ _____



8) $(-4) - 7 =$ _____



9) $(-11) + 12 =$ _____



10) $(-15) - 2 =$ _____

**Antworten**

1. _____

2. _____

3. _____

4. _____

5. _____

6. _____

7. _____

8. _____

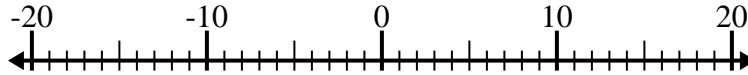
9. _____

10. _____

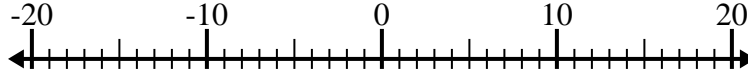


Löse jede Aufgabe. Benutze den Zahlenstrahl, falls du ihn brauchst.

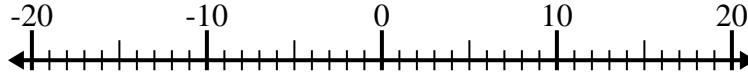
1) $5 - (-3) = \underline{8}$



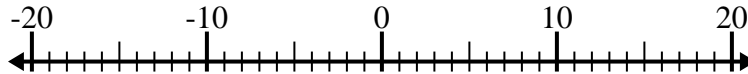
2) $6 + (-4) = \underline{2}$



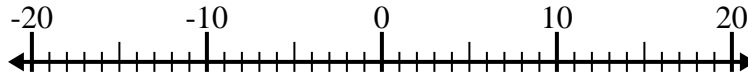
3) $(-3) + (-8) = \underline{-11}$



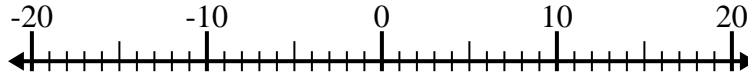
4) $13 + (-9) = \underline{4}$



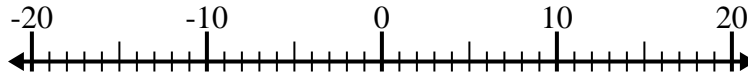
5) $(-5) + (-9) = \underline{-14}$



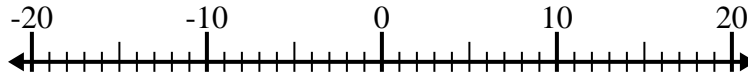
6) $(-15) + 9 = \underline{-6}$



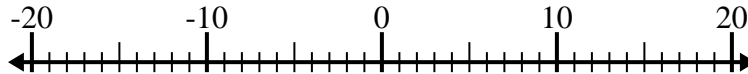
7) $7 - (-11) = \underline{18}$



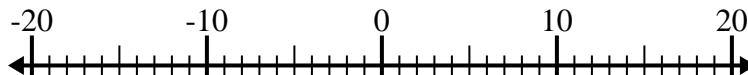
8) $(-4) - 7 = \underline{-11}$



9) $(-11) + 12 = \underline{1}$



10) $(-15) - 2 = \underline{-17}$

Antworten1. 82. 23. -114. 45. -146. -67. 188. -119. 110. -17