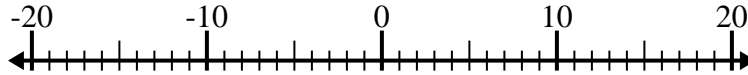


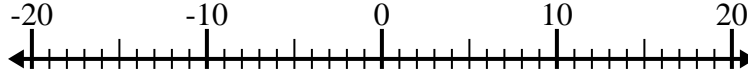


Löse jede Aufgabe. Benutze den Zahlenstrahl, falls du ihn brauchst.

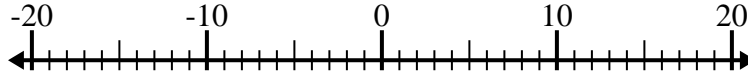
1) $(-9) + (-3) =$ _____



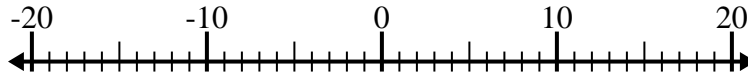
2) $(-11) - 1 =$ _____



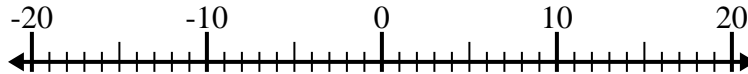
3) $11 + (-4) =$ _____



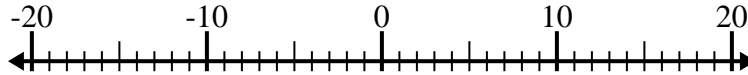
4) $(-4) + (-14) =$ _____



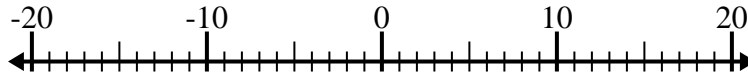
5) $(-11) - (-3) =$ _____



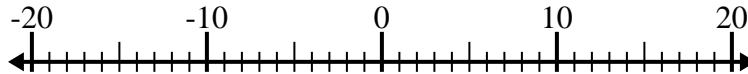
6) $(-5) - (-12) =$ _____



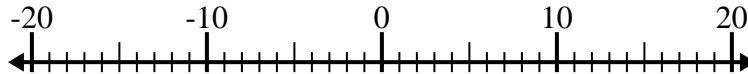
7) $6 - (-1) =$ _____



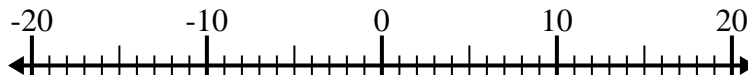
8) $(-8) - (-6) =$ _____



9) $2 + (-3) =$ _____



10) $1 - (-12) =$ _____

Antworten

1. _____

2. _____

3. _____

4. _____

5. _____

6. _____

7. _____

8. _____

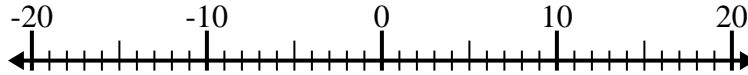
9. _____

10. _____

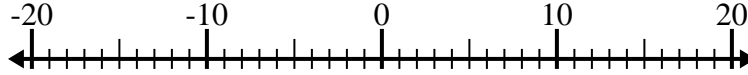


Löse jede Aufgabe. Benutze den Zahlenstrahl, falls du ihn brauchst.

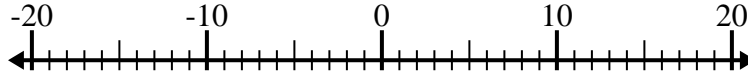
1) $(-9) + (-3) = \underline{-12}$



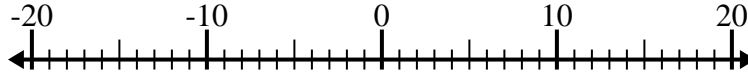
2) $(-11) - 1 = \underline{-12}$



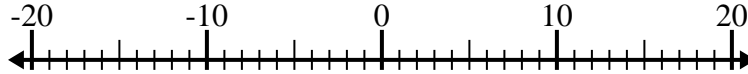
3) $11 + (-4) = \underline{7}$



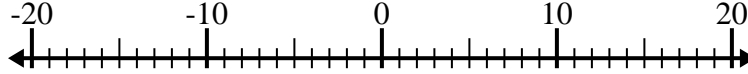
4) $(-4) + (-14) = \underline{-18}$



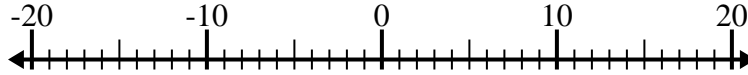
5) $(-11) - (-3) = \underline{-8}$



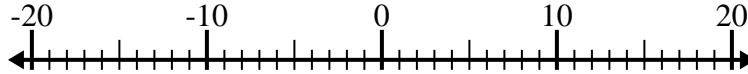
6) $(-5) - (-12) = \underline{7}$



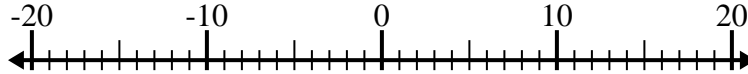
7) $6 - (-1) = \underline{7}$



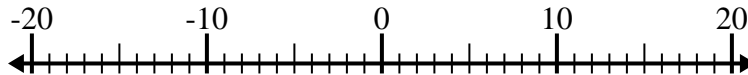
8) $(-8) - (-6) = \underline{-2}$



9) $2 + (-3) = \underline{-1}$



10) $1 - (-12) = \underline{13}$

Antworten1. -122. -123. 74. -185. -86. 77. 78. -29. -110. 13