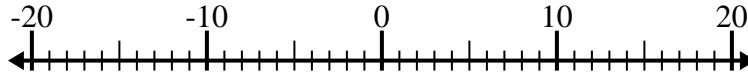


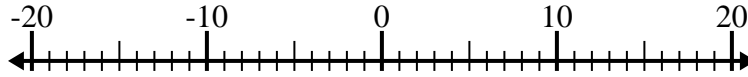


Löse jede Aufgabe. Benutze den Zahlenstrahl, falls du ihn brauchst.

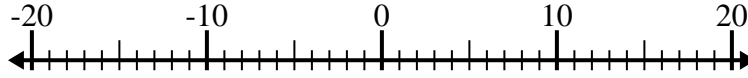
1) $(-10) - 4 =$ _____



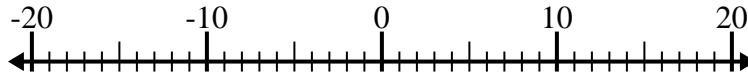
2) $6 - (-4) =$ _____



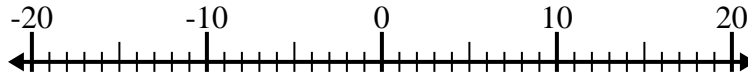
3) $5 - (-2) =$ _____



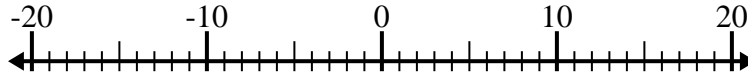
4) $(-1) + 8 =$ _____



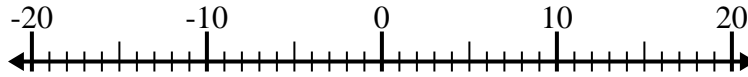
5) $(-12) + 6 =$ _____



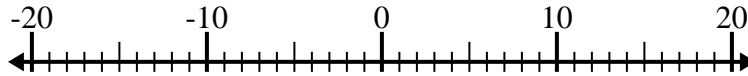
6) $(-4) + (-12) =$ _____



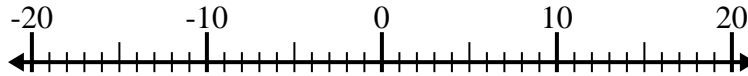
7) $(-9) - (-7) =$ _____



8) $1 - (-2) =$ _____



9) $1 + (-13) =$ _____



10) $14 + (-12) =$ _____



Antworten

1. _____

2. _____

3. _____

4. _____

5. _____

6. _____

7. _____

8. _____

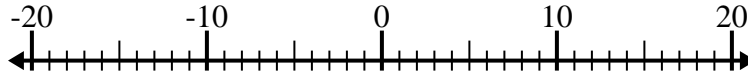
9. _____

10. _____

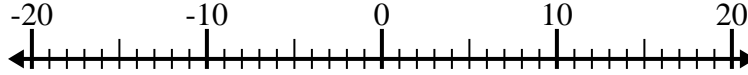


Löse jede Aufgabe. Benutze den Zahlenstrahl, falls du ihn brauchst.

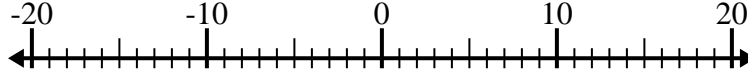
1) $(-10) - 4 = \underline{-14}$



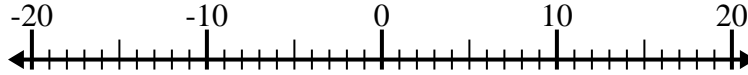
2) $6 - (-4) = \underline{10}$



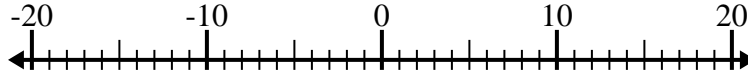
3) $5 - (-2) = \underline{7}$



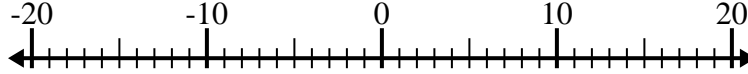
4) $(-1) + 8 = \underline{7}$



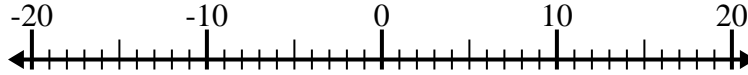
5) $(-12) + 6 = \underline{-6}$



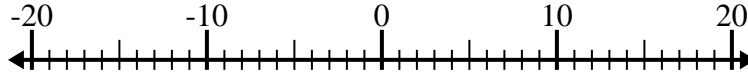
6) $(-4) + (-12) = \underline{-16}$



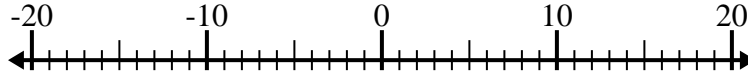
7) $(-9) - (-7) = \underline{-2}$



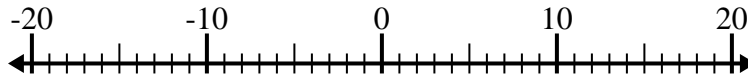
8) $1 - (-2) = \underline{3}$



9) $1 + (-13) = \underline{-12}$



10) $14 + (-12) = \underline{2}$



Antworten

1. -14

2. 10

3. 7

4. 7

5. -6

6. -16

7. -2

8. 3

9. -12

10. 2