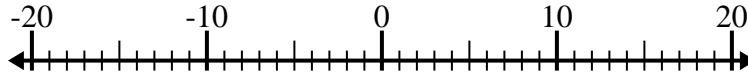


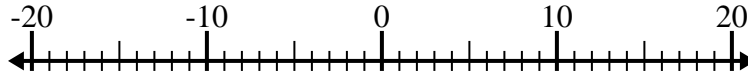


Löse jede Aufgabe. Benutze den Zahlenstrahl, falls du ihn brauchst.

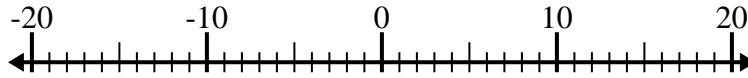
1) $12 - (-8) =$ _____



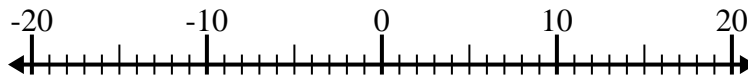
2) $(-2) - 3 =$ _____



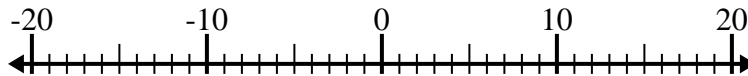
3) $7 - (-9) =$ _____



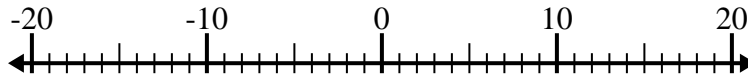
4) $11 - (-2) =$ _____



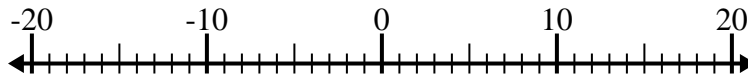
5) $6 - (-11) =$ _____



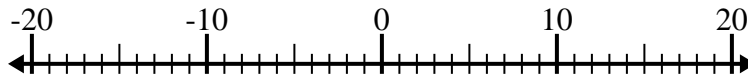
6) $(-3) + (-14) =$ _____



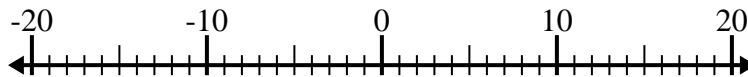
7) $(-5) - 4 =$ _____



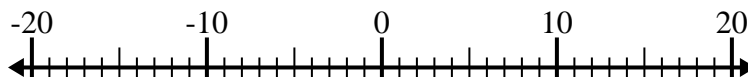
8) $(-15) + 4 =$ _____



9) $(-10) - (-13) =$ _____



10) $6 - (-12) =$ _____



Antworten

1. _____

2. _____

3. _____

4. _____

5. _____

6. _____

7. _____

8. _____

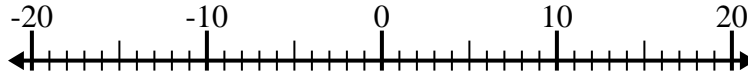
9. _____

10. _____

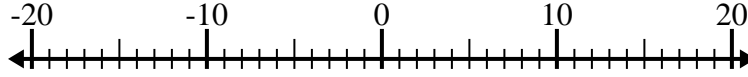


Löse jede Aufgabe. Benutze den Zahlenstrahl, falls du ihn brauchst.

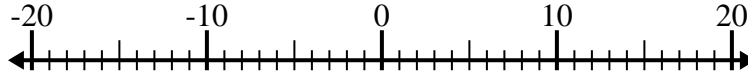
1) $12 - (-8) = \underline{20}$



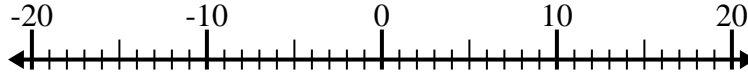
2) $(-2) - 3 = \underline{-5}$



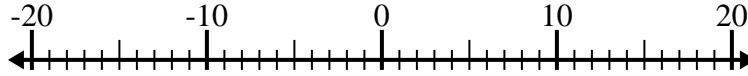
3) $7 - (-9) = \underline{16}$



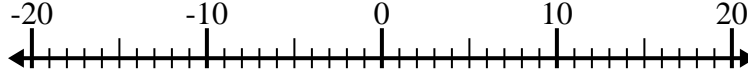
4) $11 - (-2) = \underline{13}$



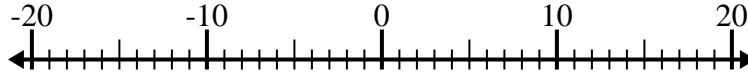
5) $6 - (-11) = \underline{17}$



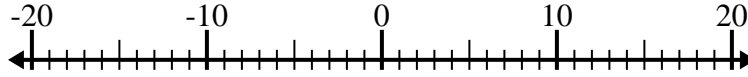
6) $(-3) + (-14) = \underline{-17}$



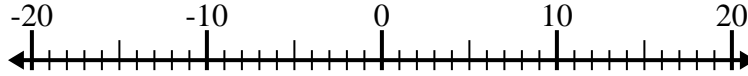
7) $(-5) - 4 = \underline{-9}$



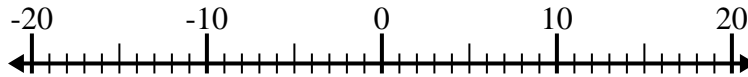
8) $(-15) + 4 = \underline{-11}$



9) $(-10) - (-13) = \underline{3}$



10) $6 - (-12) = \underline{18}$



Antworten

1. 20

2. -5

3. 16

4. 13

5. 17

6. -17

7. -9

8. -11

9. 3

10. 18